




**Determina quale lettera meglio rappresenta il volume.**

**Milliliter**

Un mililitro equivale a unas 20 gotas de agua.



**Liter**

Muchas botellas grandes de refrescos tienen 1 o 2 litros.

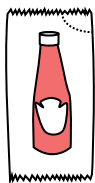
1 Liter = 1,000 Milliliters



**Risposte**

1. \_\_\_\_\_
2. \_\_\_\_\_
3. \_\_\_\_\_
4. \_\_\_\_\_
5. \_\_\_\_\_
6. \_\_\_\_\_
7. \_\_\_\_\_
8. \_\_\_\_\_
9. \_\_\_\_\_

1)



Ketchup in un pacchetto

- A. 1 milliliter
- B. 50 millilitri
- C. 1 litri
- D. 500 millilitri

2)



Colla in una bottiglia

- A. 120 millilitri
- B. 3 millilitri
- C. 2 litri
- D. 5 litri

3)



Farina in padella di brownies

- A. 3 litri
- B. 10 millilitri
- C. 16 litri
- D. 0.5 litri

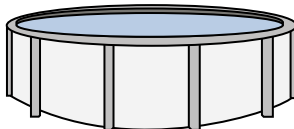
4)



Sabbia in un secchio

- A. 1 milliliter
- B. 20 litri
- C. 4 litri
- D. 4 millilitri

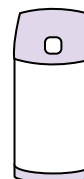
5)



Acqua in piscina

- A. 12000 millilitri
- B. 800 litri
- C. 12000 litri
- D. 800 millilitri


6)



Liquido in un thermos

- A. 440 millilitri
- B. 20 litri
- C. 3 litri
- D. 20 millilitri


7)



Serbatoio di benzina in un'auto

- A. 15 millilitri
- B. 60 litri
- C. 3 litri
- D. 70 millilitri

8)



Sabbia tiene una carriola

- A. 50 millilitri
- B. 170 litri
- C. 500 millilitri
- D. 3 litri

9)



Soda in lattina

- A. 350 litri
- B. 2 litri
- C. 2 millilitri
- D. 350 millilitri



Determina quale lettera meglio rappresenta il volume.

**Milliliter**

Un mililitro equivale a unas 20 gotas de agua.

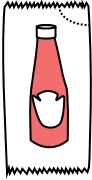
**Liter**

Muchas botellas grandes de refrescos tienen 1 o 2 litros.

1 Liter = 1,000 Milliliters

**Risposte**1.   **A**  2.   **A**  3.   **D**  4.   **C**  5.   **C**  6.   **A**  7.   **B**  8.   **B**  9.   **D**  

1)



Ketchup in un pacchetto

- A. 1 milliliter
- B. 50 millilitri
- C. 1 litri
- D. 500 millilitri

2)



Colla in una bottiglia

- A. 120 millilitri
- B. 3 millilitri
- C. 2 litri
- D. 5 litri

3)



Farina in padella di brownies

- A. 3 litri
- B. 10 millilitri
- C. 16 litri
- D. 0.5 litri

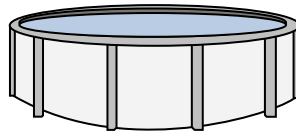
4)



Sabbia in un secchio

- A. 1 milliliter
- B. 20 litri
- C. 4 litri
- D. 4 millilitri


5)



Acqua in piscina

- A. 12000 millilitri
- B. 800 litri
- C. 12000 litri
- D. 800 millilitri


6)



Liquido in un thermos

- A. 440 millilitri
- B. 20 litri
- C. 3 litri
- D. 20 millilitri


7)



Serbatoio di benzina in un'auto

- A. 15 millilitri
- B. 60 litri
- C. 3 litri
- D. 70 millilitri

8)



Sabbia tiene una carriola

- A. 50 millilitri
- B. 170 litri
- C. 500 millilitri
- D. 3 litri

9)



Soda in lattina

- A. 350 litri
- B. 2 litri
- C. 2 millilitri
- D. 350 millilitri