


**Determina quale lettera meglio rappresenta il volume.****Risposte****Milliliter**

Un mililitro equivale a unas 20 gotas de agua.

**Liter**

Muchas botellas grandes de refrescos tienen 1 o 2 litros.

1 Liter = 1,000 Milliliters



1. _____

2. _____

3. _____

4. _____

5. _____

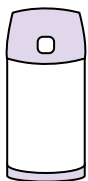
6. _____

7. _____

8. _____

9. _____

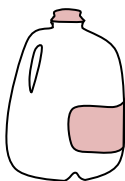
1)



Liquido in un thermos

- A. 20 litri
- B. 3 litri
- C. 440 millilitri
- D. 20 millilitri

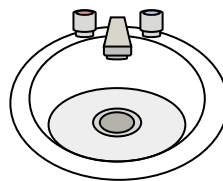
2)



Gallone di latte

- A. 1 litri
- B. 3.75 litri
- C. 50 millilitri
- D. 750 millilitri

3)



Acqua nel lavandino del bagno

- A. 500 millilitri
- B. 10 millilitri
- C. 7.5 litri
- D. 2 litri


4)



Misurino

- A. 50 millilitri
- B. 237 millilitri
- C. 1 litri
- D. 237 litri

5)



Soda in lattina

- A. 2 litri
- B. 350 millilitri
- C. 350 litri
- D. 2 millilitri

6)



Acqua per una pianta da appartamento

- A. 2 millilitri
- B. 80 litri
- C. 500 millilitri
- D. 3 litri

7)



Caffetteria Latte

- A. 237 litri
- B. 1 litri
- C. 237 millilitri
- D. 2 litri

8)



Inchiostro in una penna

- A. 2 millilitri
- B. 0.25 millilitri
- C. 1 litri
- D. 400 millilitri

9)



Liquido in una tazza da tè

- A. 2 millilitri
- B. 250 millilitri
- C. 2 litri
- D. 5 litri



Determina quale lettera meglio rappresenta il volume.

Milliliter

Un millilitro equivale a unas 20 gotas de agua.

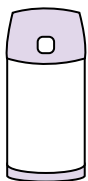
**Liter**

Muchas botellas grandes de refrescos tienen 1 o 2 litros.

1 Liter = 1,000 Milliliters

**Risposte**1. **C**2. **B**3. **C**4. **B**5. **B**6. **C**7. **C**8. **B**9. **B**

1)



Liquido in un thermos

- A. 20 litri
- B. 3 litri
- C. 440 millilitri
- D. 20 millilitri

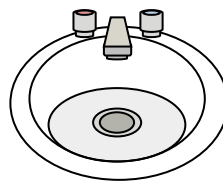
2)



Gallone di latte

- A. 1 litri
- B. 3.75 litri
- C. 50 millilitri
- D. 750 millilitri

3)



Acqua nel lavandino del bagno

- A. 500 millilitri
- B. 10 millilitri
- C. 7.5 litri
- D. 2 litri


4)



Misurino

- A. 50 millilitri
- B. 237 millilitri
- C. 1 litri
- D. 237 litri

5)



Soda in lattina

- A. 2 litri
- B. 350 millilitri
- C. 350 litri
- D. 2 millilitri

6)



Acqua per una pianta da appartamento

- A. 2 millilitri
- B. 80 litri
- C. 500 millilitri
- D. 3 litri

7)



Caffetteria Latte

- A. 237 litri
- B. 1 litri
- C. 237 millilitri
- D. 2 litri

8)



Inchiostro in una penna

- A. 2 millilitri
- B. 0.25 millilitri
- C. 1 litri
- D. 400 millilitri

9)



Liquido in una tazza da tè

- A. 2 millilitri
- B. 250 millilitri
- C. 2 litri
- D. 5 litri