

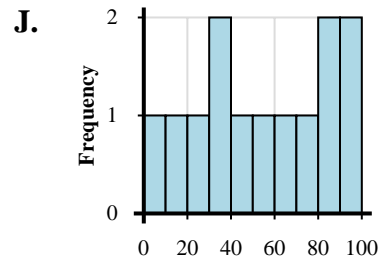
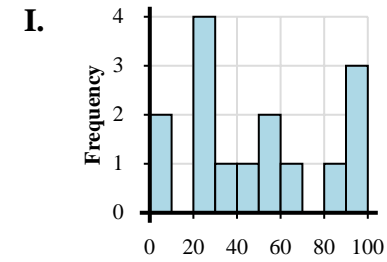
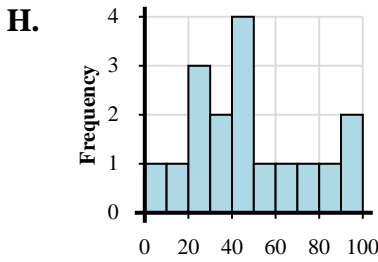
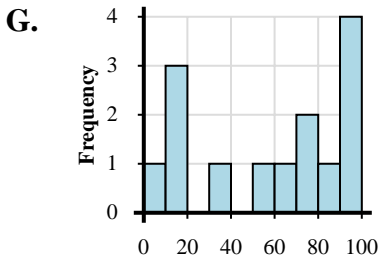
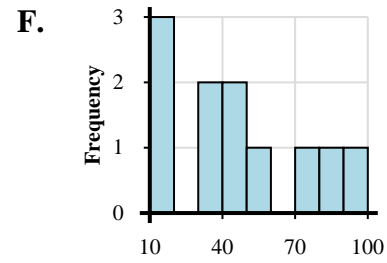
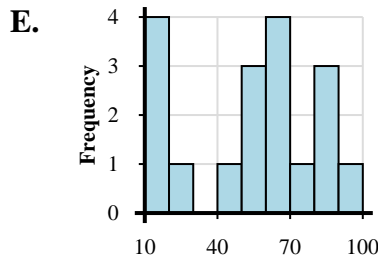
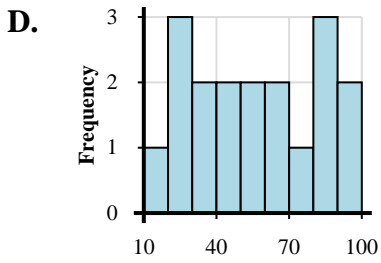
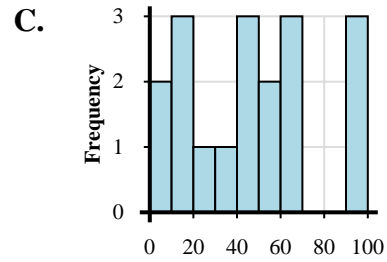
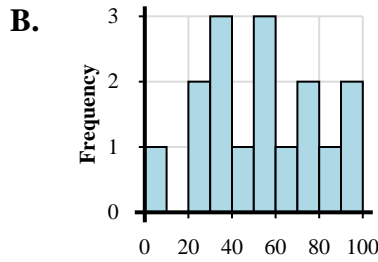
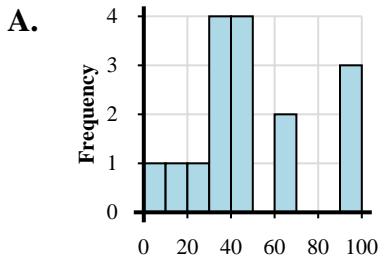


Abbina ogni set di dati al relativo istogramma.

Risposte

- 1) 17, 1, 16, 13, 36, 56, 71, 60, 74, 97, 99, 91, 81, 96
- 2) 15, 30, 28, 29, 28, 33, 44, 52, 44, 55, 69, 63, 74, 83, 98, 89, 90, 81
- 3) 2, 16, 18, 17, 6, 30, 23, 45, 56, 40, 56, 45, 60, 63, 62, 98, 97, 92
- 4) 2, 18, 33, 34, 23, 48, 53, 66, 71, 93, 94, 83, 87
- 5) 3, 11, 21, 32, 31, 39, 39, 45, 48, 40, 45, 68, 60, 95, 92, 95
- 6) 8, 23, 34, 21, 33, 35, 43, 51, 55, 54, 65, 70, 78, 82, 97, 90
- 7) 14, 17, 18, 18, 21, 52, 54, 40, 52, 66, 63, 67, 77, 60, 87, 88, 93, 82
- 8) 18, 16, 13, 33, 35, 56, 41, 48, 76, 82, 91
- 9) 3, 13, 23, 35, 20, 24, 30, 45, 43, 40, 51, 43, 78, 60, 81, 93, 94
- 10) 1, 3, 26, 30, 24, 22, 26, 50, 45, 55, 62, 85, 96, 94, 97

- 1. _____
- 2. _____
- 3. _____
- 4. _____
- 5. _____
- 6. _____
- 7. _____
- 8. _____
- 9. _____
- 10. _____





Abbina ogni set di dati al relativo istogramma.

- 1) 17, 1, 16, 13, 36, 56, 71, 60, 74, 97, 99, 91, 81, 96
- 2) 15, 30, 28, 29, 28, 33, 44, 52, 44, 55, 69, 63, 74, 83, 98, 89, 90, 81
- 3) 2, 16, 18, 17, 6, 30, 23, 45, 56, 40, 56, 45, 60, 63, 62, 98, 97, 92
- 4) 2, 18, 33, 34, 23, 48, 53, 66, 71, 93, 94, 83, 87
- 5) 3, 11, 21, 32, 31, 39, 39, 45, 48, 40, 45, 68, 60, 95, 92, 95
- 6) 8, 23, 34, 21, 33, 35, 43, 51, 55, 54, 65, 70, 78, 82, 97, 90
- 7) 14, 17, 18, 18, 21, 52, 54, 40, 52, 66, 63, 67, 77, 60, 87, 88, 93, 82
- 8) 18, 16, 13, 33, 35, 56, 41, 48, 76, 82, 91
- 9) 3, 13, 23, 35, 20, 24, 30, 45, 43, 40, 51, 43, 78, 60, 81, 93, 94
- 10) 1, 3, 26, 30, 24, 22, 26, 50, 45, 55, 62, 85, 96, 94, 97

Risposte

1. **G**
2. **D**
3. **C**
4. **J**
5. **A**
6. **B**
7. **E**
8. **F**
9. **H**
10. **I**

