

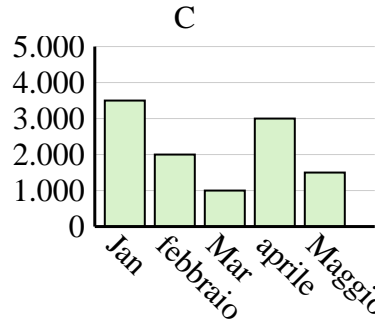
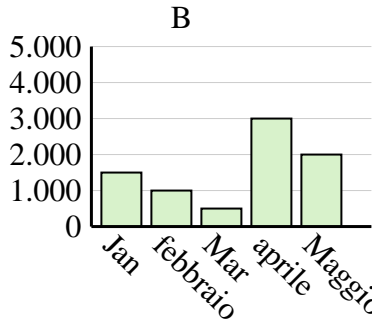
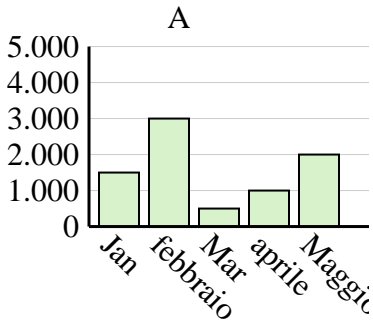


Determina quale grafico (A, B o C) rappresenta meglio le informazioni date nella tabella

Risposte

1)

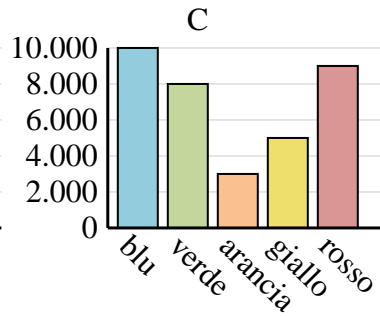
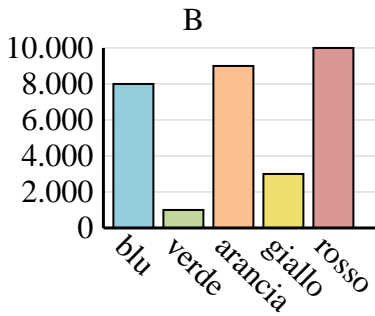
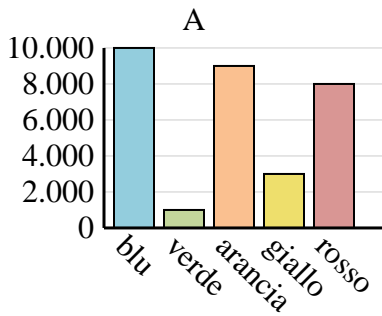
Saldi	Jan	febbraio	Mar	aprile	Maggio
Mese	3.500	2.000	1.000	3.000	1.500



1. _____
2. _____
3. _____
4. _____

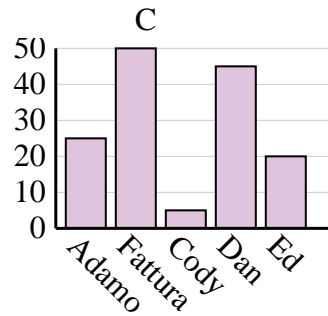
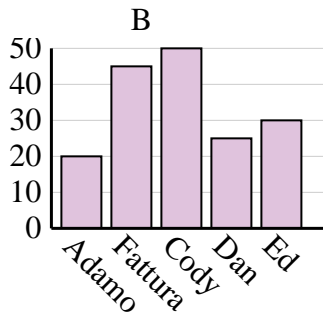
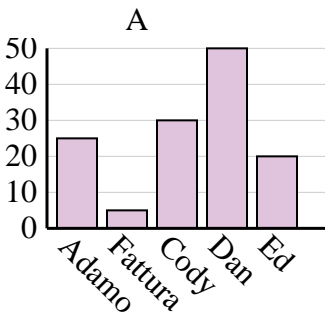
2)

Colore preferito	blu	verde	arancia	giallo	rosso
Le persone	10.000	1.000	9.000	3.000	8.000



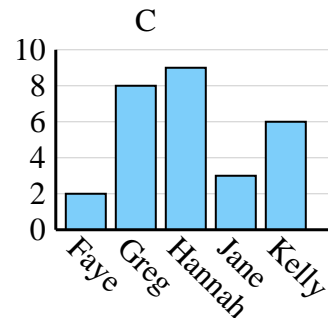
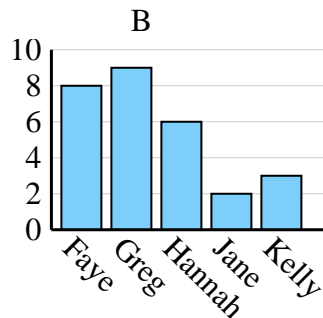
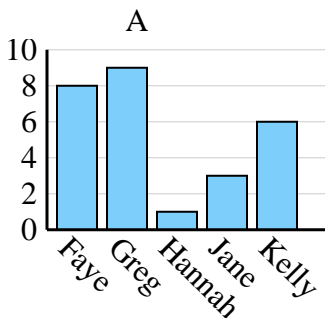
3)

Nome	Adamo	Fattura	Cody	Dan	Ed
Punti	25	5	30	50	20



4)

Nome	Faye	Greg	Hannah	Jane	Kelly
Stati in cui vivevano	8	9	1	3	6



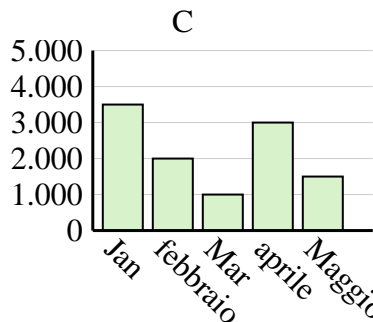
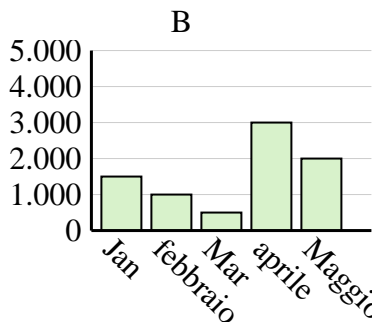
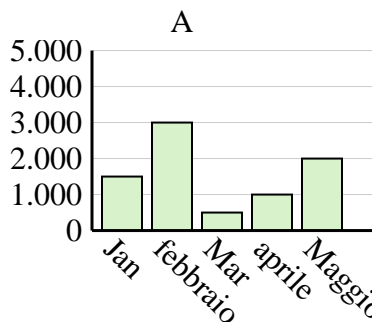


Determina quale grafico (A, B o C) rappresenta meglio le informazioni date nella tabella

Risposte

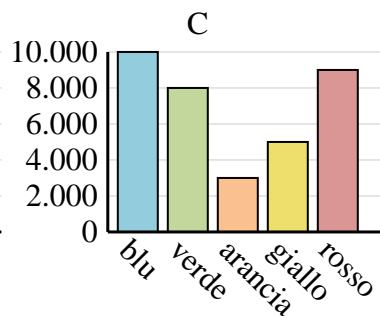
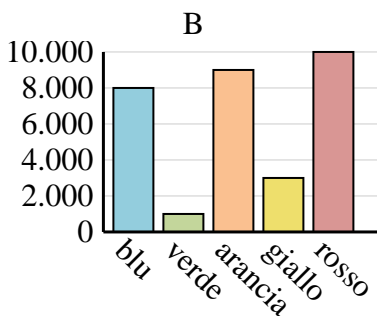
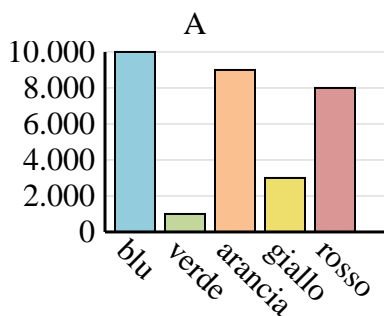
1)

Saldi	Jan	febbraio	Mar	aprile	Maggio
Mese	3.500	2.000	1.000	3.000	1.500



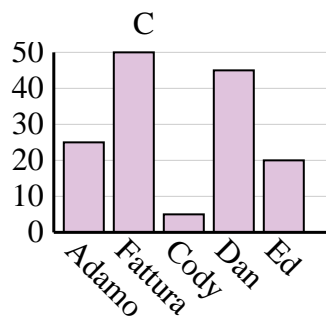
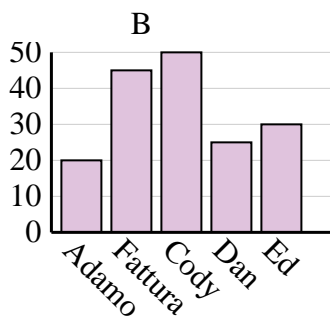
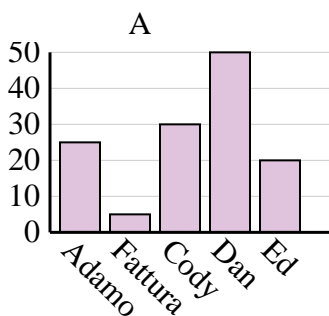
2)

Colore preferito	blu	verde	arancia	giallo	rosso
Le persone	10.000	1.000	9.000	3.000	8.000



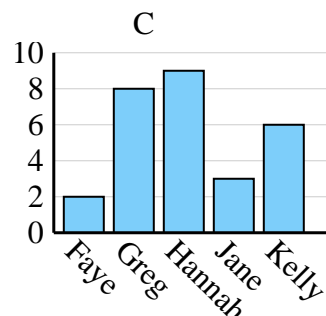
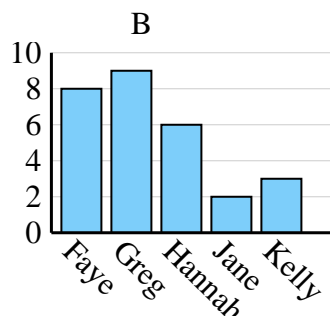
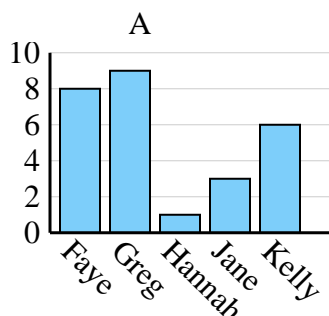
3)

Nome	Adamo	Fattura	Cody	Dan	Ed
Punti	25	5	30	50	20



4)

Nome	Faye	Greg	Hannah	Jane	Kelly
Stati in cui vivevano	8	9	1	3	6



1. **C**
2. **A**
3. **A**
4. **A**