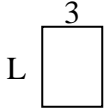


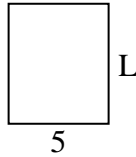


Determina il valore di 'P'.

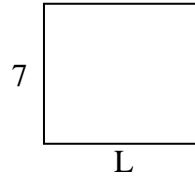
1) Perimetro = 14



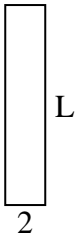
2) Perimetro = 22



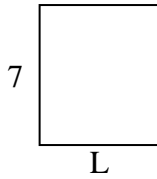
3) Perimetro = 30



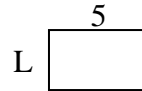
4) Perimetro = 24



5) Perimetro = 26




6) Perimetro = 16



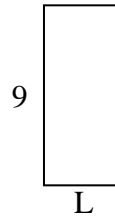
7) Perimetro = 16



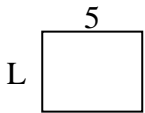
8) Perimetro = 32



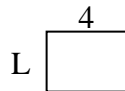
9) Perimetro = 26



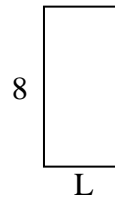
10) Perimetro = 18



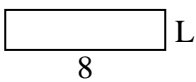
11) Perimetro = 14



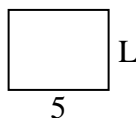
12) Perimetro = 24



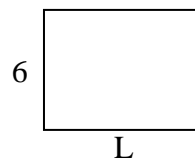
13) Perimetro = 20



14) Perimetro = 18



15) Perimetro = 28



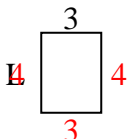
Risposte

1. _____
2. _____
3. _____
4. _____
5. _____
6. _____
7. _____
8. _____
9. _____
10. _____
11. _____
12. _____
13. _____
14. _____
15. _____

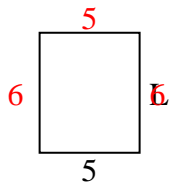


Determina il valore di 'P'.

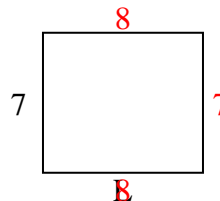
1) Perimetro = 14



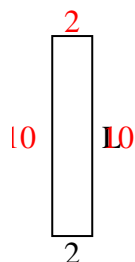
2) Perimetro = 22



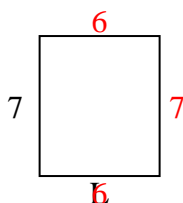
3) Perimetro = 30



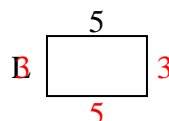
4) Perimetro = 24



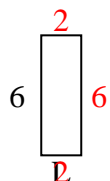
5) Perimetro = 26



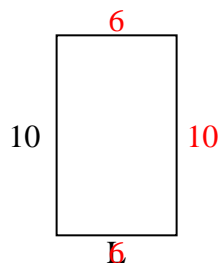
6) Perimetro = 16



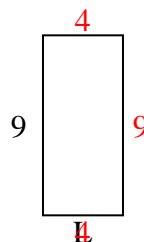
7) Perimetro = 16



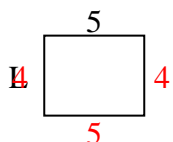
8) Perimetro = 32



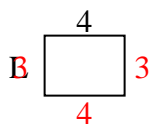
9) Perimetro = 26



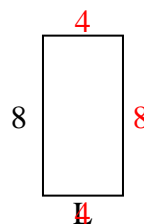
10) Perimetro = 18



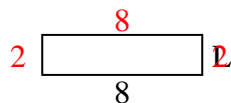
11) Perimetro = 14



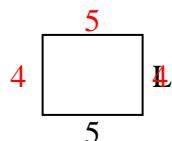
12) Perimetro = 24



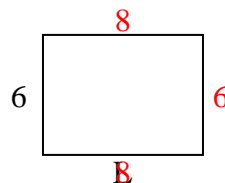
13) Perimetro = 20



14) Perimetro = 18



15) Perimetro = 28

**Risposte**1. 4 cm2. 6 cm3. 8 cm4. 10 cm5. 6 cm6. 3 cm7. 2 cm8. 6 cm9. 4 cm10. 4 cm11. 3 cm12. 4 cm13. 2 cm14. 4 cm15. 8 cm