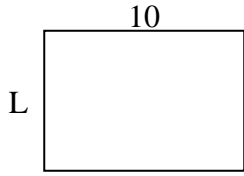


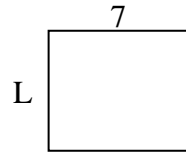


Determina il valore di 'P'.

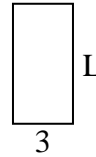
1) Perimetro = 34



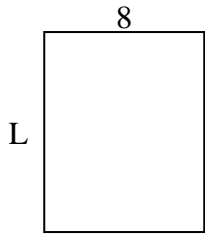
2) Perimetro = 26



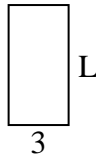
3) Perimetro = 18



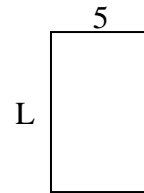
4) Perimetro = 36



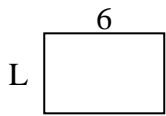
5) Perimetro = 18



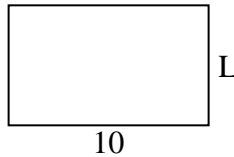
6) Perimetro = 26



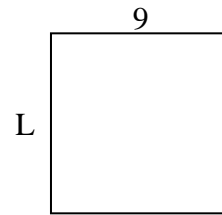
7) Perimetro = 20



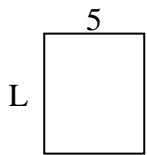
8) Perimetro = 32



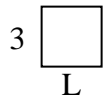
9) Perimetro = 36



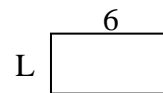
10) Perimetro = 22



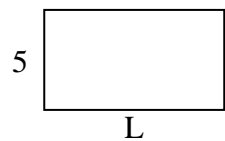
11) Perimetro = 12



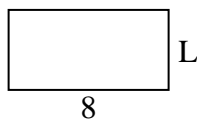
12) Perimetro = 18



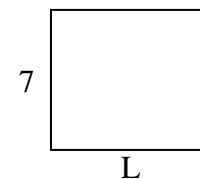
13) Perimetro = 28



14) Perimetro = 24



15) Perimetro = 30



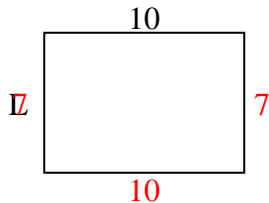
Risposte

1. _____
2. _____
3. _____
4. _____
5. _____
6. _____
7. _____
8. _____
9. _____
10. _____
11. _____
12. _____
13. _____
14. _____
15. _____

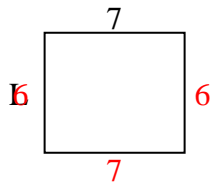


Determina il valore di 'P'.

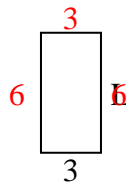
1) Perimetro = 34



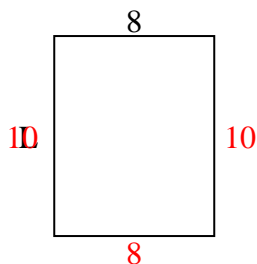
2) Perimetro = 26



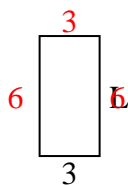
3) Perimetro = 18



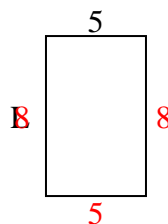
4) Perimetro = 36



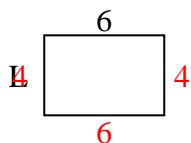
5) Perimetro = 18



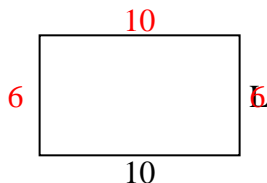
6) Perimetro = 26



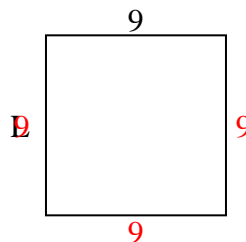
7) Perimetro = 20



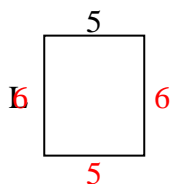
8) Perimetro = 32



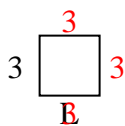
9) Perimetro = 36



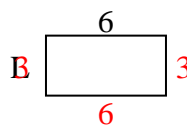
10) Perimetro = 22



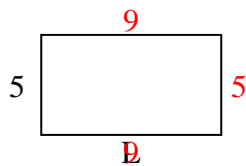
11) Perimetro = 12



12) Perimetro = 18



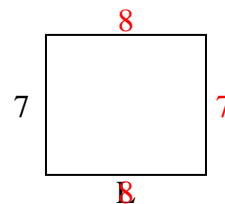
13) Perimetro = 28



14) Perimetro = 24



15) Perimetro = 30

**Risposte**1. 7 cm2. 6 cm3. 6 cm4. 10 cm5. 6 cm6. 8 cm7. 4 cm8. 6 cm9. 9 cm10. 6 cm11. 3 cm12. 3 cm13. 9 cm14. 4 cm15. 8 cm