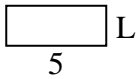
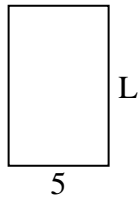


**Determina il valore di 'P'.****Risposte**

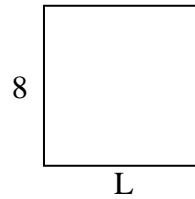
1) Perimetro = 14



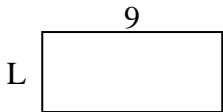
2) Perimetro = 26



3) Perimetro = 32



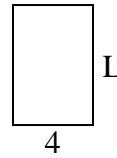
4) Perimetro = 26



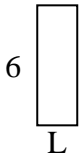
5) Perimetro = 16




6) Perimetro = 20



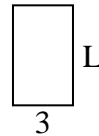
7) Perimetro = 16



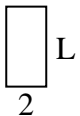
8) Perimetro = 24



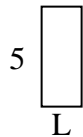
9) Perimetro = 16



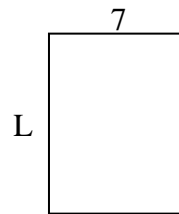
10) Perimetro = 12



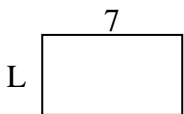
11) Perimetro = 14



12) Perimetro = 32



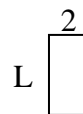
13) Perimetro = 22



14) Perimetro = 16



15) Perimetro = 12

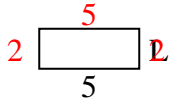


1. _____
2. _____
3. _____
4. _____
5. _____
6. _____
7. _____
8. _____
9. _____
10. _____
11. _____
12. _____
13. _____
14. _____
15. _____

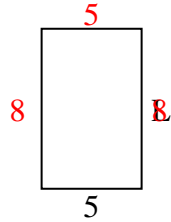


Determina il valore di 'P'.

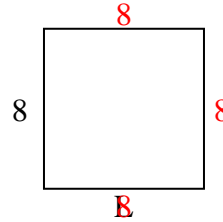
1) Perimetro = 14



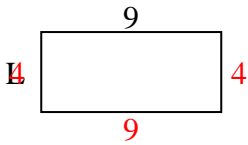
2) Perimetro = 26



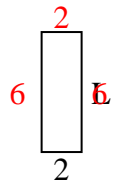
3) Perimetro = 32



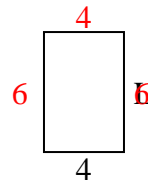
4) Perimetro = 26



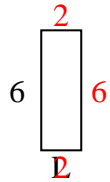
5) Perimetro = 16



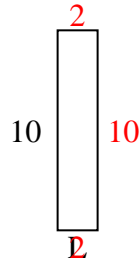
6) Perimetro = 20



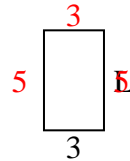
7) Perimetro = 16



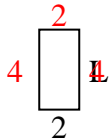
8) Perimetro = 24



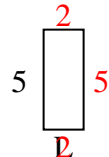
9) Perimetro = 16



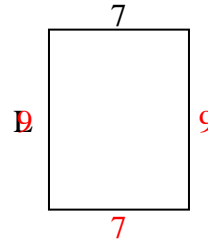
10) Perimetro = 12



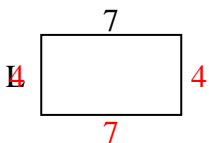
11) Perimetro = 14



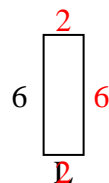
12) Perimetro = 32



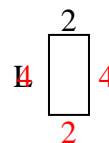
13) Perimetro = 22



14) Perimetro = 16



15) Perimetro = 12

**Risposte**1. **2 cm**2. **8 cm**3. **8 cm**4. **4 cm**5. **6 cm**6. **6 cm**7. **2 cm**8. **2 cm**9. **5 cm**10. **4 cm**11. **2 cm**12. **9 cm**13. **4 cm**14. **2 cm**15. **4 cm**