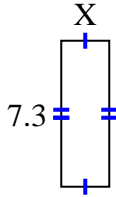


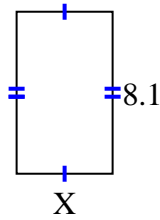


**Trova il valore di X per ogni cifra. Ogni cifra è in centimetri (cm). Non in scala.**

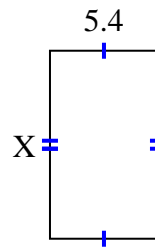
1) area =  $17,52 \text{ cm}^2$



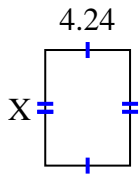
2) area =  $38,88 \text{ cm}^2$



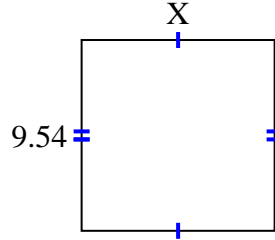
3) area =  $50,76 \text{ cm}^2$



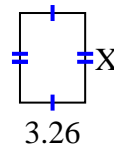
4) area =  $24,5072 \text{ cm}^2$



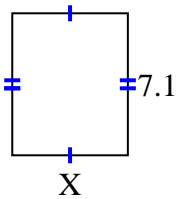
5) area =  $92,061 \text{ cm}^2$



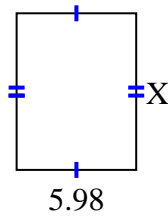
6) area =  $14,6048 \text{ cm}^2$



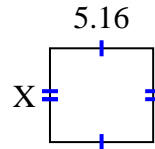
7) area =  $41,038 \text{ cm}^2$



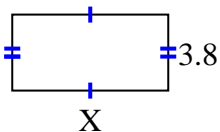
8) area =  $46,8234 \text{ cm}^2$



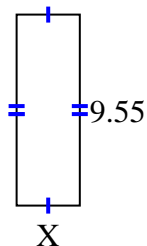
9) area =  $24,2004 \text{ cm}^2$



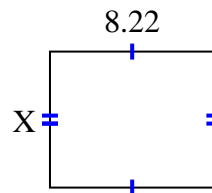
10) area =  $29,64 \text{ cm}^2$



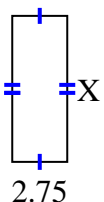
11) area =  $30,178 \text{ cm}^2$



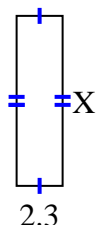
12) area =  $55,896 \text{ cm}^2$



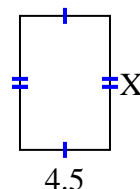
13) area =  $20,075 \text{ cm}^2$



14) area =  $19,55 \text{ cm}^2$



15) area =  $30,15 \text{ cm}^2$



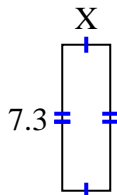
**Risposte**

1. \_\_\_\_\_
2. \_\_\_\_\_
3. \_\_\_\_\_
4. \_\_\_\_\_
5. \_\_\_\_\_
6. \_\_\_\_\_
7. \_\_\_\_\_
8. \_\_\_\_\_
9. \_\_\_\_\_
10. \_\_\_\_\_
11. \_\_\_\_\_
12. \_\_\_\_\_
13. \_\_\_\_\_
14. \_\_\_\_\_
15. \_\_\_\_\_

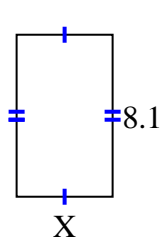


Trova il valore di X per ogni cifra. Ogni cifra è in centimetri (cm). Non in scala.

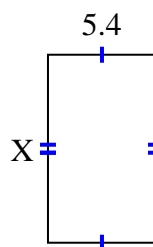
1) area =  $17,52 \text{ cm}^2$



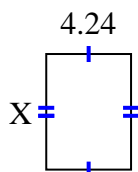
2) area =  $38,88 \text{ cm}^2$



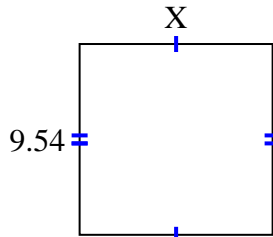
3) area =  $50,76 \text{ cm}^2$



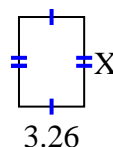
4) area =  $24,5072 \text{ cm}^2$



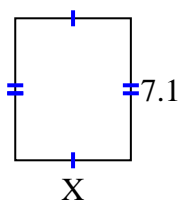
5) area =  $92,061 \text{ cm}^2$



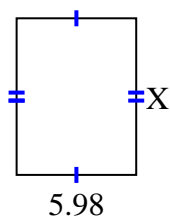
6) area =  $14,6048 \text{ cm}^2$



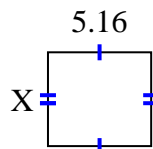
7) area =  $41,038 \text{ cm}^2$



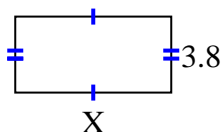
8) area =  $46,8234 \text{ cm}^2$



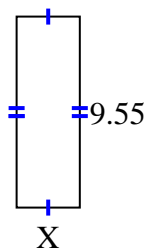
9) area =  $24,2004 \text{ cm}^2$



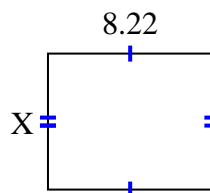
10) area =  $29,64 \text{ cm}^2$



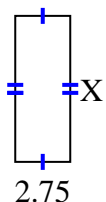
11) area =  $30,178 \text{ cm}^2$



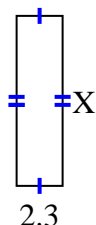
12) area =  $55,896 \text{ cm}^2$



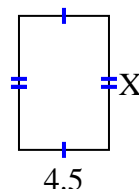
13) area =  $20,075 \text{ cm}^2$



14) area =  $19,55 \text{ cm}^2$



15) area =  $30,15 \text{ cm}^2$



**Risposte**

1. 2.4

2. 4.8

3. 9.4

4. 5.78

5. 9.65

6. 4.48

7. 5.78

8. 7.83

9. 4.69

10. 7.8

11. 3.16

12. 6.8

13. 7.3

14. 8.5

15. 6.7