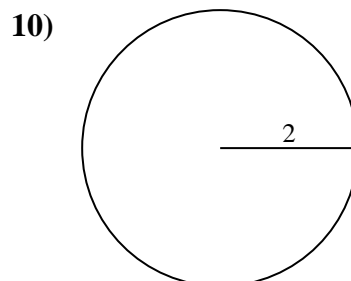
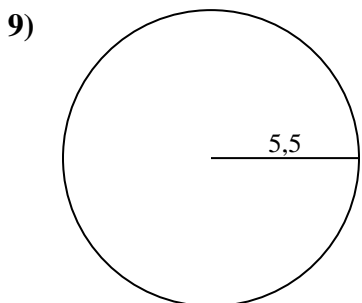
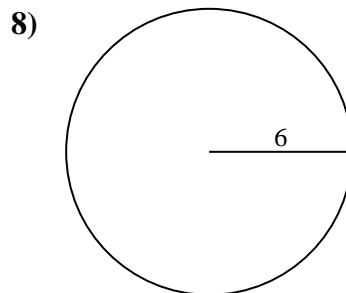
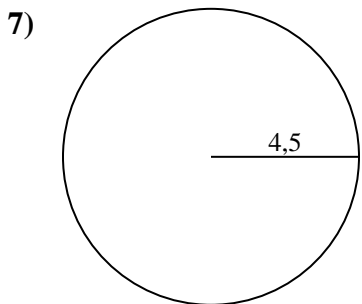
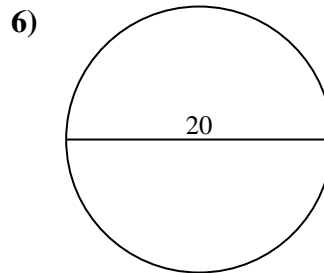
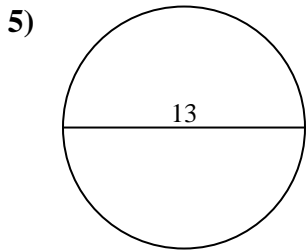
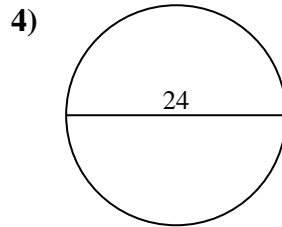
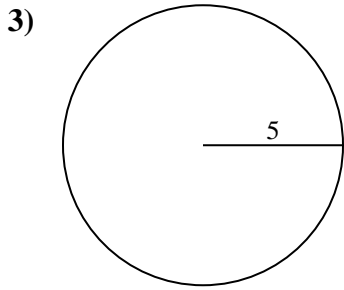
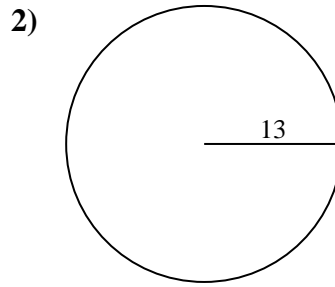
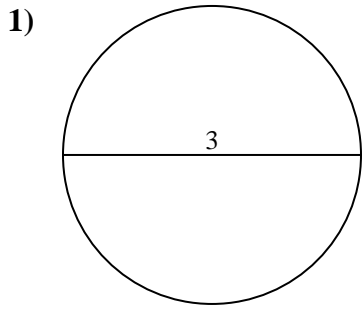




Calcola la circonferenza di ogni cerchio. I cerchi non sono da scalare.

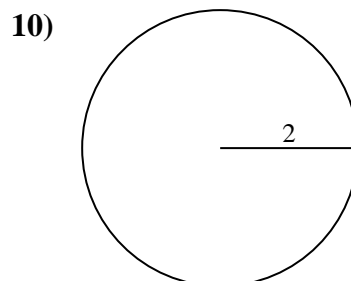
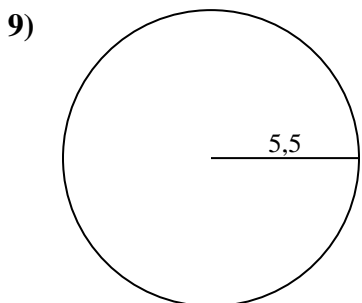
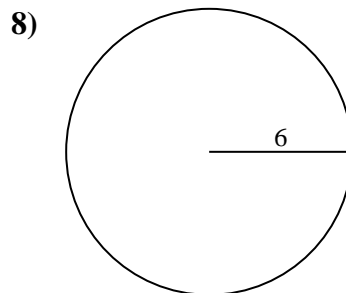
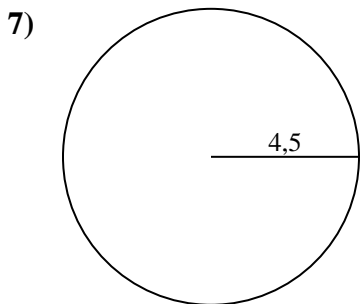
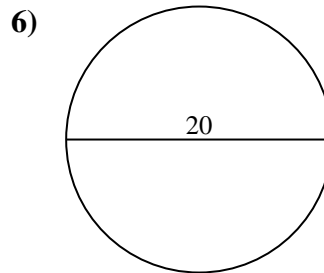
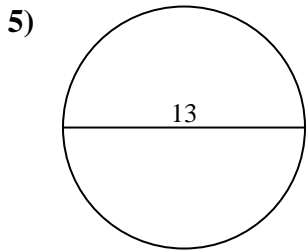
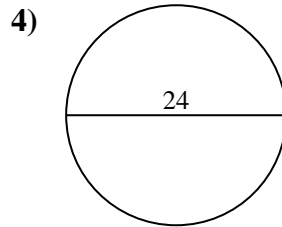
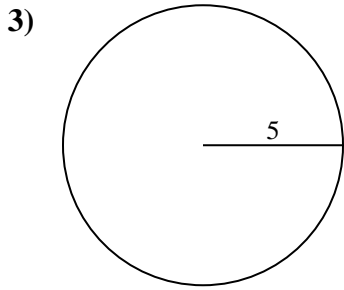
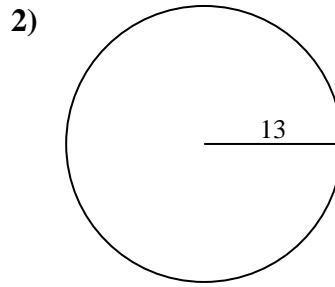
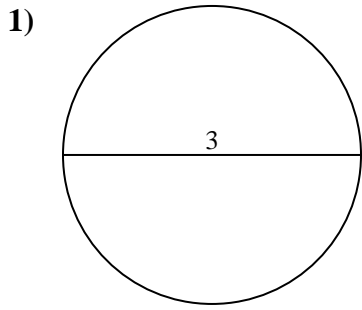


**Risposte**

- 1. \_\_\_\_\_
- 2. \_\_\_\_\_
- 3. \_\_\_\_\_
- 4. \_\_\_\_\_
- 5. \_\_\_\_\_
- 6. \_\_\_\_\_
- 7. \_\_\_\_\_
- 8. \_\_\_\_\_
- 9. \_\_\_\_\_
- 10. \_\_\_\_\_



Calcola la circonferenza di ogni cerchio. I cerchi non sono da scalare.

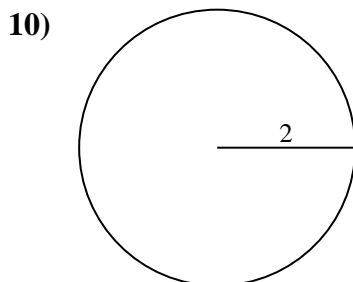
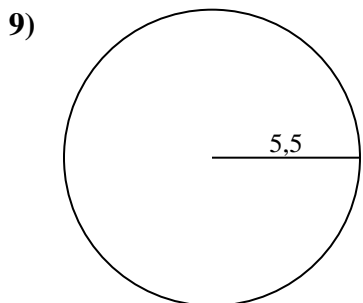
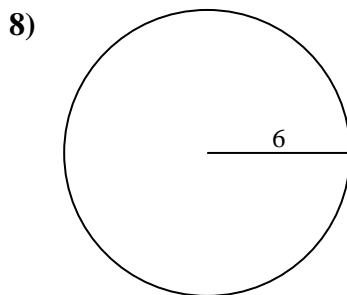
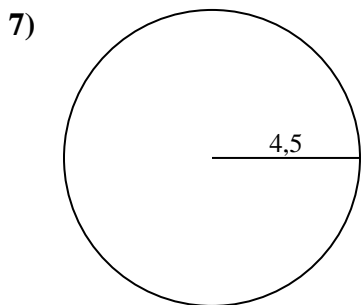
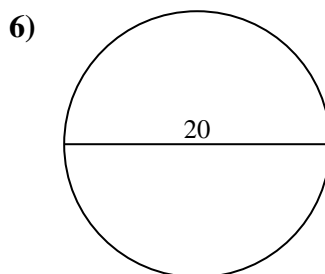
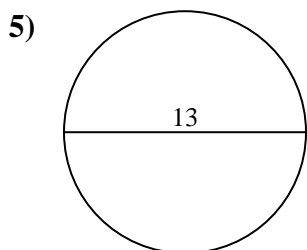
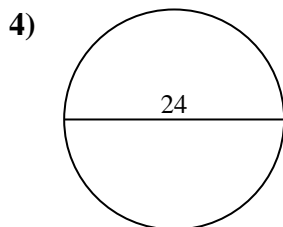
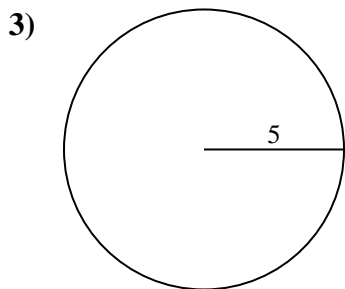
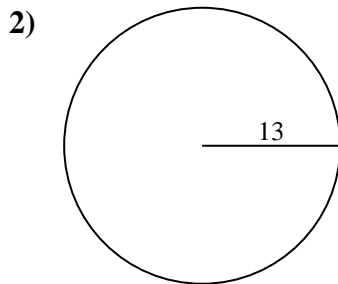
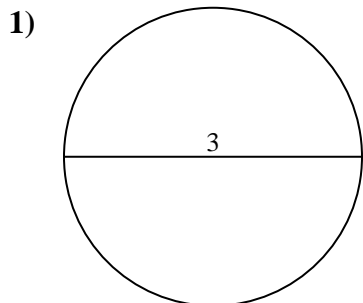
**Risposte**1. 9,42 cm2. 81,68 cm3. 31,42 cm4. 75,4 cm5. 40,84 cm6. 62,83 cm7. 28,27 cm8. 37,7 cm9. 34,56 cm10. 12,57 cm



Calcola la circonferenza di ogni cerchio. I cerchi non sono da scalare.

12,57 cm	28,27 cm	62,83 cm	34,56 cm	81,68 cm
9,42 cm	37,7 cm	75,4 cm	31,42 cm	40,84 cm

**Risposte**



- 1. \_\_\_\_\_
- 2. \_\_\_\_\_
- 3. \_\_\_\_\_
- 4. \_\_\_\_\_
- 5. \_\_\_\_\_
- 6. \_\_\_\_\_
- 7. \_\_\_\_\_
- 8. \_\_\_\_\_
- 9. \_\_\_\_\_
- 10. \_\_\_\_\_