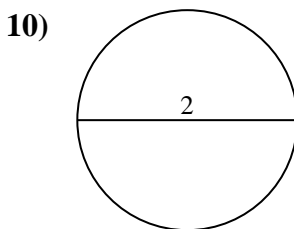
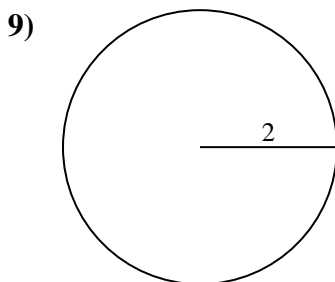
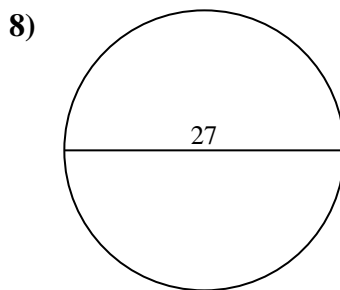
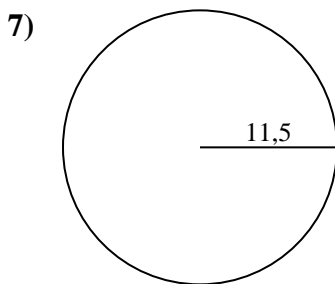
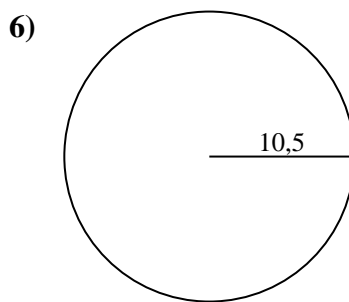
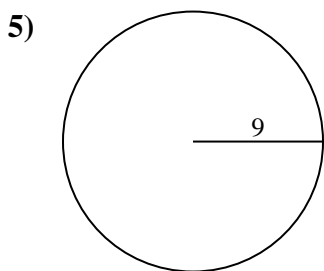
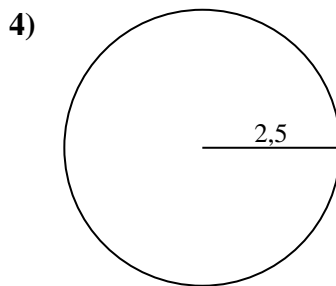
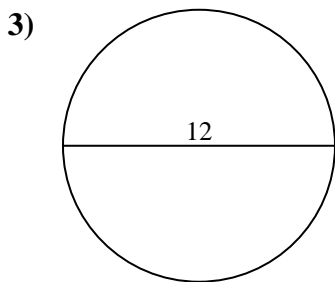
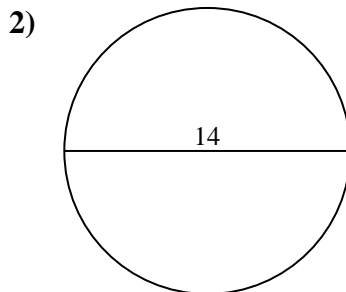
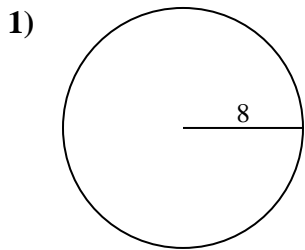




Calcola l'area di ogni cerchio. i cerchi non sono in scala.

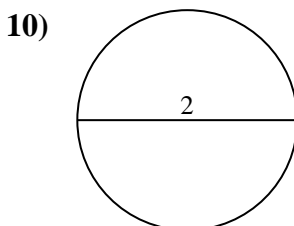
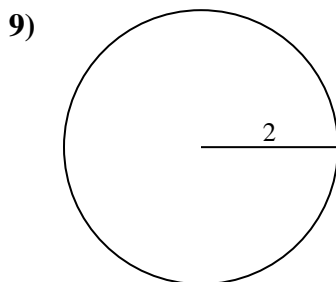
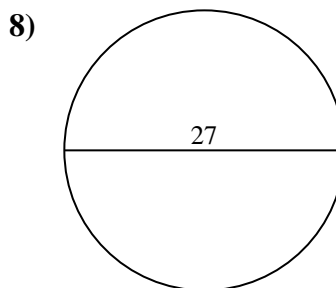
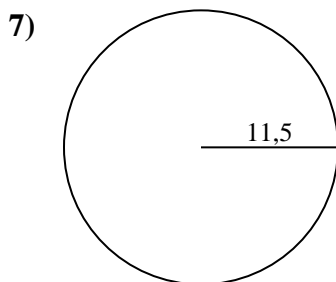
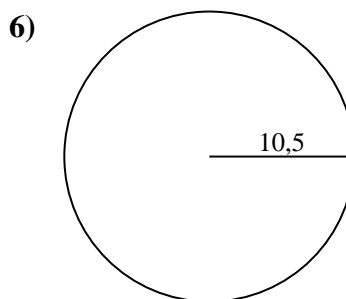
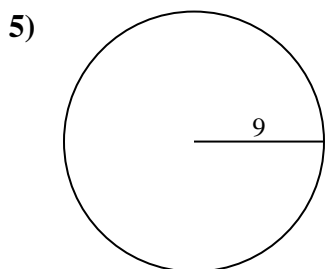
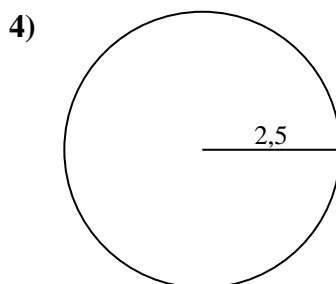
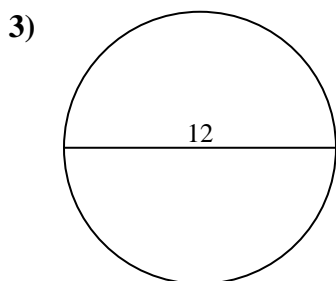
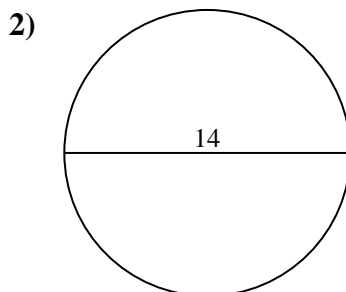
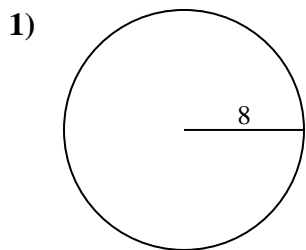


**Risposte**

- 1. \_\_\_\_\_
- 2. \_\_\_\_\_
- 3. \_\_\_\_\_
- 4. \_\_\_\_\_
- 5. \_\_\_\_\_
- 6. \_\_\_\_\_
- 7. \_\_\_\_\_
- 8. \_\_\_\_\_
- 9. \_\_\_\_\_
- 10. \_\_\_\_\_



Calcola l'area di ogni cerchio. i cerchi non sono in scala.

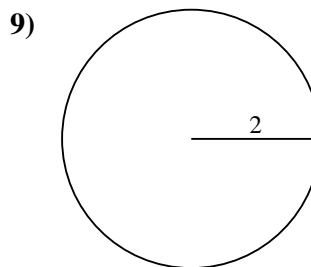
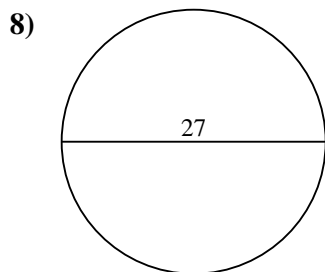
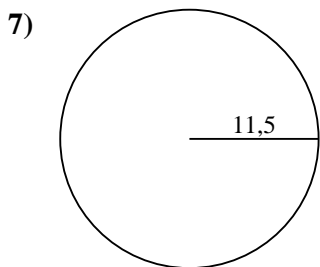
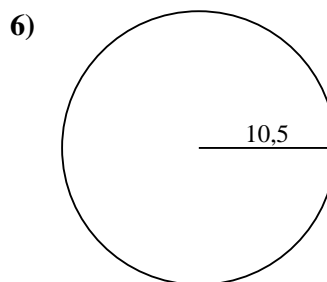
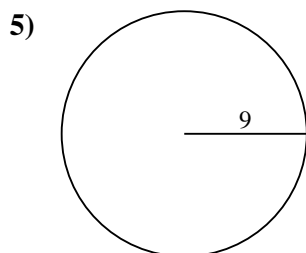
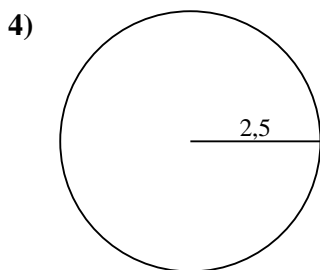
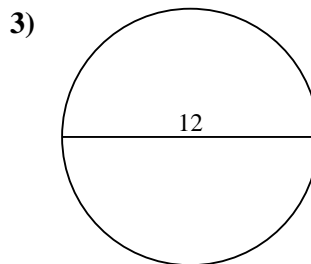
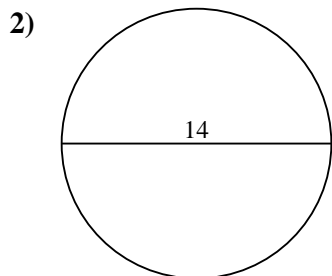
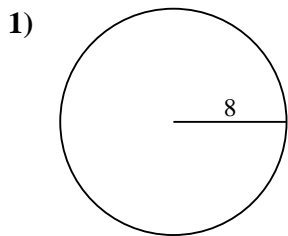
**Risposte**1. 201,12. 153,93. 113,14. 19,65. 254,56. 346,47. 415,58. 572,69. 12,610. 3,1



Calcola l'area di ogni cerchio. i cerchi non sono in scala.

572,6	113,1	415,5	12,6	346,4
201,1	153,9	254,5	19,6	

**Risposte**



- 1. \_\_\_\_\_
- 2. \_\_\_\_\_
- 3. \_\_\_\_\_
- 4. \_\_\_\_\_
- 5. \_\_\_\_\_
- 6. \_\_\_\_\_
- 7. \_\_\_\_\_
- 8. \_\_\_\_\_
- 9. \_\_\_\_\_