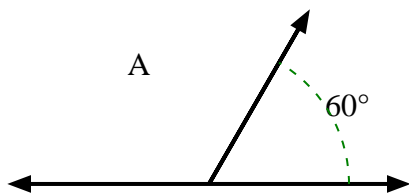


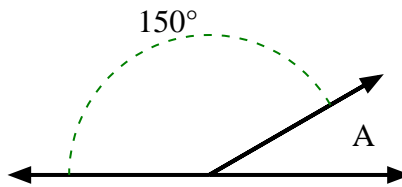


Trova il valore di 'A' nell'insieme degli angoli supplementari.

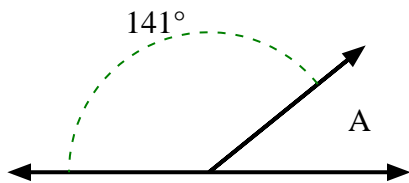
1)



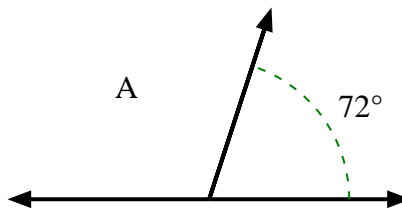
2)



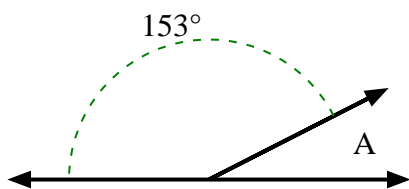
3)



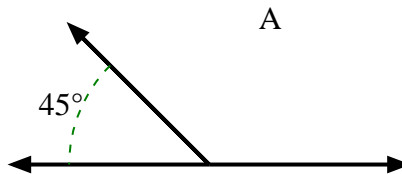
4)



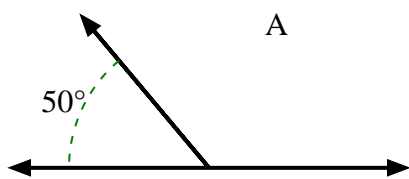
5)



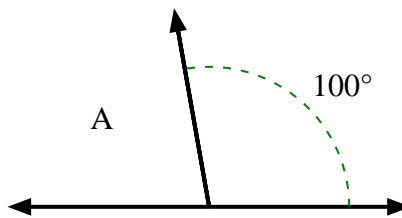
6)



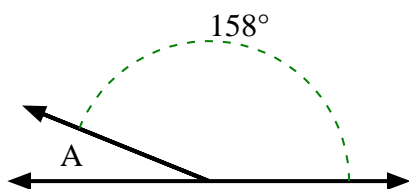
7)



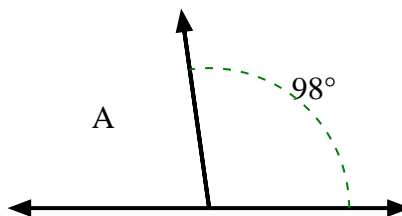
8)



9)



10)



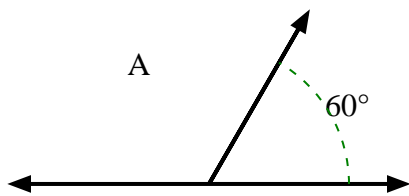
**Risposte**

- 1. \_\_\_\_\_
- 2. \_\_\_\_\_
- 3. \_\_\_\_\_
- 4. \_\_\_\_\_
- 5. \_\_\_\_\_
- 6. \_\_\_\_\_
- 7. \_\_\_\_\_
- 8. \_\_\_\_\_
- 9. \_\_\_\_\_
- 10. \_\_\_\_\_

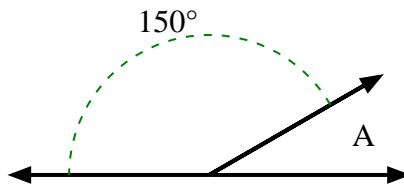


Trova il valore di 'A' nell'insieme degli angoli supplementari.

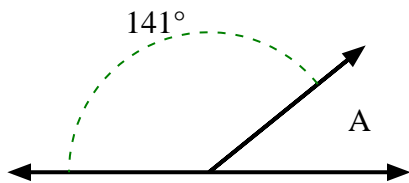
1)



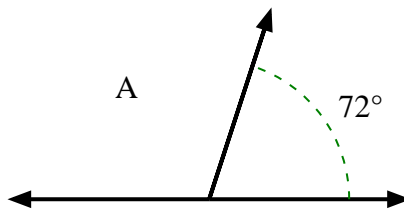
2)



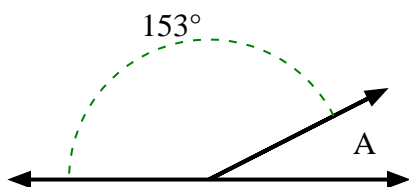
3)



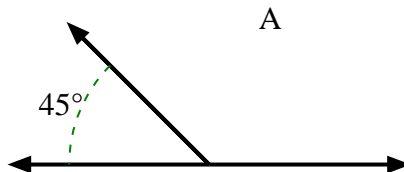
4)



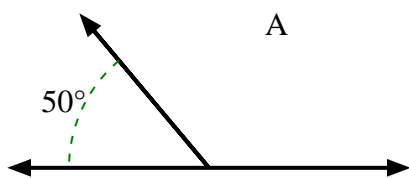
5)



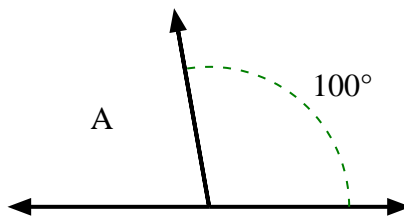
6)



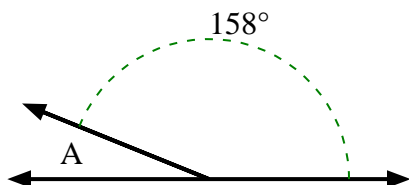
7)



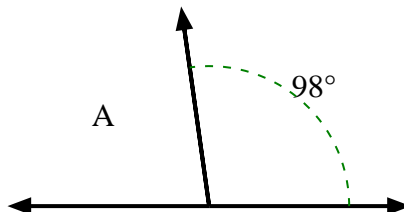
8)



9)



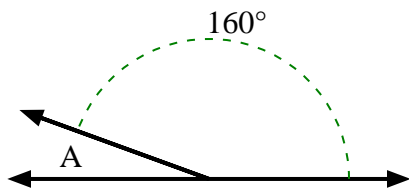
10)

**Risposte**1. **120°**2. **30°**3. **39°**4. **108°**5. **27°**6. **135°**7. **130°**8. **80°**9. **22°**10. **82°**

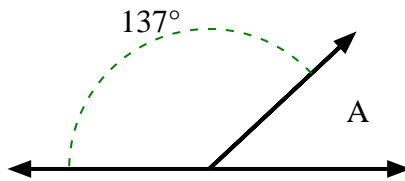


Trova il valore di 'A' nell'insieme degli angoli supplementari.

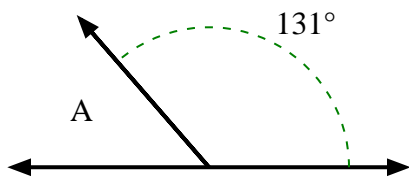
1)



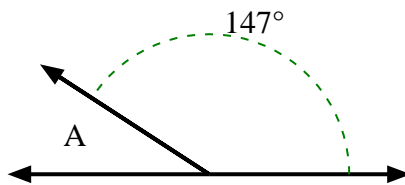
2)



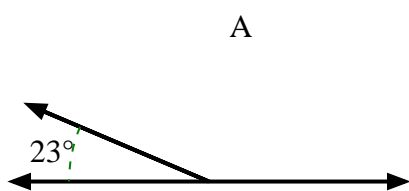
3)



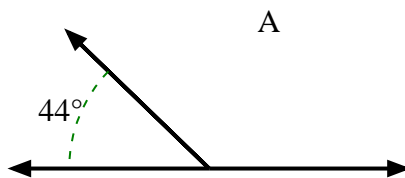
4)



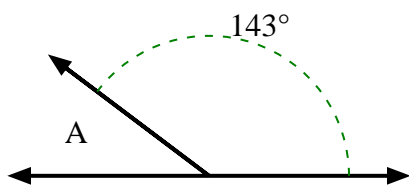
5)



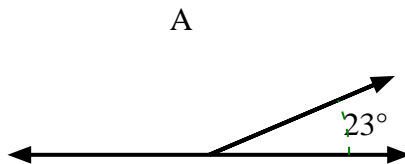
6)



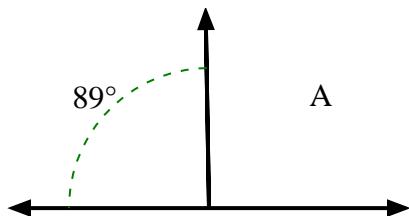
7)



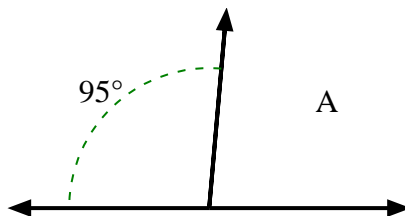
8)



9)



10)



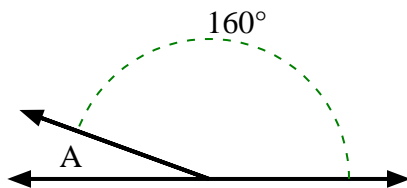
**Risposte**

1. \_\_\_\_\_
2. \_\_\_\_\_
3. \_\_\_\_\_
4. \_\_\_\_\_
5. \_\_\_\_\_
6. \_\_\_\_\_
7. \_\_\_\_\_
8. \_\_\_\_\_
9. \_\_\_\_\_
10. \_\_\_\_\_

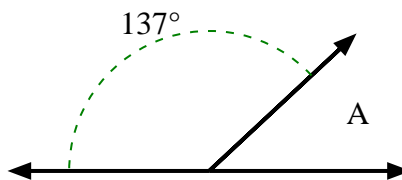


Trova il valore di 'A' nell'insieme degli angoli supplementari.

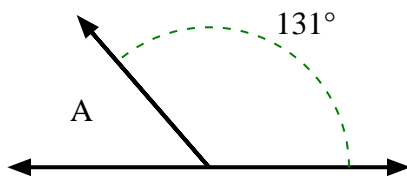
1)



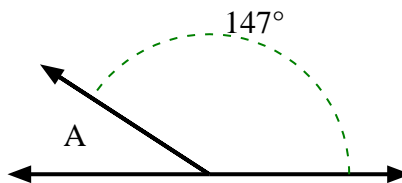
2)



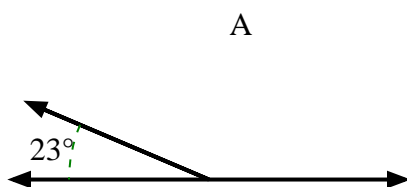
3)



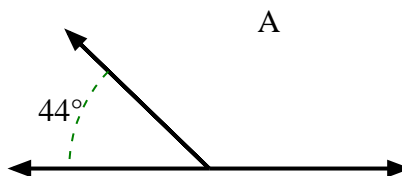
4)



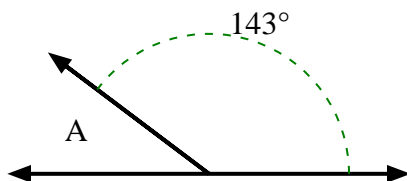
5)



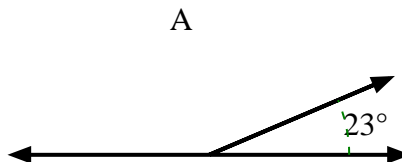
6)



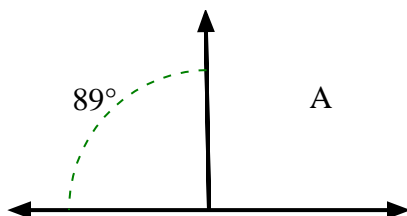
7)



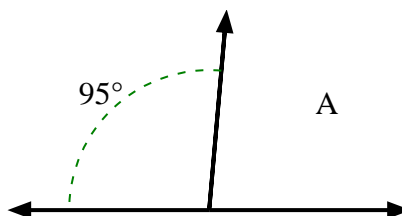
8)



9)



10)

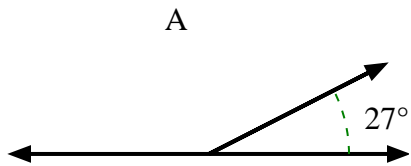
**Risposte**1. 20°2. 43°3. 49°4. 33°5. 157°6. 136°7. 37°8. 157°9. 91°10. 85°



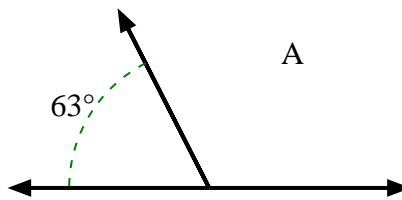
Trova il valore di 'A' nell'insieme degli angoli supplementari.

**Risposte**

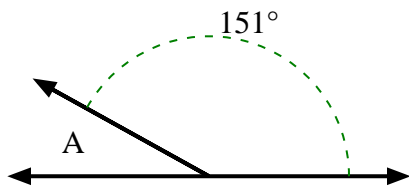
1)



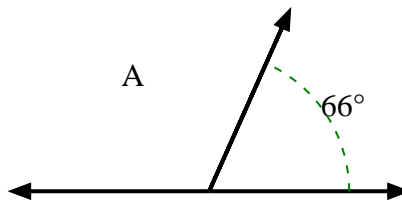
2)



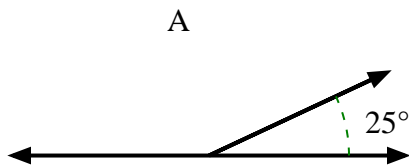
3)



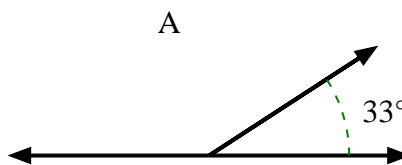
4)



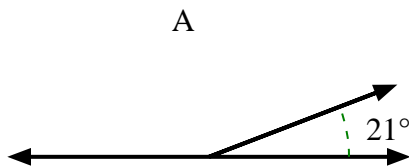
5)



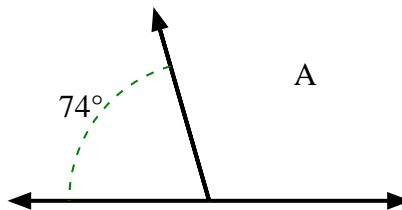
6)



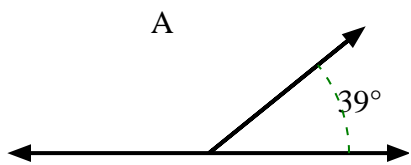
7)



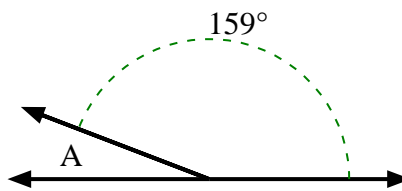
8)



9)



10)

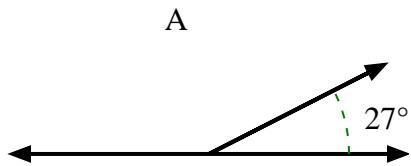


1. \_\_\_\_\_
2. \_\_\_\_\_
3. \_\_\_\_\_
4. \_\_\_\_\_
5. \_\_\_\_\_
6. \_\_\_\_\_
7. \_\_\_\_\_
8. \_\_\_\_\_
9. \_\_\_\_\_
10. \_\_\_\_\_

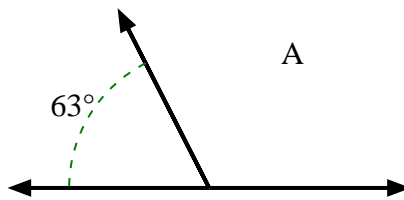


Trova il valore di 'A' nell'insieme degli angoli supplementari.

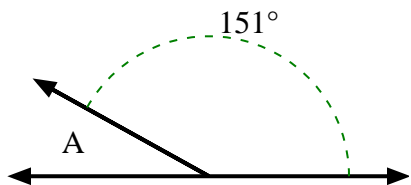
1)



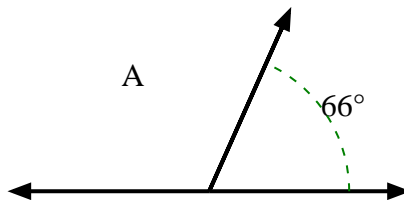
2)



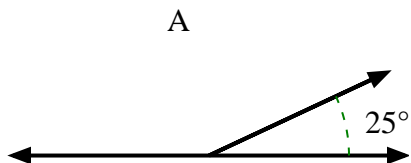
3)



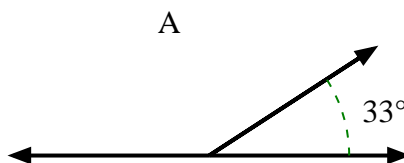
4)



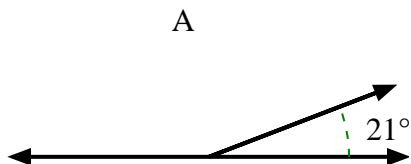
5)



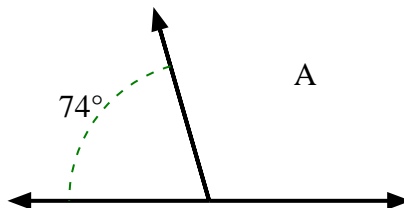
6)



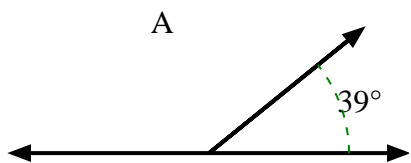
7)



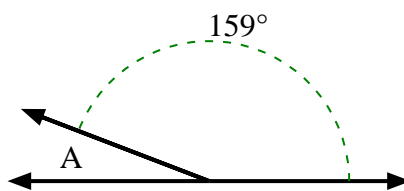
8)



9)

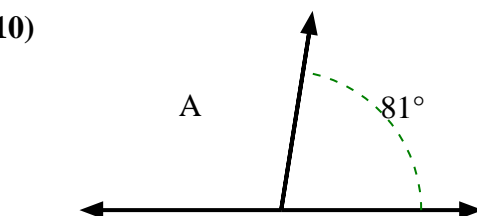
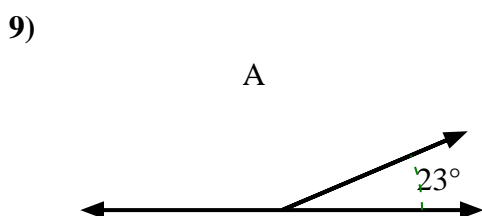
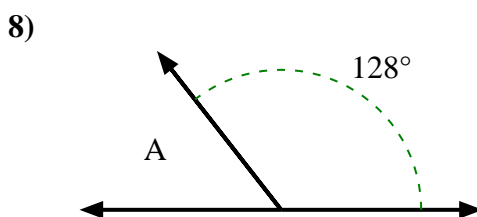
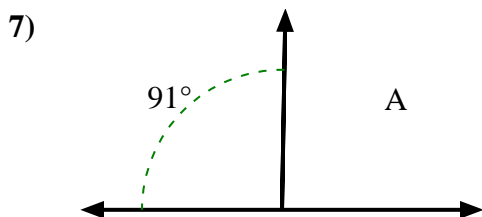
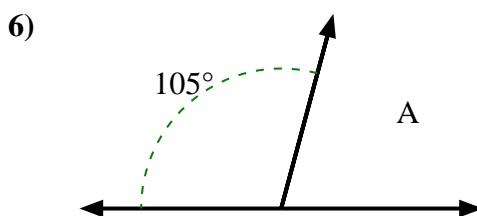
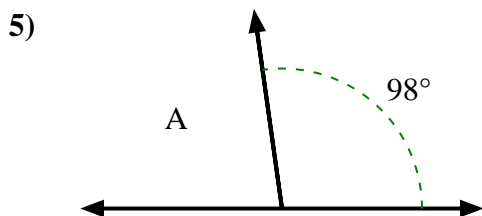
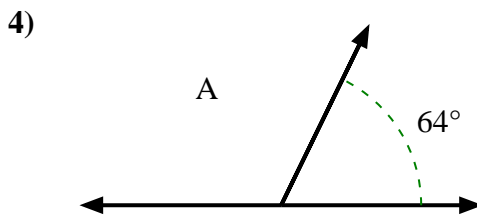
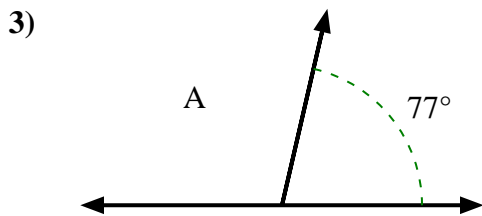
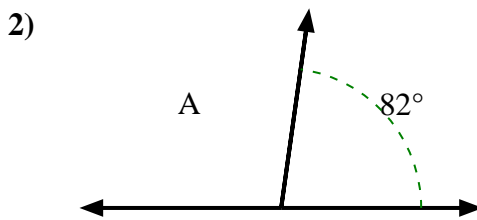
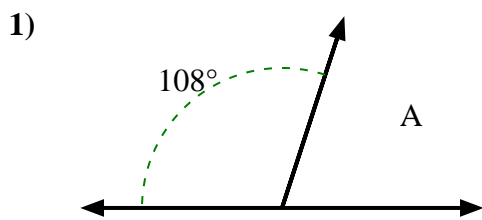


10)

**Risposte**1. **153°**2. **117°**3. **29°**4. **114°**5. **155°**6. **147°**7. **159°**8. **106°**9. **141°**10. **21°**



Trova il valore di 'A' nell'insieme degli angoli supplementari.



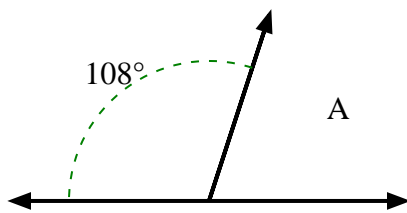
**Risposte**

- 1. \_\_\_\_\_
- 2. \_\_\_\_\_
- 3. \_\_\_\_\_
- 4. \_\_\_\_\_
- 5. \_\_\_\_\_
- 6. \_\_\_\_\_
- 7. \_\_\_\_\_
- 8. \_\_\_\_\_
- 9. \_\_\_\_\_
- 10. \_\_\_\_\_

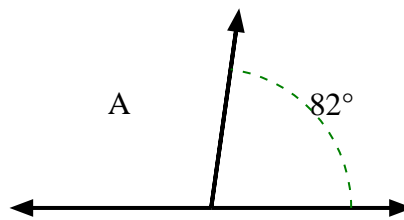


Trova il valore di 'A' nell'insieme degli angoli supplementari.

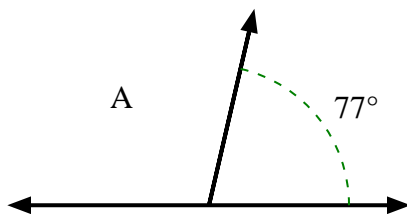
1)



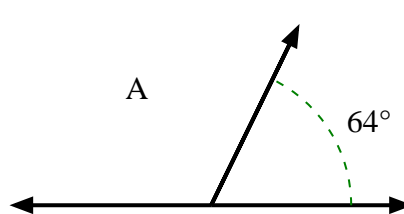
2)



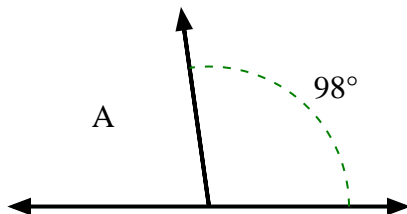
3)



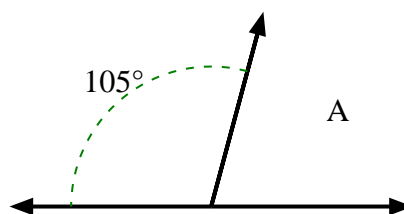
4)



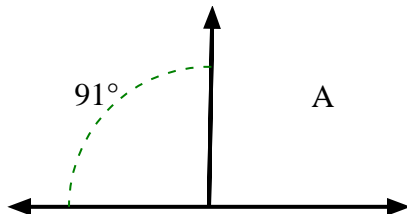
5)



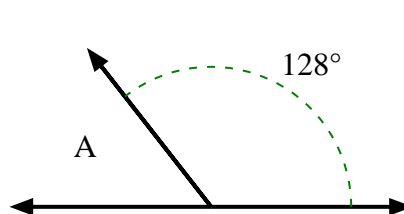
6)



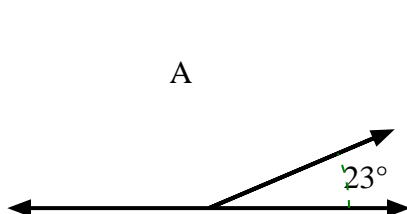
7)



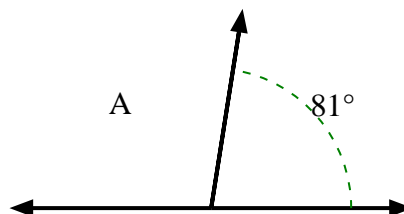
8)



9)



10)

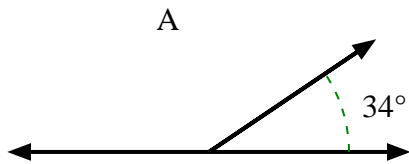
**Risposte**1. 72°2. 98°3. 103°4. 116°5. 82°6. 75°7. 89°8. 52°9. 157°10. 99°



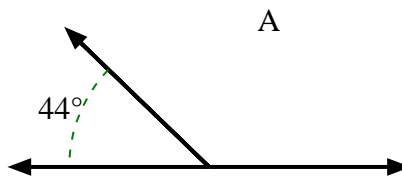


Trova il valore di 'A' nell'insieme degli angoli supplementari.

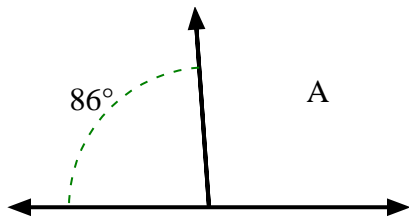
1)



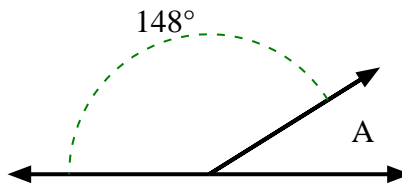
2)



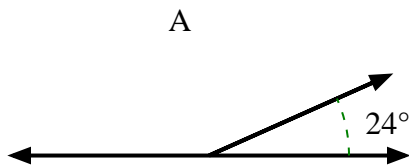
3)



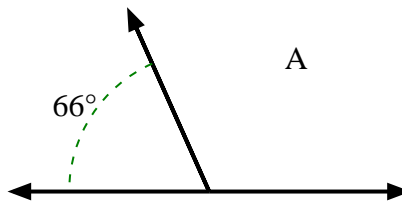
4)



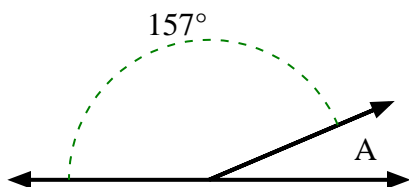
5)



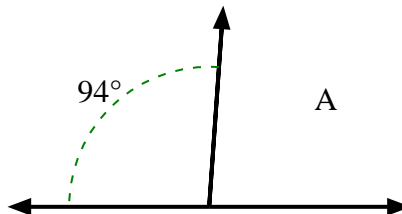
6)



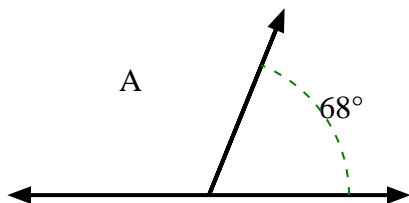
7)



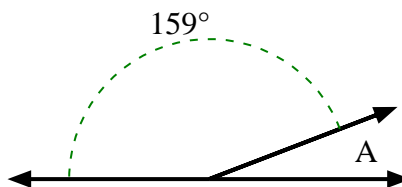
8)



9)



10)



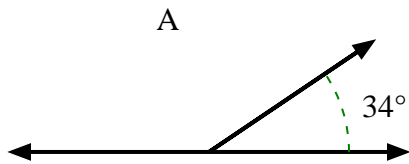
**Risposte**

1. \_\_\_\_\_
2. \_\_\_\_\_
3. \_\_\_\_\_
4. \_\_\_\_\_
5. \_\_\_\_\_
6. \_\_\_\_\_
7. \_\_\_\_\_
8. \_\_\_\_\_
9. \_\_\_\_\_
10. \_\_\_\_\_

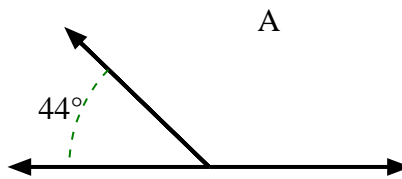


Trova il valore di 'A' nell'insieme degli angoli supplementari.

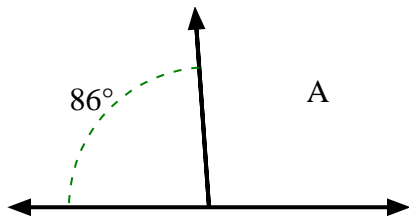
1)



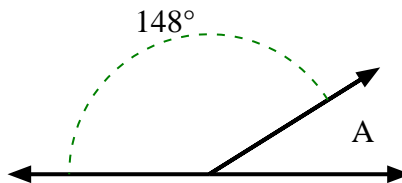
2)



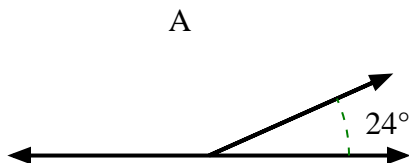
3)



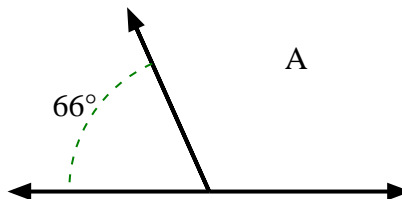
4)



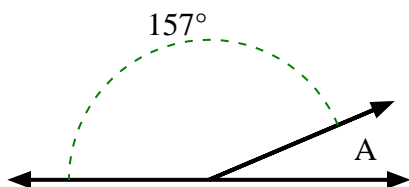
5)



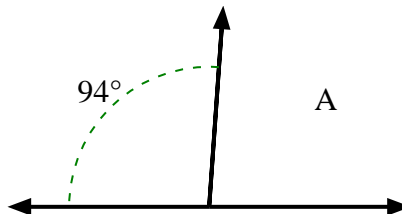
6)



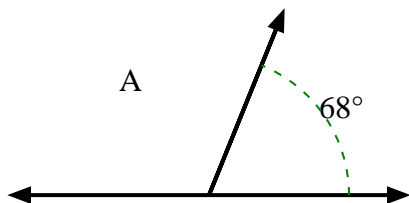
7)



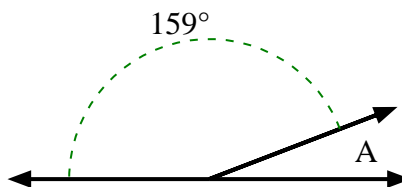
8)



9)



10)



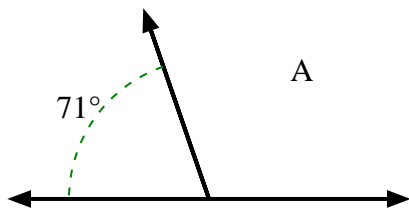
**Risposte**

1. 146°
2. 136°
3. 94°
4. 32°
5. 156°
6. 114°
7. 23°
8. 86°
9. 112°
10. 21°

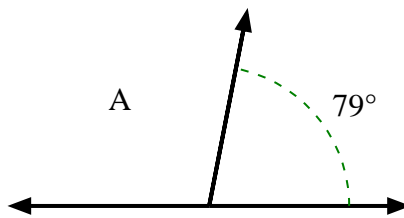


Trova il valore di 'A' nell'insieme degli angoli supplementari.

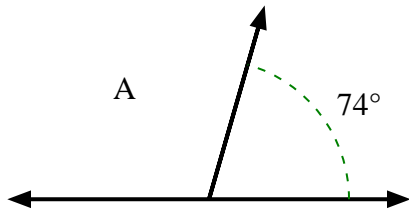
1)



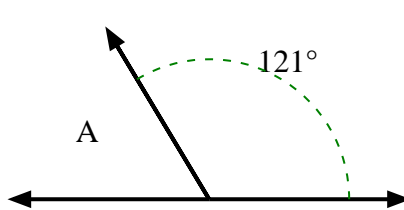
2)



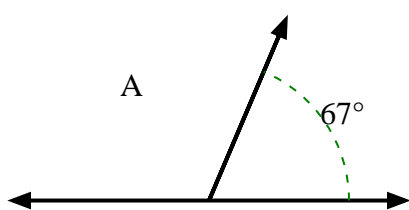
3)



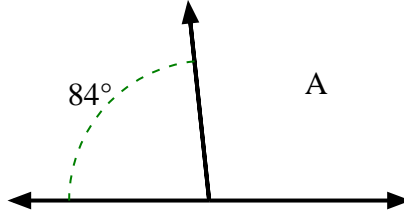
4)



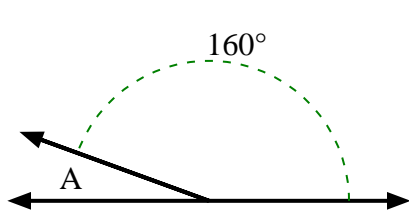
5)



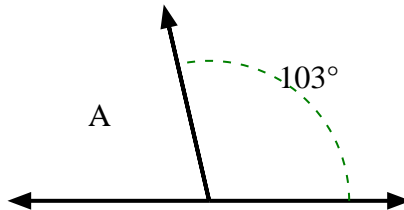
6)



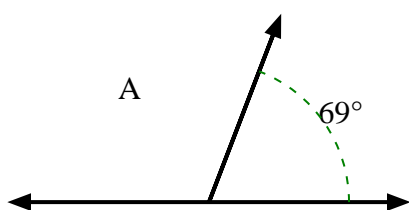
7)



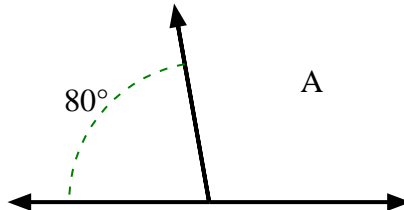
8)



9)



10)

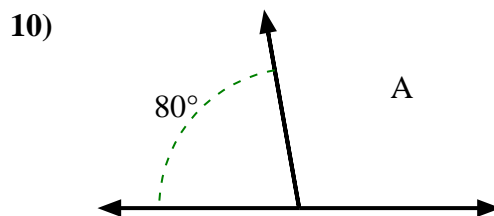
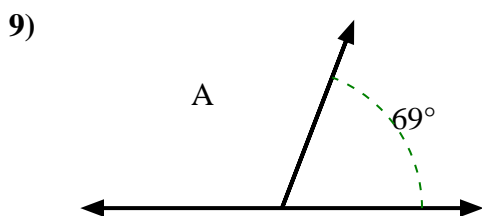
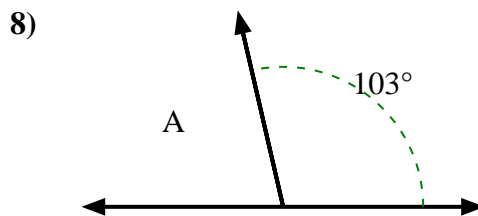
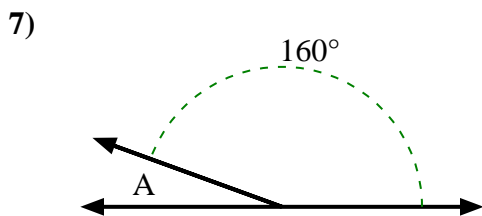
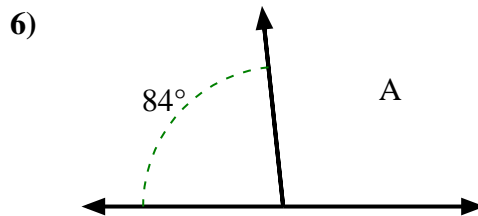
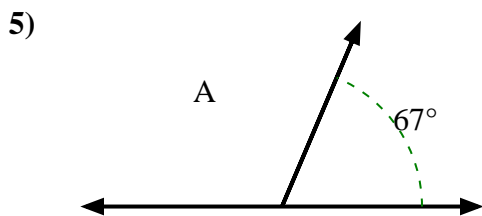
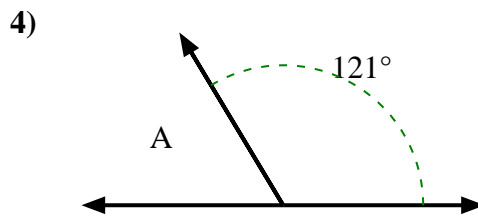
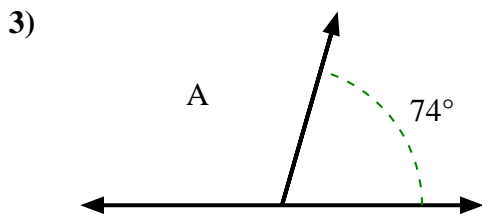
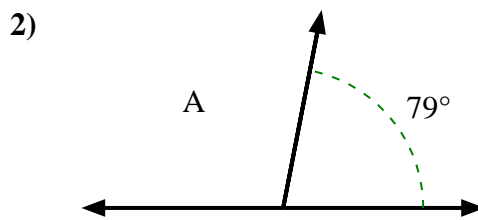
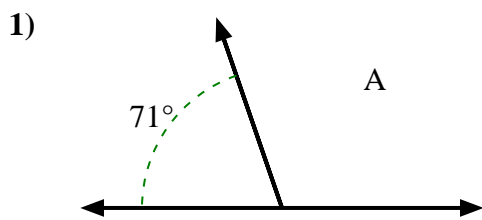


**Risposte**

- 1. \_\_\_\_\_
- 2. \_\_\_\_\_
- 3. \_\_\_\_\_
- 4. \_\_\_\_\_
- 5. \_\_\_\_\_
- 6. \_\_\_\_\_
- 7. \_\_\_\_\_
- 8. \_\_\_\_\_
- 9. \_\_\_\_\_
- 10. \_\_\_\_\_



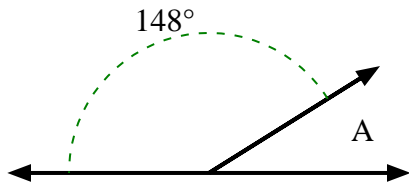
Trova il valore di 'A' nell'insieme degli angoli supplementari.

**Risposte**1. **109°**2. **101°**3. **106°**4. **59°**5. **113°**6. **96°**7. **20°**8. **77°**9. **111°**10. **100°**

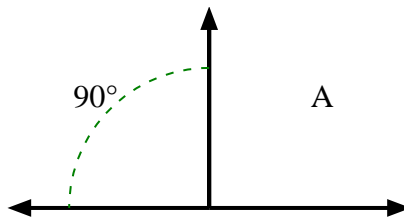


Trova il valore di 'A' nell'insieme degli angoli supplementari.

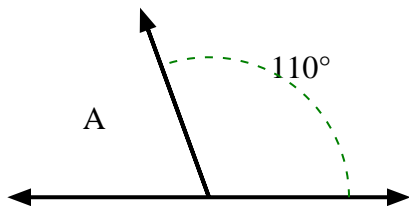
1)



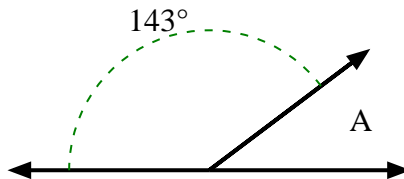
2)



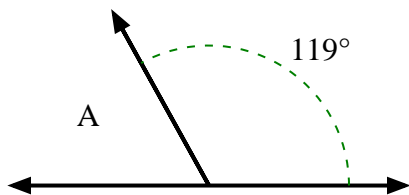
3)



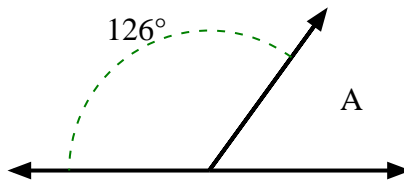
4)



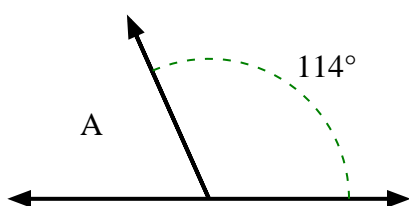
5)



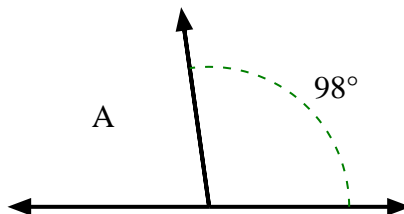
6)



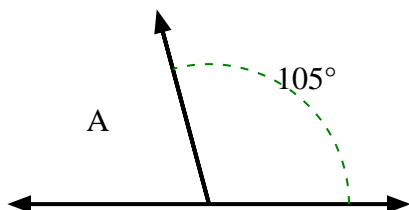
7)



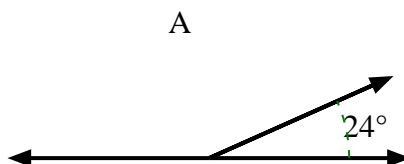
8)



9)



10)



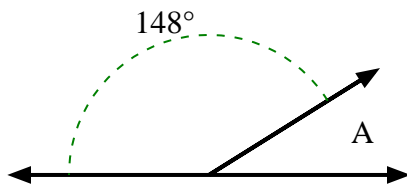
**Risposte**

1. \_\_\_\_\_
2. \_\_\_\_\_
3. \_\_\_\_\_
4. \_\_\_\_\_
5. \_\_\_\_\_
6. \_\_\_\_\_
7. \_\_\_\_\_
8. \_\_\_\_\_
9. \_\_\_\_\_
10. \_\_\_\_\_

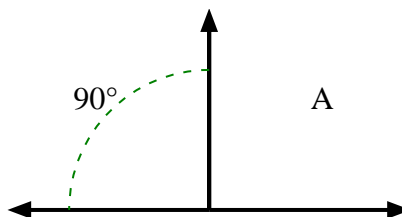


Trova il valore di 'A' nell'insieme degli angoli supplementari.

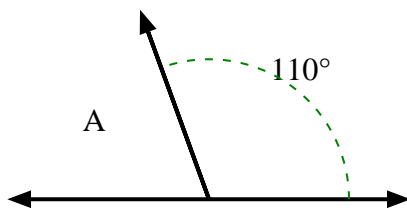
1)



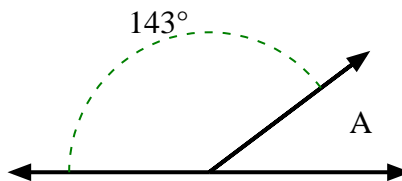
2)



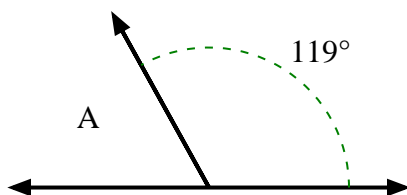
3)



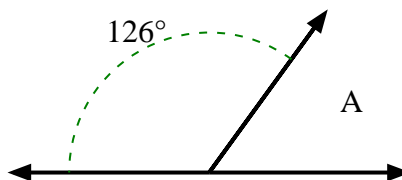
4)



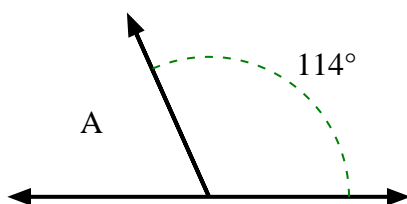
5)



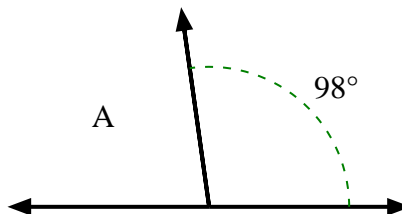
6)



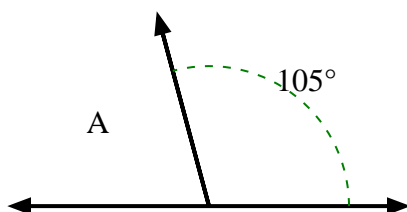
7)



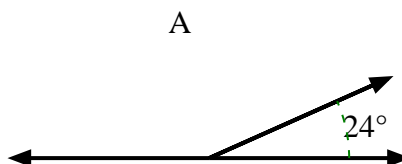
8)



9)

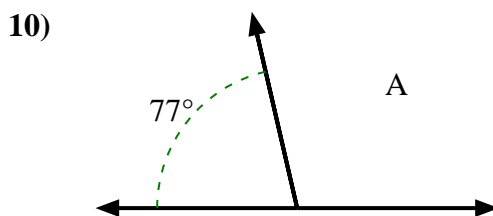
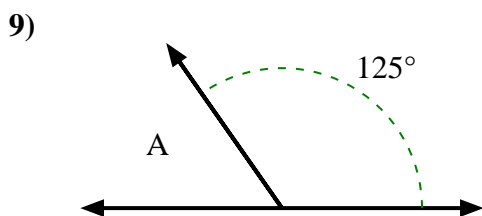
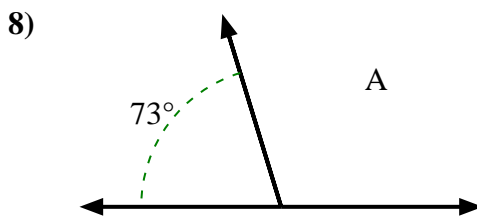
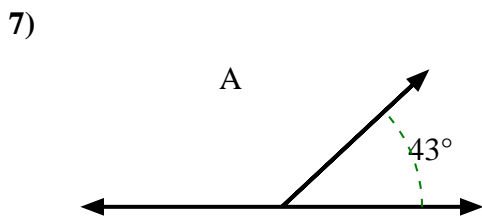
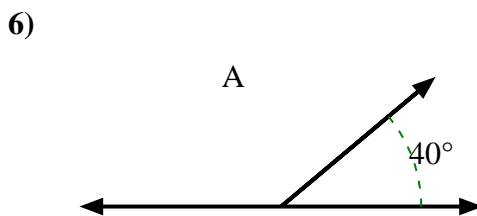
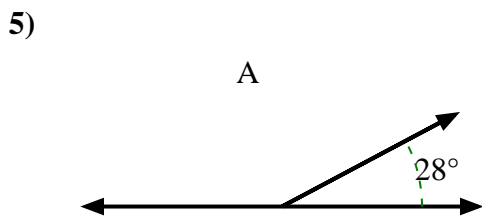
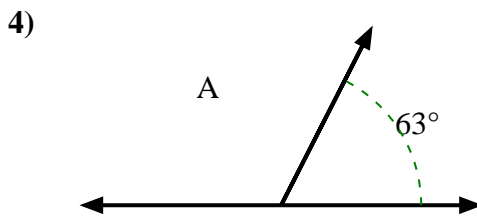
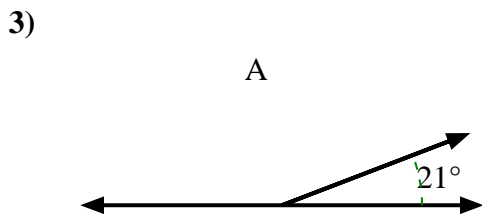
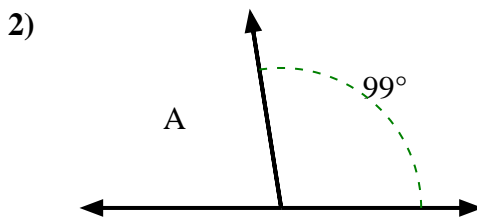
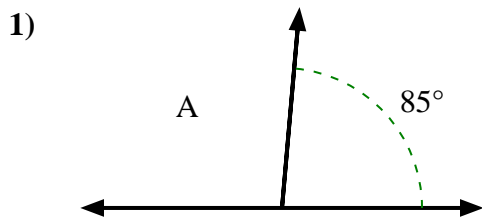


10)

**Risposte**1. **32°**2. **90°**3. **70°**4. **37°**5. **61°**6. **54°**7. **66°**8. **82°**9. **75°**10. **156°**



Trova il valore di 'A' nell'insieme degli angoli supplementari.

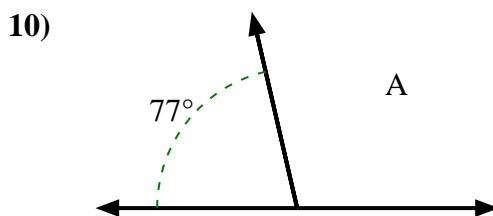
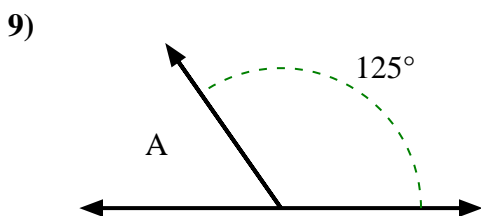
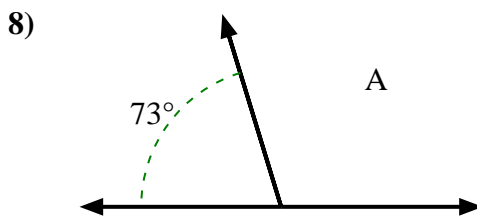
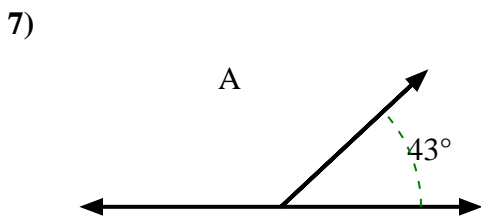
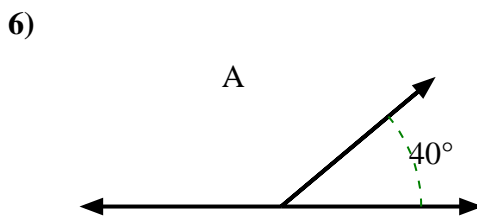
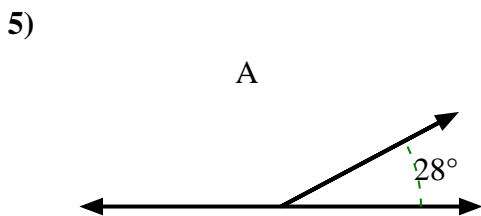
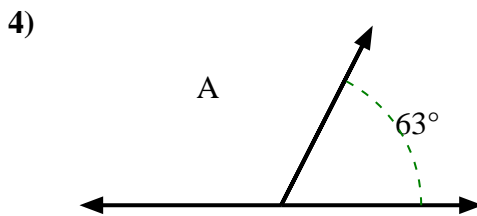
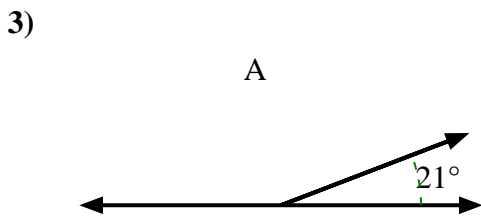
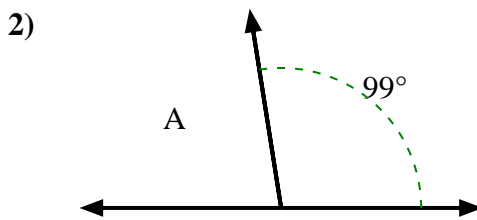
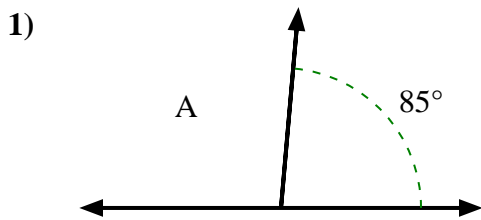


**Risposte**

- 1. \_\_\_\_\_
- 2. \_\_\_\_\_
- 3. \_\_\_\_\_
- 4. \_\_\_\_\_
- 5. \_\_\_\_\_
- 6. \_\_\_\_\_
- 7. \_\_\_\_\_
- 8. \_\_\_\_\_
- 9. \_\_\_\_\_
- 10. \_\_\_\_\_



Trova il valore di 'A' nell'insieme degli angoli supplementari.



**Risposte**

1. 95°

2. 81°

3. 159°

4. 117°

5. 152°

6. 140°

7. 137°

8. 107°

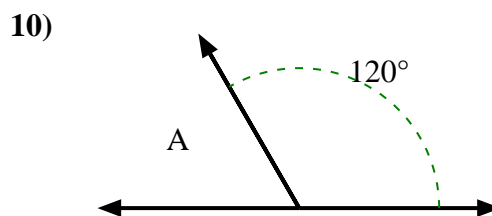
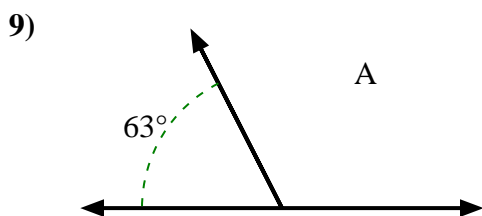
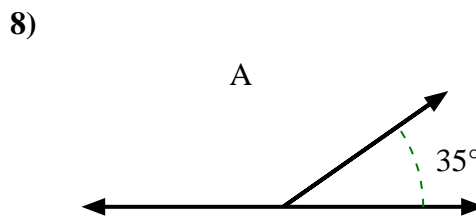
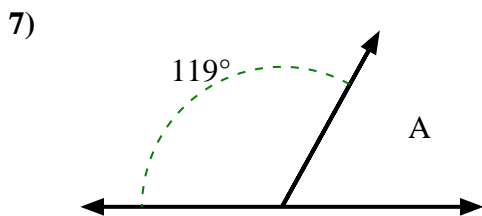
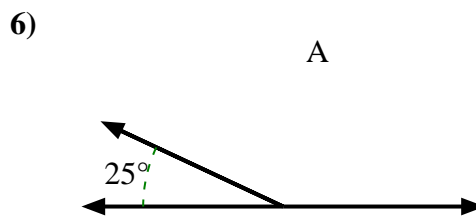
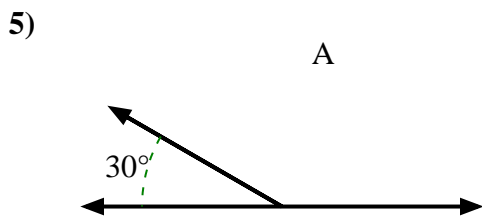
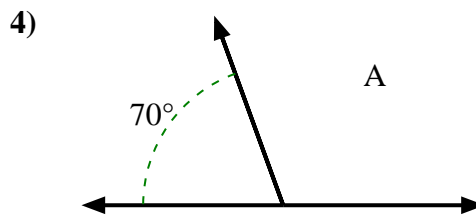
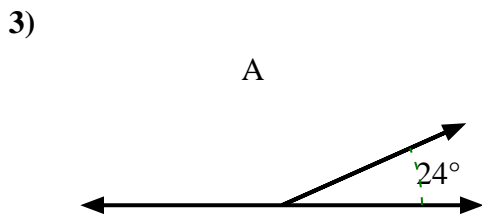
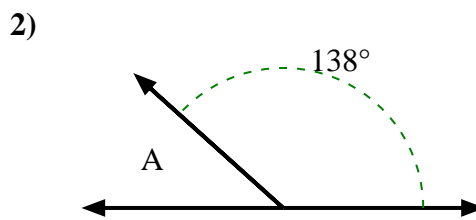
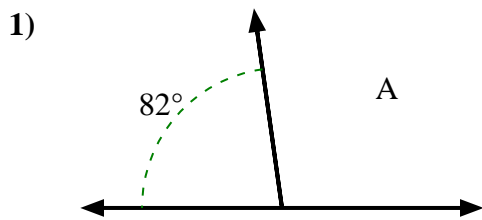
9. 55°

10. 103°





Trova il valore di 'A' nell'insieme degli angoli supplementari.

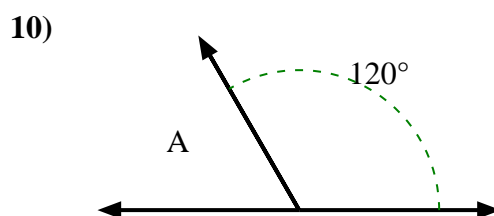
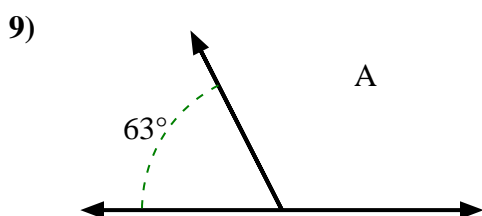
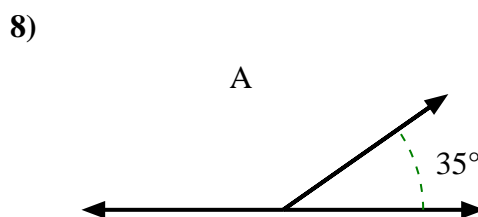
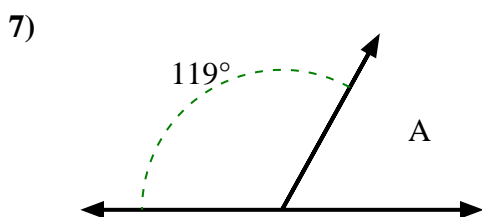
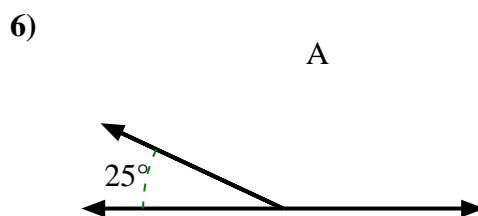
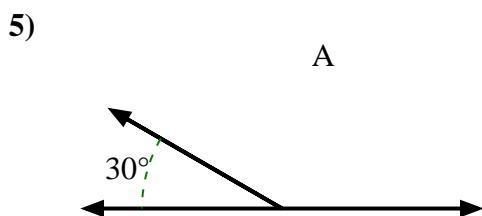
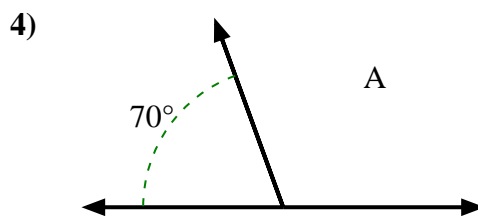
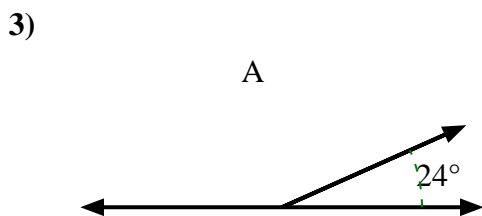
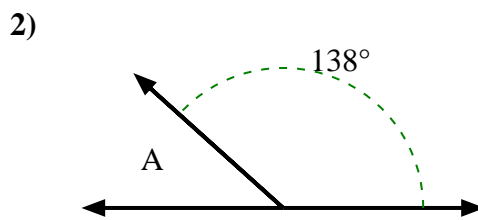
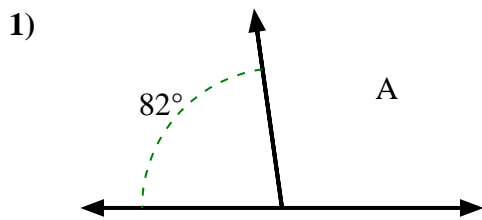


**Risposte**

- 1. \_\_\_\_\_
- 2. \_\_\_\_\_
- 3. \_\_\_\_\_
- 4. \_\_\_\_\_
- 5. \_\_\_\_\_
- 6. \_\_\_\_\_
- 7. \_\_\_\_\_
- 8. \_\_\_\_\_
- 9. \_\_\_\_\_
- 10. \_\_\_\_\_



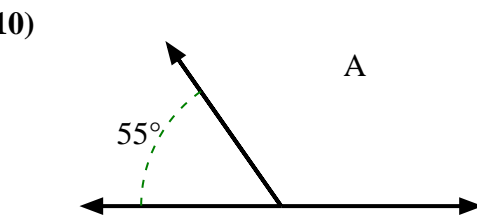
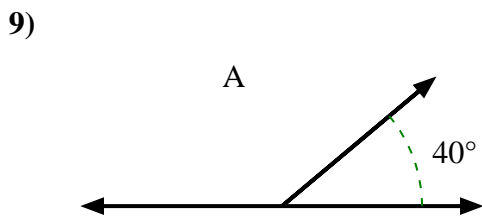
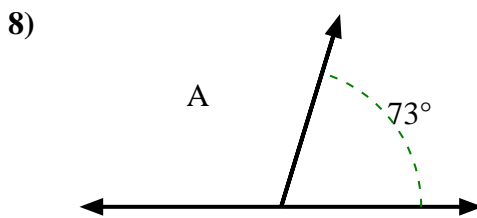
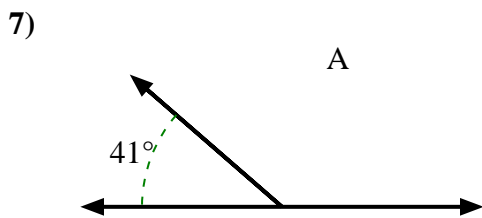
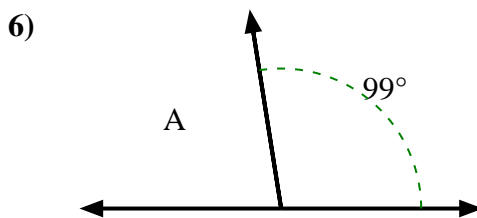
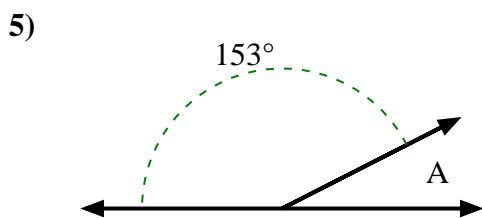
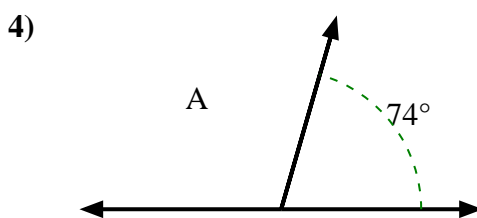
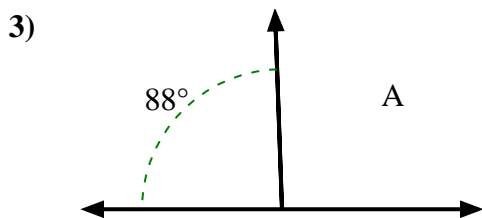
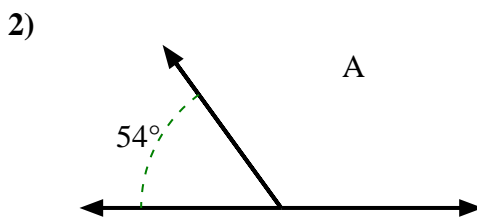
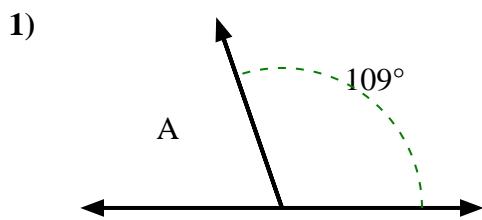
Trova il valore di 'A' nell'insieme degli angoli supplementari.

**Risposte**

1. 98°
2. 42°
3. 156°
4. 110°
5. 150°
6. 155°
7. 61°
8. 145°
9. 117°
10. 60°



Trova il valore di 'A' nell'insieme degli angoli supplementari.



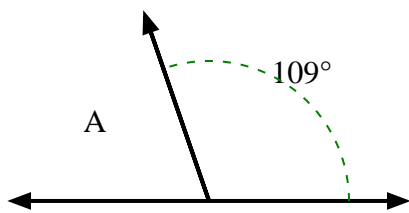
**Risposte**

- 1. \_\_\_\_\_
- 2. \_\_\_\_\_
- 3. \_\_\_\_\_
- 4. \_\_\_\_\_
- 5. \_\_\_\_\_
- 6. \_\_\_\_\_
- 7. \_\_\_\_\_
- 8. \_\_\_\_\_
- 9. \_\_\_\_\_
- 10. \_\_\_\_\_

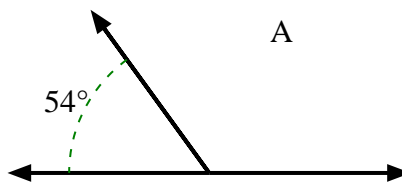


Trova il valore di 'A' nell'insieme degli angoli supplementari.

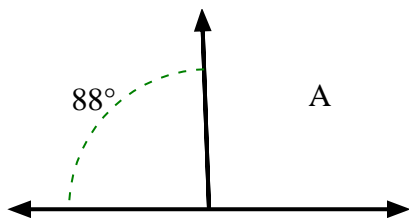
1)



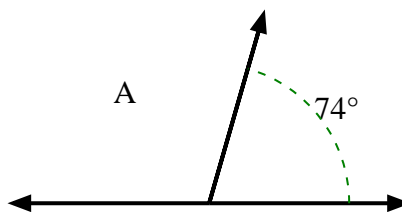
2)



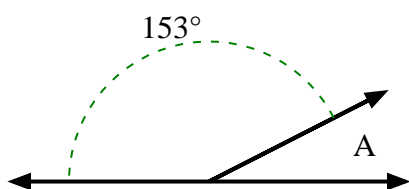
3)



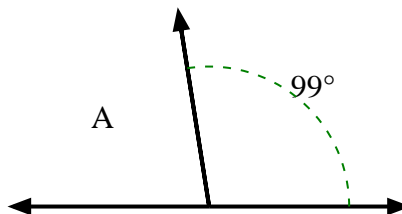
4)



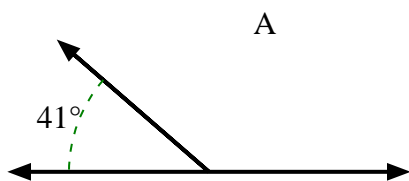
5)



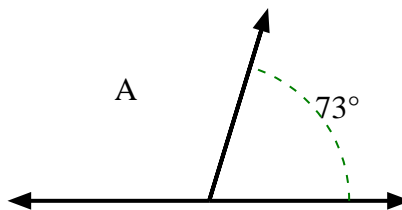
6)



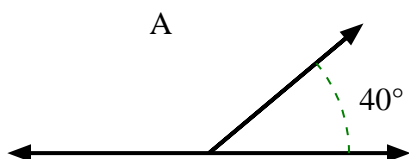
7)



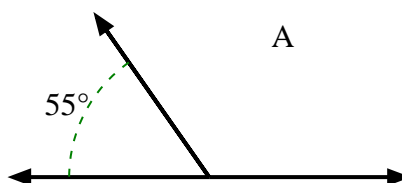
8)



9)



10)

**Risposte**1. **71°**2. **126°**3. **92°**4. **106°**5. **27°**6. **81°**7. **139°**8. **107°**9. **140°**10. **125°**