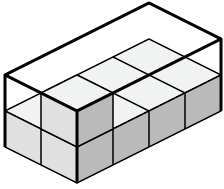


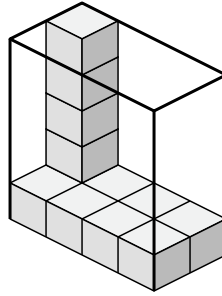


Determina il volume di ciascuna scatola. Ogni blocco è 1 unità cubica (u³).

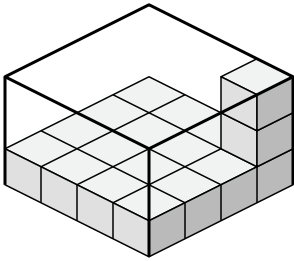
1)



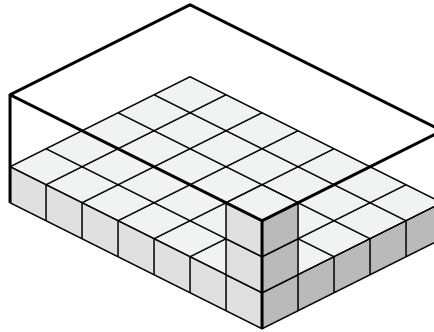
2)



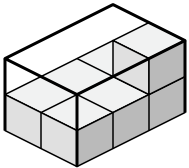
3)



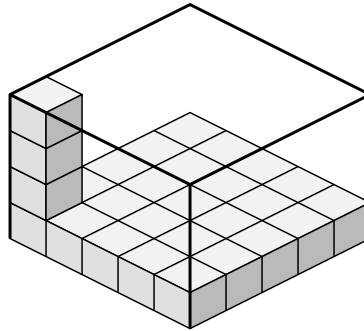
4)



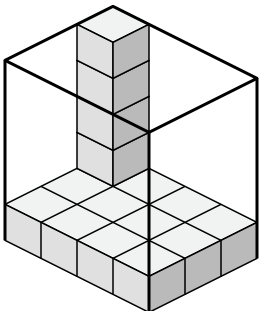
5)



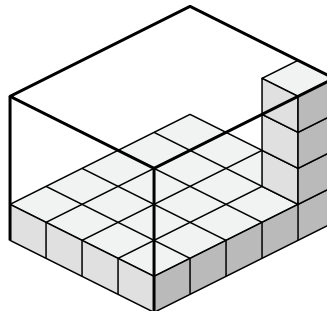
6)



7)



8)



Risposte

1. _____

2. _____

3. _____

4. _____

5. _____

6. _____

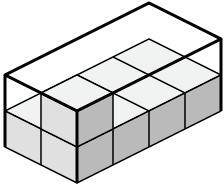
7. _____

8. _____

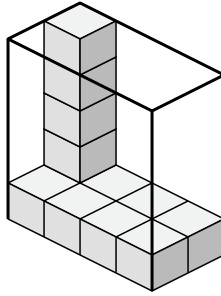


Determina il volume di ciascuna scatola. Ogni blocco è 1 unità cubica (u³).

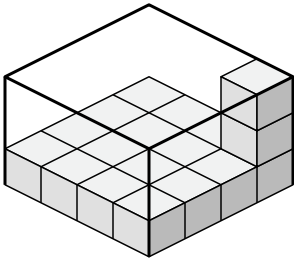
1)



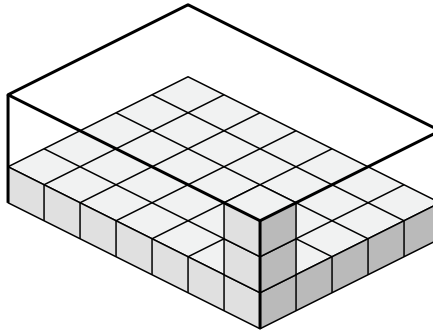
2)



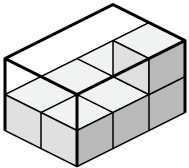
3)



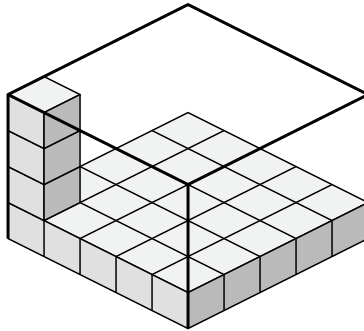
4)



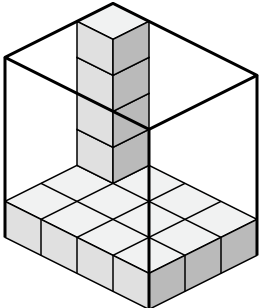
5)



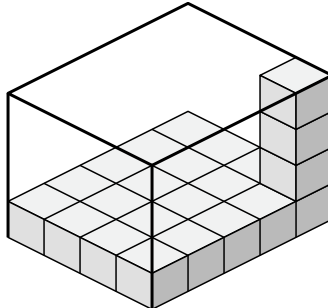
6)



7)



8)



Risposte

1. 16 u³

2. 40 u³

3. 48 u³

4. 105 u³

5. 12 u³

6. 100 u³

7. 60 u³

8. 80 u³