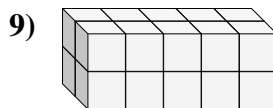
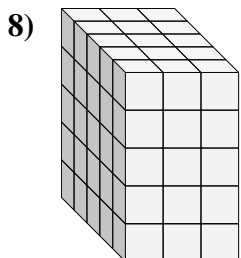
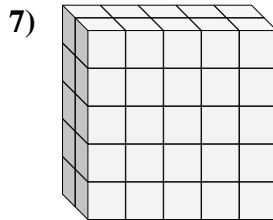
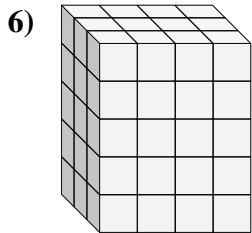
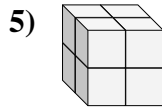
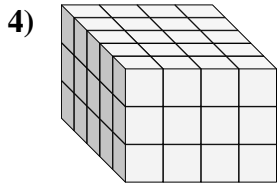
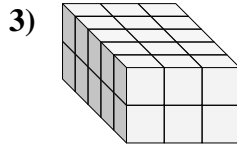
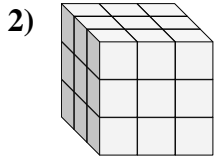
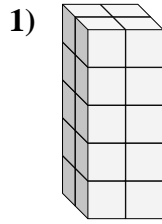
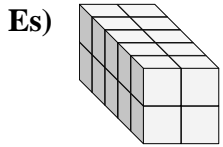




Trova la lunghezza, larghezza e altezza di ogni prisma. Poi calcola il volume.



**Risposte**

Es. 5 2 2 20

1. \_\_\_\_\_

2. \_\_\_\_\_

3. \_\_\_\_\_

4. \_\_\_\_\_

5. \_\_\_\_\_

6. \_\_\_\_\_

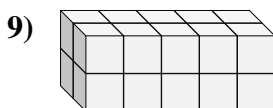
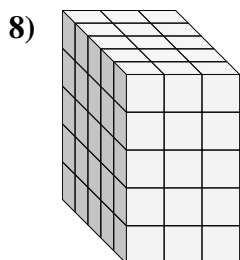
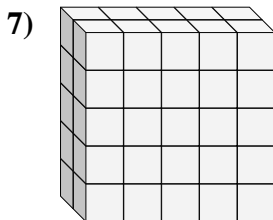
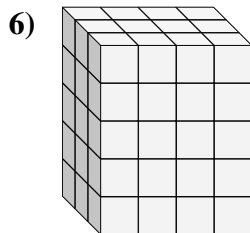
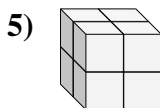
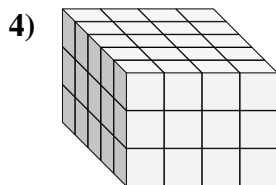
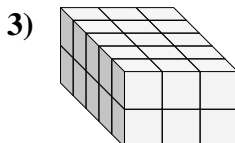
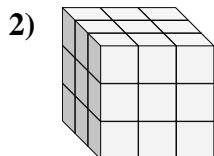
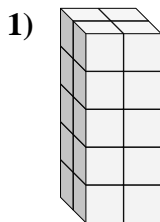
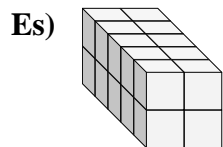
7. \_\_\_\_\_

8. \_\_\_\_\_

9. \_\_\_\_\_



Trova la lunghezza, larghezza e altezza di ogni prisma. Poi calcola il volume.



**Risposte**

Es.	<u>5</u>	<u>2</u>	<u>2</u>	<u>20</u>
1.	<u>2</u>	<u>2</u>	<u>5</u>	<u>20</u>
2.	<u>3</u>	<u>3</u>	<u>3</u>	<u>27</u>
3.	<u>5</u>	<u>3</u>	<u>2</u>	<u>30</u>
4.	<u>5</u>	<u>4</u>	<u>3</u>	<u>60</u>
5.	<u>2</u>	<u>2</u>	<u>2</u>	<u>8</u>
6.	<u>3</u>	<u>4</u>	<u>5</u>	<u>60</u>
7.	<u>2</u>	<u>5</u>	<u>5</u>	<u>50</u>
8.	<u>5</u>	<u>3</u>	<u>5</u>	<u>75</u>
9.	<u>2</u>	<u>5</u>	<u>2</u>	<u>20</u>