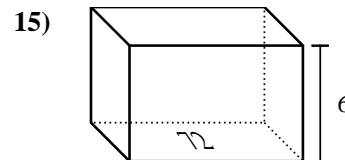
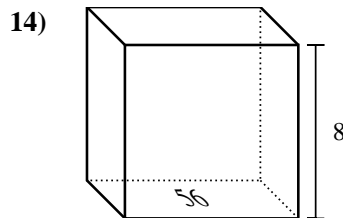
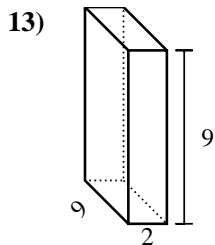
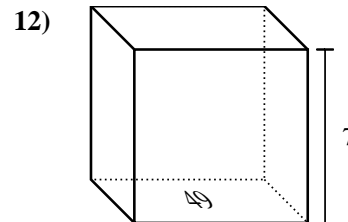
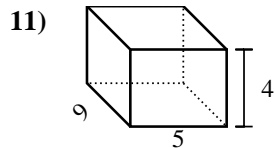
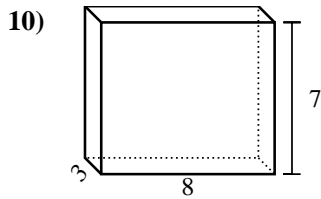
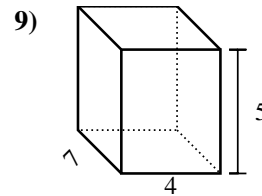
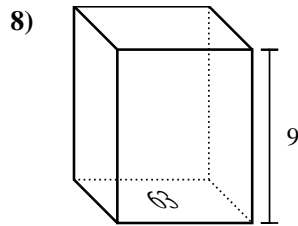
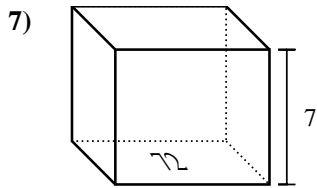
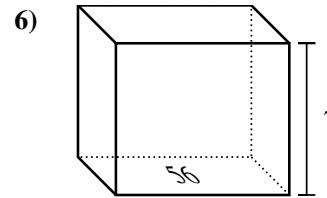
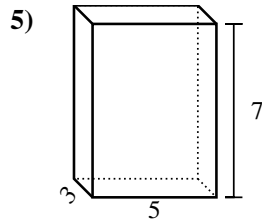
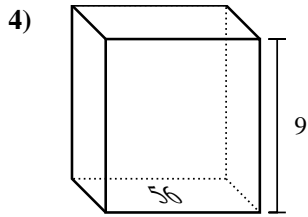
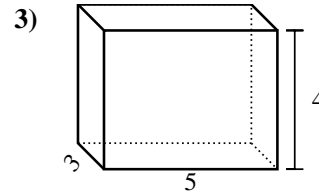
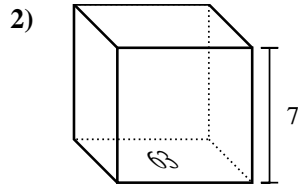
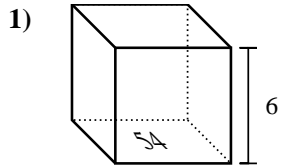


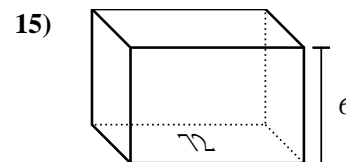
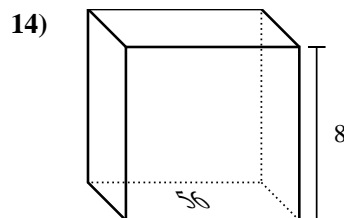
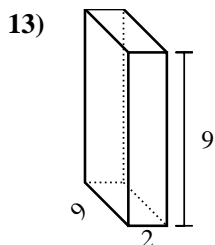
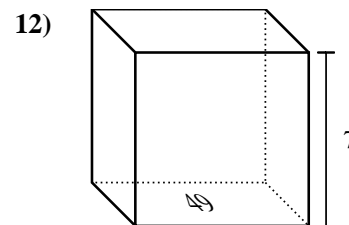
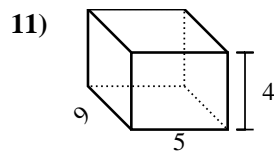
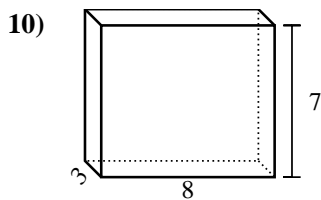
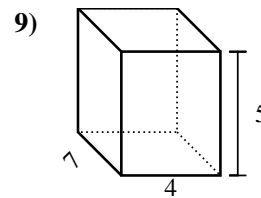
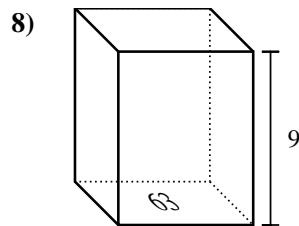
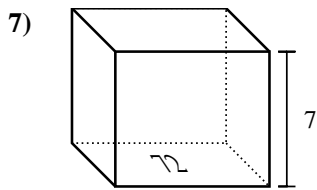
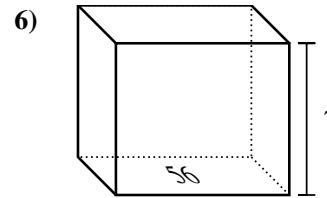
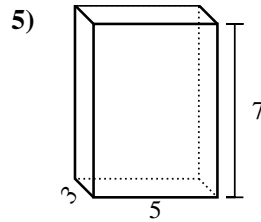
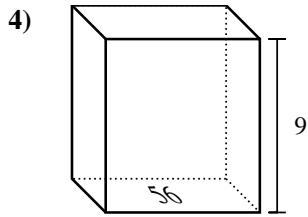
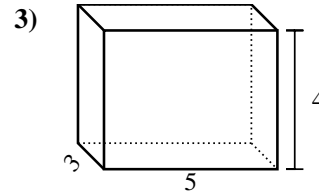
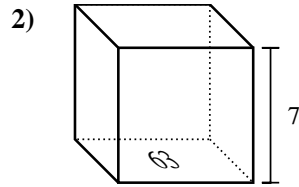
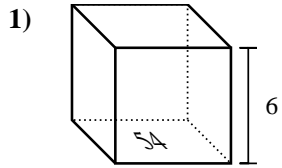


Trova il volume di ogni prisma. Ricorda  $V=B \times H$  e  $V=L \times P \times H$ .



**Risposte**

1. \_\_\_\_\_
2. \_\_\_\_\_
3. \_\_\_\_\_
4. \_\_\_\_\_
5. \_\_\_\_\_
6. \_\_\_\_\_
7. \_\_\_\_\_
8. \_\_\_\_\_
9. \_\_\_\_\_
10. \_\_\_\_\_
11. \_\_\_\_\_
12. \_\_\_\_\_
13. \_\_\_\_\_
14. \_\_\_\_\_
15. \_\_\_\_\_

Trova il volume di ogni prisma. Ricorda  $V=B \times H$  e  $V=L \times P \times H$ .**Risposte**1. **324 cm<sup>3</sup>**2. **441 cm<sup>3</sup>**3. **60 cm<sup>3</sup>**4. **504 cm<sup>3</sup>**5. **105 cm<sup>3</sup>**6. **392 cm<sup>3</sup>**7. **504 cm<sup>3</sup>**8. **567 cm<sup>3</sup>**9. **140 cm<sup>3</sup>**10. **168 cm<sup>3</sup>**11. **180 cm<sup>3</sup>**12. **343 cm<sup>3</sup>**13. **162 cm<sup>3</sup>**14. **448 cm<sup>3</sup>**15. **432 cm<sup>3</sup>**