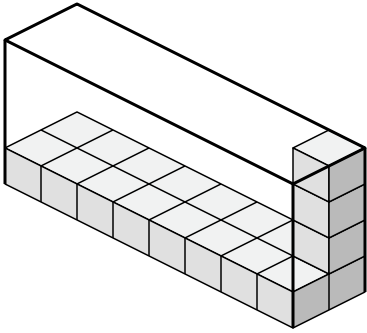


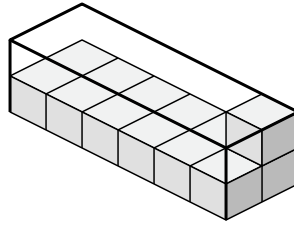


Crea un'espressione per determinare il volume di ogni scatola.

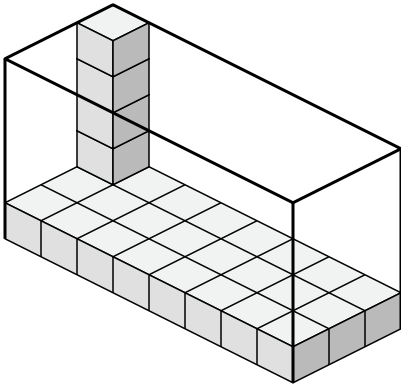
1)



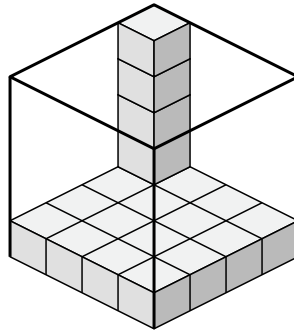
2)



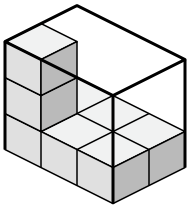
3)



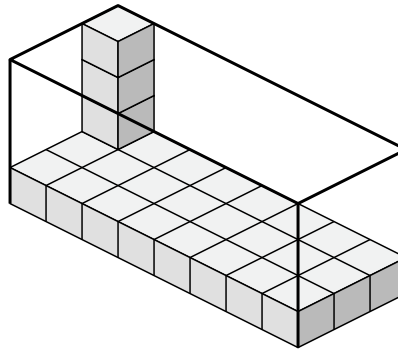
4)



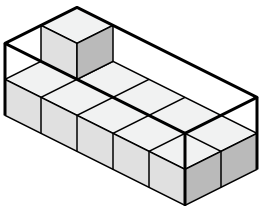
5)



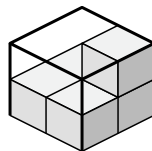
6)



7)



8)



Risposte

1. _____

2. _____

3. _____

4. _____

5. _____

6. _____

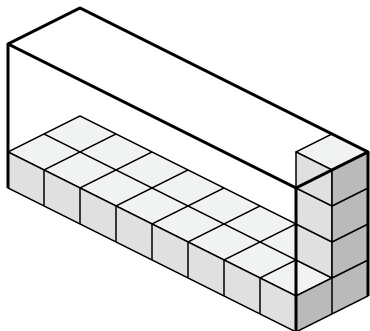
7. _____

8. _____

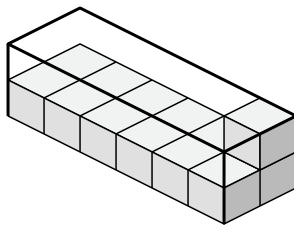


Crea un'espressione per determinare il volume di ogni scatola.

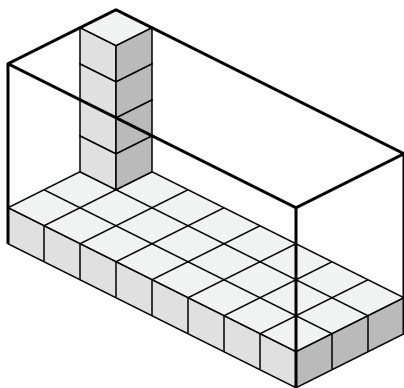
1)



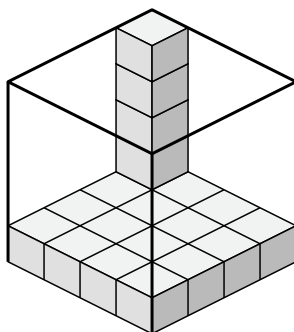
2)



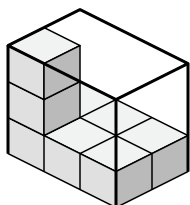
3)



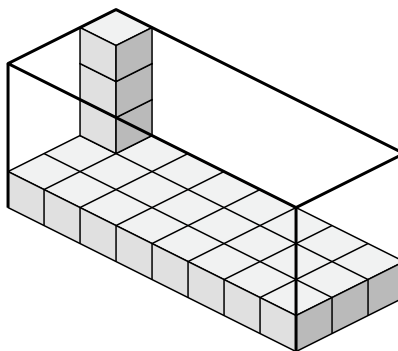
4)



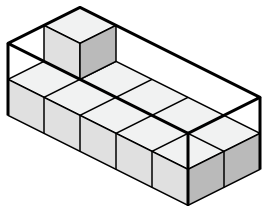
5)



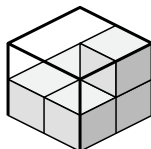
6)



7)



8)

**Risposte**

1. $8 \times 2 \times 4$

2. $6 \times 2 \times 2$

3. $8 \times 3 \times 5$

4. $4 \times 4 \times 5$

5. $3 \times 2 \times 3$

6. $8 \times 3 \times 4$

7. $5 \times 2 \times 2$

8. $2 \times 2 \times 2$