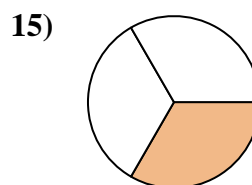
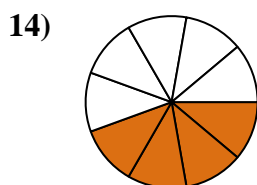
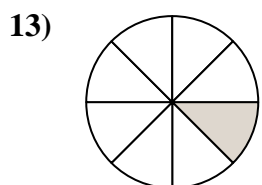
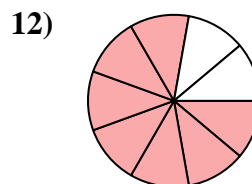
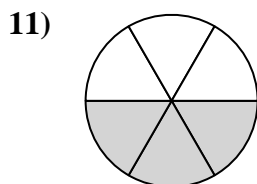
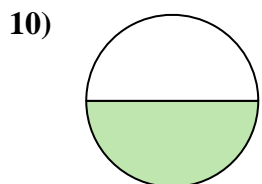
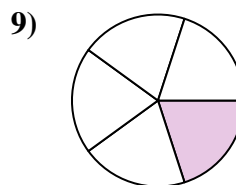
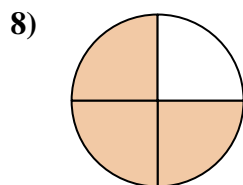
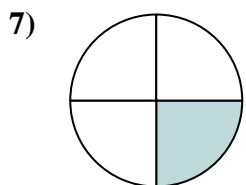
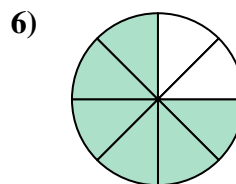
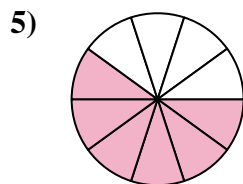
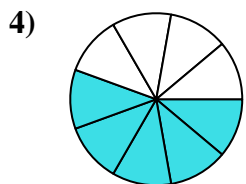
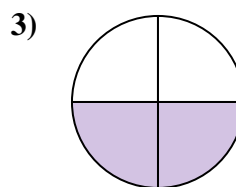
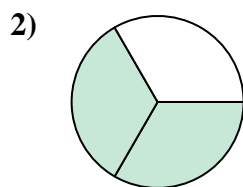
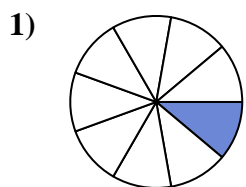




Trova l'angolo (in gradi) della parte ombreggiata del cerchio.

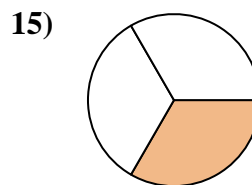
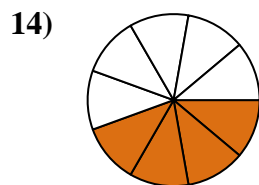
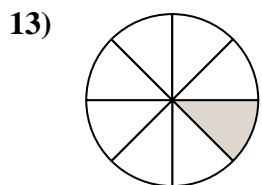
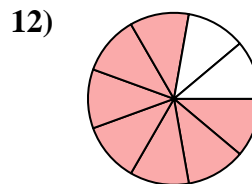
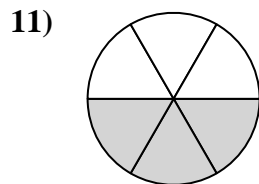
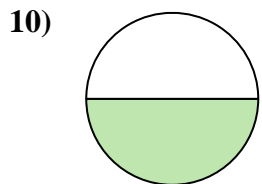
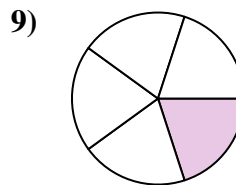
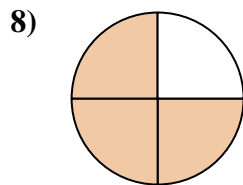
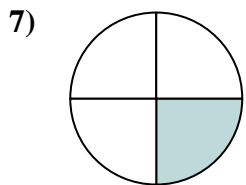
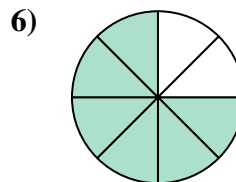
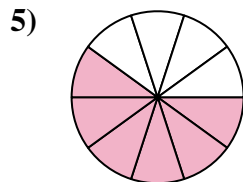
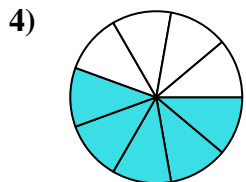
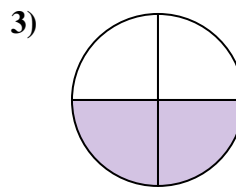
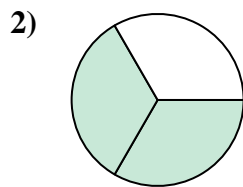
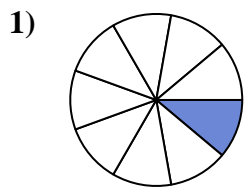


**Risposte**

1. \_\_\_\_\_
2. \_\_\_\_\_
3. \_\_\_\_\_
4. \_\_\_\_\_
5. \_\_\_\_\_
6. \_\_\_\_\_
7. \_\_\_\_\_
8. \_\_\_\_\_
9. \_\_\_\_\_
10. \_\_\_\_\_
11. \_\_\_\_\_
12. \_\_\_\_\_
13. \_\_\_\_\_
14. \_\_\_\_\_
15. \_\_\_\_\_



Trova l'angolo (in gradi) della parte ombreggiata del cerchio.



**Risposte**

1. 40

2. 240

3. 180

4. 200

5. 216

6. 270

7. 90

8. 270

9. 72

10. 180

11. 180

12. 280

13. 45

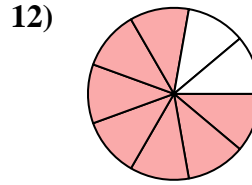
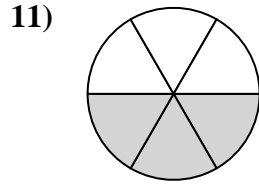
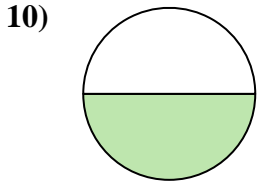
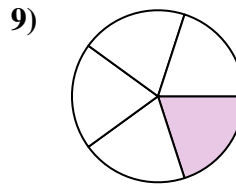
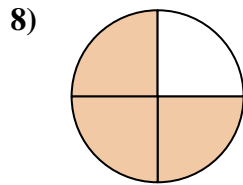
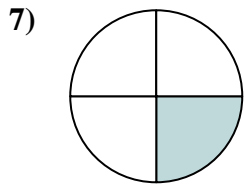
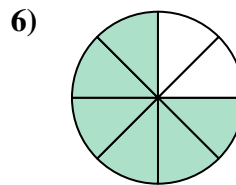
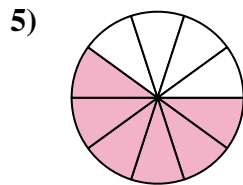
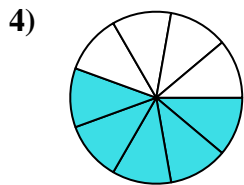
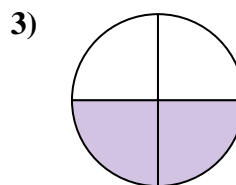
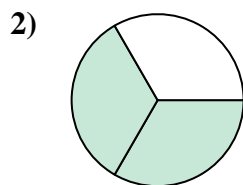
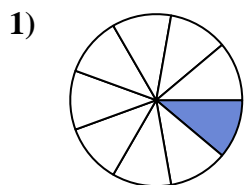
14. 160

15. 120



Trova l'angolo (in gradi) della parte ombreggiata del cerchio.

|     |     |     |     |     |
|-----|-----|-----|-----|-----|
| 180 | 180 | 216 | 270 | 240 |
| 180 | 200 | 72  | 40  | 270 |
| 280 | 90  |     |     |     |



**Risposte**

1. \_\_\_\_\_
2. \_\_\_\_\_
3. \_\_\_\_\_
4. \_\_\_\_\_
5. \_\_\_\_\_
6. \_\_\_\_\_
7. \_\_\_\_\_
8. \_\_\_\_\_
9. \_\_\_\_\_
10. \_\_\_\_\_
11. \_\_\_\_\_
12. \_\_\_\_\_