



Calcola l'angolo del cerchio rispetto a (0,0).

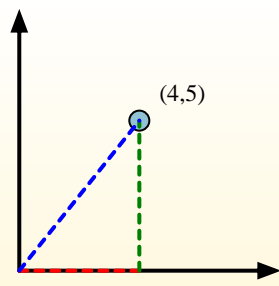
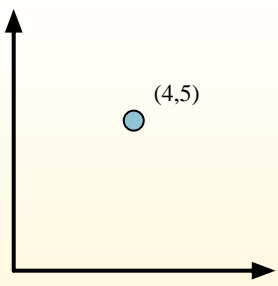
Primerò encuentra la pendiente.

$$(y_2 - y_1) \div (x_2 - x_1) = m$$

$$(5 - 0) \div (4 - 0) = 1.25$$

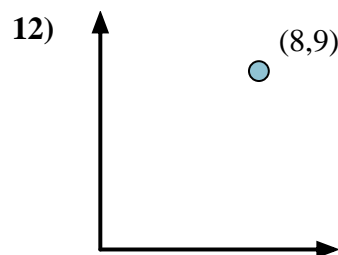
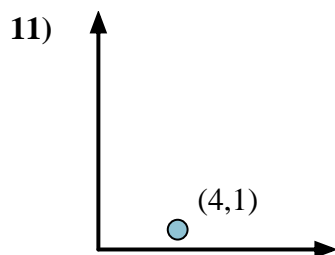
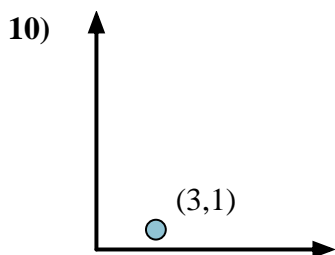
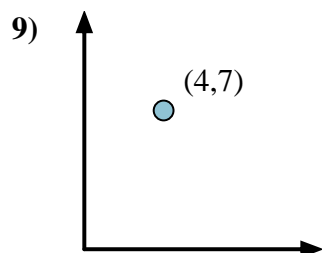
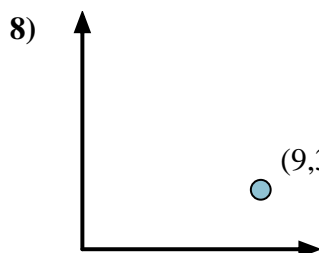
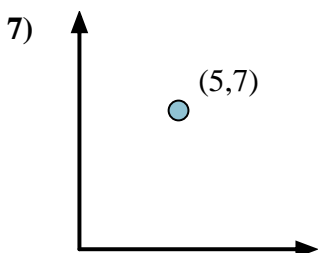
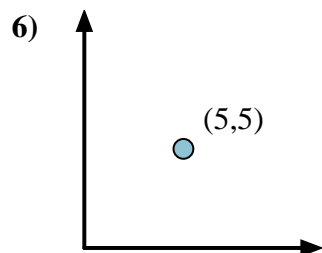
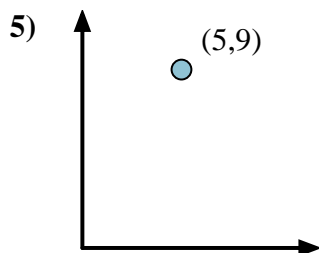
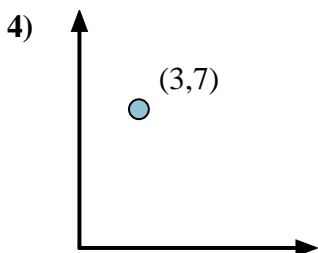
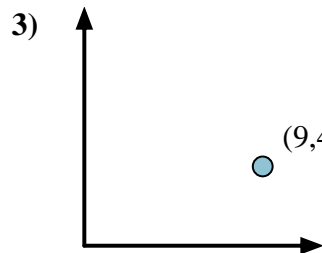
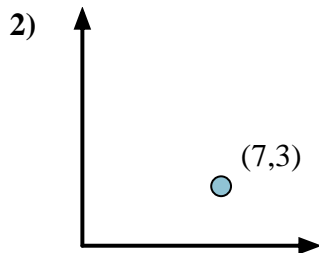
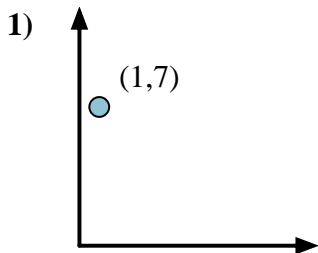
Em seguida, encontre o arco da tangente (também conhecido como tangente inversa) da inclinação.

$$\arctan(1.25) = 51.34^\circ$$



**Risposte**

1. \_\_\_\_\_
2. \_\_\_\_\_
3. \_\_\_\_\_
4. \_\_\_\_\_
5. \_\_\_\_\_
6. \_\_\_\_\_
7. \_\_\_\_\_
8. \_\_\_\_\_
9. \_\_\_\_\_
10. \_\_\_\_\_
11. \_\_\_\_\_
12. \_\_\_\_\_





Calcola l'angolo del cerchio rispetto a (0,0).

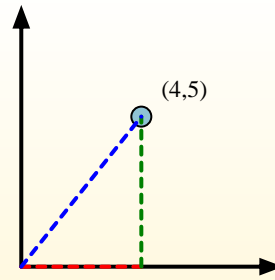
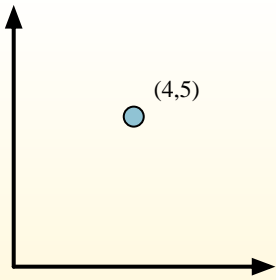
Primeramente encuentra la pendiente.

$$(y_2 - y_1) \div (x_2 - x_1) = m$$

$$(5 - 0) \div (4 - 0) = 1.25$$

Em seguida, encontre o arco da tangente (também conhecido como tangente inversa) da inclinação.

$$\arctan(1.25) = 51.34^\circ$$

**Risposte**1. **81,87**2. **23,20**3. **23,96**4. **66,80**5. **60,95**6. **45,00**7. **54,46**8. **18,43**9. **60,26**10. **18,43**11. **14,04**12. **48,37**