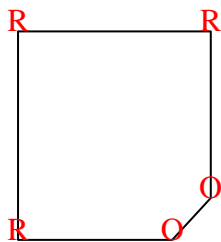


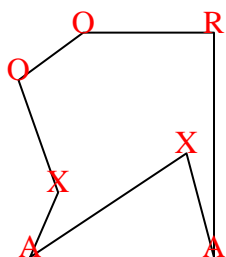


Conta il numero di angoli 'acuti', 'ottusi', 'retti' e 'concavi' in ogni forma.


Es)



1)



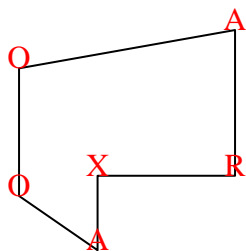
2)



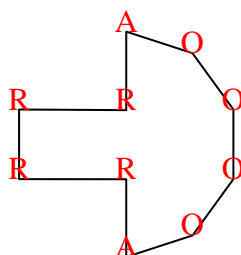
Risposte

Es.	0	2	3	0
1.	2	2	1	2
2.	0	0	4	0
3.	2	2	1	1
4.	2	4	4	0
5.	2	1	2	2
6.	1	1	3	1
7.	4	1	0	3
8.	1	3	4	3
9.	2	2	0	1
10.	2	1	1	1
11.	0	0	4	0

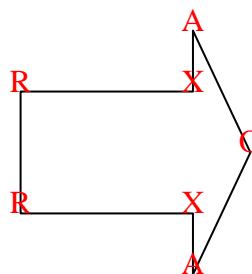
3)



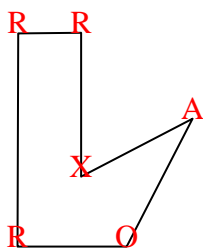
4)



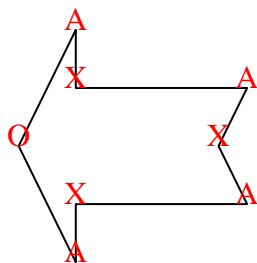
5)



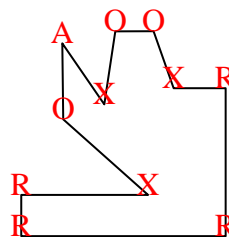
6)



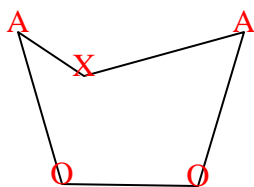
7)



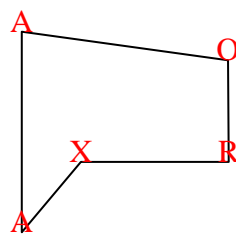
8)



9)



10)



11)

