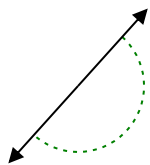


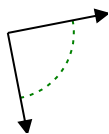


Determina se l'angolo mostrato è acuto, ottuso, retto, o piatto.

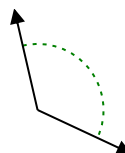
Es)



1)



2)



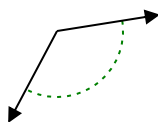
Risposte

Es. piatto

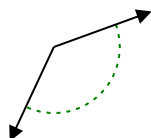
1. _____

2. _____

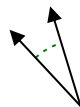
3)



4)



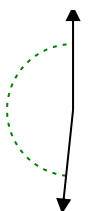
5)



3. _____

4. _____

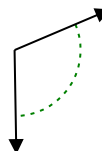
6)



7)



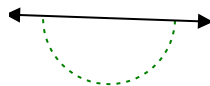
8)



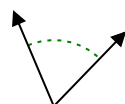
5. _____

6. _____

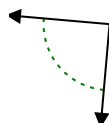
9)



10)



11)



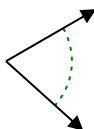
7. _____

8. _____

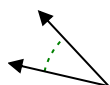
9. _____

10. _____

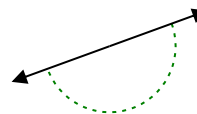
12)



13)



14)

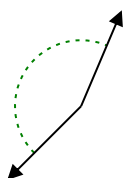


11. _____

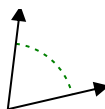
12. _____

13. _____

15)



16)



17)

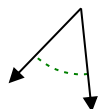


14. _____

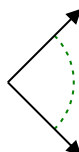
15. _____

16. _____

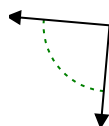
18)



19)



20)



17. _____

18. _____

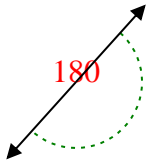
19. _____

20. _____

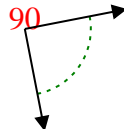


Determina se l'angolo mostrato è acuto, ottuso, retto, o piatto.

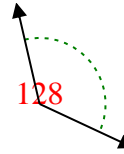
Es)



1)



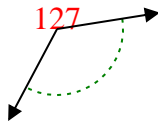
2)



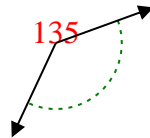
Risposte

Es. piatto

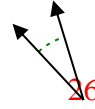
3)



4)



5)



1. retto

2. ottuso

3. ottuso

4. ottuso

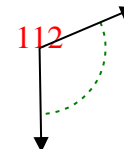
6)



7)



8)

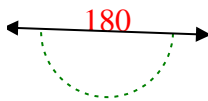


5. acuto

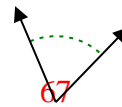
6. ottuso

7. ottuso

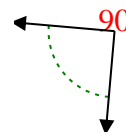
9)



10)



11)

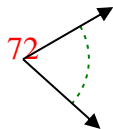


8. ottuso

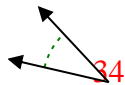
9. piatto

10. acuto

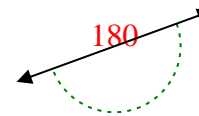
12)



13)



14)

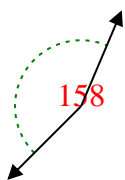


11. retto

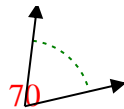
12. acuto

13. acuto

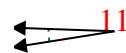
15)



16)



17)

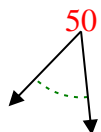


14. piatto

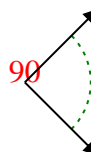
15. ottuso

16. acuto

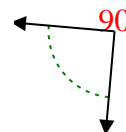
18)



19)



20)



17. acuto

18. acuto

19. retto

20. retto