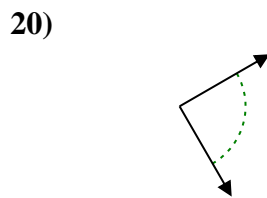
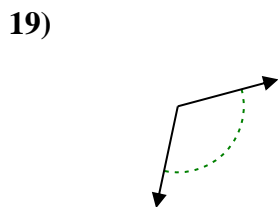
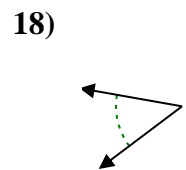
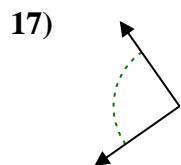
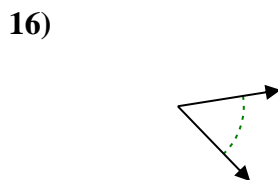
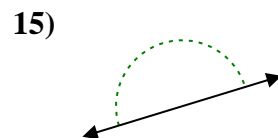
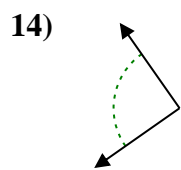
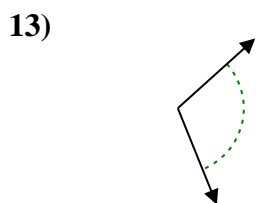
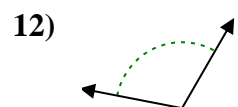
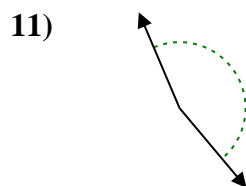
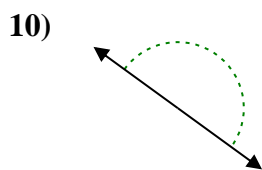
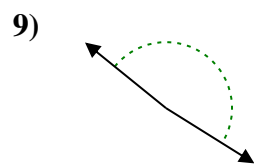
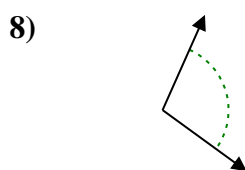
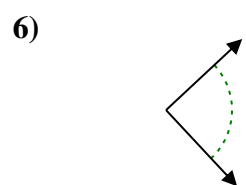
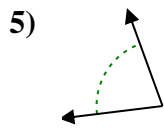
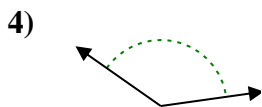
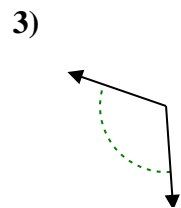
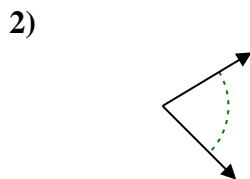
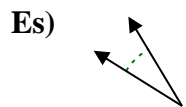




Determina se l'angolo mostrato è acuto, ottuso, retto, o piatto.



Risposte

Es. acuto

1. _____

2. _____

3. _____

4. _____

5. _____

6. _____

7. _____

8. _____

9. _____

10. _____

11. _____

12. _____

13. _____

14. _____

15. _____

16. _____

17. _____

18. _____

19. _____

20. _____

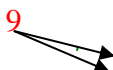


Determina se l'angolo mostrato è acuto, ottuso, retto, o piatto.

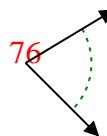
Es)



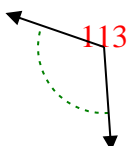
1)



2)



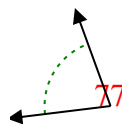
3)



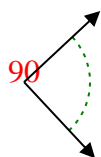
4)



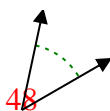
5)



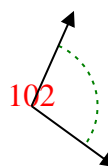
6)



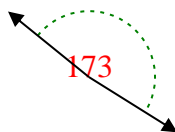
7)



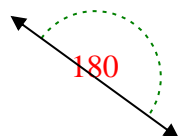
8)



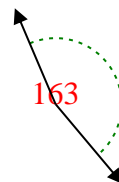
9)



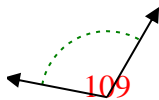
10)



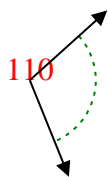
11)



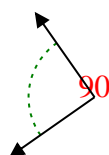
12)



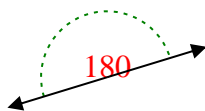
13)



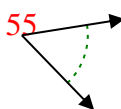
14)



15)



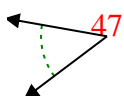
16)



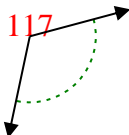
17)



18)



19)



20)



Risposte

Es. acuto

1. acuto

2. acuto

3. ottuso

4. ottuso

5. acuto

6. retto

7. acuto

8. ottuso

9. ottuso

10. piatto

11. ottuso

12. ottuso

13. ottuso

14. retto

15. piatto

16. acuto

17. retto

18. acuto

19. ottuso

20. retto