

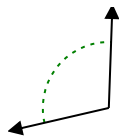


Determina se l'angolo mostrato è acuto, ottuso, retto, o piatto.

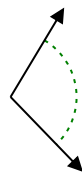
Es)



1)

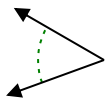


2)

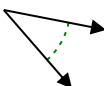


Es. **retto**

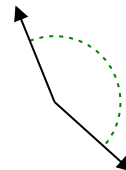
3)



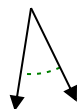
4)



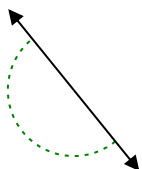
5)



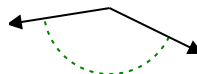
6)



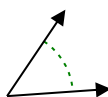
7)



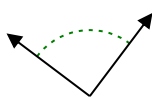
8)



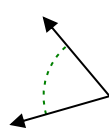
9)



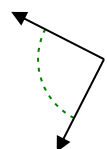
10)



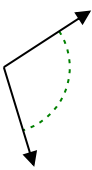
11)



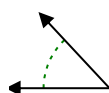
12)



13)



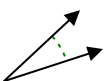
14)



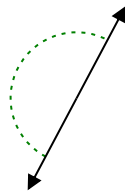
15)



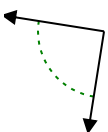
16)



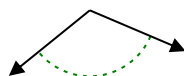
17)



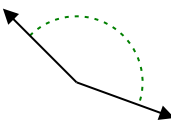
18)



19)



20)

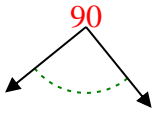


- 1. _____
- 2. _____
- 3. _____
- 4. _____
- 5. _____
- 6. _____
- 7. _____
- 8. _____
- 9. _____
- 10. _____
- 11. _____
- 12. _____
- 13. _____
- 14. _____
- 15. _____
- 16. _____
- 17. _____
- 18. _____
- 19. _____
- 20. _____

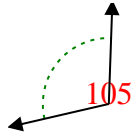


Determina se l'angolo mostrato è acuto, ottuso, retto, o piatto.

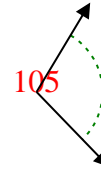
Es)



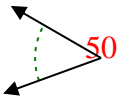
1)



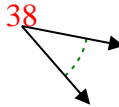
2)



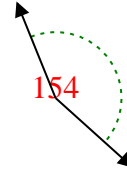
3)



4)



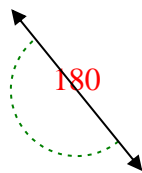
5)



6)



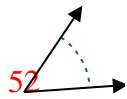
7)



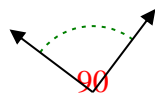
8)



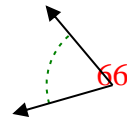
9)



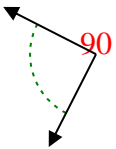
10)



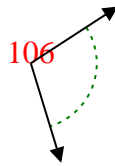
11)



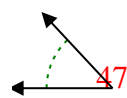
12)



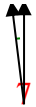
13)



14)



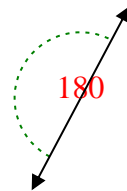
15)



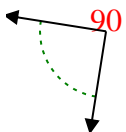
16)



17)



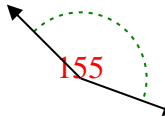
18)



19)



20)



Risposte

Es. retto

1. ottuso

2. ottuso

3. acuto

4. acuto

5. ottuso

6. acuto

7. piatto

8. ottuso

9. acuto

10. retto

11. acuto

12. retto

13. ottuso

14. acuto

15. acuto

16. acuto

17. piatto

18. retto

19. ottuso

20. ottuso