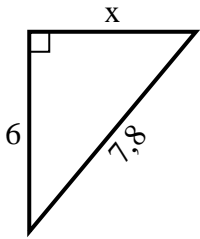


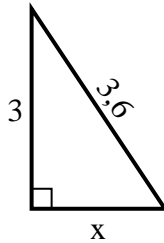


Trova il valore di X.

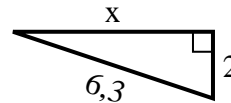
1) Perimetro = 18,8 u



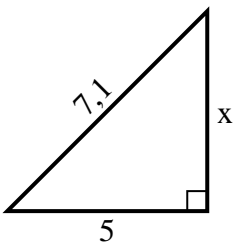
2) Perimetro = 8,6 u



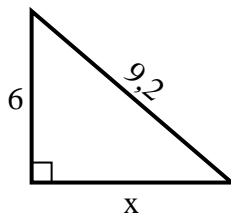
3) Perimetro = 14,3 u



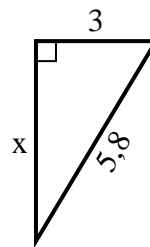
4) Perimetro = 17,1 u



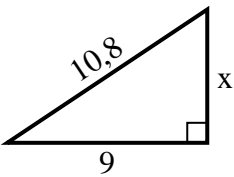
5) Perimetro = 22,2 u



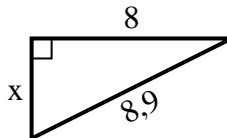
6) Perimetro = 13,8 u



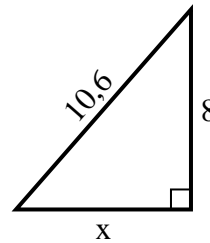
7) Perimetro = 25,8 u



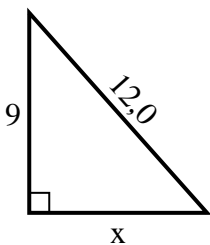
8) Perimetro = 20,9 u



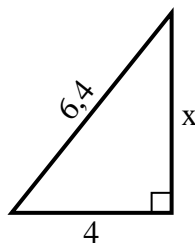
9) Perimetro = 25,6 u



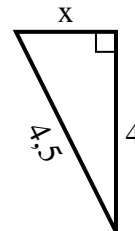
10) Perimetro = 29 u



11) Perimetro = 15,4 u



12) Perimetro = 10,5 u



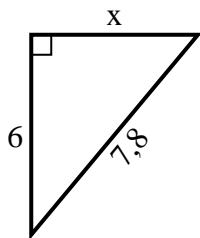
Risposte

1. _____
2. _____
3. _____
4. _____
5. _____
6. _____
7. _____
8. _____
9. _____
10. _____
11. _____
12. _____

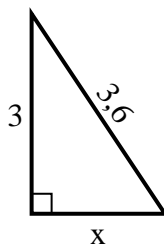


Trova il valore di X.

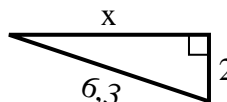
1) Perimetro = 18,8 u



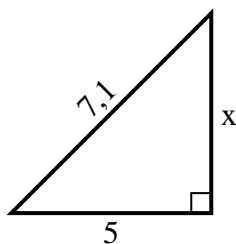
2) Perimetro = 8,6 u



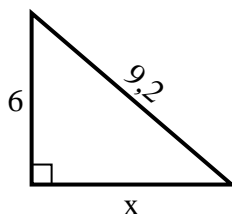
3) Perimetro = 14,3 u



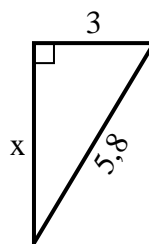
4) Perimetro = 17,1 u



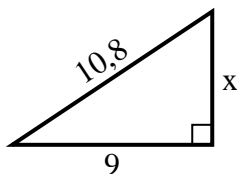
5) Perimetro = 22,2 u



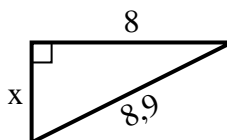
6) Perimetro = 13,8 u



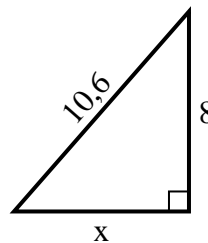
7) Perimetro = 25,8 u



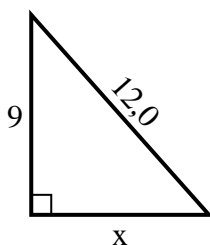
8) Perimetro = 20,9 u



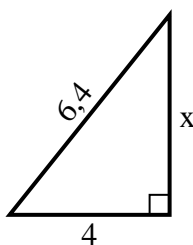
9) Perimetro = 25,6 u



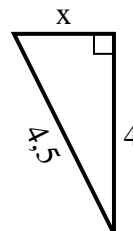
10) Perimetro = 29 u



11) Perimetro = 15,4 u



12) Perimetro = 10,5 u



Risposte

1. 5

2. 2

3. 6

4. 5

5. 7

6. 5

7. 6

8. 4

9. 7

10. 8

11. 5

12. 2