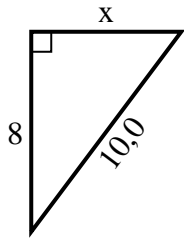


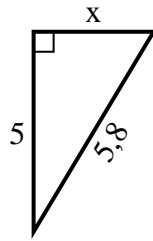


**Trova il valore di X.**

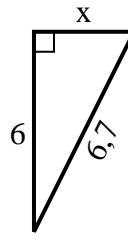
1) Perimetro = 24 u



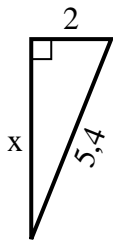
2) Perimetro = 13,8 u



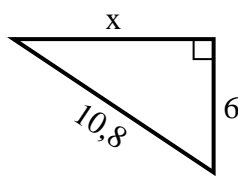
3) Perimetro = 15,7 u



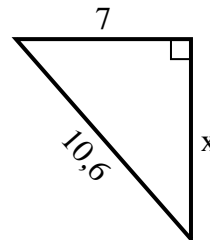
4) Perimetro = 12,4 u



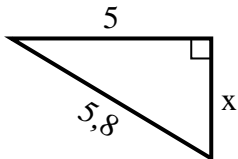
5) Perimetro = 25,8 u



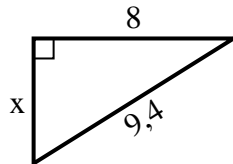
6) Perimetro = 25,6 u



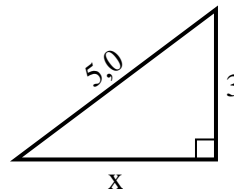
7) Perimetro = 13,8 u



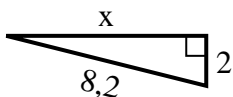
8) Perimetro = 22,4 u



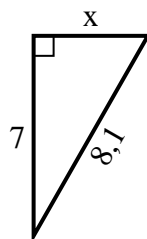
9) Perimetro = 12 u



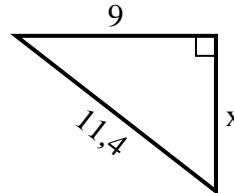
10) Perimetro = 18,2 u



11) Perimetro = 19,1 u



12) Perimetro = 27,4 u



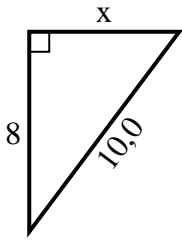
**Risposte**

1. \_\_\_\_\_
2. \_\_\_\_\_
3. \_\_\_\_\_
4. \_\_\_\_\_
5. \_\_\_\_\_
6. \_\_\_\_\_
7. \_\_\_\_\_
8. \_\_\_\_\_
9. \_\_\_\_\_
10. \_\_\_\_\_
11. \_\_\_\_\_
12. \_\_\_\_\_

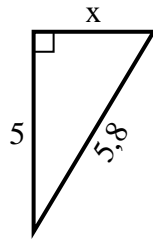


Trova il valore di X.

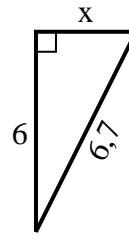
1) Perimetro = 24 u



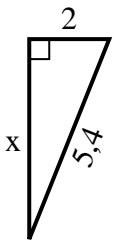
2) Perimetro = 13,8 u



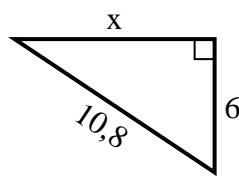
3) Perimetro = 15,7 u



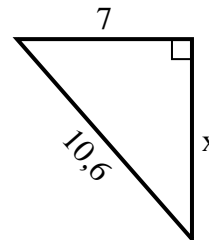
4) Perimetro = 12,4 u



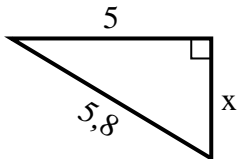
5) Perimetro = 25,8 u



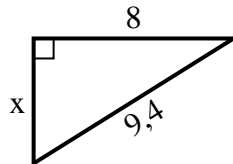
6) Perimetro = 25,6 u



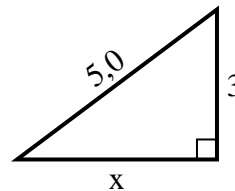
7) Perimetro = 13,8 u



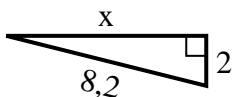
8) Perimetro = 22,4 u



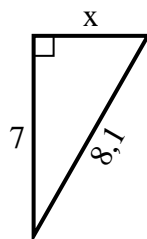
9) Perimetro = 12 u



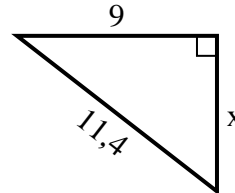
10) Perimetro = 18,2 u



11) Perimetro = 19,1 u



12) Perimetro = 27,4 u



**Risposte**

1. 6

2. 3

3. 3

4. 5

5. 9

6. 8

7. 3

8. 5

9. 4

10. 8

11. 4

12. 7