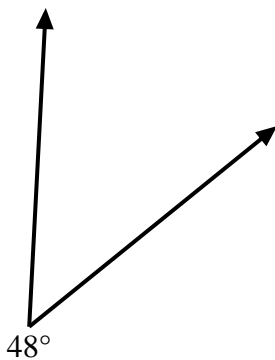


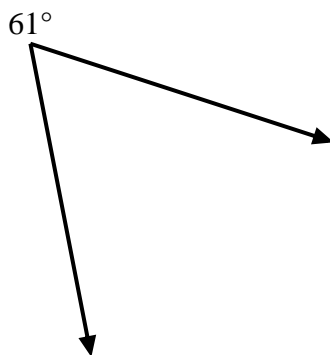


Usa un goniometro per creare un triangolo dalla figura mostrata. Rispondi con gli angoli mancanti. Le risposte varieranno.

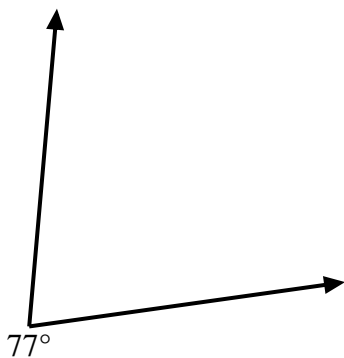
1)



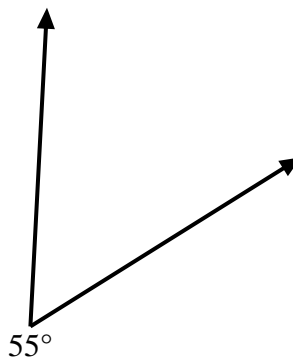
2)



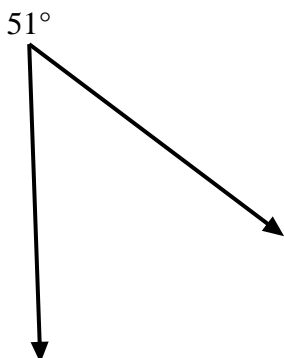
3)



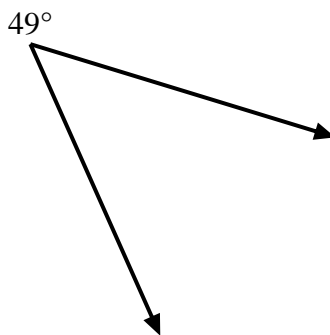
4)



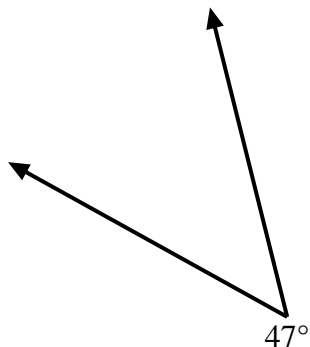
5)



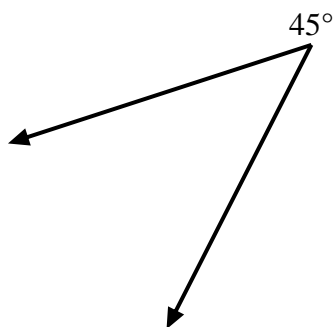
6)



7)



8)



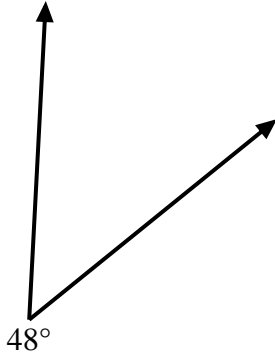
Risposte

- 1. _____
- 2. _____
- 3. _____
- 4. _____
- 5. _____
- 6. _____
- 7. _____
- 8. _____

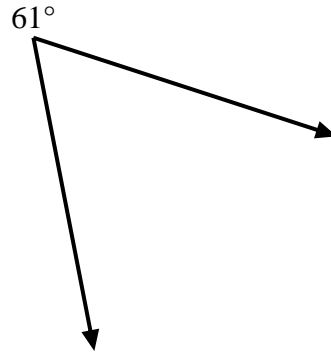


Usa un goniometro per creare un triangolo dalla figura mostrata. Rispondi con gli angoli mancanti. Le risposte varieranno.

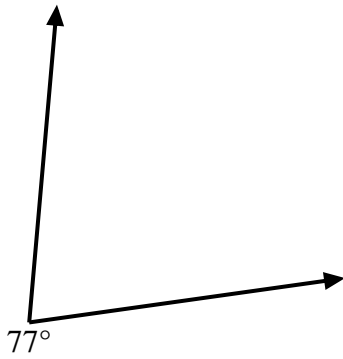
1)



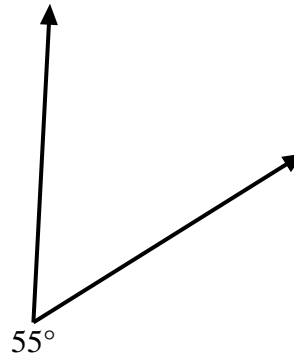
2)



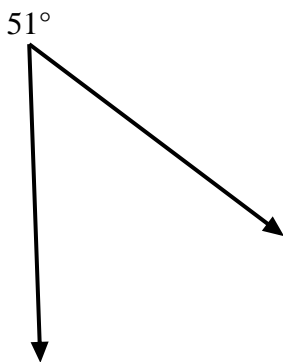
3)



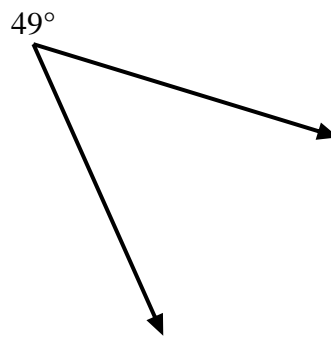
4)



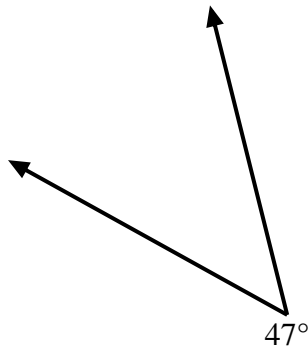
5)



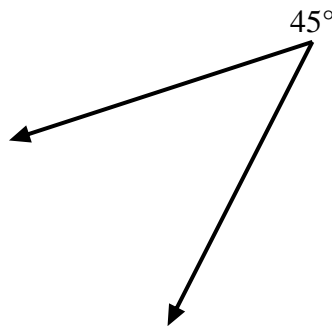
6)



7)



8)



Risposte

1. **=132**

2. **=119**

3. **=103**

4. **=125**

5. **=129**

6. **=131**

7. **=133**

8. **=135**