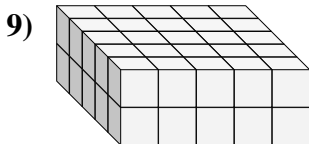
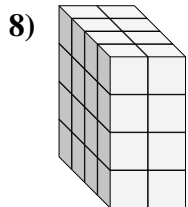
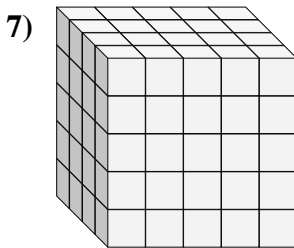
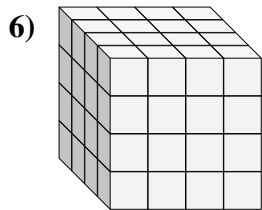
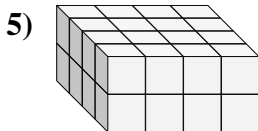
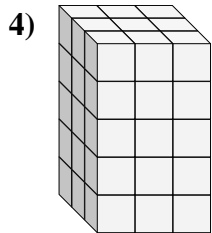
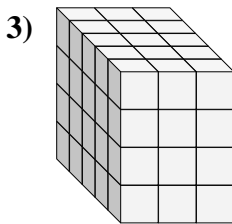
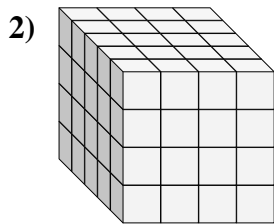
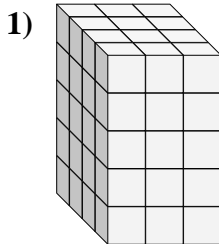
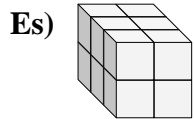




Trova la lunghezza, larghezza e altezza di ogni prisma. Poi calcola il volume.



**Risposte**

P L H V

Es. 3 2 2 12

1. \_\_\_\_\_

2. \_\_\_\_\_

3. \_\_\_\_\_

4. \_\_\_\_\_

5. \_\_\_\_\_

6. \_\_\_\_\_

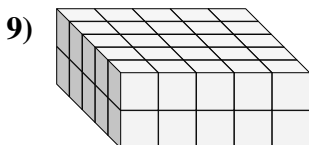
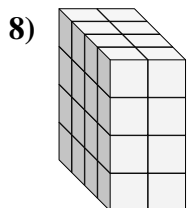
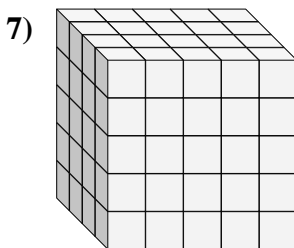
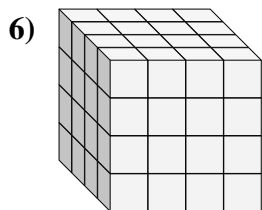
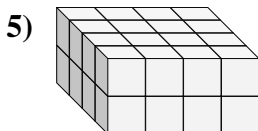
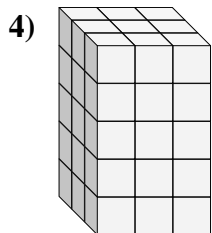
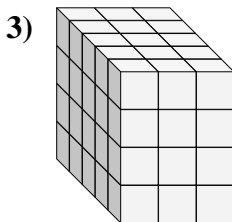
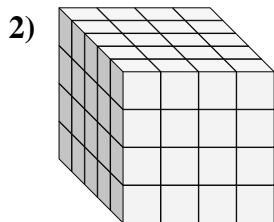
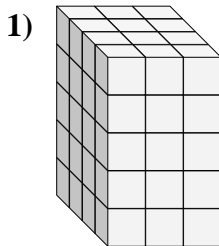
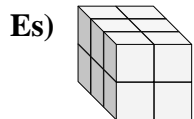
7. \_\_\_\_\_

8. \_\_\_\_\_

9. \_\_\_\_\_



Trova la lunghezza, larghezza e altezza di ogni prisma. Poi calcola il volume.



**Risposte**

	P	L	H	V
Es.	3	2	2	12
1.	4	3	5	60
2.	5	4	4	80
3.	5	3	4	60
4.	3	3	5	45
5.	4	4	2	32
6.	4	4	4	64
7.	4	5	5	100
8.	4	2	4	32
9.	5	5	2	50