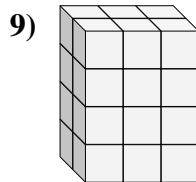
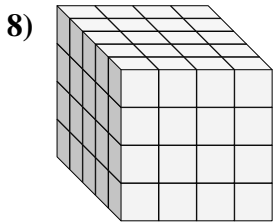
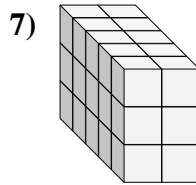
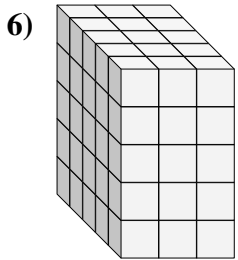
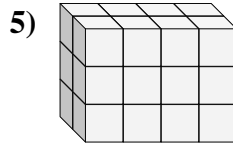
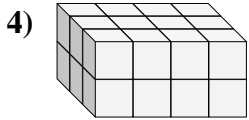
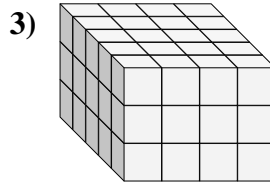
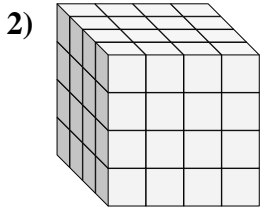
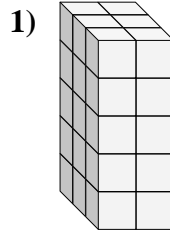
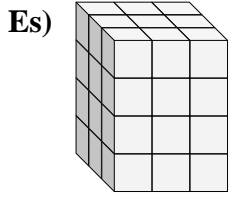




Trova la lunghezza, larghezza e altezza di ogni prisma. Poi calcola il volume.



Risposte

P L H V

Es. 3 3 4 36

1. _____

2. _____

3. _____

4. _____

5. _____

6. _____

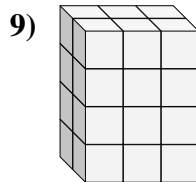
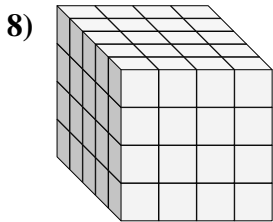
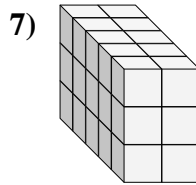
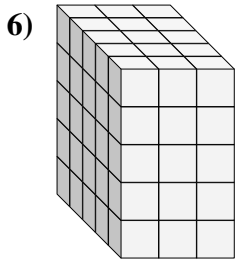
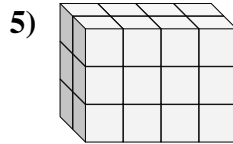
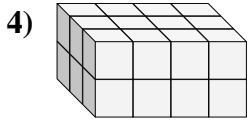
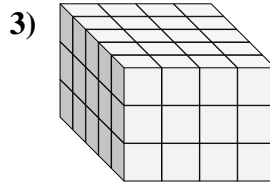
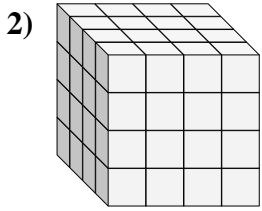
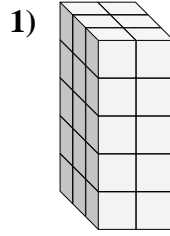
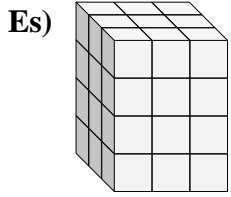
7. _____

8. _____

9. _____



Trova la lunghezza, larghezza e altezza di ogni prisma. Poi calcola il volume.

**Risposte**

P L H V

Es. 3 3 4 361. 3 2 5 302. 4 4 4 643. 5 4 3 604. 3 4 2 245. 2 4 3 246. 5 3 5 757. 5 2 3 308. 5 4 4 809. 2 3 4 24