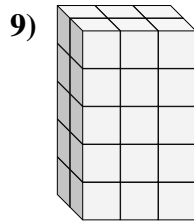
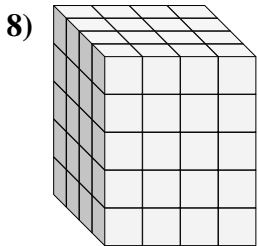
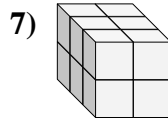
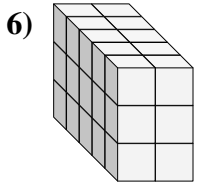
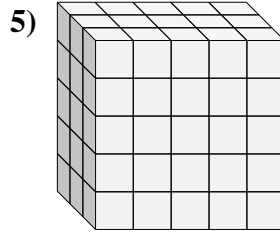
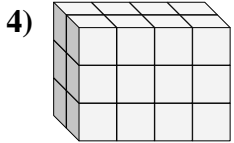
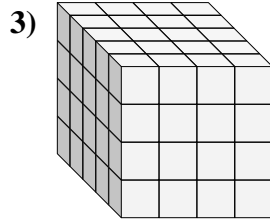
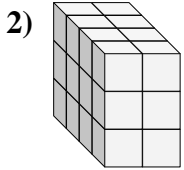
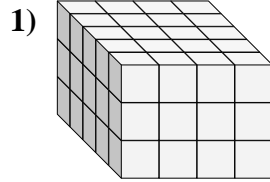
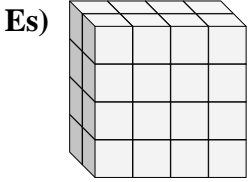




Trova la lunghezza, larghezza e altezza di ogni prisma. Poi calcola il volume.



**Risposte**

P L H V

Es. 2 4 4 32

1. \_\_\_\_\_

2. \_\_\_\_\_

3. \_\_\_\_\_

4. \_\_\_\_\_

5. \_\_\_\_\_

6. \_\_\_\_\_

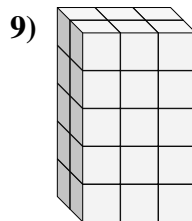
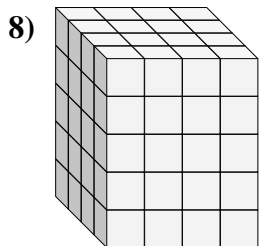
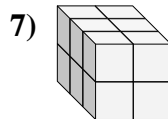
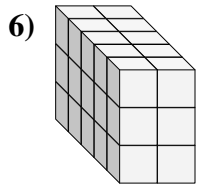
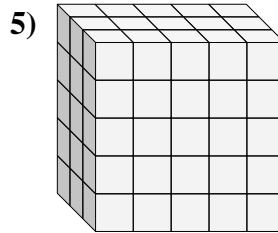
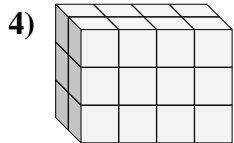
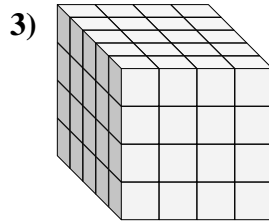
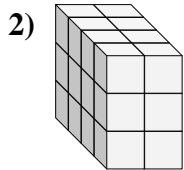
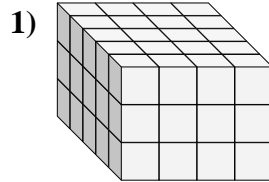
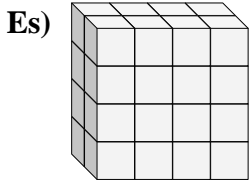
7. \_\_\_\_\_

8. \_\_\_\_\_

9. \_\_\_\_\_



Trova la lunghezza, larghezza e altezza di ogni prisma. Poi calcola il volume.



**Risposte**

|     | P        | L        | H        | V         |
|-----|----------|----------|----------|-----------|
| Es. | <u>2</u> | <u>4</u> | <u>4</u> | <u>32</u> |
| 1.  | <u>5</u> | <u>4</u> | <u>3</u> | <u>60</u> |
| 2.  | <u>4</u> | <u>2</u> | <u>3</u> | <u>24</u> |
| 3.  | <u>5</u> | <u>4</u> | <u>4</u> | <u>80</u> |
| 4.  | <u>2</u> | <u>4</u> | <u>3</u> | <u>24</u> |
| 5.  | <u>3</u> | <u>5</u> | <u>5</u> | <u>75</u> |
| 6.  | <u>5</u> | <u>2</u> | <u>3</u> | <u>30</u> |
| 7.  | <u>3</u> | <u>2</u> | <u>2</u> | <u>12</u> |
| 8.  | <u>4</u> | <u>4</u> | <u>5</u> | <u>80</u> |
| 9.  | <u>2</u> | <u>3</u> | <u>5</u> | <u>30</u> |