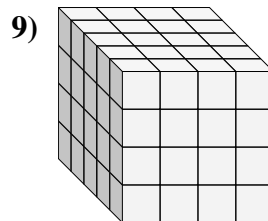
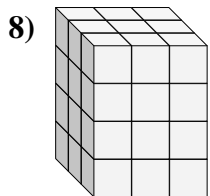
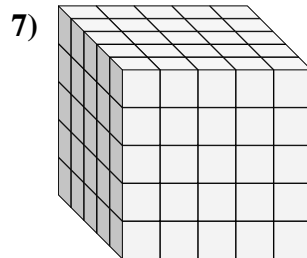
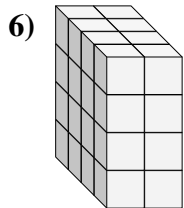
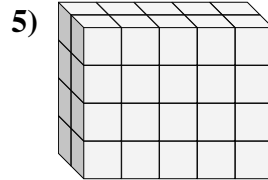
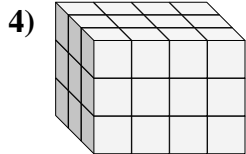
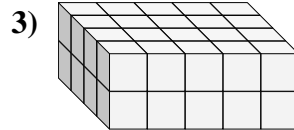
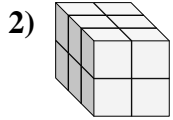
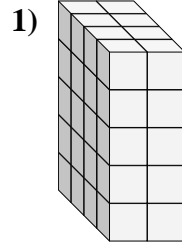
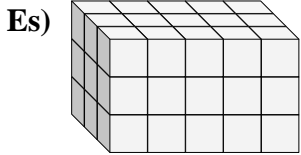




Trova la lunghezza, larghezza e altezza di ogni prisma. Poi calcola il volume.



Risposte

P L H V

Es. 3 5 3 45

1. _____

2. _____

3. _____

4. _____

5. _____

6. _____

7. _____

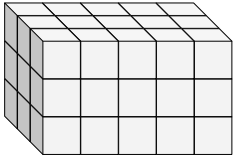
8. _____

9. _____

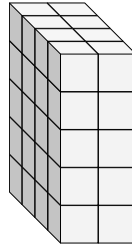


Trova la lunghezza, larghezza e altezza di ogni prisma. Poi calcola il volume.

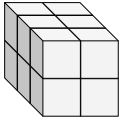
Es)



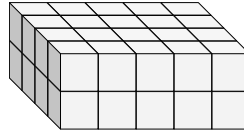
1)



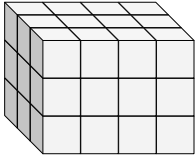
2)



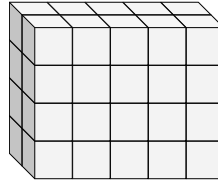
3)



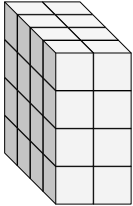
4)



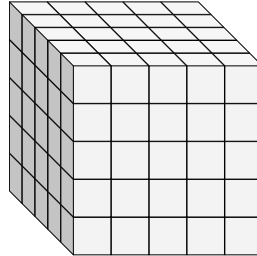
5)



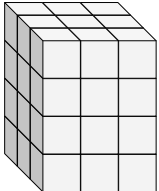
6)



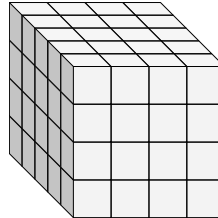
7)



8)



9)

**Risposte**

P L H V

Es. 3 5 3 451. 4 2 5 402. 3 2 2 123. 4 5 2 404. 3 4 3 365. 2 5 4 406. 4 2 4 327. 5 5 5 1258. 3 3 4 369. 5 4 4 80