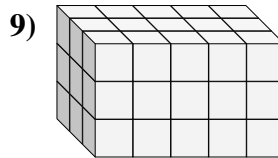
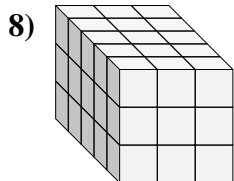
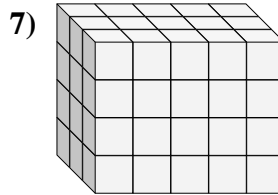
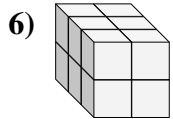
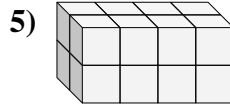
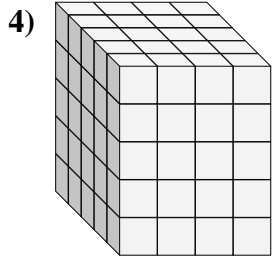
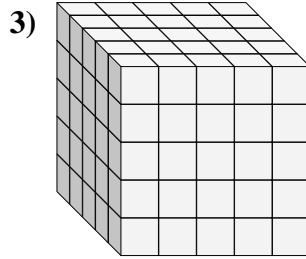
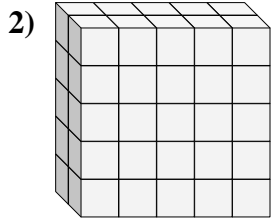
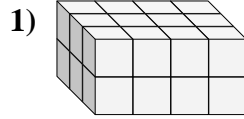
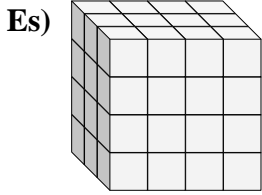




Trova la lunghezza, larghezza e altezza di ogni prisma. Poi calcola il volume.



Risposte

P L H V

Es. 3 4 4 48

1. _____

2. _____

3. _____

4. _____

5. _____

6. _____

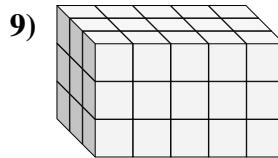
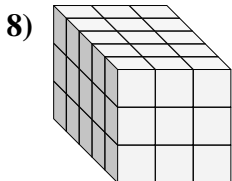
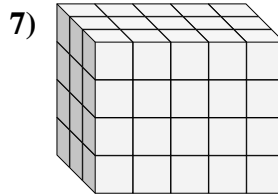
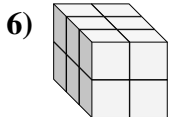
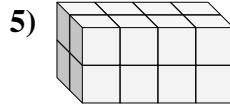
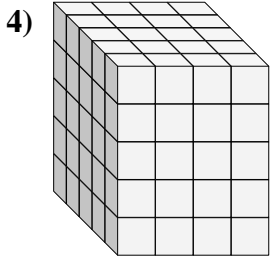
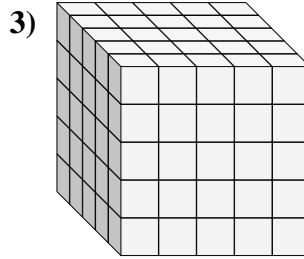
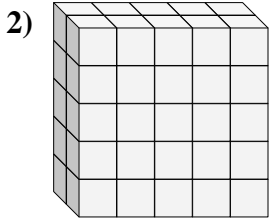
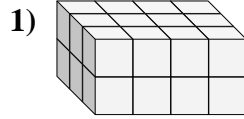
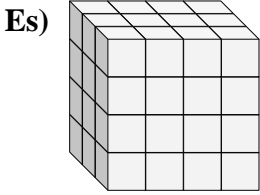
7. _____

8. _____

9. _____



Trova la lunghezza, larghezza e altezza di ogni prisma. Poi calcola il volume.



Risposte

P L H V

Es. 3 4 4 48

1. 3 4 2 24

2. 2 5 5 50

3. 5 5 5 125

4. 5 4 5 100

5. 2 4 2 16

6. 3 2 2 12

7. 3 5 4 60

8. 5 3 3 45

9. 3 5 3 45