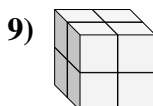
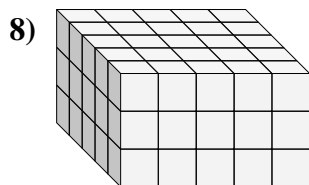
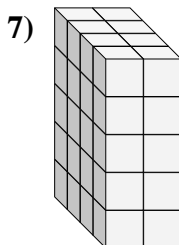
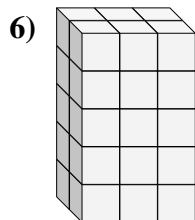
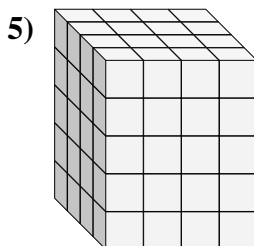
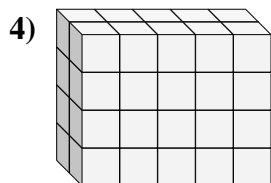
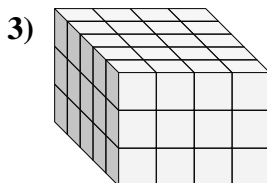
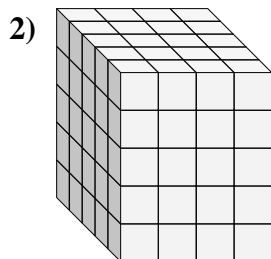
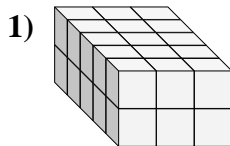
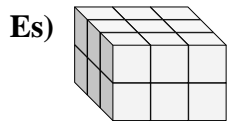




Trova la lunghezza, larghezza e altezza di ogni prisma. Poi calcola il volume.



Risposte

P L H V

Es. 3 3 2 18

1. _____

2. _____

3. _____

4. _____

5. _____

6. _____

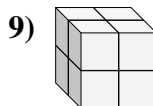
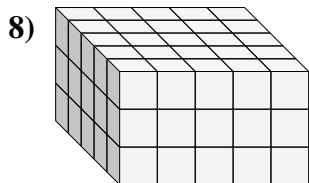
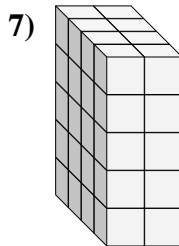
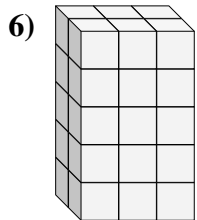
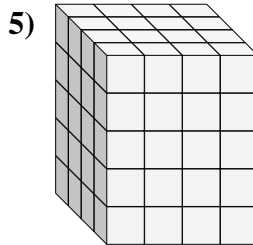
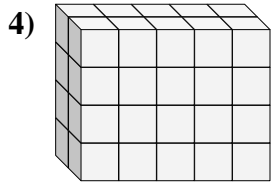
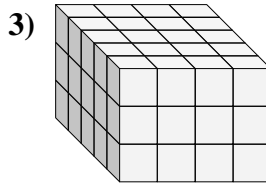
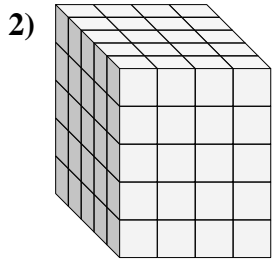
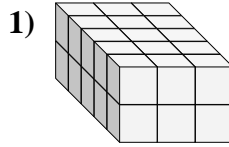
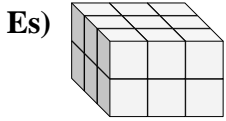
7. _____

8. _____

9. _____



Trova la lunghezza, larghezza e altezza di ogni prisma. Poi calcola il volume.



Risposte

	P	L	H	V
Es.	<u>3</u>	<u>3</u>	<u>2</u>	<u>18</u>
1.	<u>5</u>	<u>3</u>	<u>2</u>	<u>30</u>
2.	<u>5</u>	<u>4</u>	<u>5</u>	<u>100</u>
3.	<u>5</u>	<u>4</u>	<u>3</u>	<u>60</u>
4.	<u>2</u>	<u>5</u>	<u>4</u>	<u>40</u>
5.	<u>4</u>	<u>4</u>	<u>5</u>	<u>80</u>
6.	<u>2</u>	<u>3</u>	<u>5</u>	<u>30</u>
7.	<u>4</u>	<u>2</u>	<u>5</u>	<u>40</u>
8.	<u>5</u>	<u>5</u>	<u>3</u>	<u>75</u>
9.	<u>2</u>	<u>2</u>	<u>2</u>	<u>8</u>