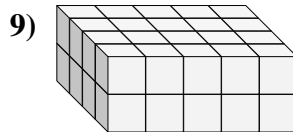
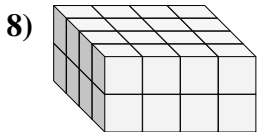
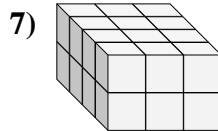
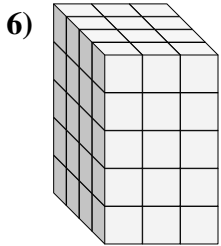
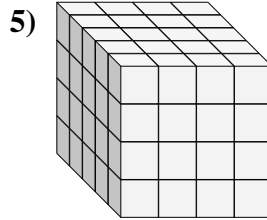
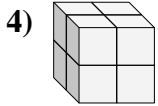
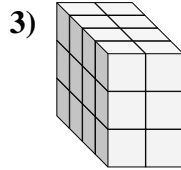
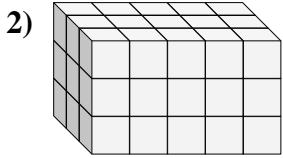
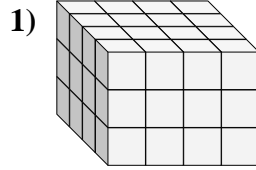
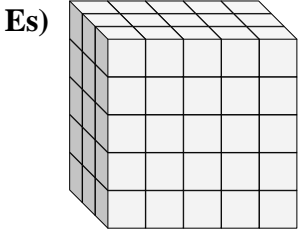




Trova la lunghezza, larghezza e altezza di ogni prisma. Poi calcola il volume.



Risposte

P L H V

Es. 3 5 5 75

1. _____

2. _____

3. _____

4. _____

5. _____

6. _____

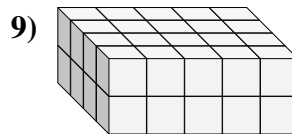
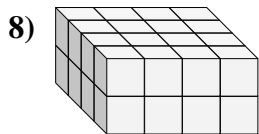
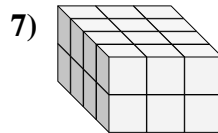
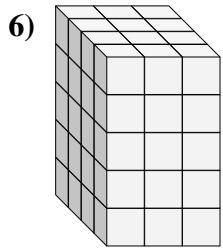
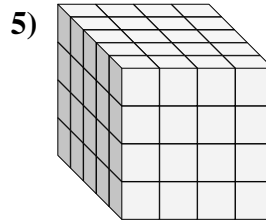
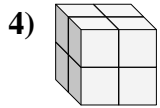
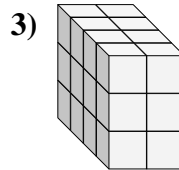
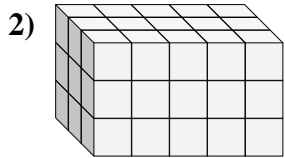
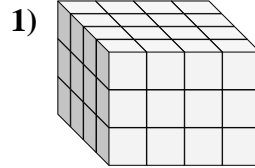
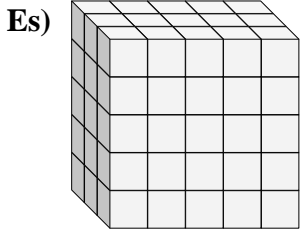
7. _____

8. _____

9. _____



Trova la lunghezza, larghezza e altezza di ogni prisma. Poi calcola il volume.

**Risposte**

	P	L	H	V
Es.	3	5	5	75
1.	4	4	3	48
2.	3	5	3	45
3.	4	2	3	24
4.	2	2	2	8
5.	5	4	4	80
6.	4	3	5	60
7.	4	3	2	24
8.	4	4	2	32
9.	4	5	2	40