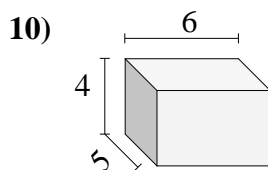
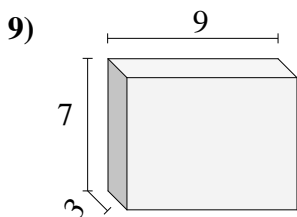
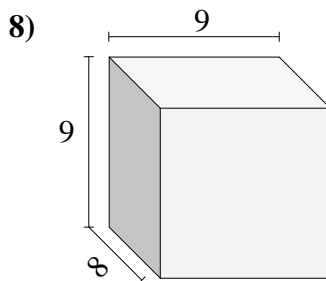
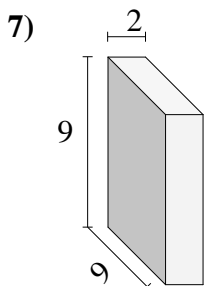
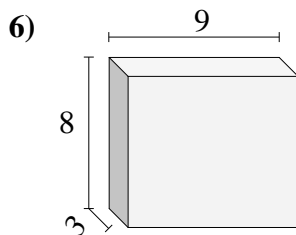
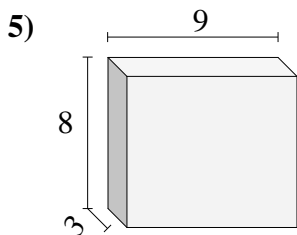
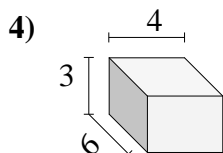
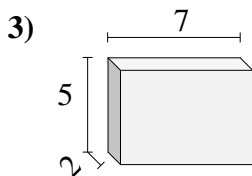
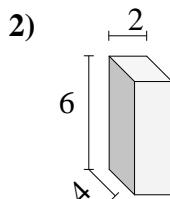
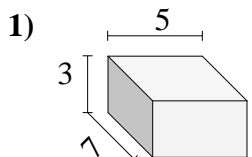




Trova il volume di ogni prisma.



**Risposte**

1. \_\_\_\_\_

2. \_\_\_\_\_

3. \_\_\_\_\_

4. \_\_\_\_\_

5. \_\_\_\_\_

6. \_\_\_\_\_

7. \_\_\_\_\_

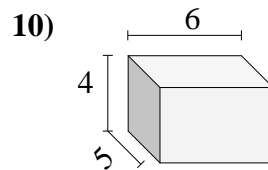
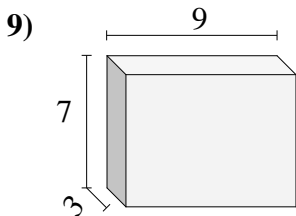
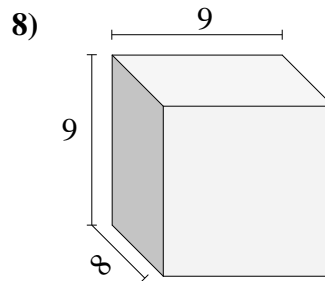
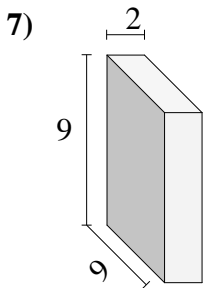
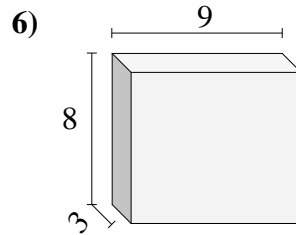
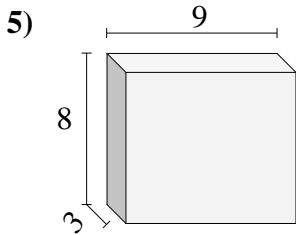
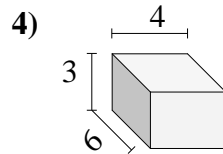
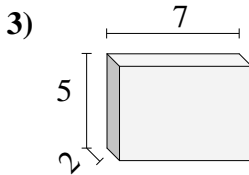
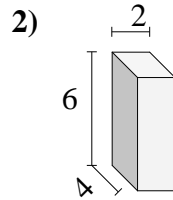
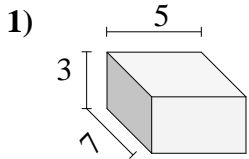
8. \_\_\_\_\_

9. \_\_\_\_\_

10. \_\_\_\_\_



Trova il volume di ogni prisma.



**Risposte**

1. **105**

2. **48**

3. **70**

4. **72**

5. **216**

6. **216**

7. **162**

8. **648**

9. **189**

10. **120**