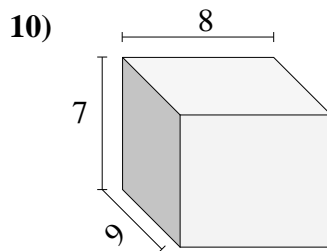
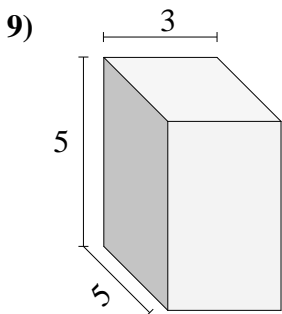
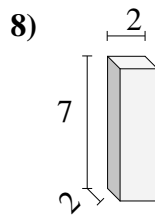
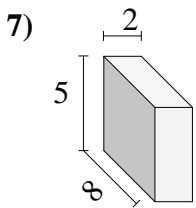
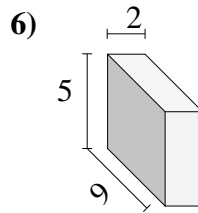
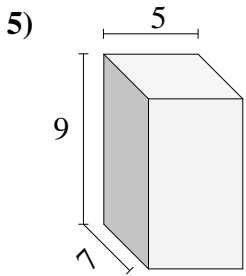
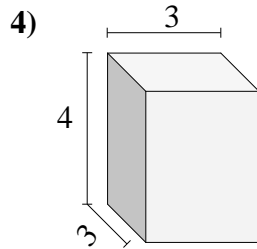
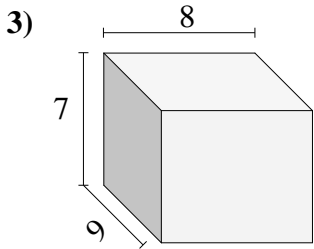
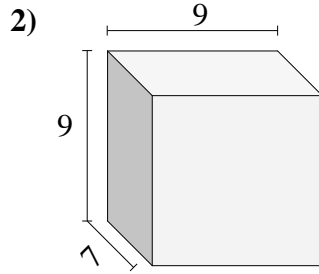
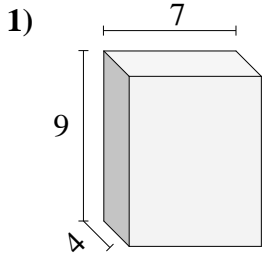




Trova il volume di ogni prisma.



**Risposte**

1. \_\_\_\_\_

2. \_\_\_\_\_

3. \_\_\_\_\_

4. \_\_\_\_\_

5. \_\_\_\_\_

6. \_\_\_\_\_

7. \_\_\_\_\_

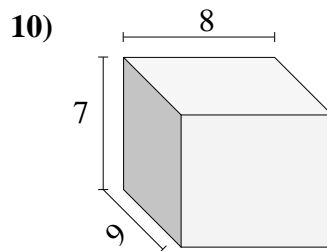
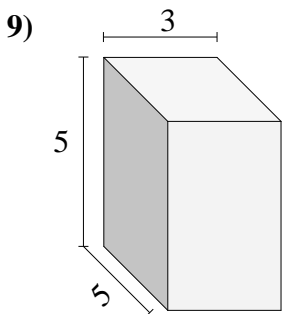
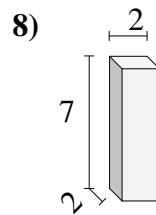
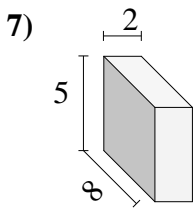
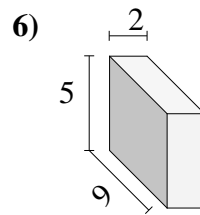
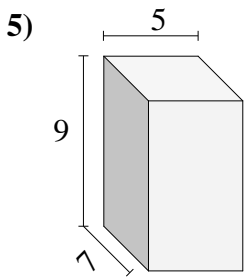
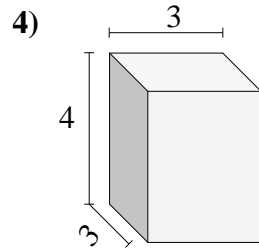
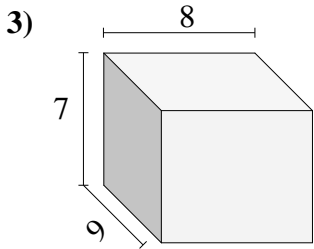
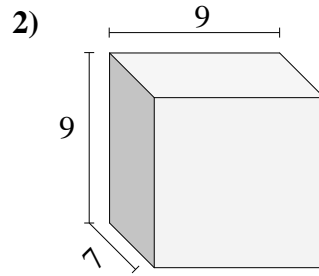
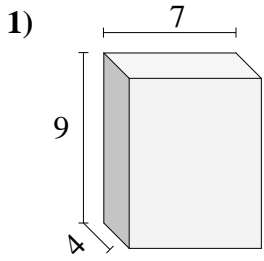
8. \_\_\_\_\_

9. \_\_\_\_\_

10. \_\_\_\_\_

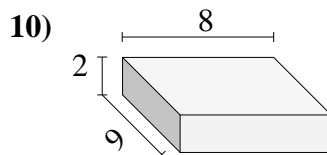
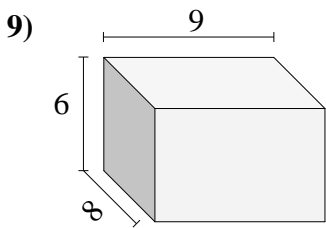
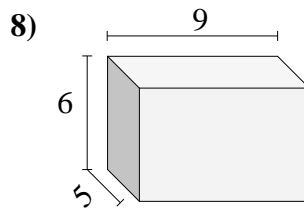
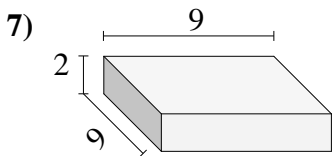
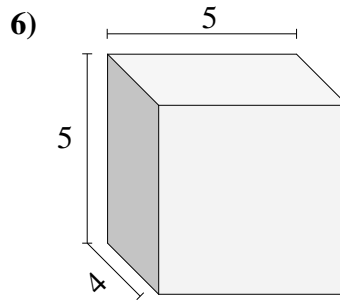
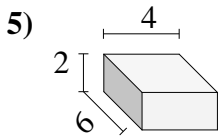
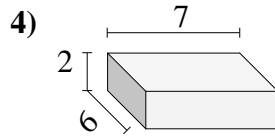
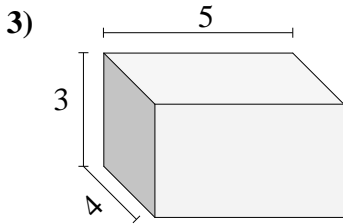
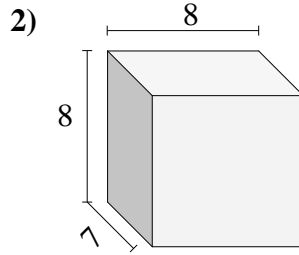
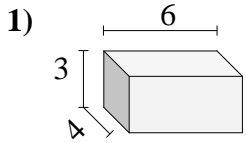


Trova il volume di ogni prisma.

**Risposte**1. 252 cm<sup>3</sup>2. 567 cm<sup>3</sup>3. 504 cm<sup>3</sup>4. 36 cm<sup>3</sup>5. 315 cm<sup>3</sup>6. 90 cm<sup>3</sup>7. 80 cm<sup>3</sup>8. 28 cm<sup>3</sup>9. 75 cm<sup>3</sup>10. 504 cm<sup>3</sup>



Trova il volume di ogni prisma.

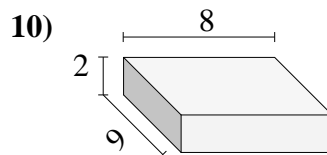
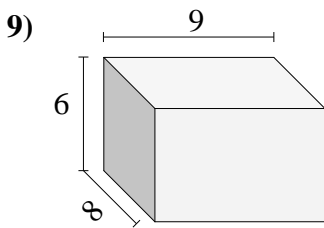
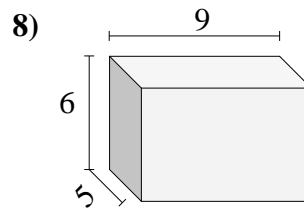
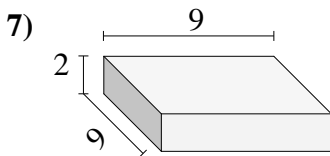
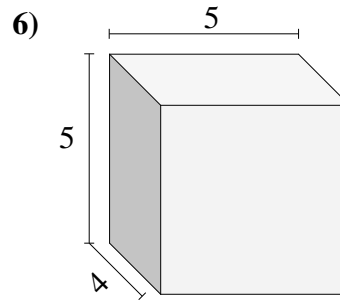
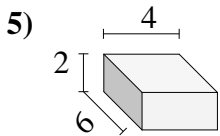
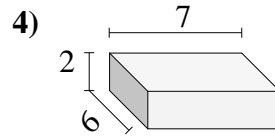
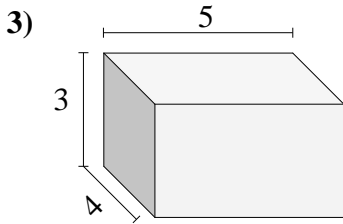
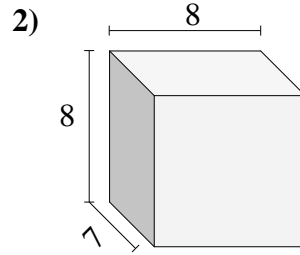
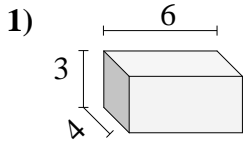


**Risposte**

- 1. \_\_\_\_\_
- 2. \_\_\_\_\_
- 3. \_\_\_\_\_
- 4. \_\_\_\_\_
- 5. \_\_\_\_\_
- 6. \_\_\_\_\_
- 7. \_\_\_\_\_
- 8. \_\_\_\_\_
- 9. \_\_\_\_\_
- 10. \_\_\_\_\_

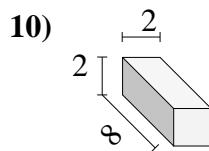
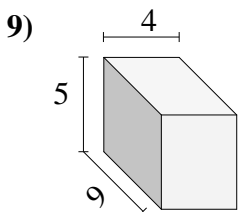
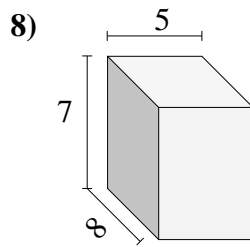
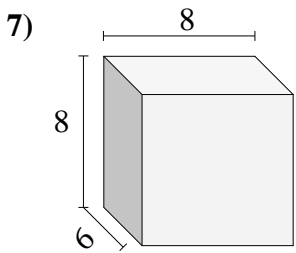
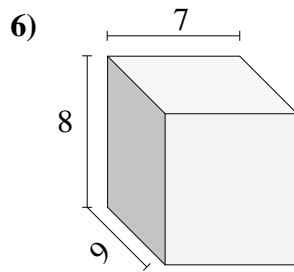
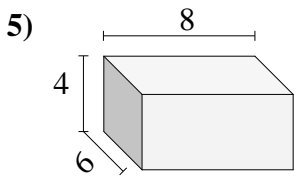
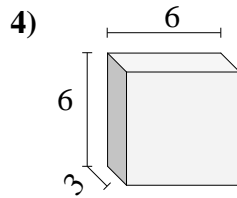
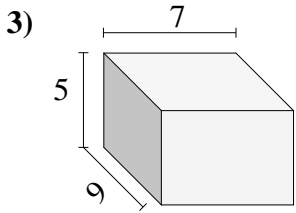
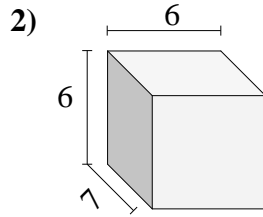
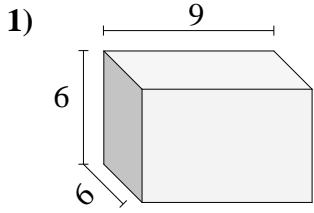


Trova il volume di ogni prisma.

**Risposte**1. 72 cm<sup>3</sup>2. 448 cm<sup>3</sup>3. 60 cm<sup>3</sup>4. 84 cm<sup>3</sup>5. 48 cm<sup>3</sup>6. 100 cm<sup>3</sup>7. 162 cm<sup>3</sup>8. 270 cm<sup>3</sup>9. 432 cm<sup>3</sup>10. 144 cm<sup>3</sup>



Trova il volume di ogni prisma.



**Risposte**

1. \_\_\_\_\_

2. \_\_\_\_\_

3. \_\_\_\_\_

4. \_\_\_\_\_

5. \_\_\_\_\_

6. \_\_\_\_\_

7. \_\_\_\_\_

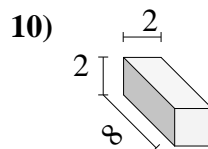
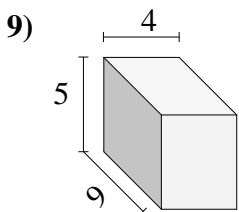
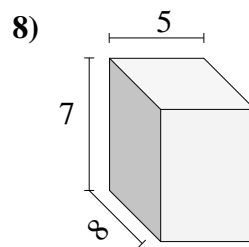
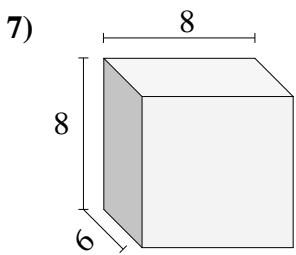
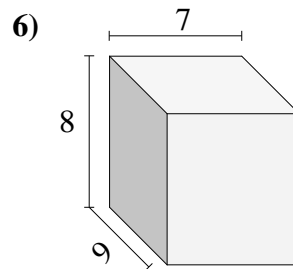
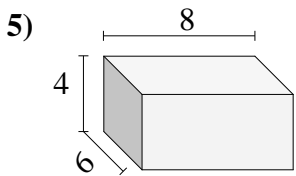
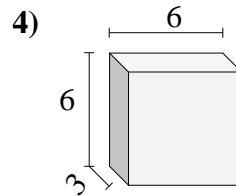
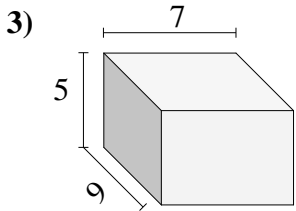
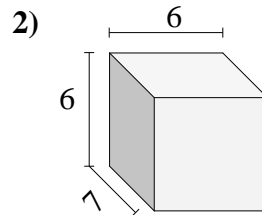
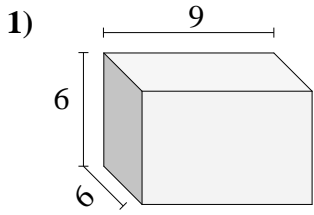
8. \_\_\_\_\_

9. \_\_\_\_\_

10. \_\_\_\_\_

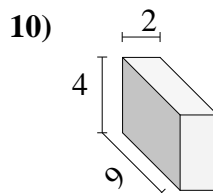
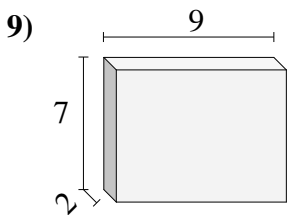
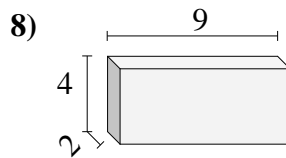
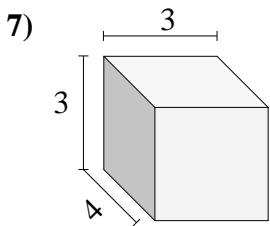
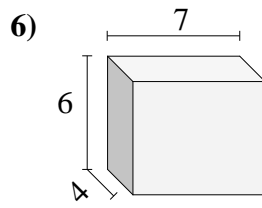
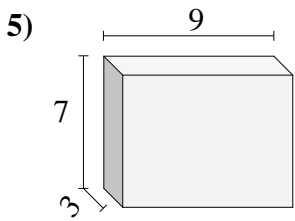
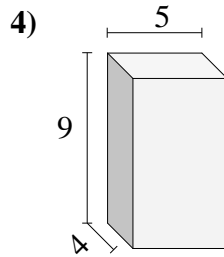
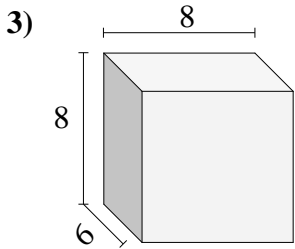
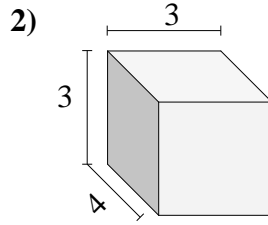
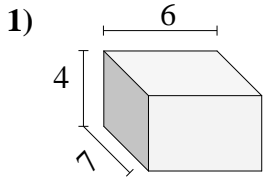


Trova il volume di ogni prisma.

**Risposte**1. 324 cm<sup>3</sup>2. 252 cm<sup>3</sup>3. 315 cm<sup>3</sup>4. 108 cm<sup>3</sup>5. 192 cm<sup>3</sup>6. 504 cm<sup>3</sup>7. 384 cm<sup>3</sup>8. 280 cm<sup>3</sup>9. 180 cm<sup>3</sup>10. 32 cm<sup>3</sup>



Trova il volume di ogni prisma.

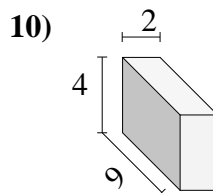
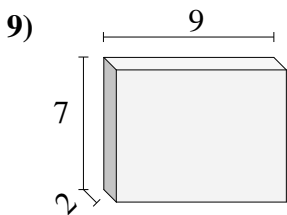
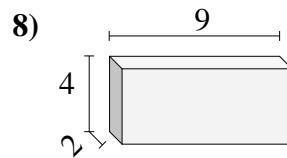
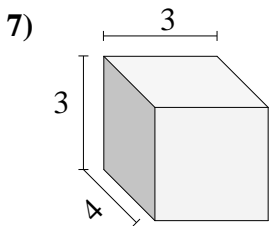
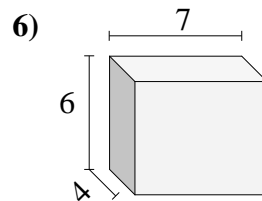
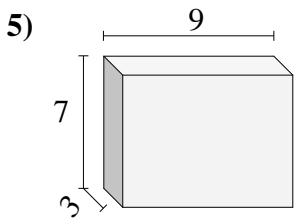
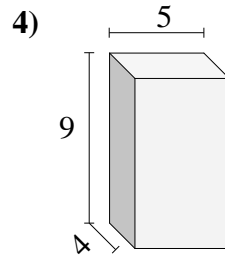
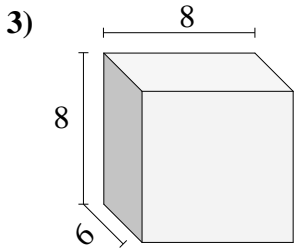
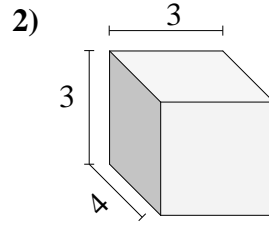
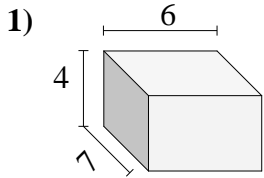


**Risposte**

- 1. \_\_\_\_\_
- 2. \_\_\_\_\_
- 3. \_\_\_\_\_
- 4. \_\_\_\_\_
- 5. \_\_\_\_\_
- 6. \_\_\_\_\_
- 7. \_\_\_\_\_
- 8. \_\_\_\_\_
- 9. \_\_\_\_\_
- 10. \_\_\_\_\_



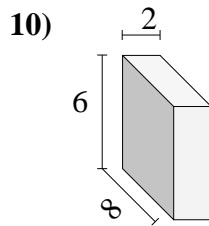
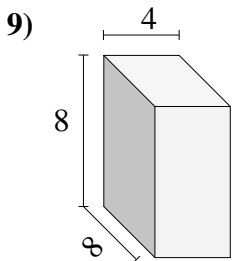
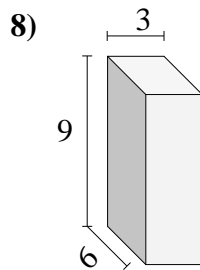
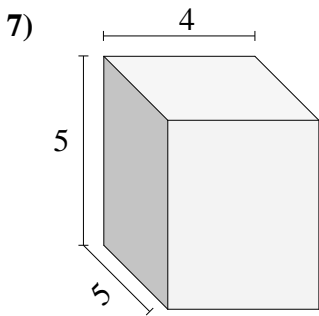
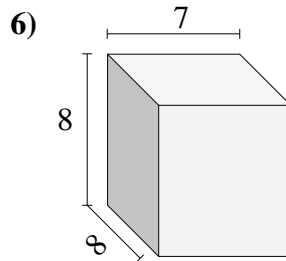
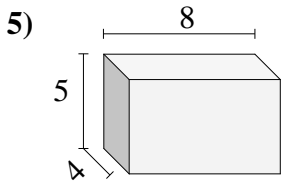
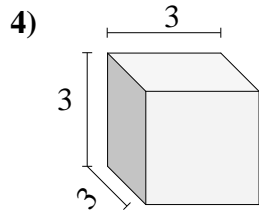
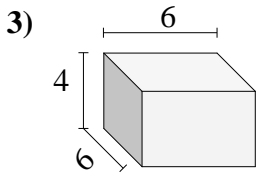
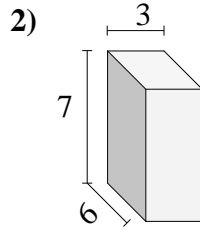
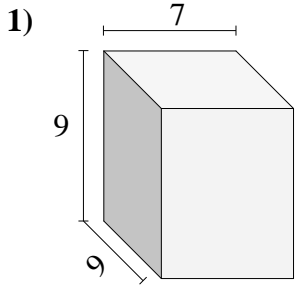
Trova il volume di ogni prisma.

**Risposte**1. 168 cm<sup>3</sup>2. 36 cm<sup>3</sup>3. 384 cm<sup>3</sup>4. 180 cm<sup>3</sup>5. 189 cm<sup>3</sup>6. 168 cm<sup>3</sup>7. 36 cm<sup>3</sup>8. 72 cm<sup>3</sup>9. 126 cm<sup>3</sup>10. 72 cm<sup>3</sup>





Trova il volume di ogni prisma.

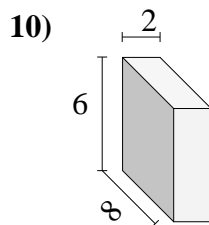
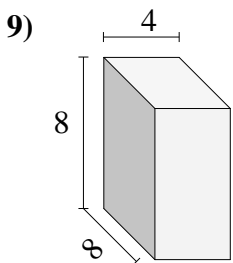
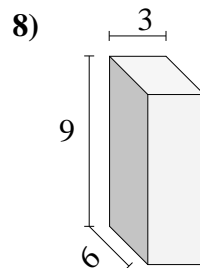
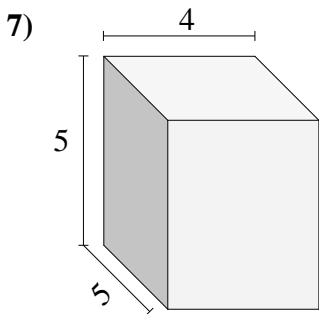
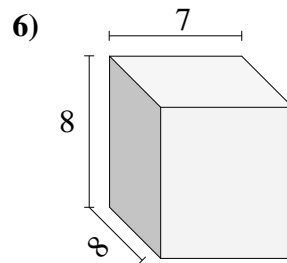
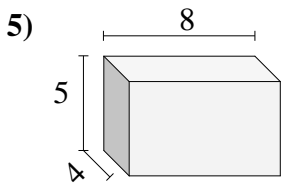
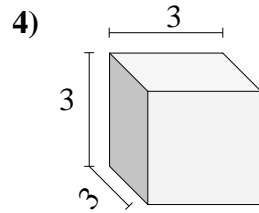
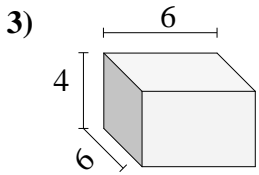
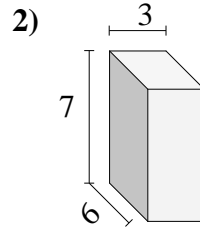
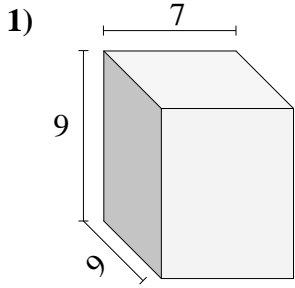


**Risposte**

- 1. \_\_\_\_\_
- 2. \_\_\_\_\_
- 3. \_\_\_\_\_
- 4. \_\_\_\_\_
- 5. \_\_\_\_\_
- 6. \_\_\_\_\_
- 7. \_\_\_\_\_
- 8. \_\_\_\_\_
- 9. \_\_\_\_\_
- 10. \_\_\_\_\_

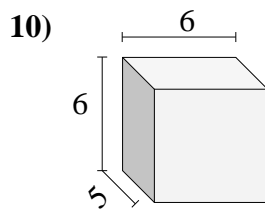
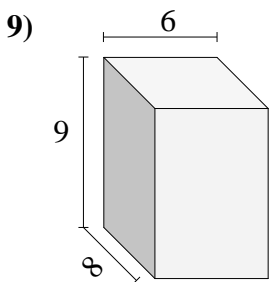
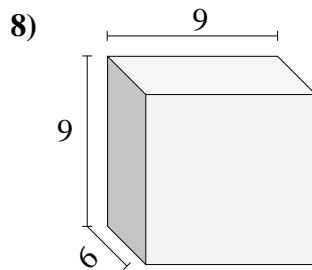
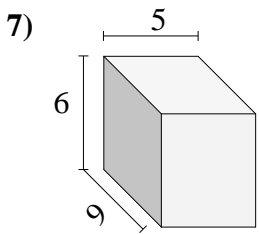
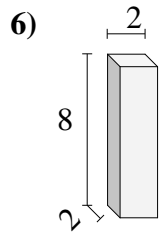
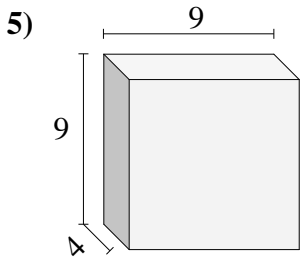
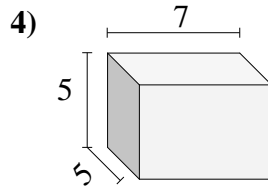
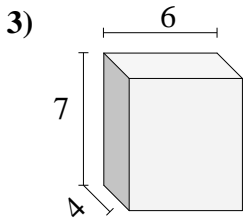
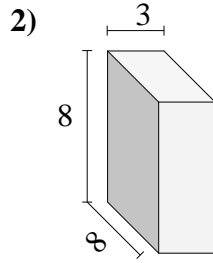
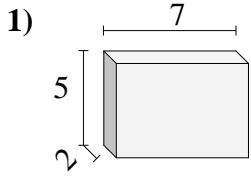


Trova il volume di ogni prisma.

**Risposte**1. **567 cm<sup>3</sup>**2. **126 cm<sup>3</sup>**3. **144 cm<sup>3</sup>**4. **27 cm<sup>3</sup>**5. **160 cm<sup>3</sup>**6. **448 cm<sup>3</sup>**7. **100 cm<sup>3</sup>**8. **162 cm<sup>3</sup>**9. **256 cm<sup>3</sup>**10. **96 cm<sup>3</sup>**



Trova il volume di ogni prisma.

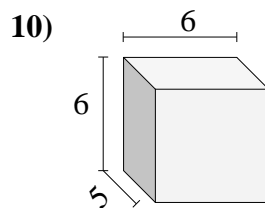
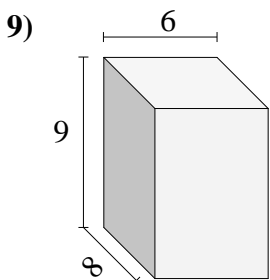
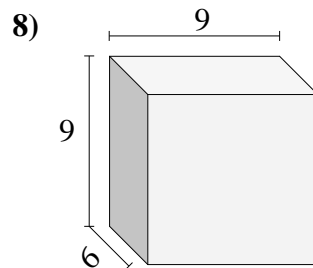
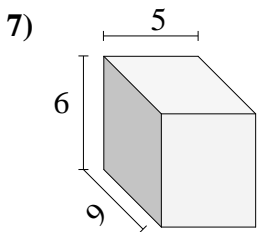
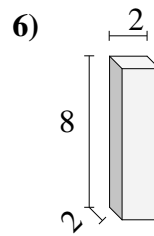
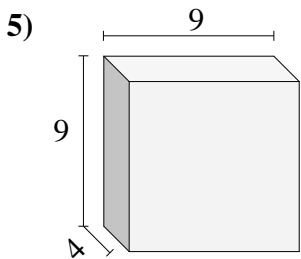
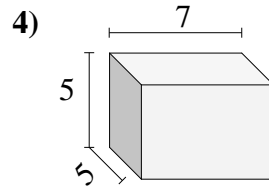
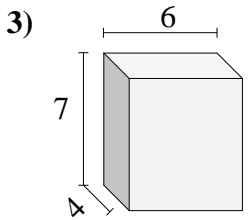
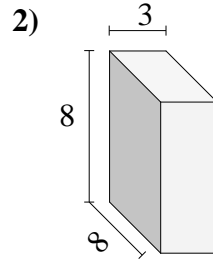
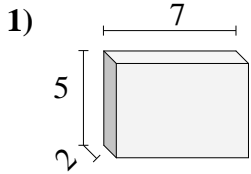


**Risposte**

- 1. \_\_\_\_\_
- 2. \_\_\_\_\_
- 3. \_\_\_\_\_
- 4. \_\_\_\_\_
- 5. \_\_\_\_\_
- 6. \_\_\_\_\_
- 7. \_\_\_\_\_
- 8. \_\_\_\_\_
- 9. \_\_\_\_\_
- 10. \_\_\_\_\_

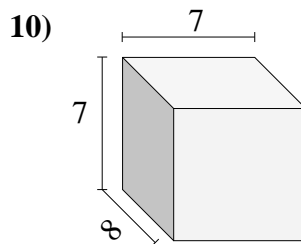
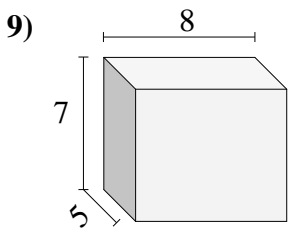
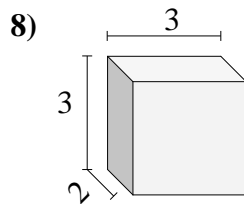
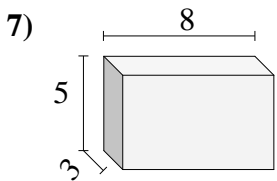
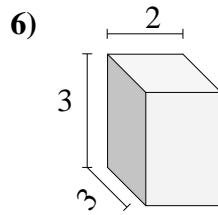
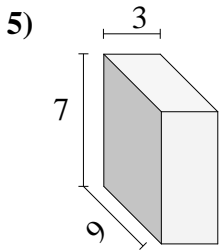
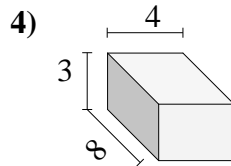
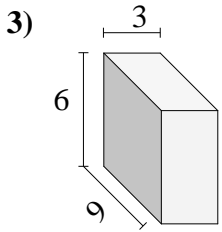
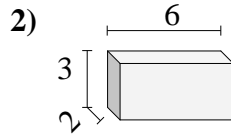
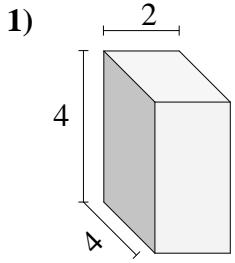


Trova il volume di ogni prisma.

**Risposte**1. **70 cm<sup>3</sup>**2. **192 cm<sup>3</sup>**3. **168 cm<sup>3</sup>**4. **175 cm<sup>3</sup>**5. **324 cm<sup>3</sup>**6. **32 cm<sup>3</sup>**7. **270 cm<sup>3</sup>**8. **486 cm<sup>3</sup>**9. **432 cm<sup>3</sup>**10. **180 cm<sup>3</sup>**



Trova il volume di ogni prisma.

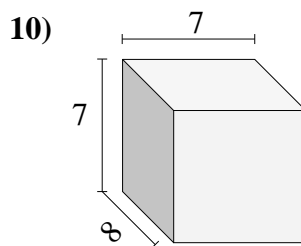
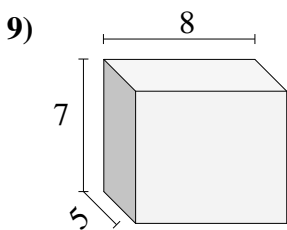
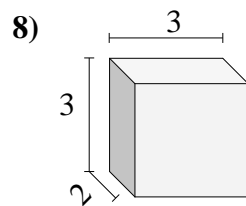
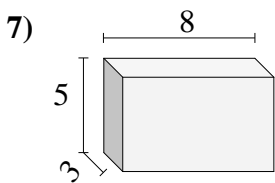
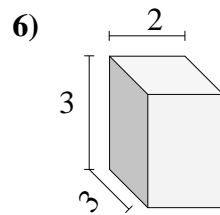
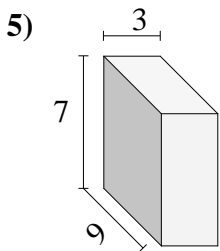
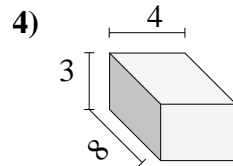
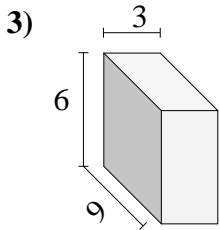
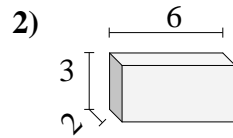
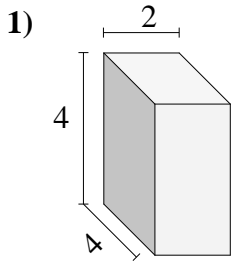


**Risposte**

- 1. \_\_\_\_\_
- 2. \_\_\_\_\_
- 3. \_\_\_\_\_
- 4. \_\_\_\_\_
- 5. \_\_\_\_\_
- 6. \_\_\_\_\_
- 7. \_\_\_\_\_
- 8. \_\_\_\_\_
- 9. \_\_\_\_\_
- 10. \_\_\_\_\_

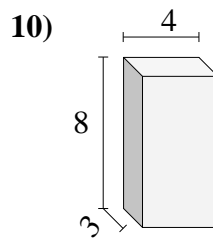
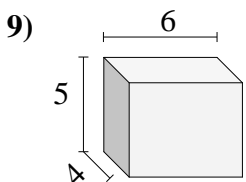
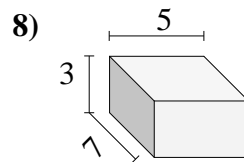
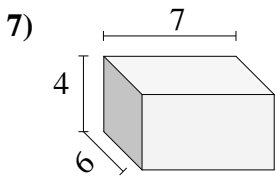
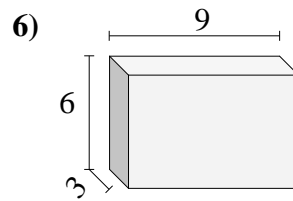
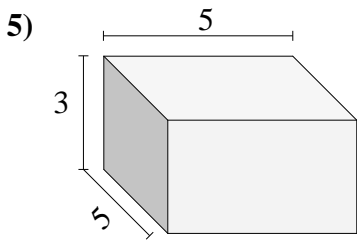
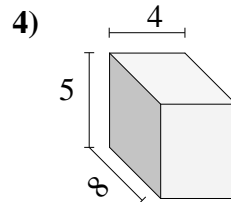
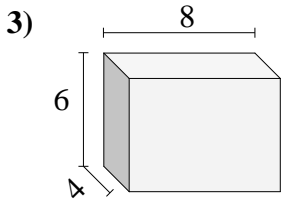
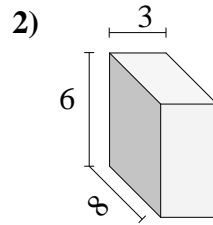
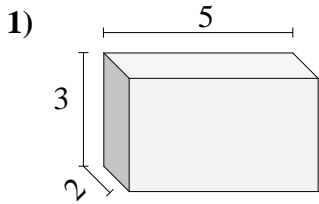


Trova il volume di ogni prisma.

**Risposte**1. 32 cm<sup>3</sup>2. 36 cm<sup>3</sup>3. 162 cm<sup>3</sup>4. 96 cm<sup>3</sup>5. 189 cm<sup>3</sup>6. 18 cm<sup>3</sup>7. 120 cm<sup>3</sup>8. 18 cm<sup>3</sup>9. 280 cm<sup>3</sup>10. 392 cm<sup>3</sup>



Trova il volume di ogni prisma.

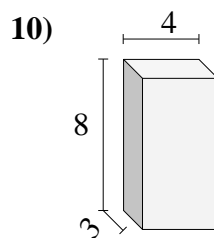
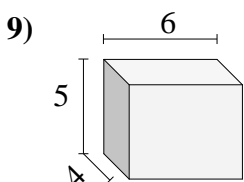
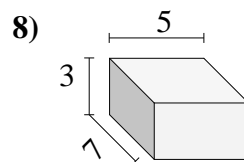
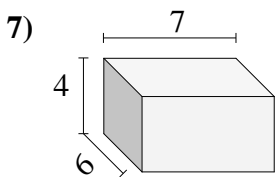
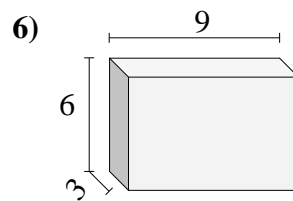
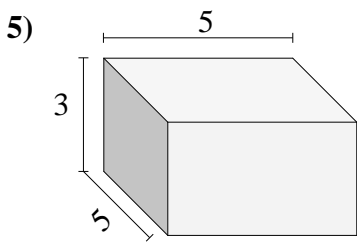
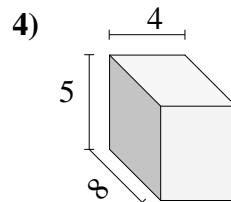
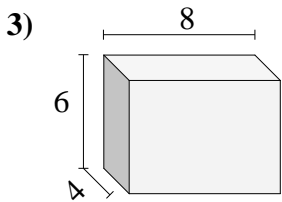
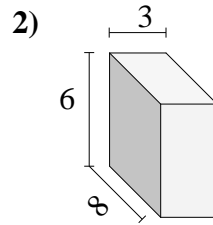
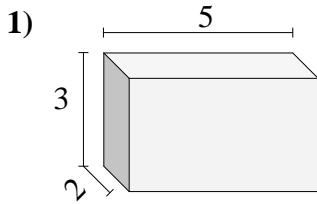


**Risposte**

- 1. \_\_\_\_\_
- 2. \_\_\_\_\_
- 3. \_\_\_\_\_
- 4. \_\_\_\_\_
- 5. \_\_\_\_\_
- 6. \_\_\_\_\_
- 7. \_\_\_\_\_
- 8. \_\_\_\_\_
- 9. \_\_\_\_\_
- 10. \_\_\_\_\_



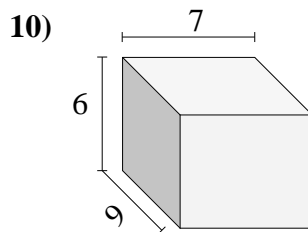
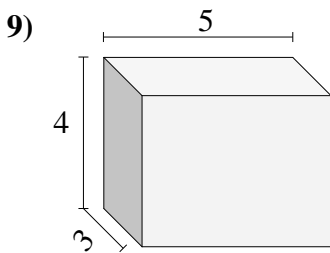
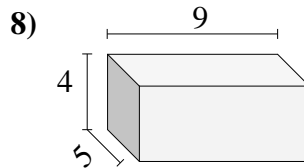
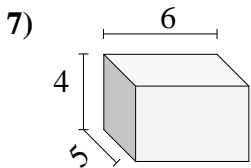
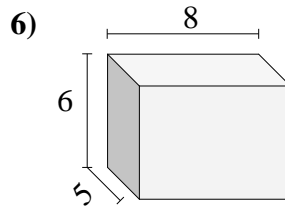
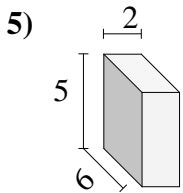
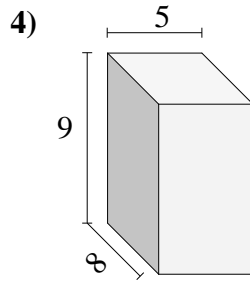
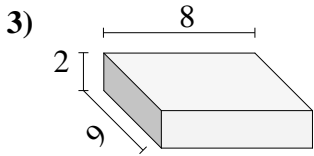
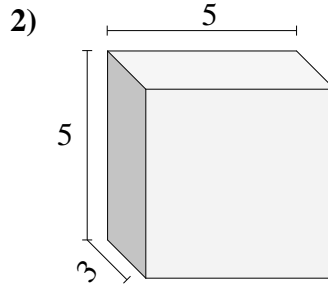
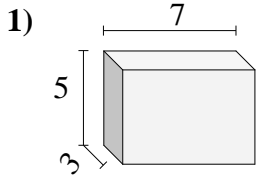
Trova il volume di ogni prisma.

**Risposte**1. **30 cm<sup>3</sup>**2. **144 cm<sup>3</sup>**3. **192 cm<sup>3</sup>**4. **160 cm<sup>3</sup>**5. **75 cm<sup>3</sup>**6. **162 cm<sup>3</sup>**7. **168 cm<sup>3</sup>**8. **105 cm<sup>3</sup>**9. **120 cm<sup>3</sup>**10. **96 cm<sup>3</sup>**





Trova il volume di ogni prisma.

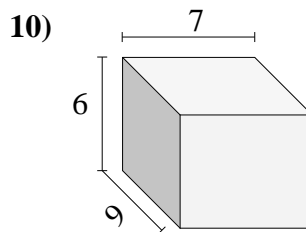
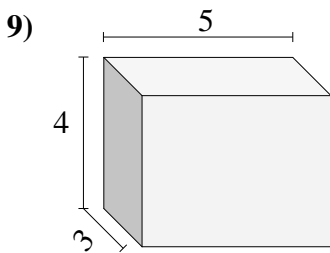
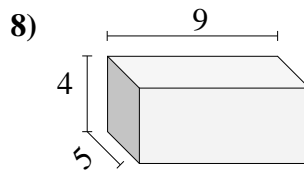
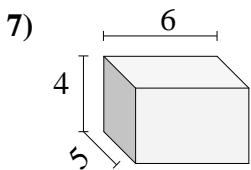
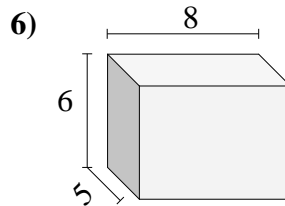
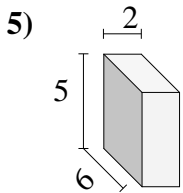
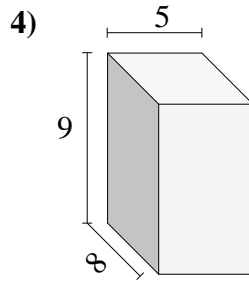
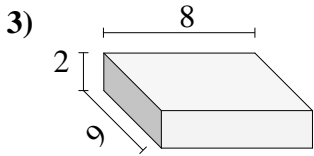
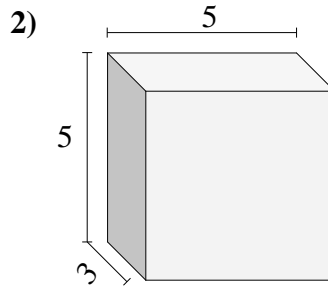
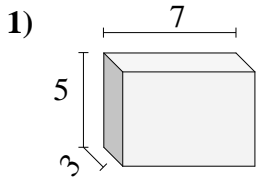


**Risposte**

- 1. \_\_\_\_\_
- 2. \_\_\_\_\_
- 3. \_\_\_\_\_
- 4. \_\_\_\_\_
- 5. \_\_\_\_\_
- 6. \_\_\_\_\_
- 7. \_\_\_\_\_
- 8. \_\_\_\_\_
- 9. \_\_\_\_\_
- 10. \_\_\_\_\_



Trova il volume di ogni prisma.



Risposte

1. 105 cm<sup>3</sup>

2. 75 cm<sup>3</sup>

3. 144 cm<sup>3</sup>

4. 360 cm<sup>3</sup>

5. 60 cm<sup>3</sup>

6. 240 cm<sup>3</sup>

7. 120 cm<sup>3</sup>

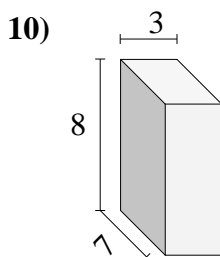
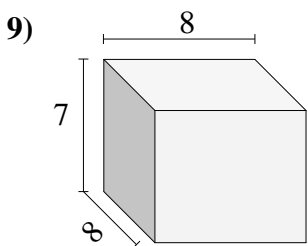
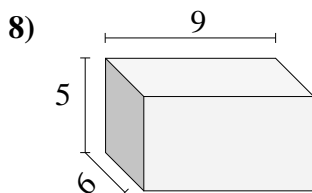
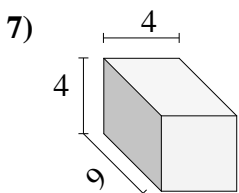
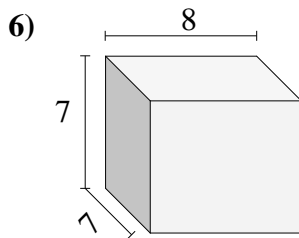
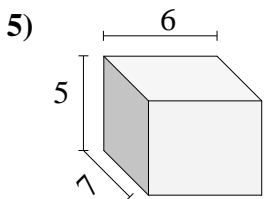
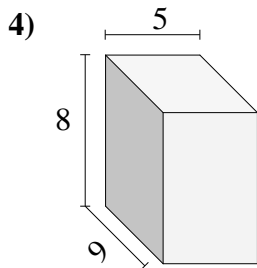
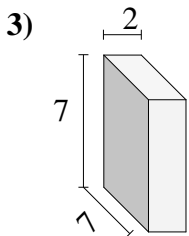
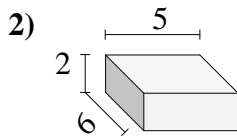
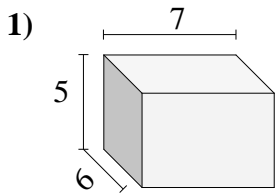
8. 180 cm<sup>3</sup>

9. 60 cm<sup>3</sup>

10. 378 cm<sup>3</sup>



Trova il volume di ogni prisma.



**Risposte**

1. \_\_\_\_\_

2. \_\_\_\_\_

3. \_\_\_\_\_

4. \_\_\_\_\_

5. \_\_\_\_\_

6. \_\_\_\_\_

7. \_\_\_\_\_

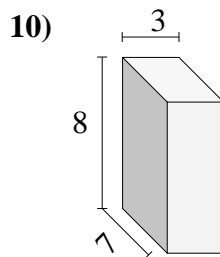
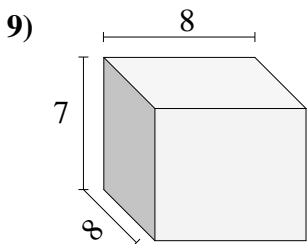
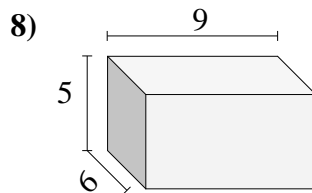
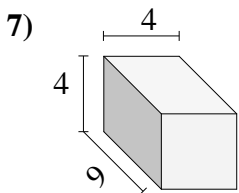
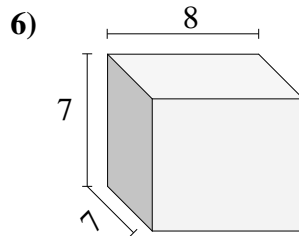
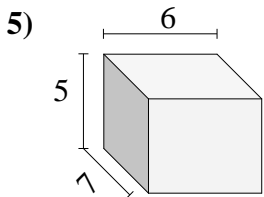
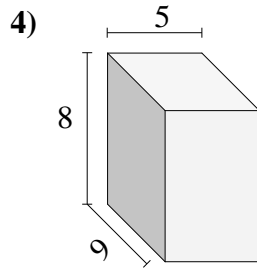
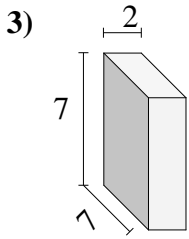
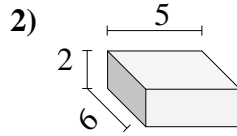
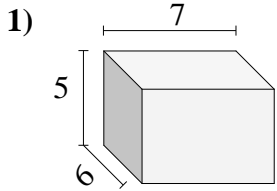
8. \_\_\_\_\_

9. \_\_\_\_\_

10. \_\_\_\_\_



Trova il volume di ogni prisma.



**Risposte**

1. 210 cm<sup>3</sup>

2. 60 cm<sup>3</sup>

3. 98 cm<sup>3</sup>

4. 360 cm<sup>3</sup>

5. 210 cm<sup>3</sup>

6. 392 cm<sup>3</sup>

7. 144 cm<sup>3</sup>

8. 270 cm<sup>3</sup>

9. 448 cm<sup>3</sup>

10. 168 cm<sup>3</sup>