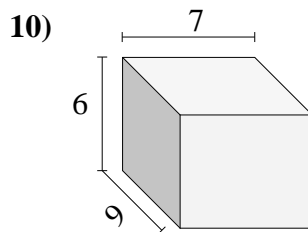
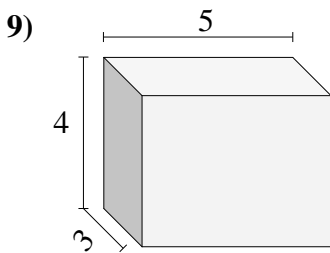
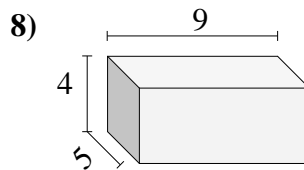
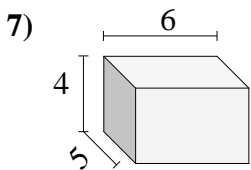
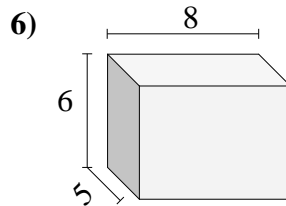
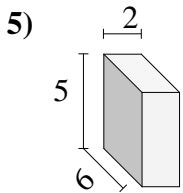
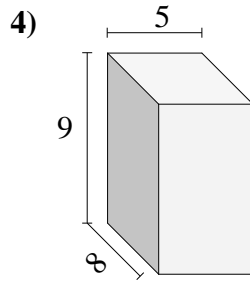
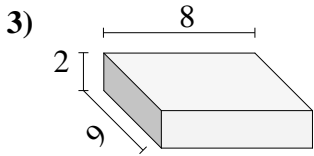
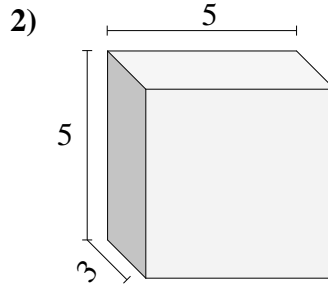
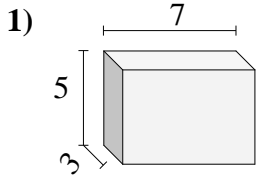




Trova il volume di ogni prisma.

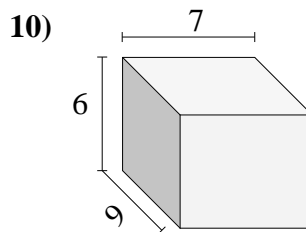
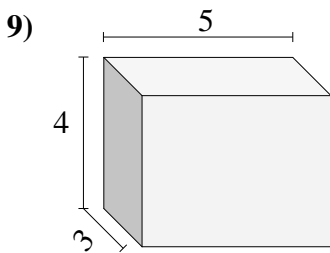
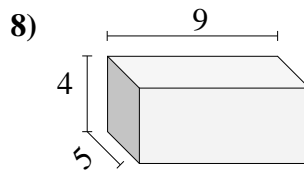
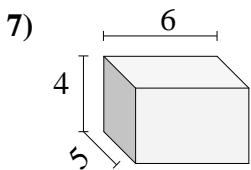
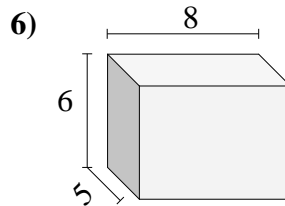
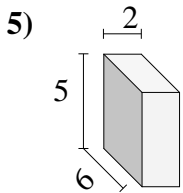
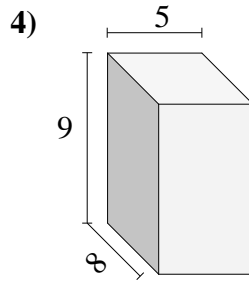
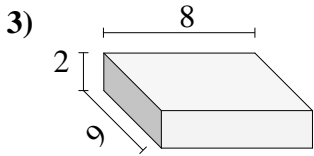
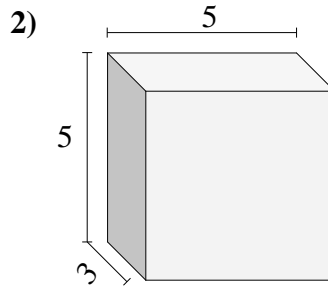
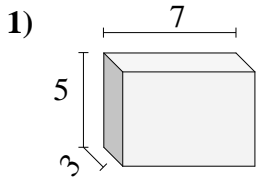


**Risposte**

- 1. \_\_\_\_\_
- 2. \_\_\_\_\_
- 3. \_\_\_\_\_
- 4. \_\_\_\_\_
- 5. \_\_\_\_\_
- 6. \_\_\_\_\_
- 7. \_\_\_\_\_
- 8. \_\_\_\_\_
- 9. \_\_\_\_\_
- 10. \_\_\_\_\_



Trova il volume di ogni prisma.



**Risposte**

1. 105 cm<sup>3</sup>

2. 75 cm<sup>3</sup>

3. 144 cm<sup>3</sup>

4. 360 cm<sup>3</sup>

5. 60 cm<sup>3</sup>

6. 240 cm<sup>3</sup>

7. 120 cm<sup>3</sup>

8. 180 cm<sup>3</sup>

9. 60 cm<sup>3</sup>

10. 378 cm<sup>3</sup>