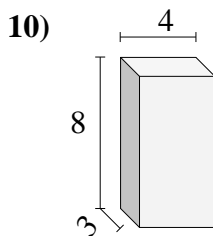
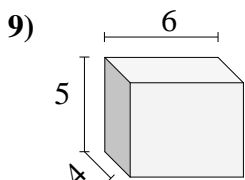
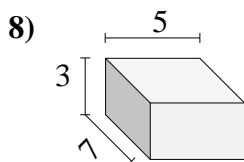
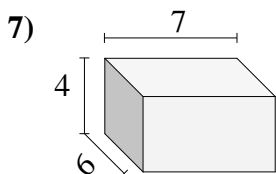
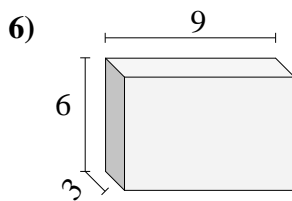
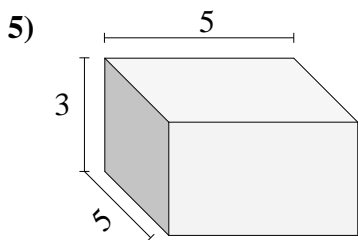
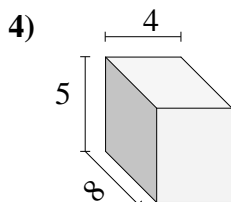
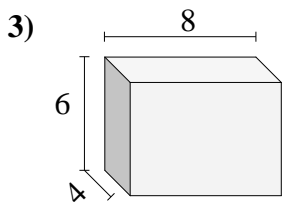
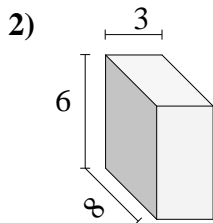
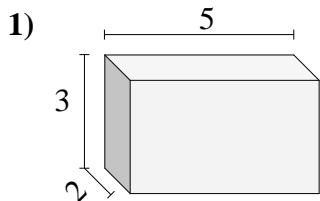




Trova il volume di ogni prisma.



**Risposte**

1. \_\_\_\_\_

2. \_\_\_\_\_

3. \_\_\_\_\_

4. \_\_\_\_\_

5. \_\_\_\_\_

6. \_\_\_\_\_

7. \_\_\_\_\_

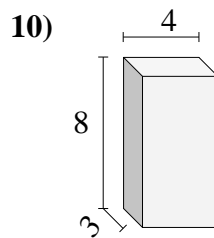
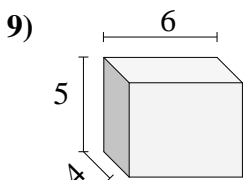
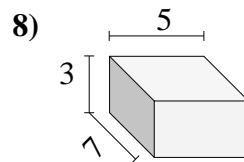
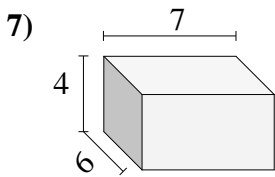
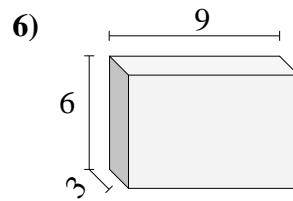
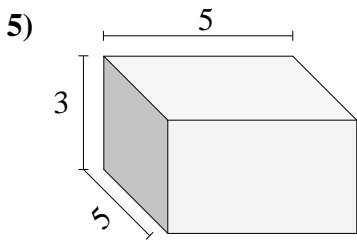
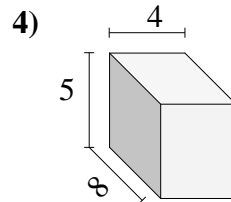
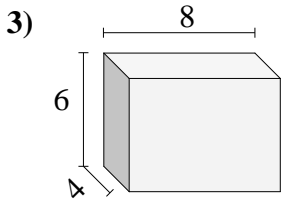
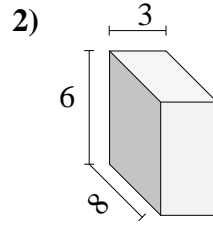
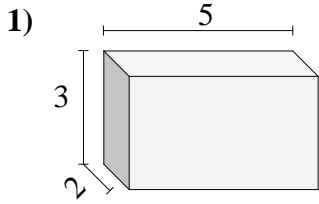
8. \_\_\_\_\_

9. \_\_\_\_\_

10. \_\_\_\_\_



Trova il volume di ogni prisma.

**Risposte**1. **30 cm<sup>3</sup>**2. **144 cm<sup>3</sup>**3. **192 cm<sup>3</sup>**4. **160 cm<sup>3</sup>**5. **75 cm<sup>3</sup>**6. **162 cm<sup>3</sup>**7. **168 cm<sup>3</sup>**8. **105 cm<sup>3</sup>**9. **120 cm<sup>3</sup>**10. **96 cm<sup>3</sup>**