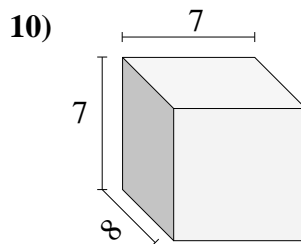
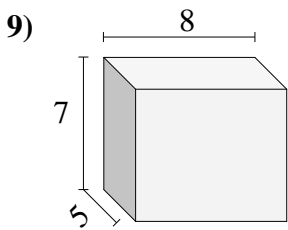
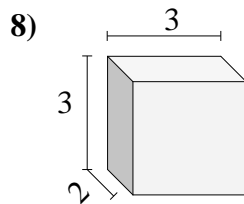
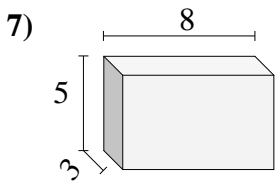
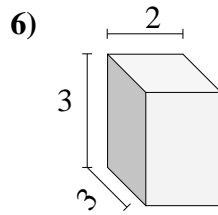
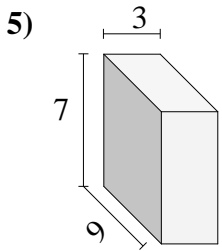
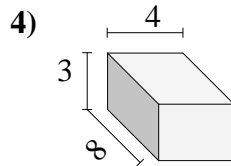
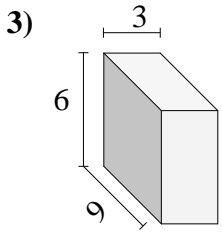
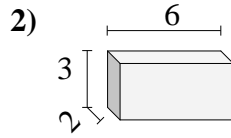
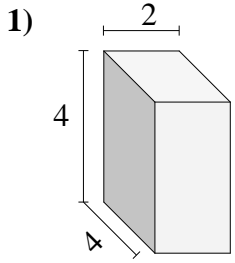




Trova il volume di ogni prisma.

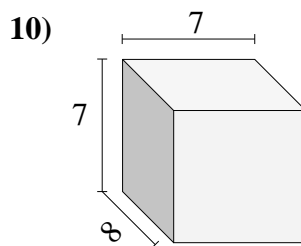
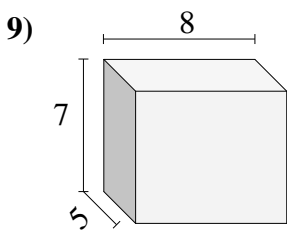
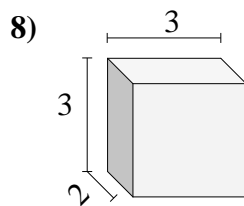
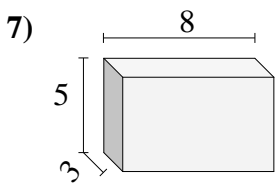
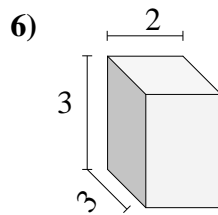
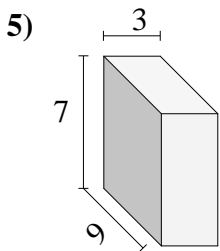
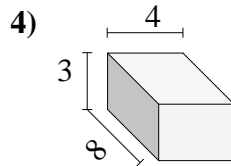
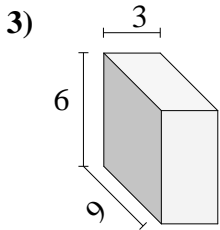
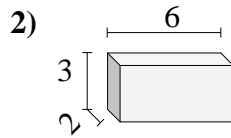
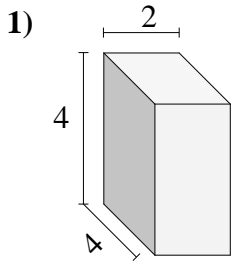


Risposte

- 1. _____
- 2. _____
- 3. _____
- 4. _____
- 5. _____
- 6. _____
- 7. _____
- 8. _____
- 9. _____
- 10. _____



Trova il volume di ogni prisma.

**Risposte**1. 32 cm³2. 36 cm³3. 162 cm³4. 96 cm³5. 189 cm³6. 18 cm³7. 120 cm³8. 18 cm³9. 280 cm³10. 392 cm³