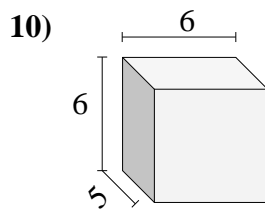
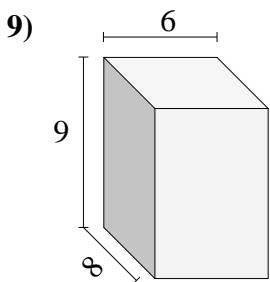
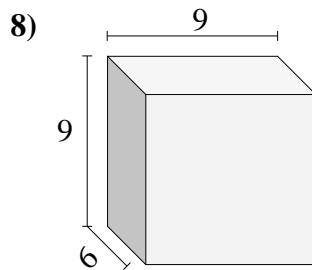
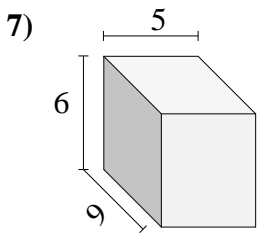
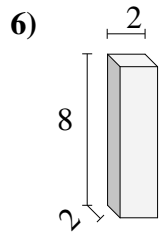
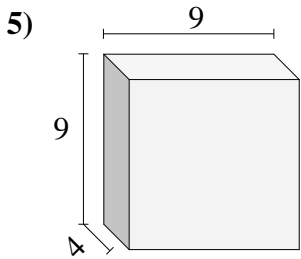
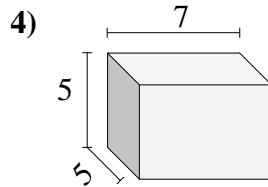
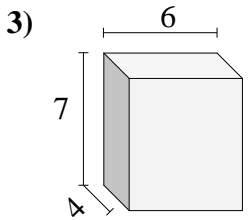
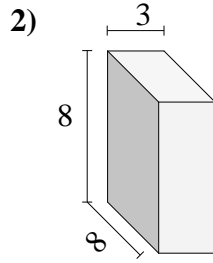
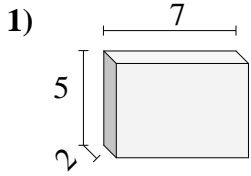




Trova il volume di ogni prisma.

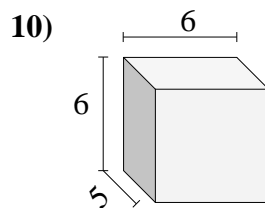
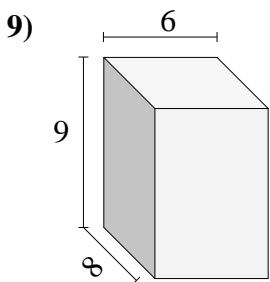
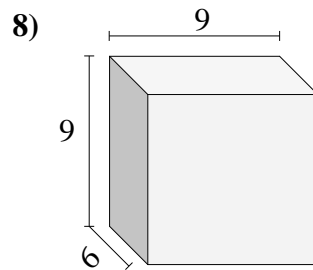
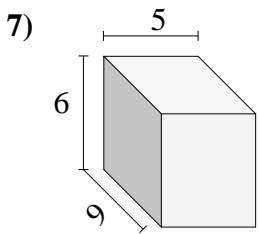
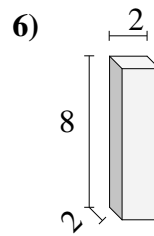
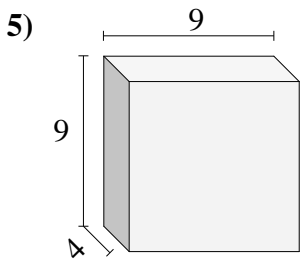
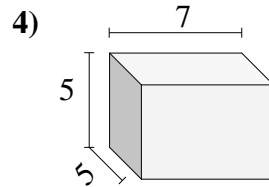
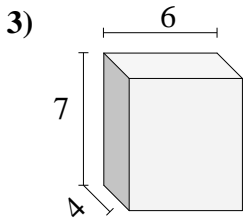
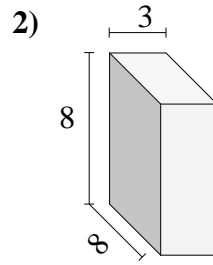
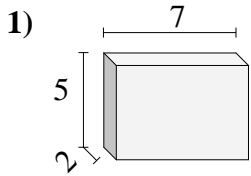


Risposte

- 1. _____
- 2. _____
- 3. _____
- 4. _____
- 5. _____
- 6. _____
- 7. _____
- 8. _____
- 9. _____
- 10. _____



Trova il volume di ogni prisma.

**Risposte**1. **70 cm³**2. **192 cm³**3. **168 cm³**4. **175 cm³**5. **324 cm³**6. **32 cm³**7. **270 cm³**8. **486 cm³**9. **432 cm³**10. **180 cm³**