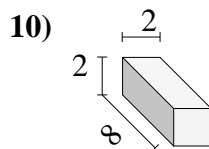
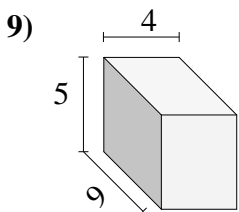
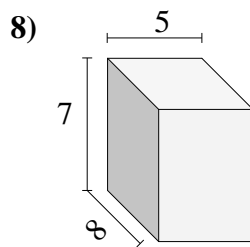
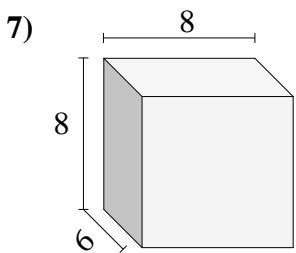
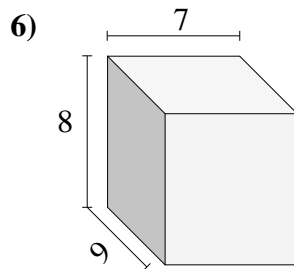
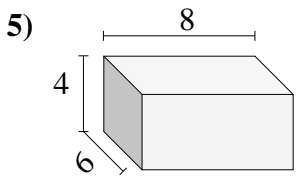
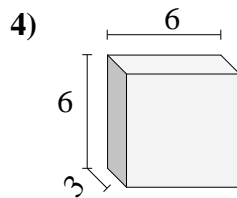
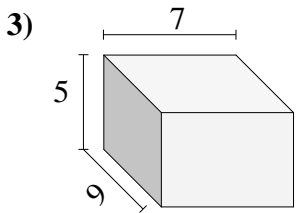
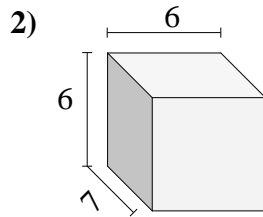
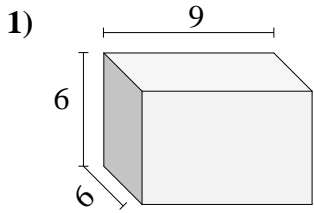




Trova il volume di ogni prisma.

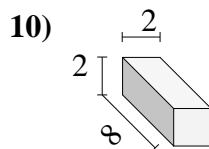
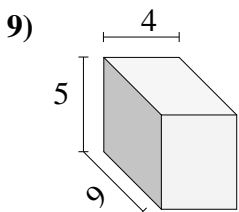
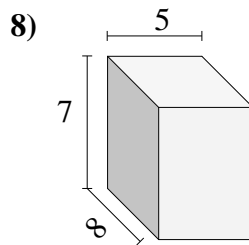
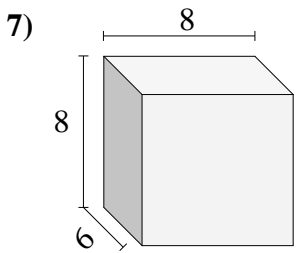
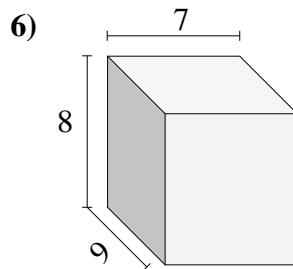
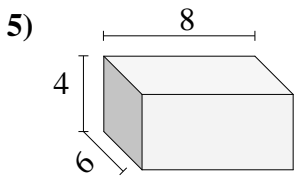
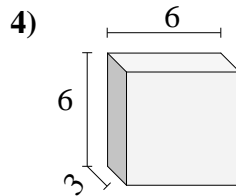
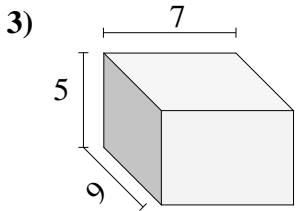
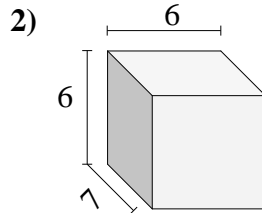
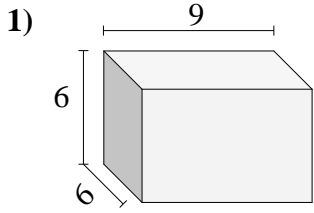


Risposte

- 1. _____
- 2. _____
- 3. _____
- 4. _____
- 5. _____
- 6. _____
- 7. _____
- 8. _____
- 9. _____
- 10. _____



Trova il volume di ogni prisma.



Risposte

1. 324 cm³

2. 252 cm³

3. 315 cm³

4. 108 cm³

5. 192 cm³

6. 504 cm³

7. 384 cm³

8. 280 cm³

9. 180 cm³

10. 32 cm³