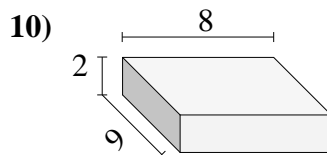
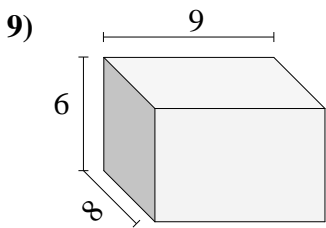
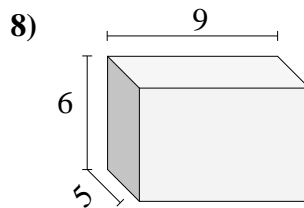
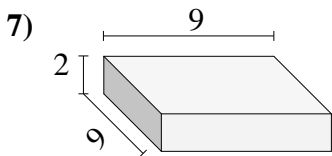
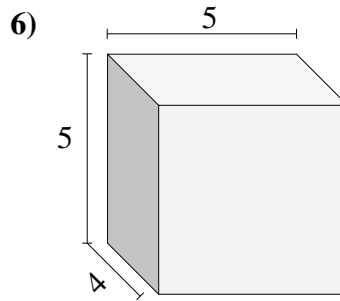
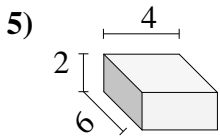
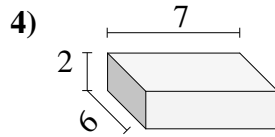
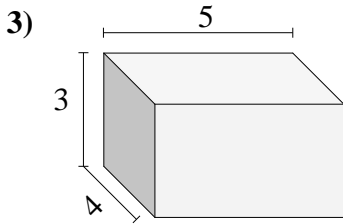
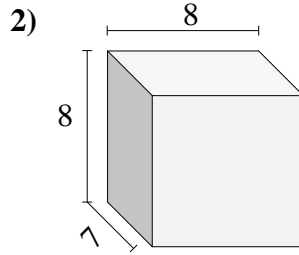
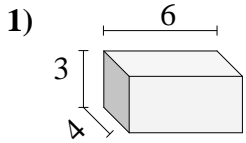




Trova il volume di ogni prisma.

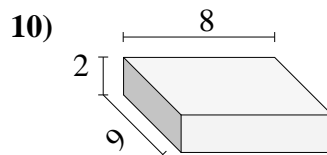
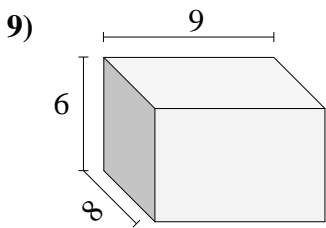
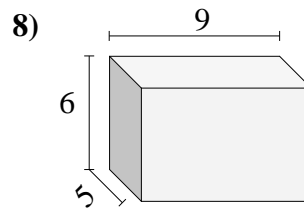
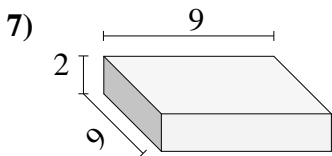
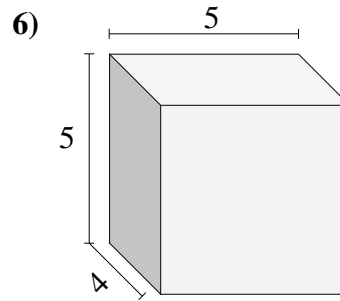
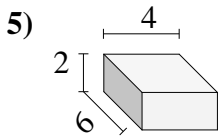
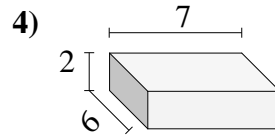
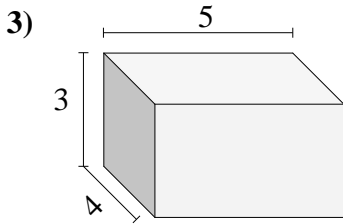
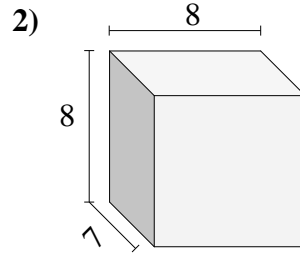
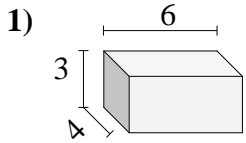


Risposte

- 1. _____
- 2. _____
- 3. _____
- 4. _____
- 5. _____
- 6. _____
- 7. _____
- 8. _____
- 9. _____
- 10. _____



Trova il volume di ogni prisma.

**Risposte**1. 72 cm³2. 448 cm³3. 60 cm³4. 84 cm³5. 48 cm³6. 100 cm³7. 162 cm³8. 270 cm³9. 432 cm³10. 144 cm³