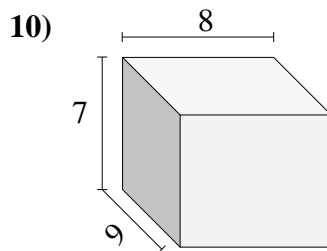
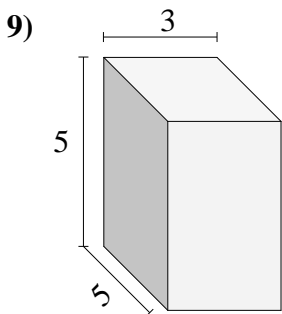
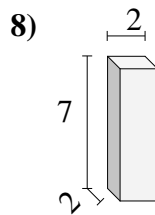
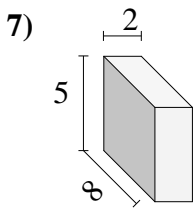
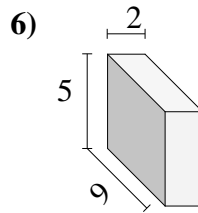
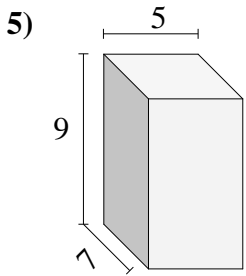
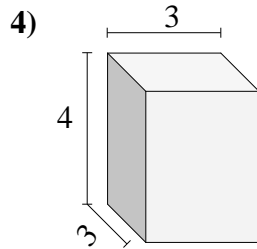
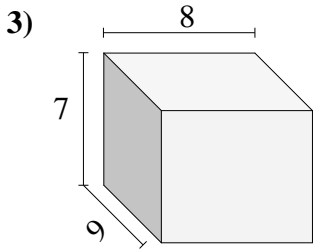
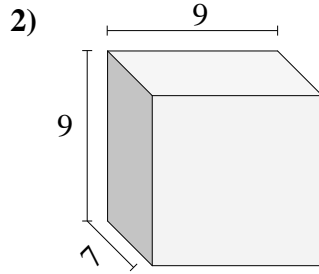
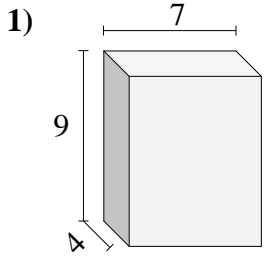




Trova il volume di ogni prisma.

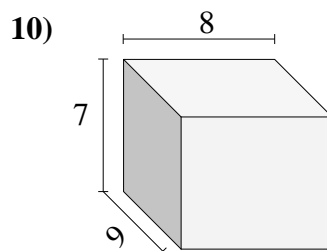
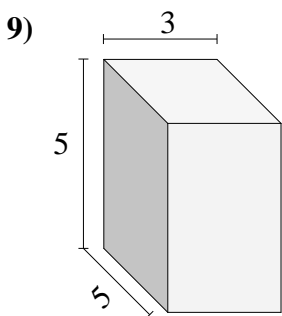
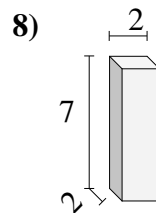
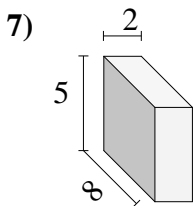
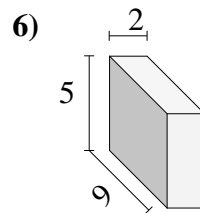
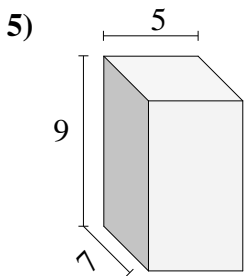
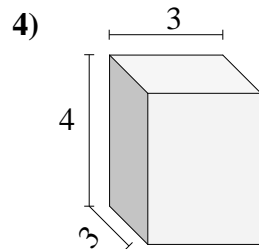
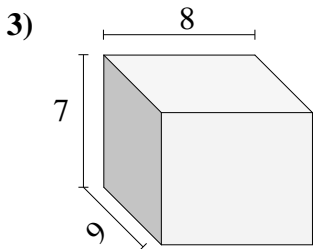
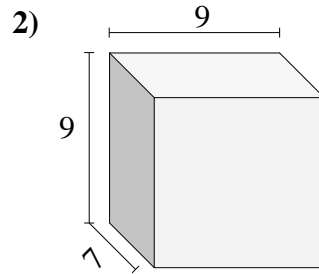
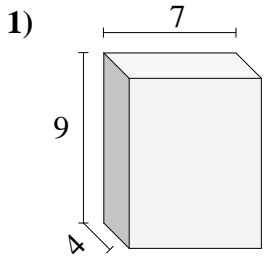


**Risposte**

- 1. \_\_\_\_\_
- 2. \_\_\_\_\_
- 3. \_\_\_\_\_
- 4. \_\_\_\_\_
- 5. \_\_\_\_\_
- 6. \_\_\_\_\_
- 7. \_\_\_\_\_
- 8. \_\_\_\_\_
- 9. \_\_\_\_\_
- 10. \_\_\_\_\_



Trova il volume di ogni prisma.



Risposte

1. 252 cm<sup>3</sup>

2. 567 cm<sup>3</sup>

3. 504 cm<sup>3</sup>

4. 36 cm<sup>3</sup>

5. 315 cm<sup>3</sup>

6. 90 cm<sup>3</sup>

7. 80 cm<sup>3</sup>

8. 28 cm<sup>3</sup>

9. 75 cm<sup>3</sup>

10. 504 cm<sup>3</sup>