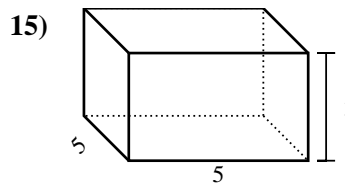
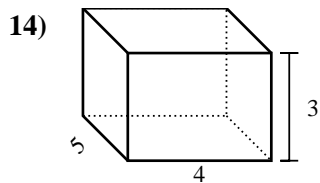
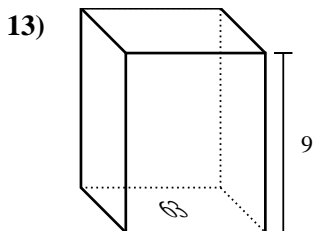
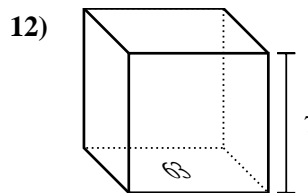
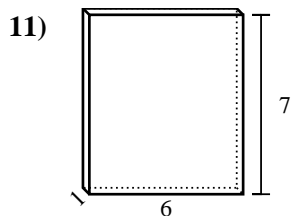
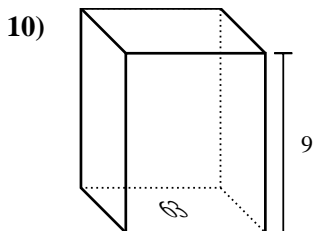
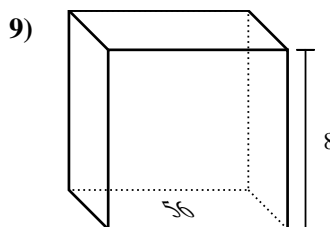
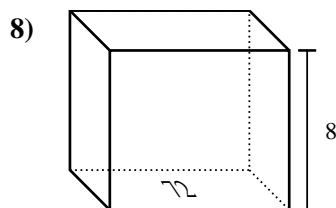
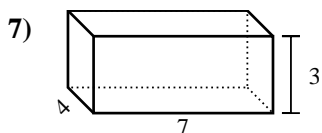
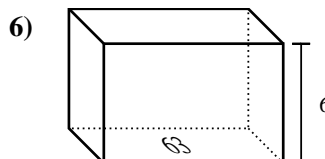
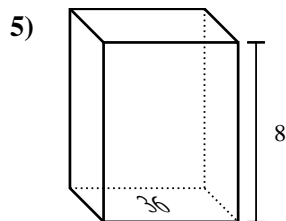
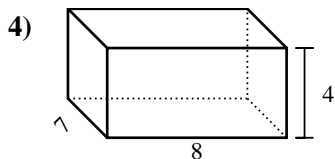
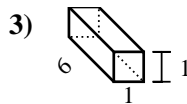
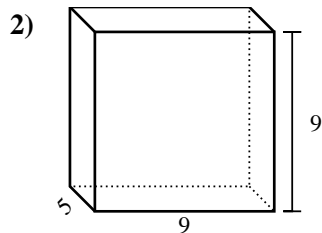
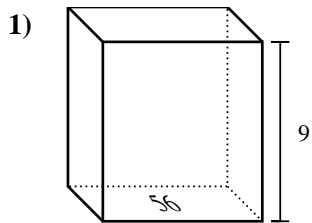




Trova il volume di ogni prisma. Ricora $V=BH$ e $V=L \times P \times H$.

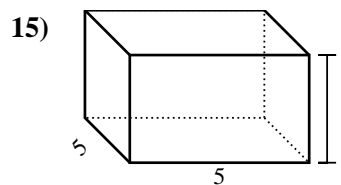
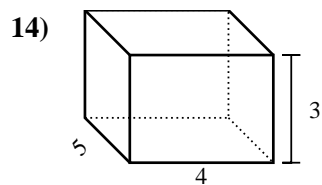
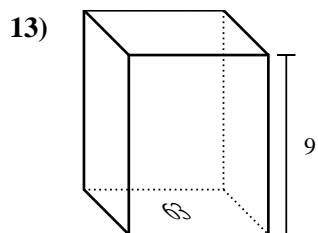
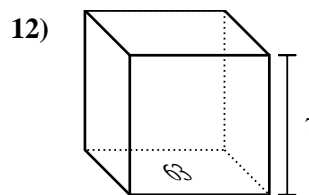
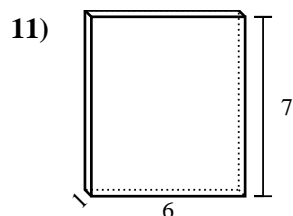
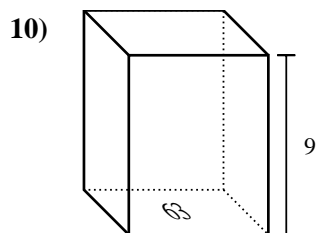
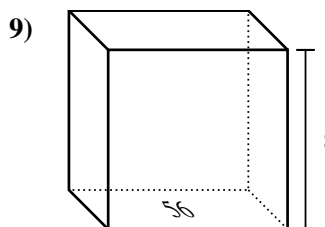
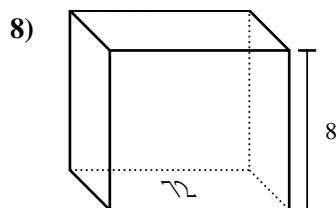
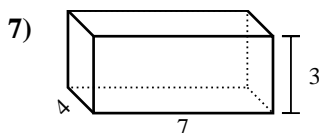
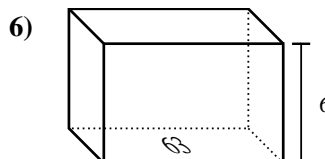
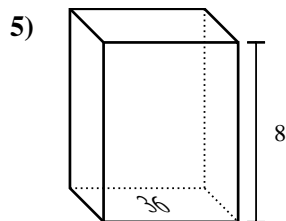
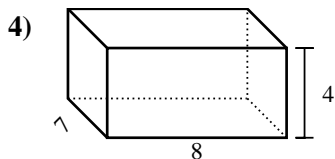
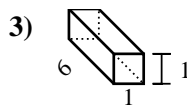
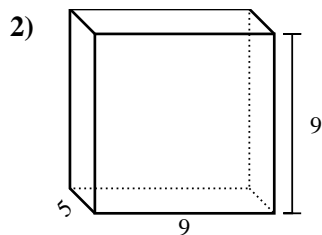
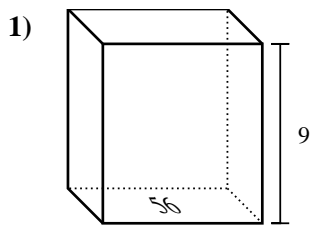


Risposte

1. _____
2. _____
3. _____
4. _____
5. _____
6. _____
7. _____
8. _____
9. _____
10. _____
11. _____
12. _____
13. _____
14. _____
15. _____



Trova il volume di ogni prisma. Ricora $V=BH$ e $V=L \times P \times H$.



Risposte

1. 504 cm³

2. 405 cm³

3. 6 cm³

4. 224 cm³

5. 288 cm³

6. 378 cm³

7. 84 cm³

8. 576 cm³

9. 448 cm³

10. 567 cm³

11. 42 cm³

12. 441 cm³

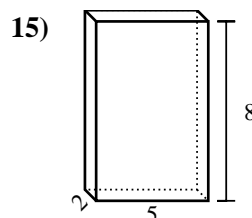
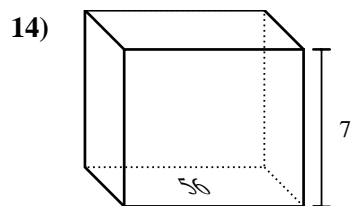
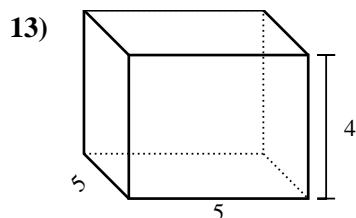
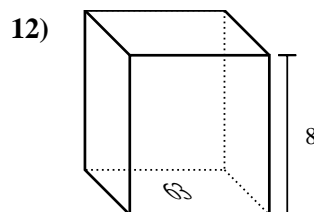
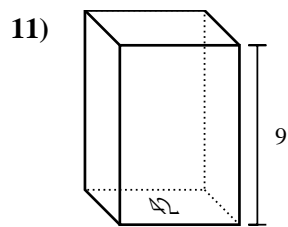
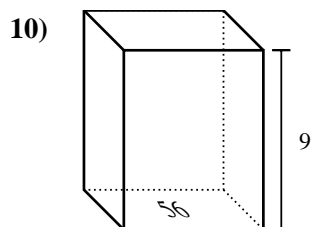
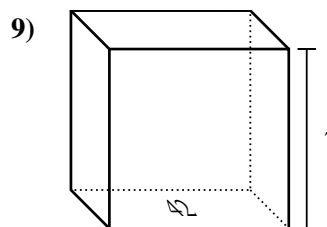
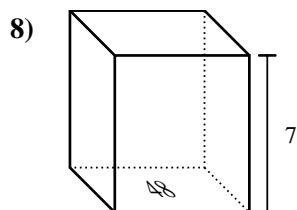
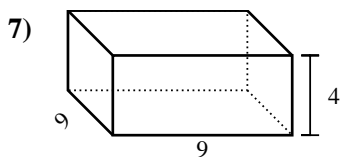
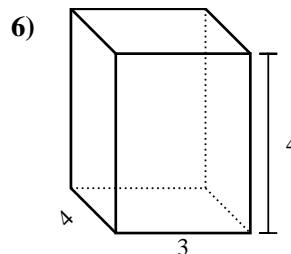
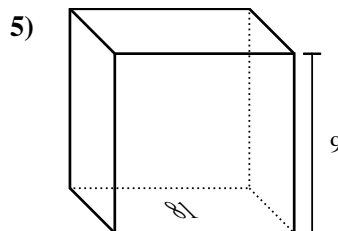
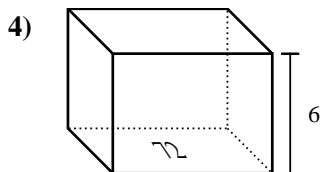
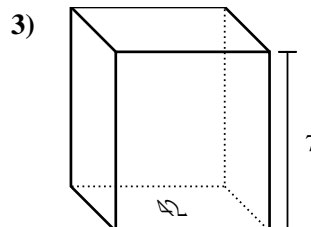
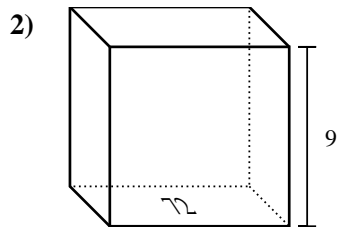
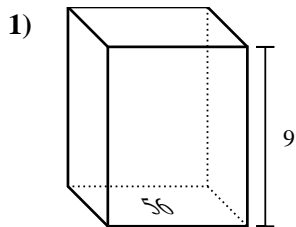
13. 567 cm³

14. 60 cm³

15. 75 cm³



Trova il volume di ogni prisma. Ricora $V=BH$ e $V=L \times P \times H$.

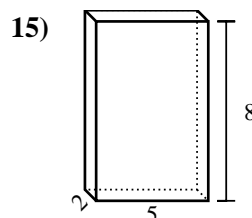
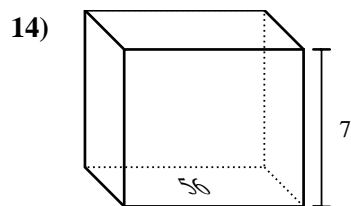
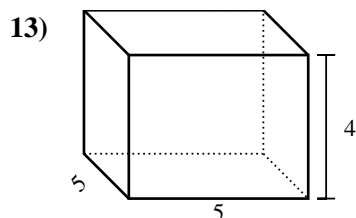
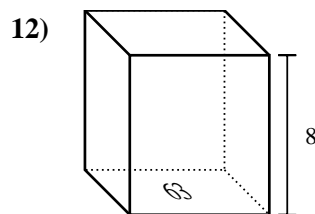
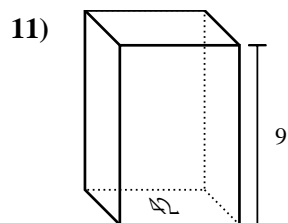
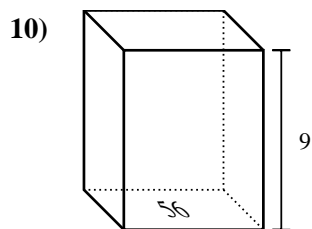
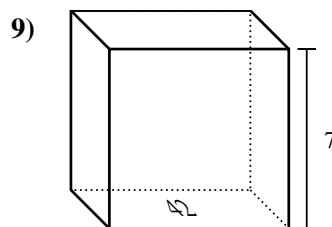
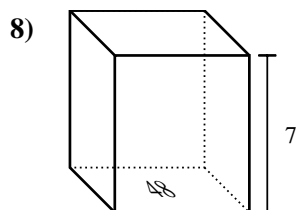
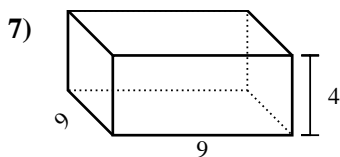
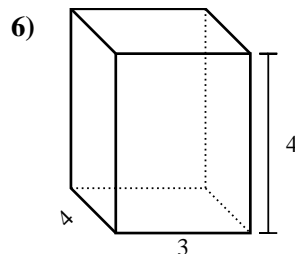
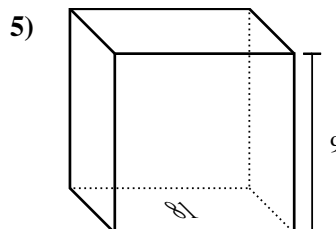
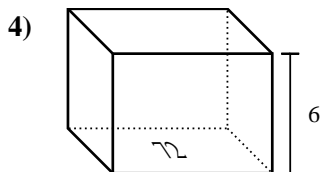
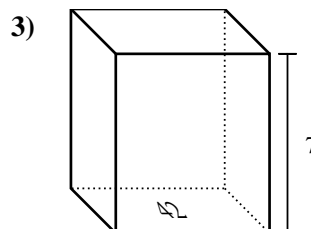
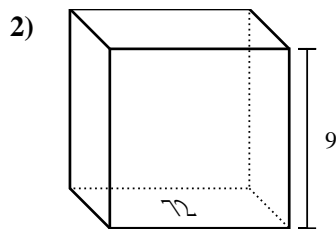
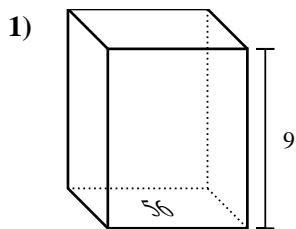


Risposte

1. _____
2. _____
3. _____
4. _____
5. _____
6. _____
7. _____
8. _____
9. _____
10. _____
11. _____
12. _____
13. _____
14. _____
15. _____



Trova il volume di ogni prisma. Ricora $V=BH$ e $V=L \times P \times H$.



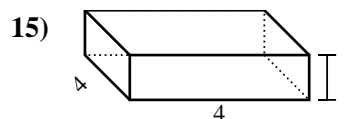
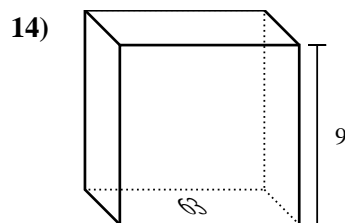
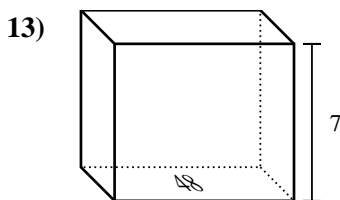
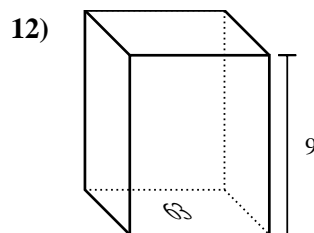
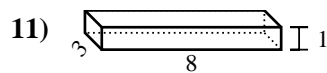
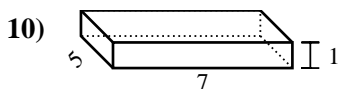
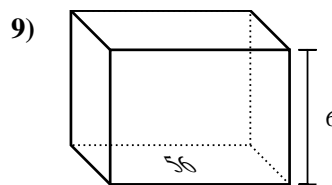
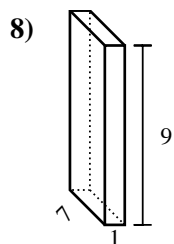
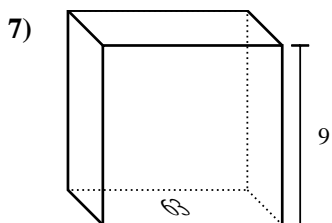
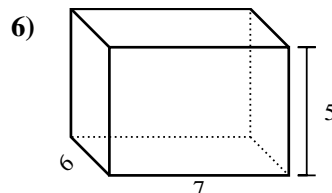
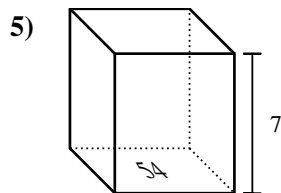
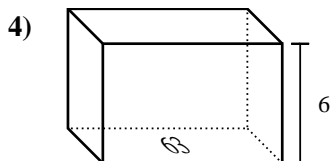
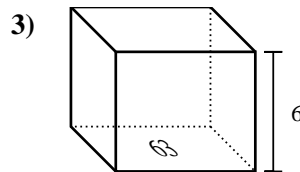
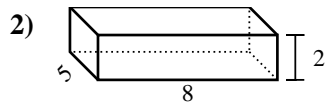
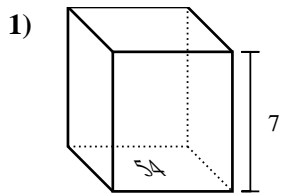
Risposte

1. 504 cm³
2. 648 cm³
3. 294 cm³
4. 432 cm³
5. 729 cm³
6. 48 cm³
7. 324 cm³
8. 336 cm³
9. 294 cm³
10. 504 cm³
11. 378 cm³
12. 504 cm³
13. 100 cm³
14. 392 cm³
15. 80 cm³



Trova il volume di ogni prisma. Ricora $V=BH$ e $V=L \times P \times H$.

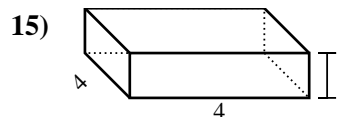
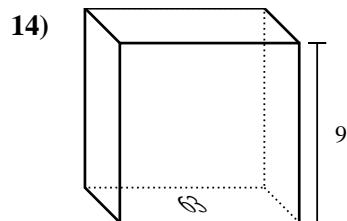
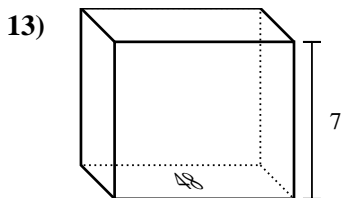
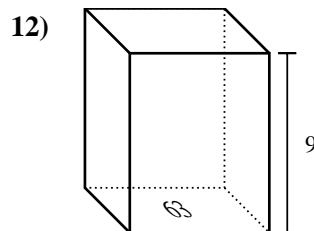
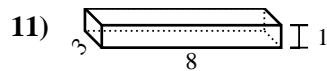
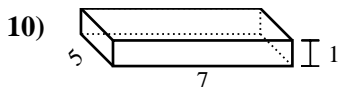
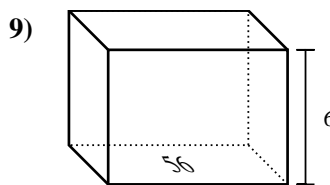
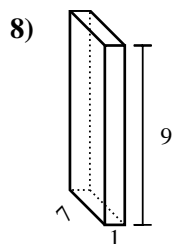
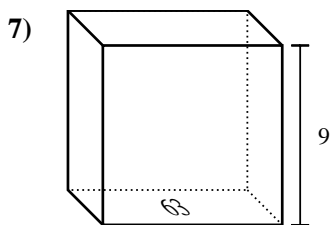
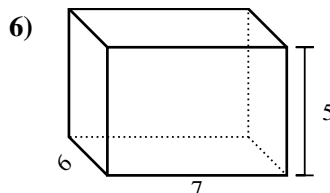
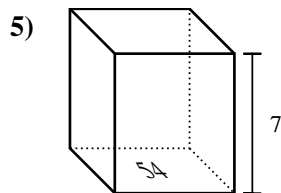
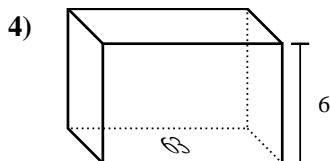
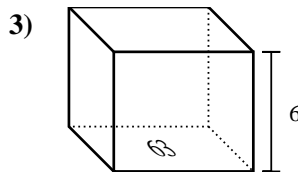
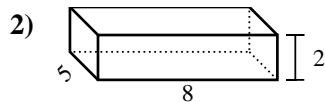
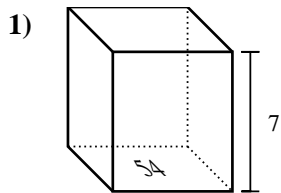
Risposte



- 1. _____
- 2. _____
- 3. _____
- 4. _____
- 5. _____
- 6. _____
- 7. _____
- 8. _____
- 9. _____
- 10. _____
- 11. _____
- 12. _____
- 13. _____
- 14. _____
- 15. _____



Trova il volume di ogni prisma. Ricora $V=BH$ e $V=L \times P \times H$.



Risposte

1. 378 cm³

2. 80 cm³

3. 378 cm³

4. 378 cm³

5. 378 cm³

6. 210 cm³

7. 567 cm³

8. 63 cm³

9. 336 cm³

10. 35 cm³

11. 24 cm³

12. 567 cm³

13. 336 cm³

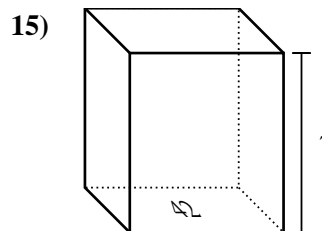
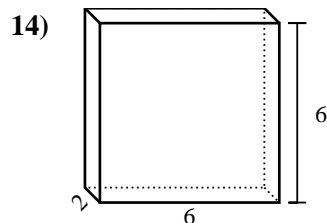
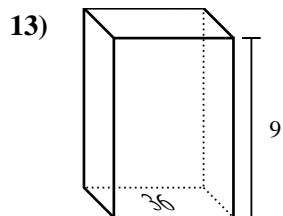
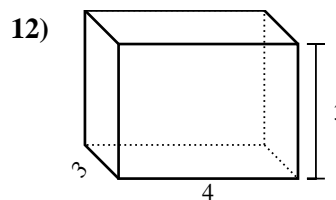
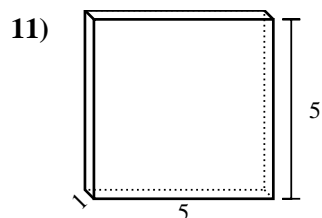
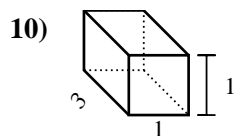
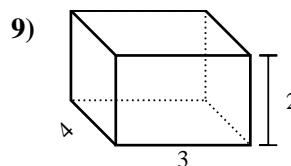
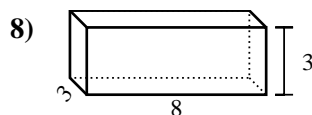
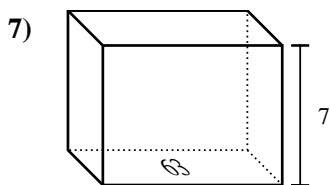
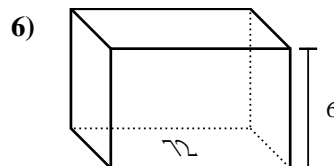
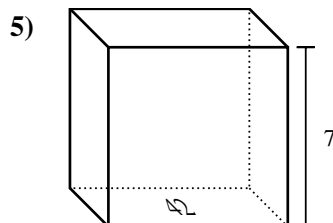
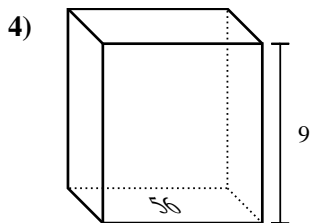
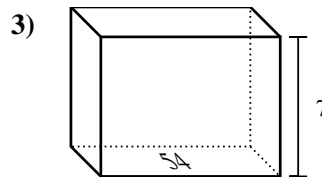
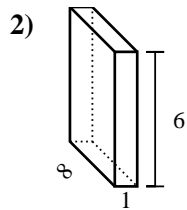
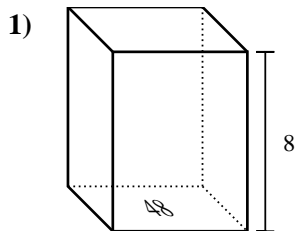
14. 567 cm³

15. 16 cm³

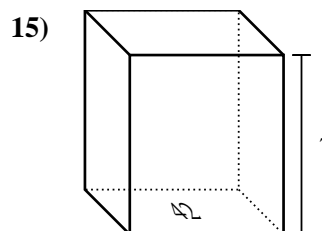
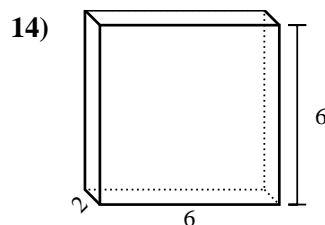
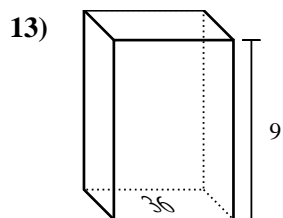
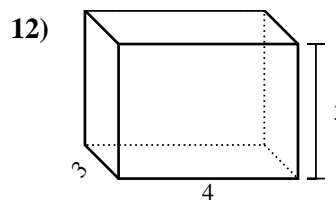
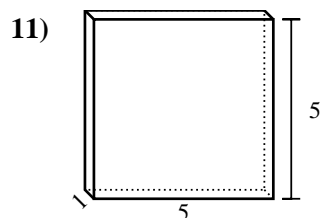
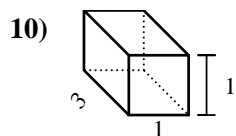
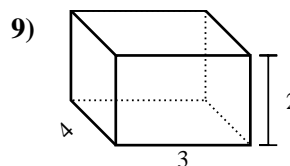
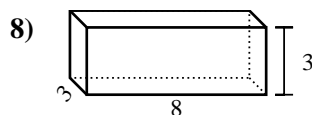
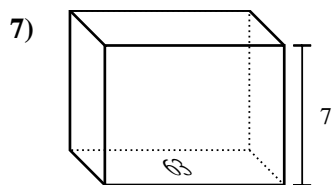
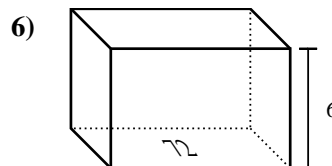
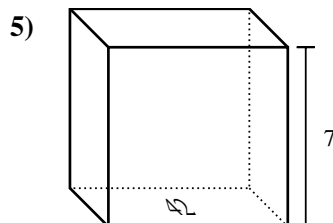
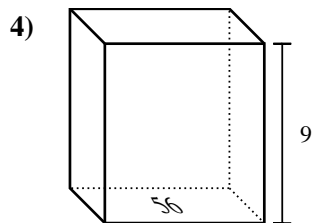
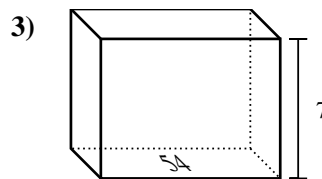
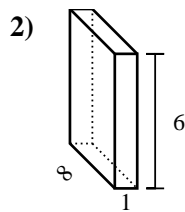
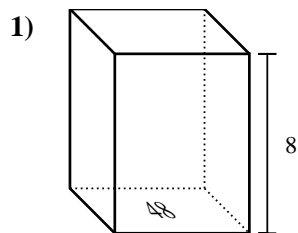


Trova il volume di ogni prisma. Ricorda $V=BH$ e $V=L \times P \times H$.

Risposte



1. _____
2. _____
3. _____
4. _____
5. _____
6. _____
7. _____
8. _____
9. _____
10. _____
11. _____
12. _____
13. _____
14. _____
15. _____

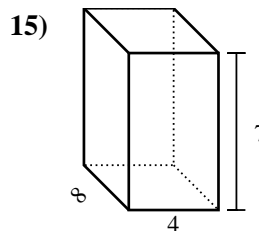
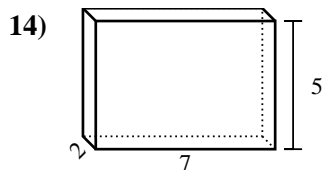
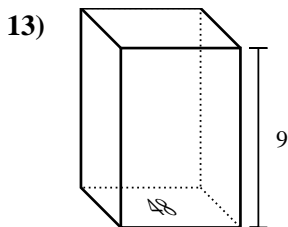
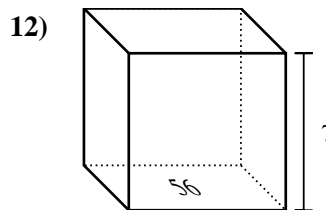
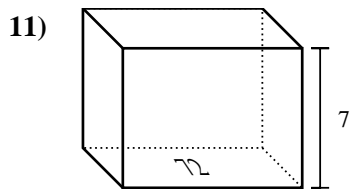
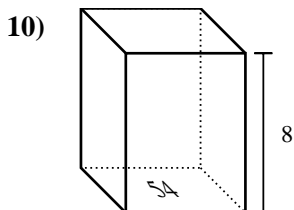
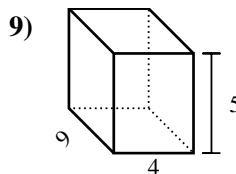
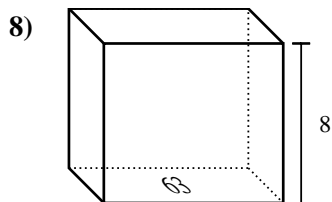
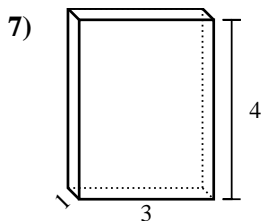
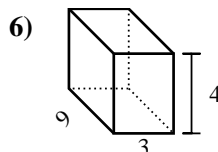
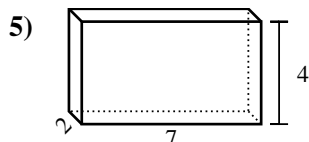
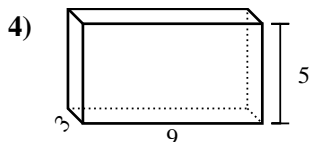
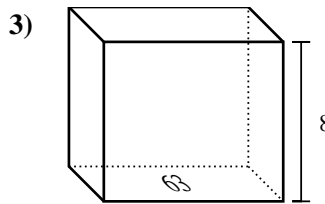
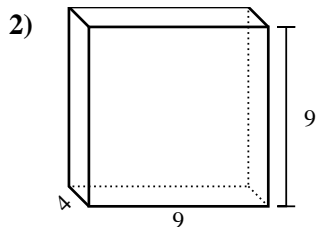
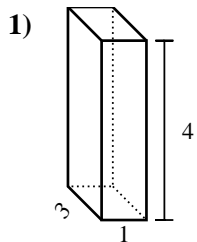
Trova il volume di ogni prisma. Ricorda $V=BH$ e $V=L \times P \times H$.**Risposte**

1. 384 cm³
2. 48 cm³
3. 378 cm³
4. 504 cm³
5. 294 cm³
6. 432 cm³
7. 441 cm³
8. 72 cm³
9. 24 cm³
10. 3 cm³
11. 25 cm³
12. 36 cm³
13. 324 cm³
14. 72 cm³
15. 294 cm³



Trova il volume di ogni prisma. Ricora $V=BH$ e $V=L \times P \times H$.

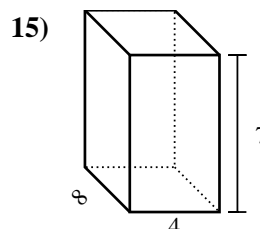
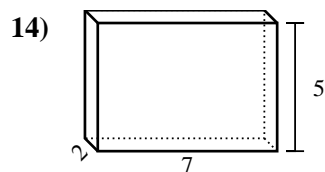
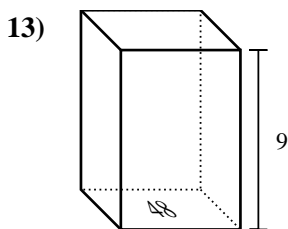
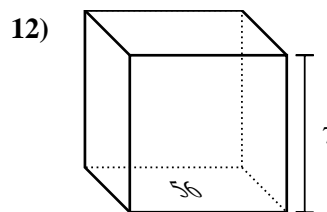
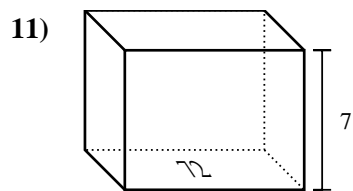
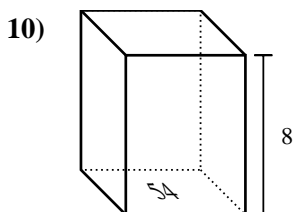
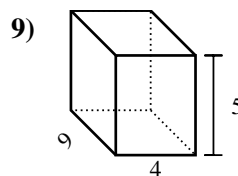
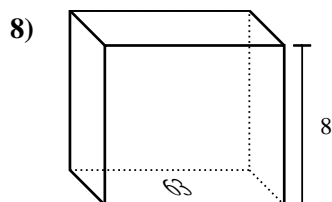
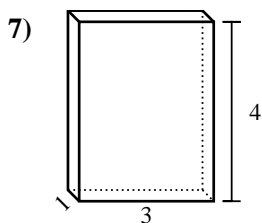
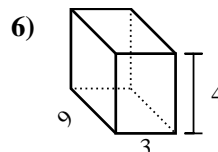
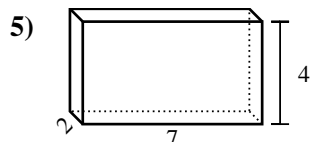
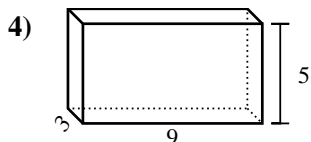
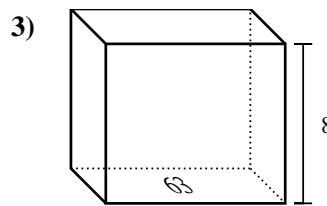
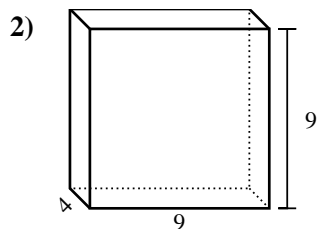
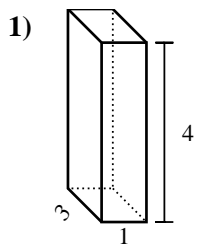
Risposte



1. _____
2. _____
3. _____
4. _____
5. _____
6. _____
7. _____
8. _____
9. _____
10. _____
11. _____
12. _____
13. _____
14. _____
15. _____



Trova il volume di ogni prisma. Ricorda $V=BH$ e $V=L \times P \times H$.



Risposte

1. 12 cm³

2. 324 cm³

3. 504 cm³

4. 135 cm³

5. 56 cm³

6. 108 cm³

7. 12 cm³

8. 504 cm³

9. 180 cm³

10. 432 cm³

11. 504 cm³

12. 392 cm³

13. 432 cm³

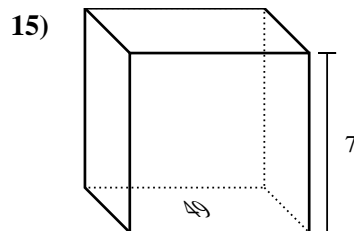
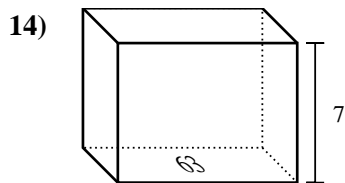
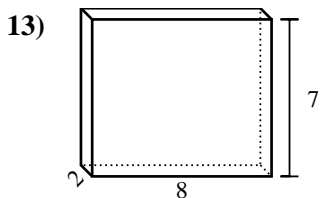
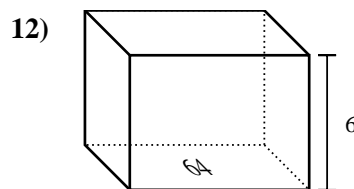
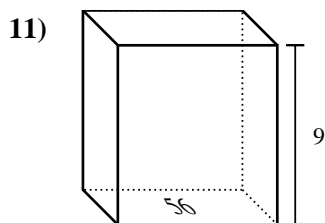
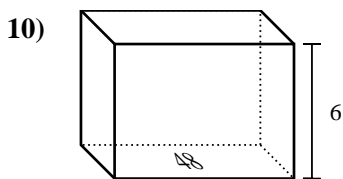
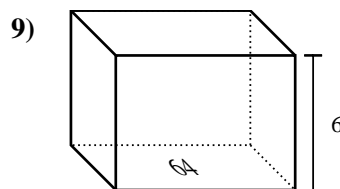
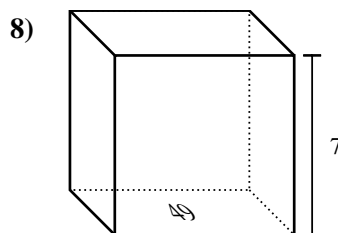
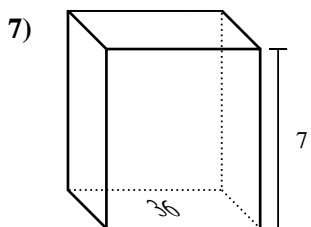
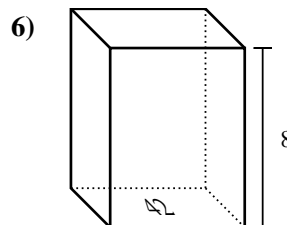
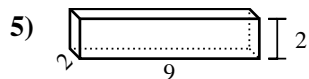
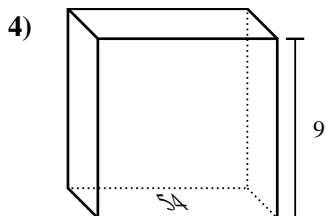
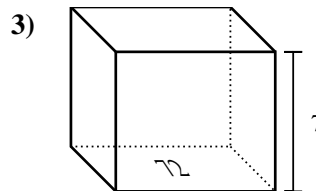
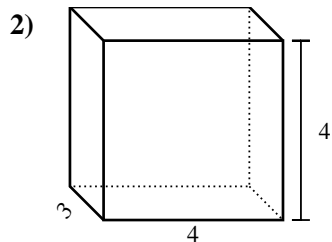
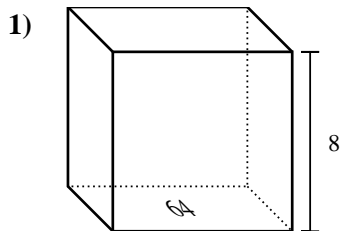
14. 70 cm³

15. 224 cm³



Trova il volume di ogni prisma. Ricora $V=BH$ e $V=L \times P \times H$.

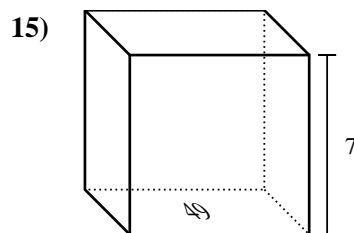
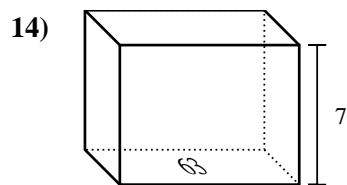
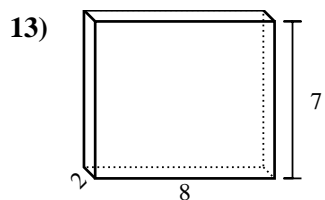
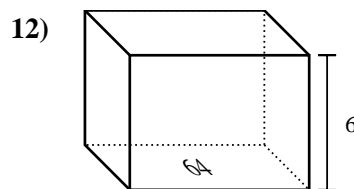
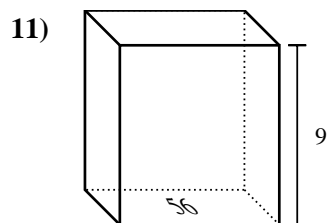
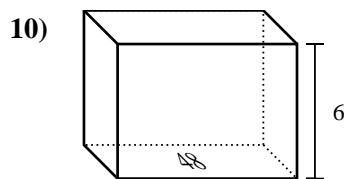
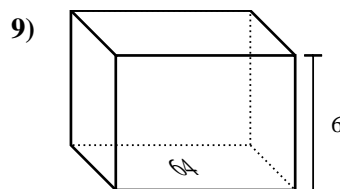
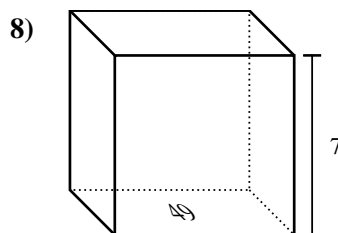
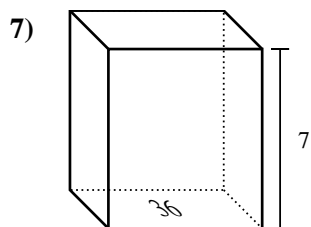
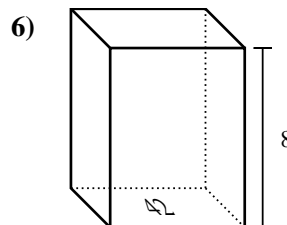
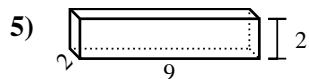
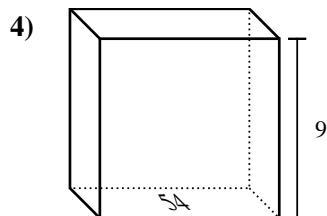
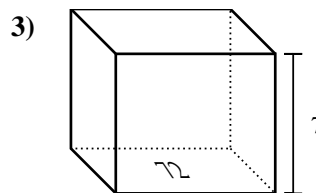
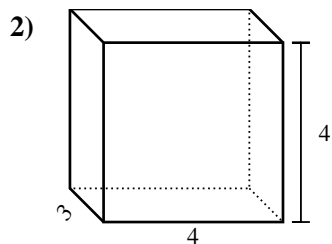
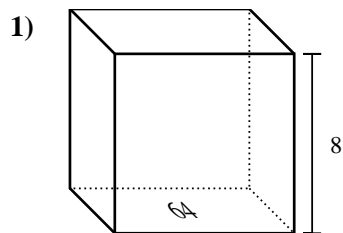
Risposte



- 1. _____
- 2. _____
- 3. _____
- 4. _____
- 5. _____
- 6. _____
- 7. _____
- 8. _____
- 9. _____
- 10. _____
- 11. _____
- 12. _____
- 13. _____
- 14. _____
- 15. _____



Trova il volume di ogni prisma. Ricorda $V=BH$ e $V=L \times P \times H$.



Risposte

1. 512 cm³

2. 48 cm³

3. 504 cm³

4. 486 cm³

5. 36 cm³

6. 336 cm³

7. 252 cm³

8. 343 cm³

9. 384 cm³

10. 288 cm³

11. 504 cm³

12. 384 cm³

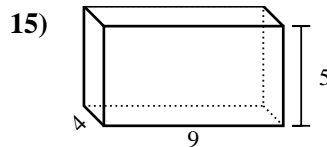
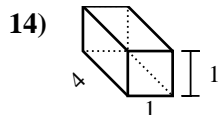
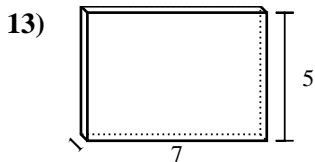
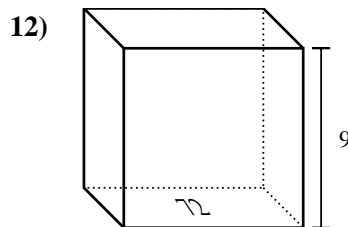
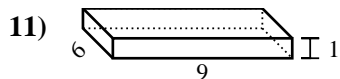
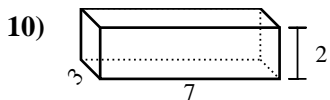
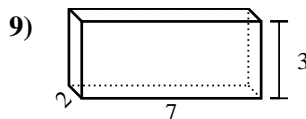
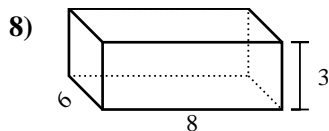
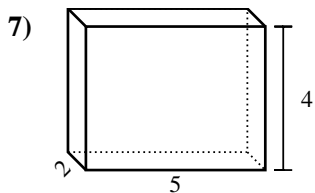
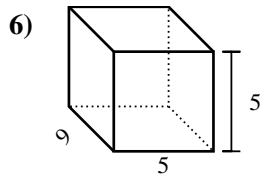
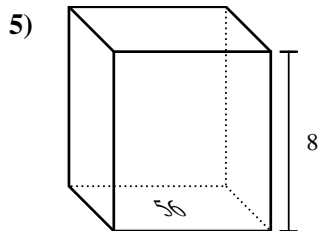
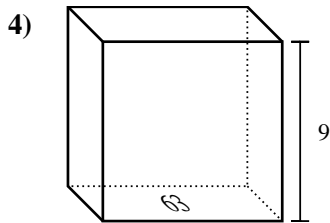
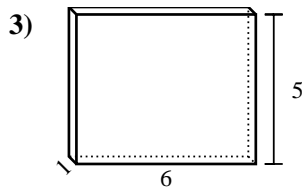
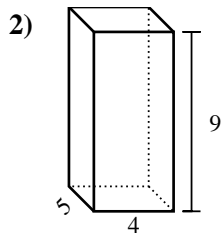
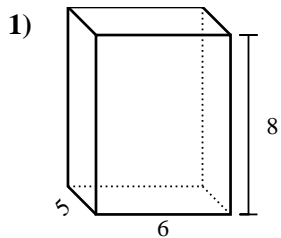
13. 112 cm³

14. 441 cm³

15. 343 cm³



Trova il volume di ogni prisma. Ricora $V=BH$ e $V=L \times P \times H$.

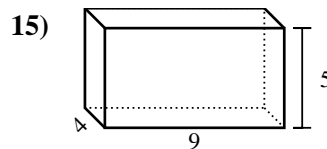
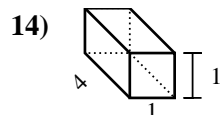
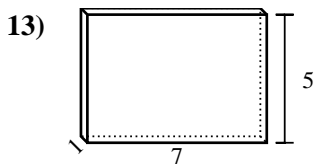
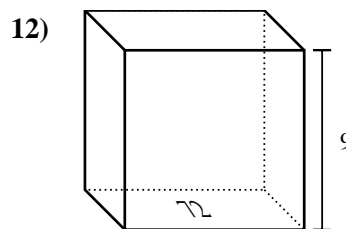
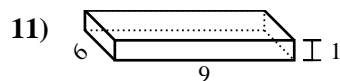
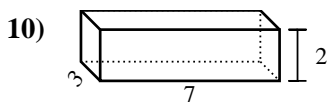
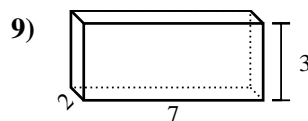
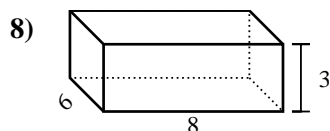
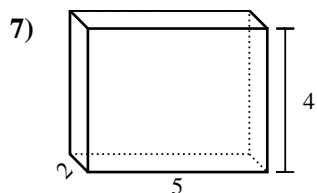
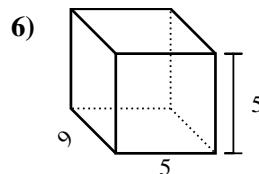
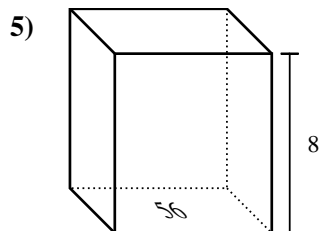
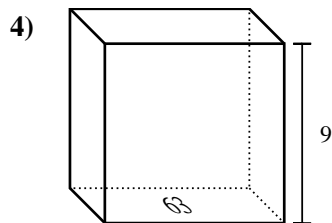
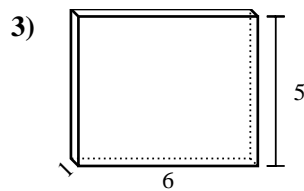
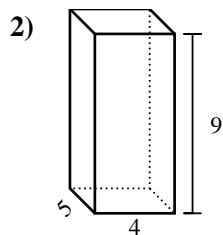
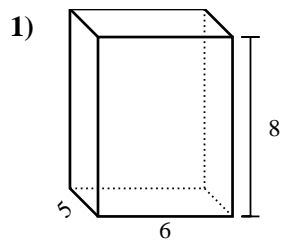


Risposte

1. _____
2. _____
3. _____
4. _____
5. _____
6. _____
7. _____
8. _____
9. _____
10. _____
11. _____
12. _____
13. _____
14. _____
15. _____



Trova il volume di ogni prisma. Ricora $V=BH$ e $V=L \times P \times H$.



Risposte

1. 240 cm³

2. 180 cm³

3. 30 cm³

4. 567 cm³

5. 448 cm³

6. 225 cm³

7. 40 cm³

8. 144 cm³

9. 42 cm³

10. 42 cm³

11. 54 cm³

12. 648 cm³

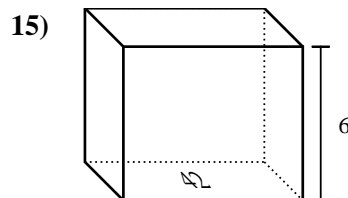
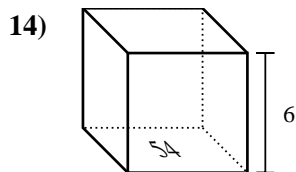
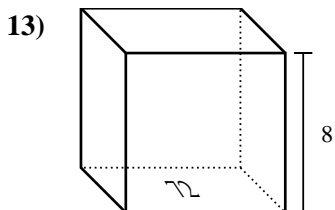
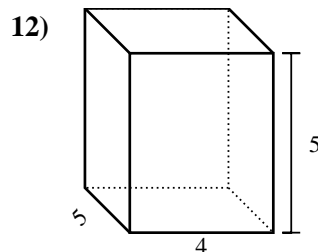
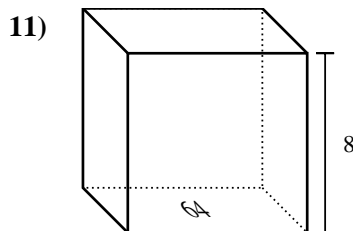
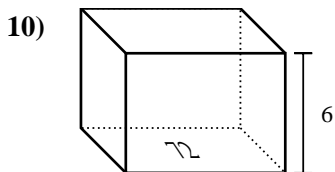
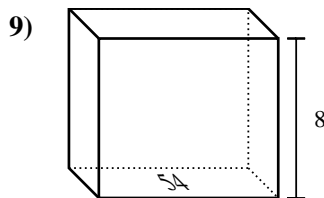
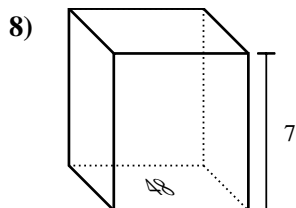
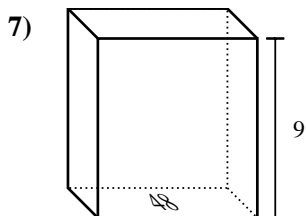
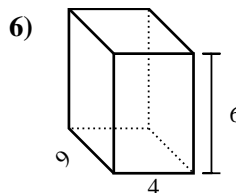
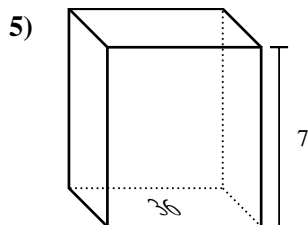
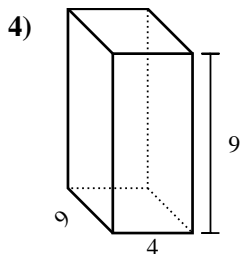
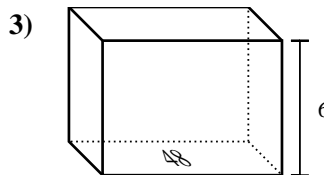
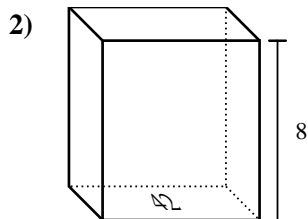
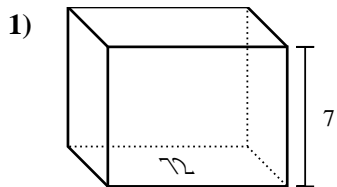
13. 35 cm³

14. 4 cm³

15. 180 cm³



Trova il volume di ogni prisma. Ricora $V=BH$ e $V=L \times P \times H$.

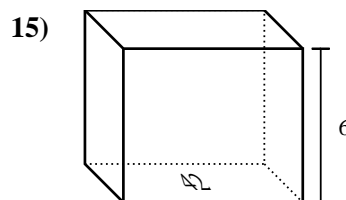
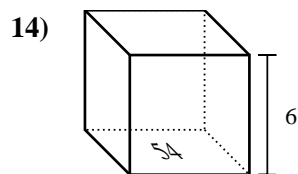
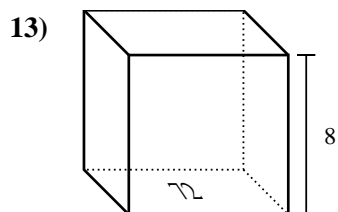
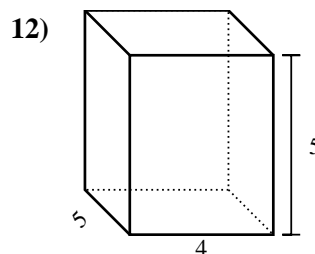
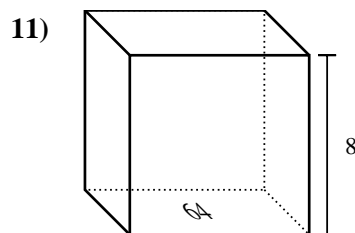
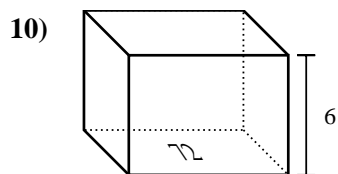
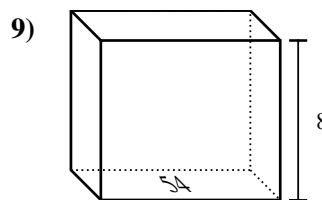
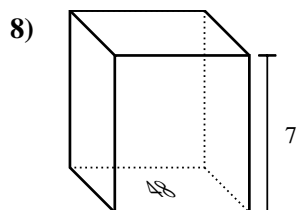
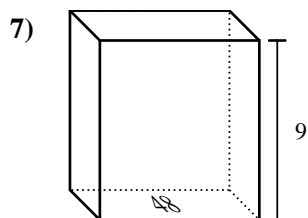
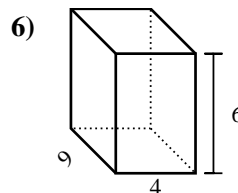
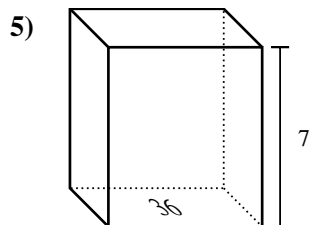
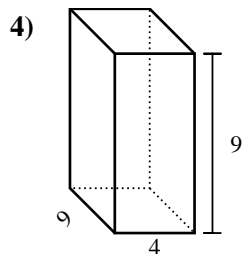
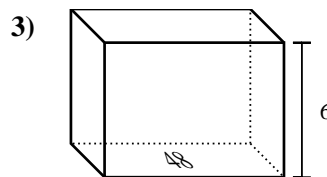
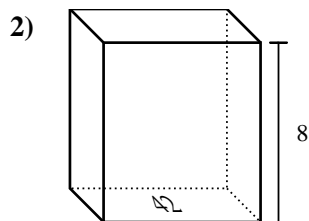
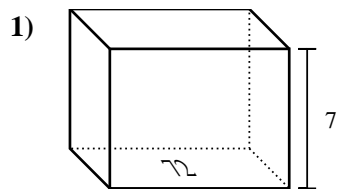


Risposte

1. _____
2. _____
3. _____
4. _____
5. _____
6. _____
7. _____
8. _____
9. _____
10. _____
11. _____
12. _____
13. _____
14. _____
15. _____



Trova il volume di ogni prisma. Ricorda $V=BH$ e $V=L \times P \times H$.



Risposte

1. 504 cm³

2. 336 cm³

3. 288 cm³

4. 324 cm³

5. 252 cm³

6. 216 cm³

7. 432 cm³

8. 336 cm³

9. 432 cm³

10. 432 cm³

11. 512 cm³

12. 100 cm³

13. 576 cm³

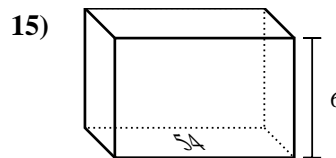
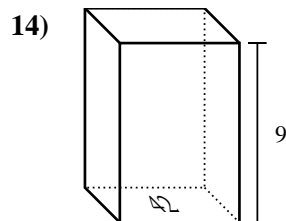
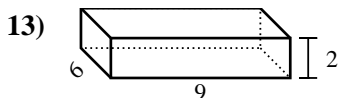
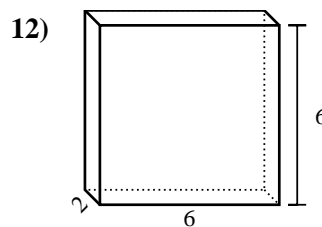
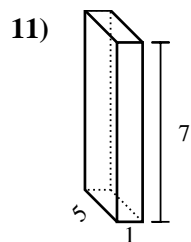
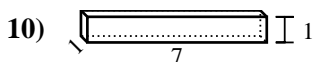
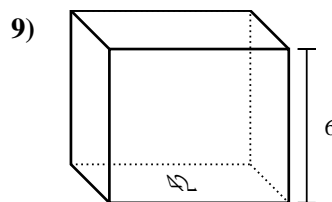
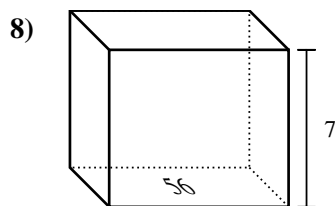
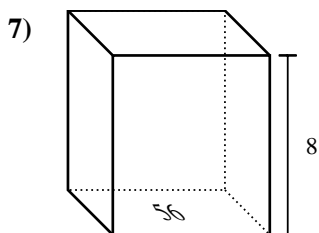
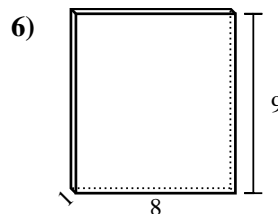
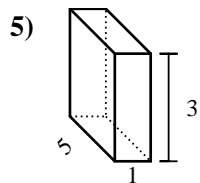
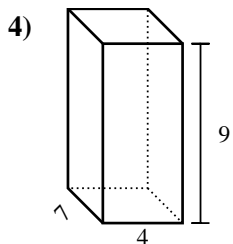
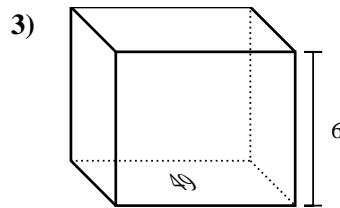
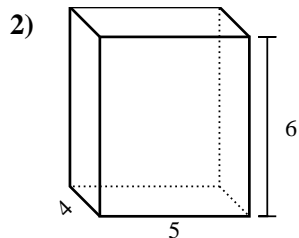
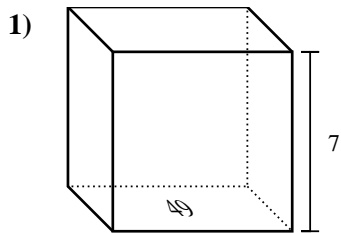
14. 324 cm³

15. 252 cm³

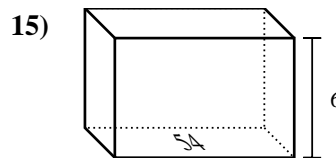
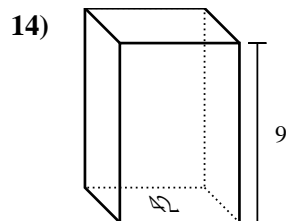
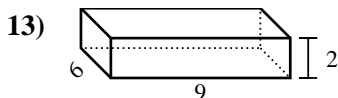
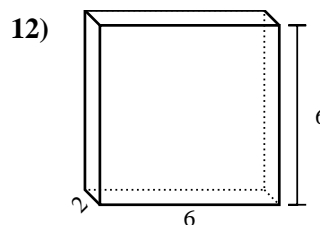
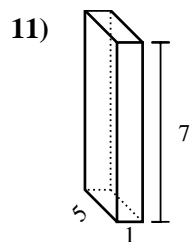
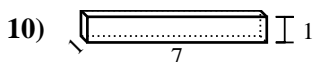
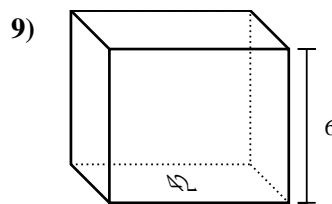
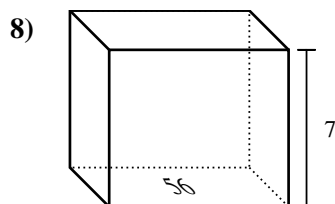
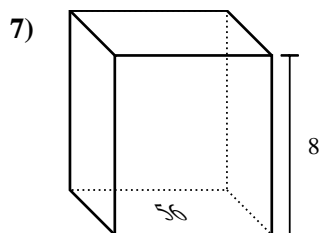
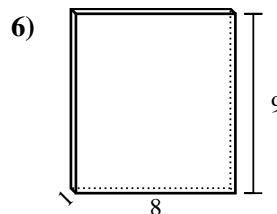
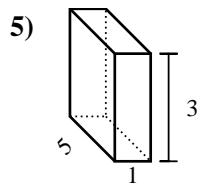
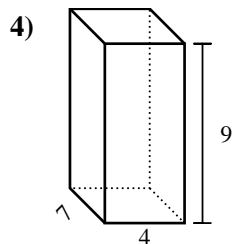
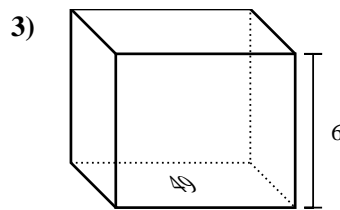
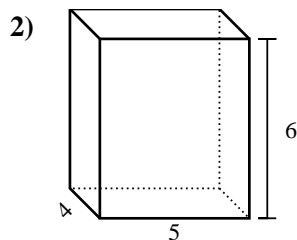
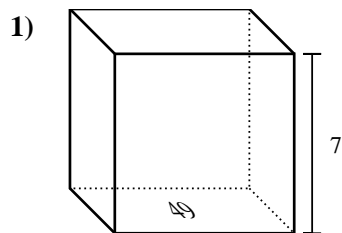


Trova il volume di ogni prisma. Ricora $V=BH$ e $V=L \times P \times H$.

Risposte



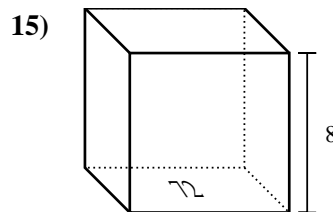
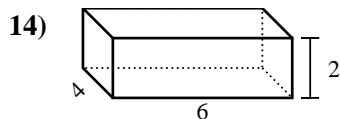
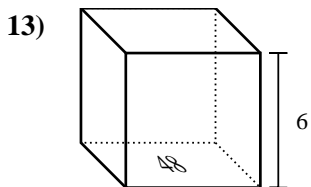
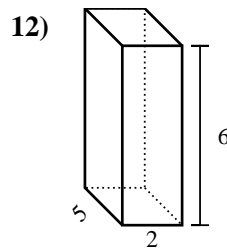
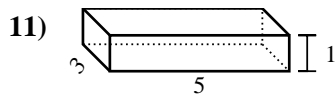
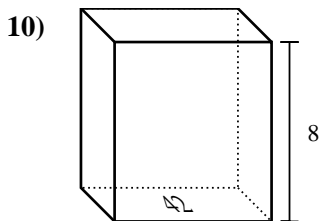
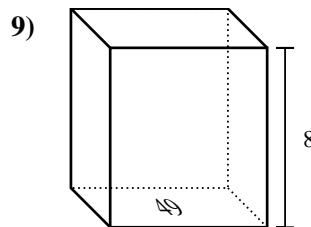
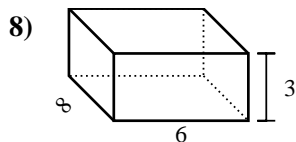
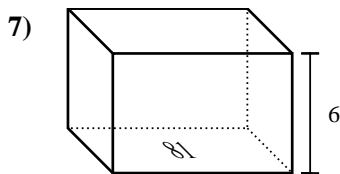
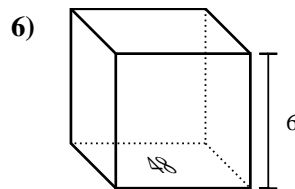
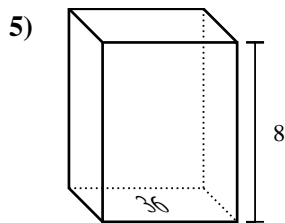
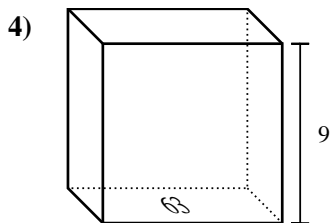
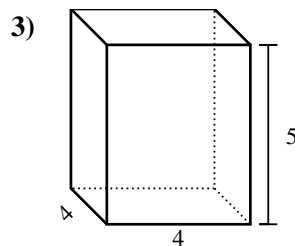
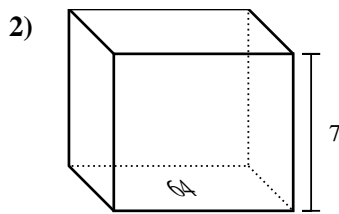
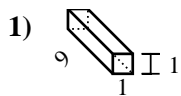
1. _____
2. _____
3. _____
4. _____
5. _____
6. _____
7. _____
8. _____
9. _____
10. _____
11. _____
12. _____
13. _____
14. _____
15. _____

Trova il volume di ogni prisma. Ricora $V=BH$ e $V=L \times P \times H$.**Risposte**1. 343 cm³2. 120 cm³3. 294 cm³4. 252 cm³5. 15 cm³6. 72 cm³7. 448 cm³8. 392 cm³9. 252 cm³10. 7 cm³11. 35 cm³12. 72 cm³13. 108 cm³14. 378 cm³15. 324 cm³



Trova il volume di ogni prisma. Ricora $V=BH$ e $V=L \times P \times H$.

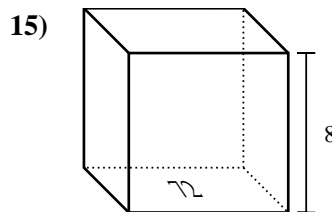
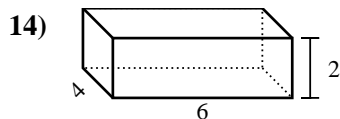
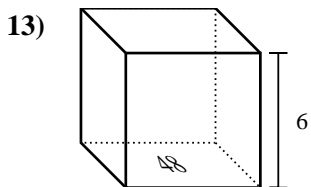
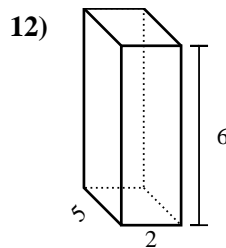
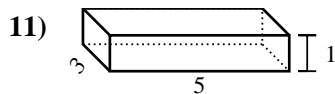
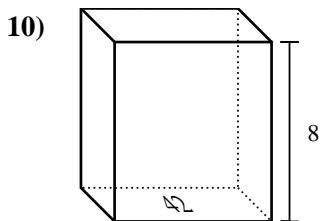
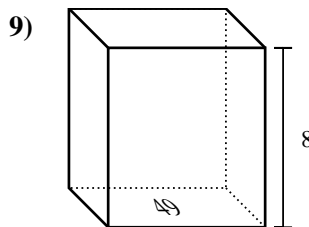
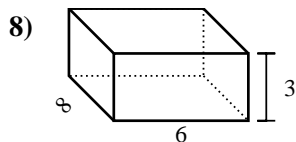
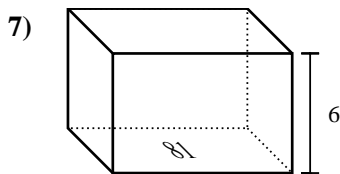
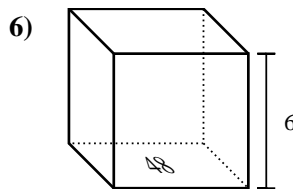
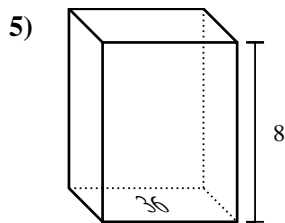
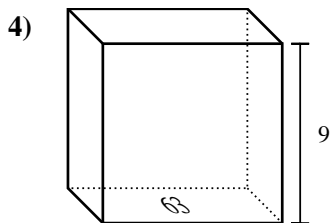
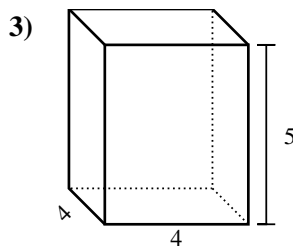
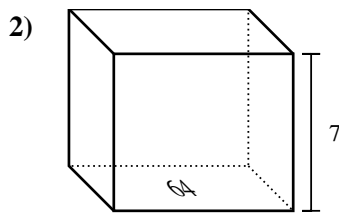
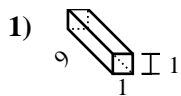
Risposte



1. _____
2. _____
3. _____
4. _____
5. _____
6. _____
7. _____
8. _____
9. _____
10. _____
11. _____
12. _____
13. _____
14. _____
15. _____



Trova il volume di ogni prisma. Ricora $V=BH$ e $V=L \times P \times H$.



Risposte

1. 9 cm³

2. 448 cm³

3. 80 cm³

4. 567 cm³

5. 288 cm³

6. 288 cm³

7. 486 cm³

8. 144 cm³

9. 392 cm³

10. 336 cm³

11. 15 cm³

12. 60 cm³

13. 288 cm³

14. 48 cm³

15. 576 cm³

