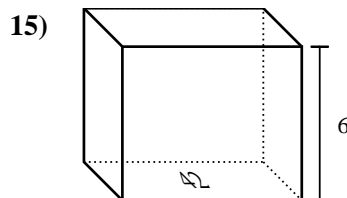
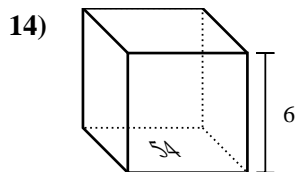
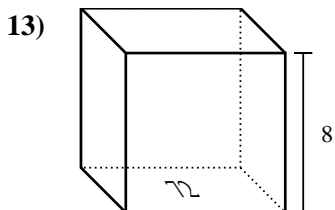
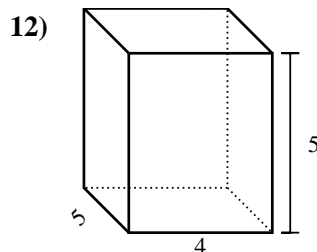
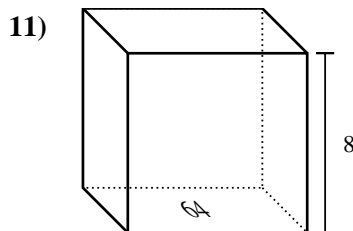
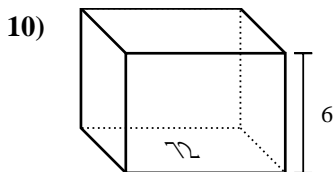
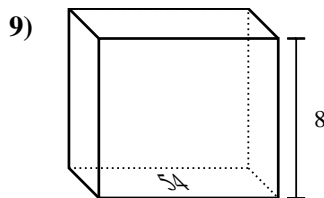
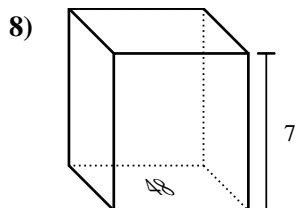
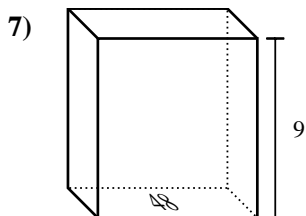
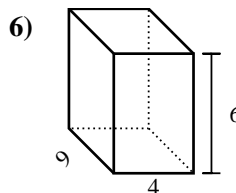
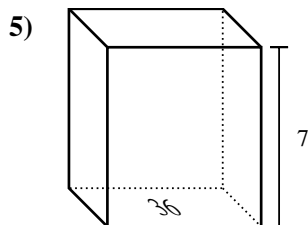
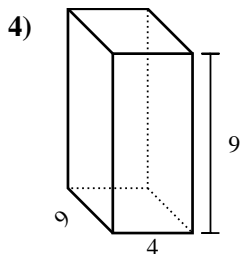
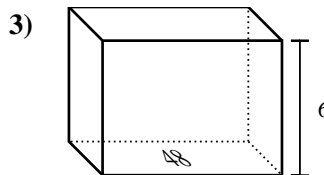
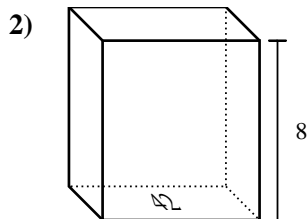
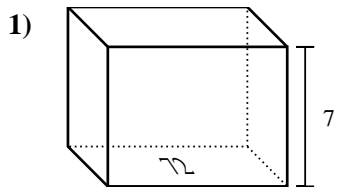


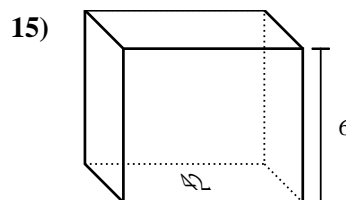
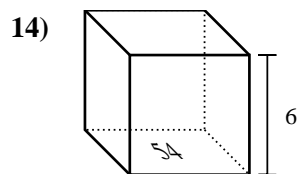
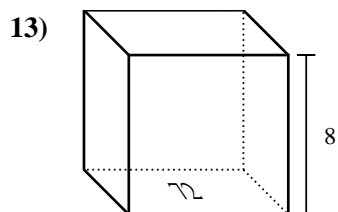
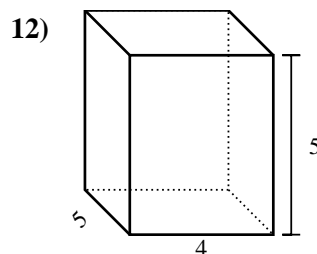
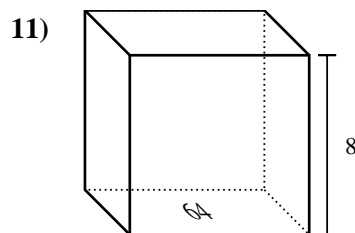
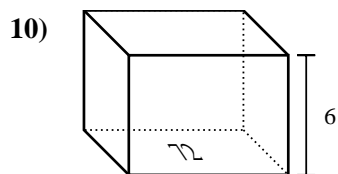
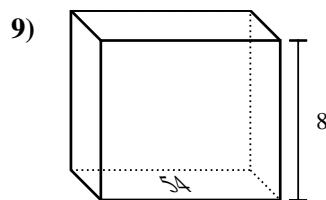
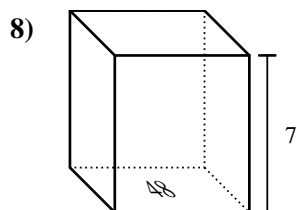
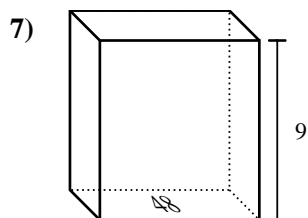
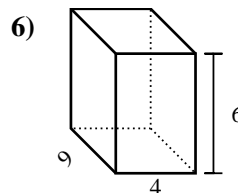
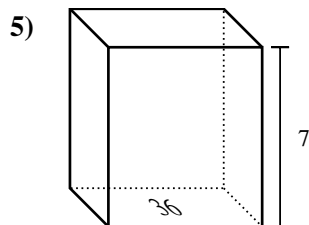
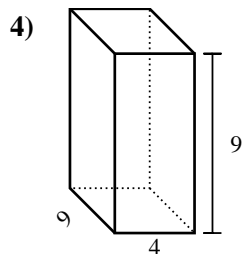
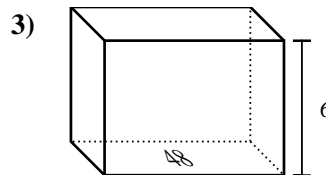
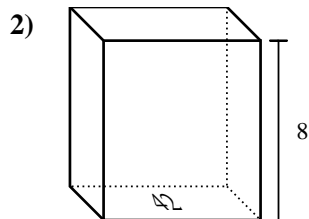
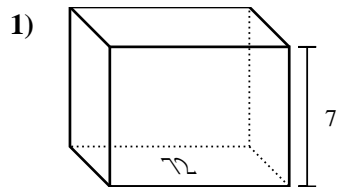


Trova il volume di ogni prisma. Ricora  $V=BH$  e  $V=L \times P \times H$ .

**Risposte**



1. \_\_\_\_\_
2. \_\_\_\_\_
3. \_\_\_\_\_
4. \_\_\_\_\_
5. \_\_\_\_\_
6. \_\_\_\_\_
7. \_\_\_\_\_
8. \_\_\_\_\_
9. \_\_\_\_\_
10. \_\_\_\_\_
11. \_\_\_\_\_
12. \_\_\_\_\_
13. \_\_\_\_\_
14. \_\_\_\_\_
15. \_\_\_\_\_

Trova il volume di ogni prisma. Ricorda  $V=BH$  e  $V=L \times P \times H$ .**Risposte**1. 504 cm<sup>3</sup>2. 336 cm<sup>3</sup>3. 288 cm<sup>3</sup>4. 324 cm<sup>3</sup>5. 252 cm<sup>3</sup>6. 216 cm<sup>3</sup>7. 432 cm<sup>3</sup>8. 336 cm<sup>3</sup>9. 432 cm<sup>3</sup>10. 432 cm<sup>3</sup>11. 512 cm<sup>3</sup>12. 100 cm<sup>3</sup>13. 576 cm<sup>3</sup>14. 324 cm<sup>3</sup>15. 252 cm<sup>3</sup>