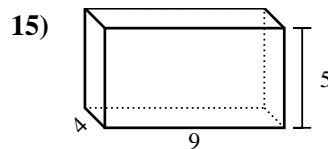
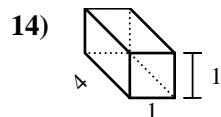
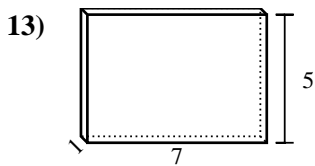
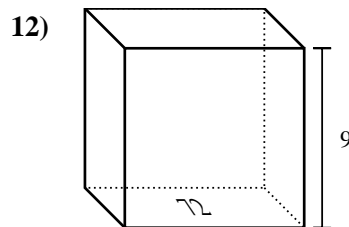
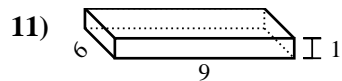
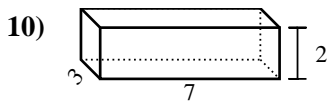
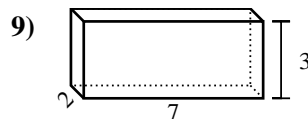
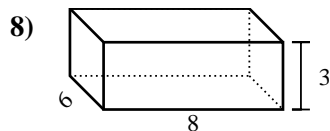
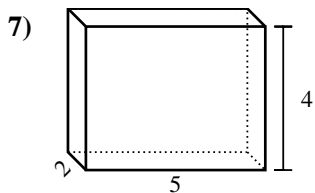
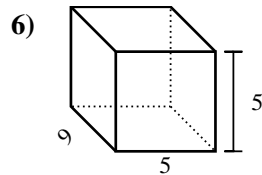
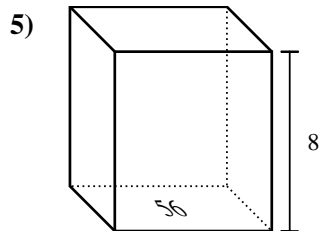
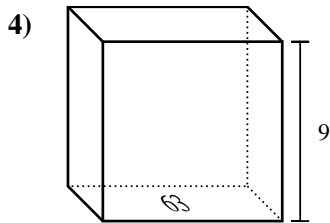
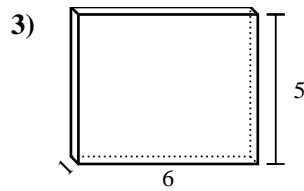
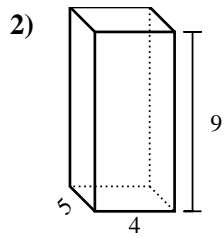
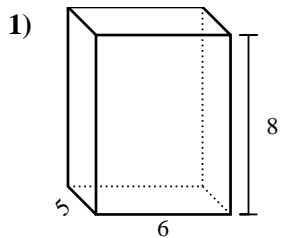




Trova il volume di ogni prisma. Ricora $V=BH$ e $V=L \times P \times H$.

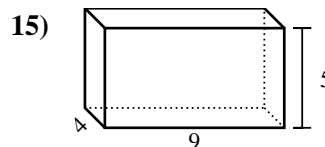
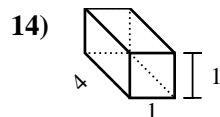
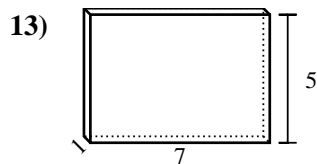
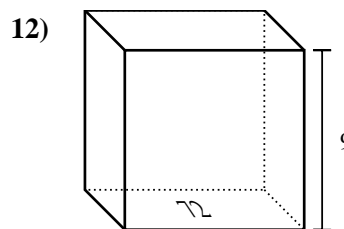
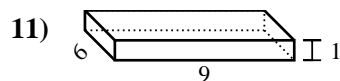
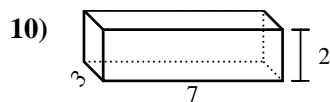
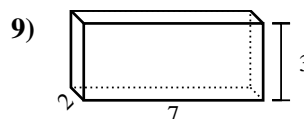
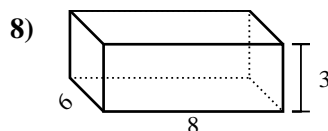
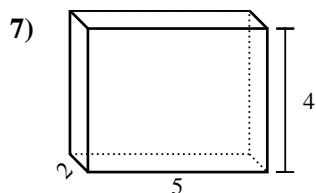
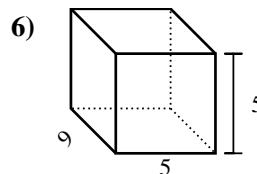
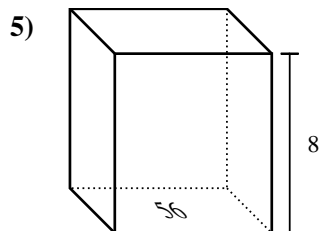
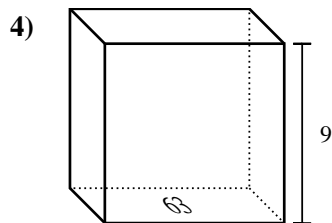
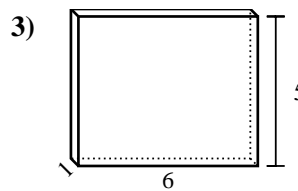
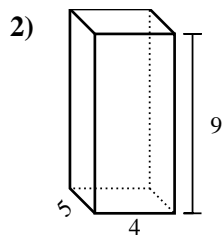
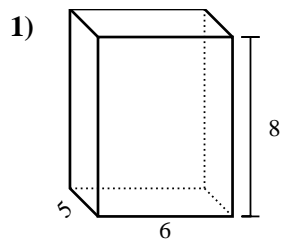


Risposte

1. _____
2. _____
3. _____
4. _____
5. _____
6. _____
7. _____
8. _____
9. _____
10. _____
11. _____
12. _____
13. _____
14. _____
15. _____



Trova il volume di ogni prisma. Ricora $V=BH$ e $V=L \times P \times H$.



Risposte

1. 240 cm³

2. 180 cm³

3. 30 cm³

4. 567 cm³

5. 448 cm³

6. 225 cm³

7. 40 cm³

8. 144 cm³

9. 42 cm³

10. 42 cm³

11. 54 cm³

12. 648 cm³

13. 35 cm³

14. 4 cm³

15. 180 cm³