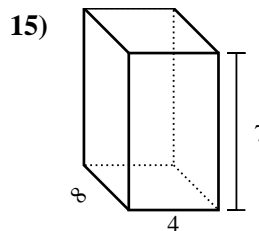
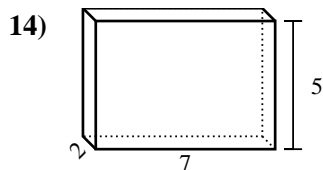
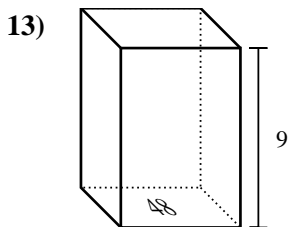
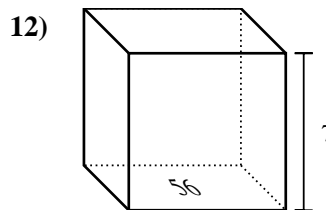
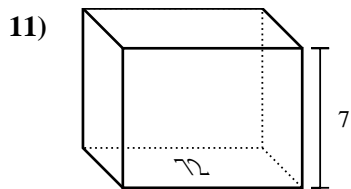
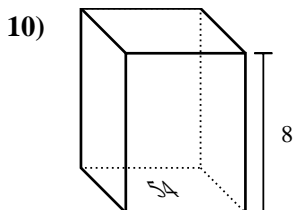
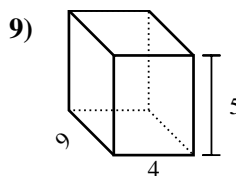
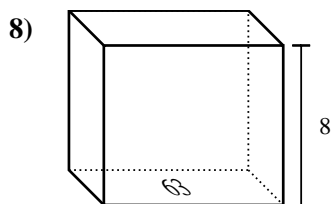
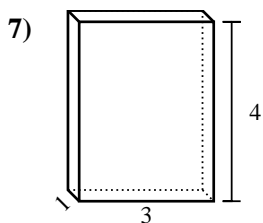
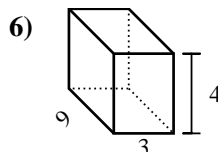
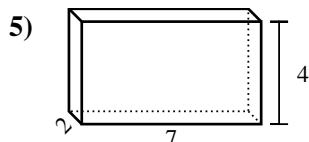
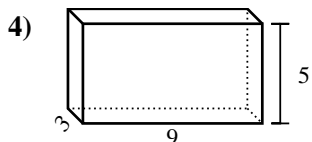
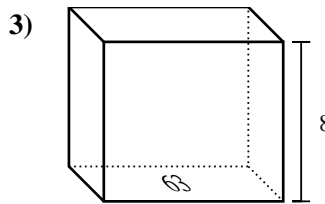
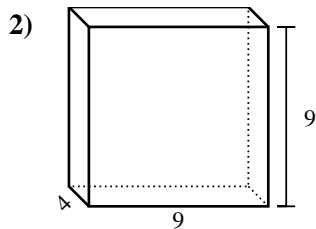
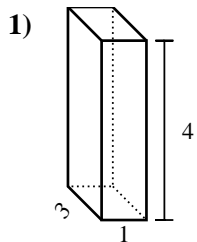




Trova il volume di ogni prisma. Ricora $V=BH$ e $V=L \times P \times H$.

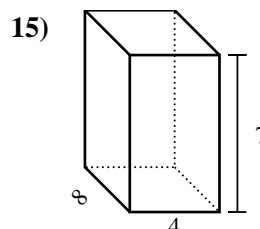
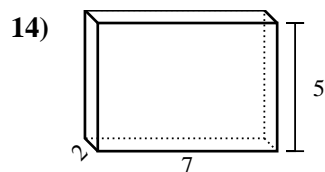
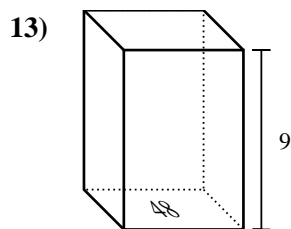
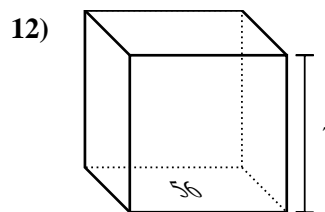
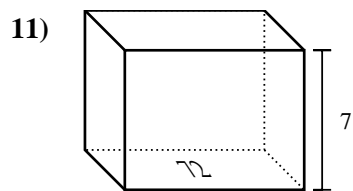
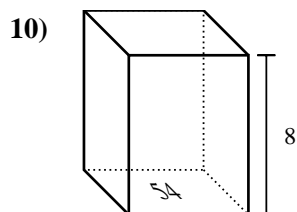
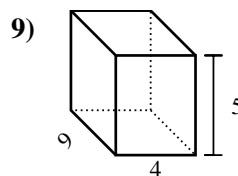
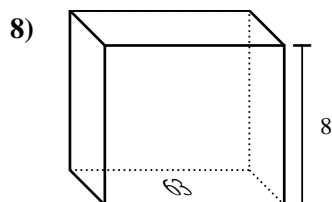
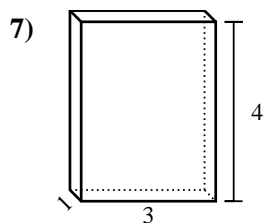
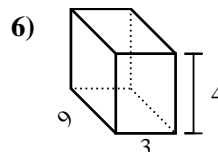
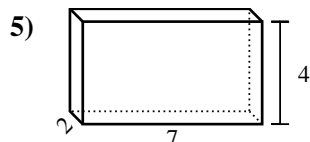
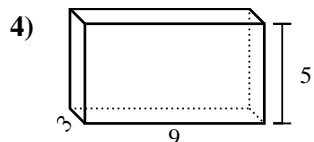
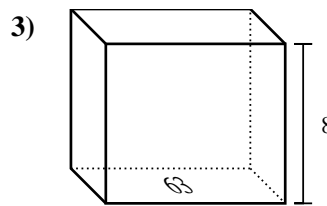
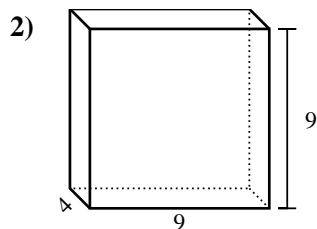
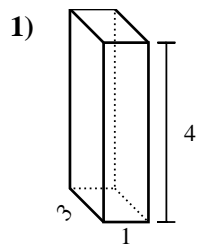
Risposte



1. _____
2. _____
3. _____
4. _____
5. _____
6. _____
7. _____
8. _____
9. _____
10. _____
11. _____
12. _____
13. _____
14. _____
15. _____



Trova il volume di ogni prisma. Ricorda $V=BH$ e $V=L \times P \times H$.



Risposte

1. 12 cm³

2. 324 cm³

3. 504 cm³

4. 135 cm³

5. 56 cm³

6. 108 cm³

7. 12 cm³

8. 504 cm³

9. 180 cm³

10. 432 cm³

11. 504 cm³

12. 392 cm³

13. 432 cm³

14. 70 cm³

15. 224 cm³