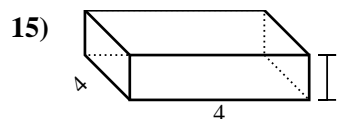
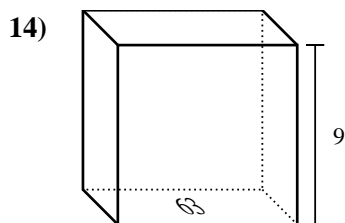
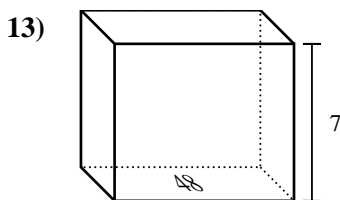
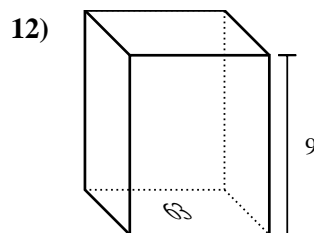
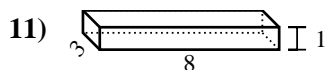
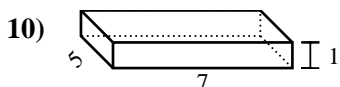
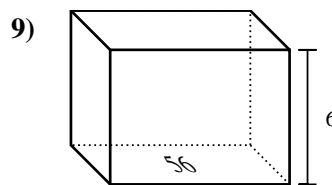
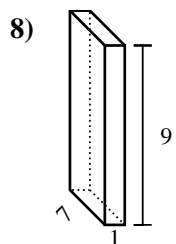
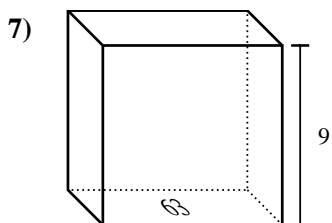
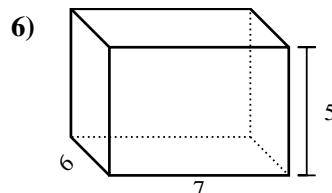
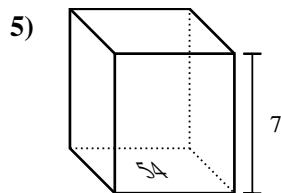
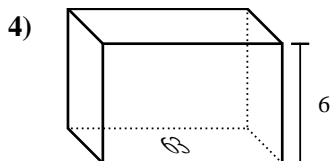
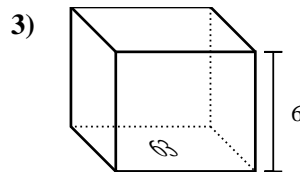
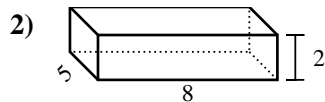
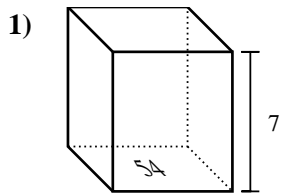




Trova il volume di ogni prisma. Ricora $V=BH$ e $V=L \times P \times H$.

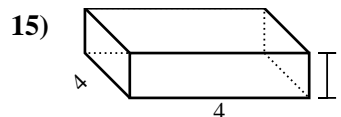
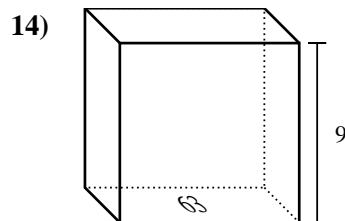
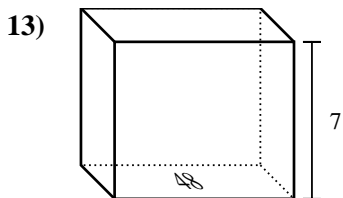
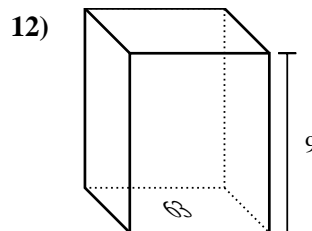
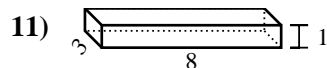
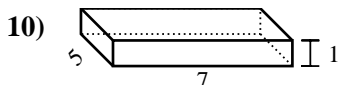
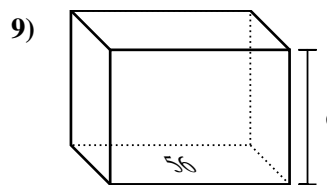
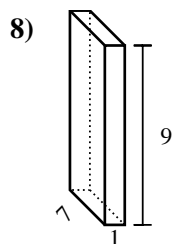
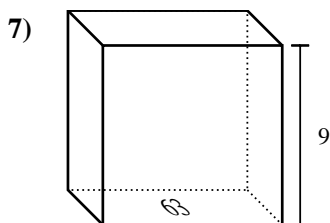
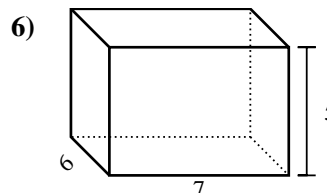
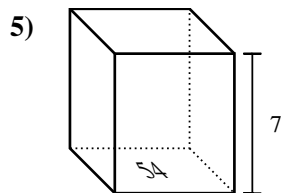
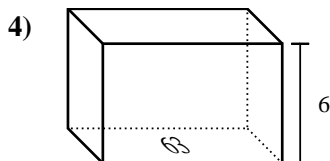
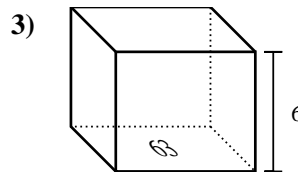
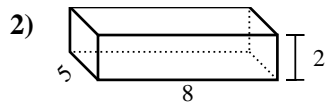
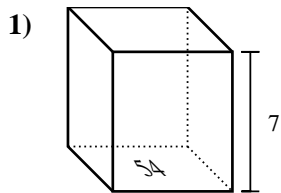
Risposte



1. _____
2. _____
3. _____
4. _____
5. _____
6. _____
7. _____
8. _____
9. _____
10. _____
11. _____
12. _____
13. _____
14. _____
15. _____



Trova il volume di ogni prisma. Ricora $V=BH$ e $V=L \times P \times H$.



Risposte

1. 378 cm³

2. 80 cm³

3. 378 cm³

4. 378 cm³

5. 378 cm³

6. 210 cm³

7. 567 cm³

8. 63 cm³

9. 336 cm³

10. 35 cm³

11. 24 cm³

12. 567 cm³

13. 336 cm³

14. 567 cm³

15. 16 cm³