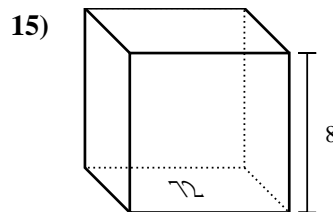
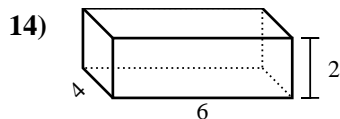
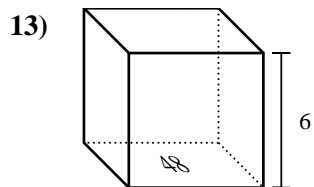
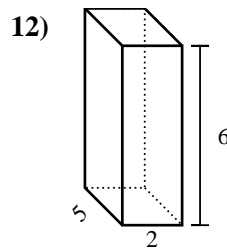
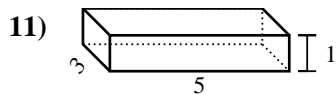
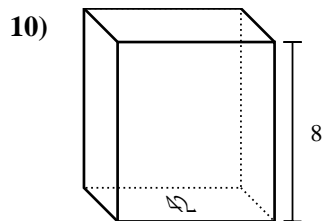
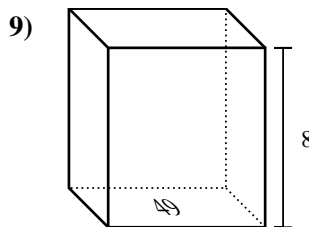
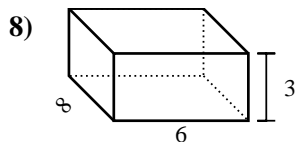
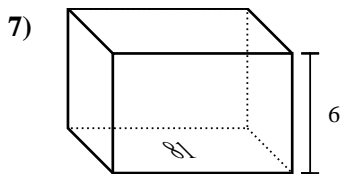
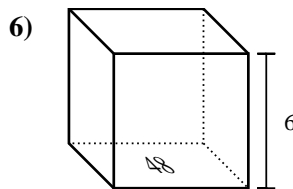
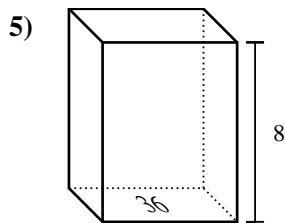
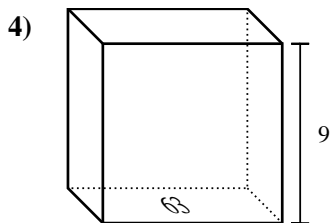
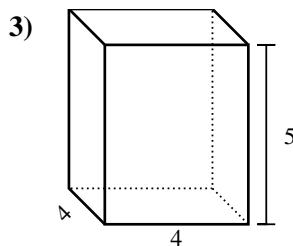
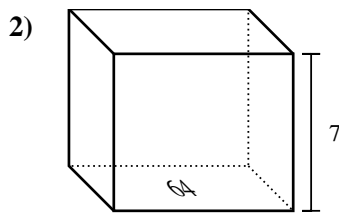
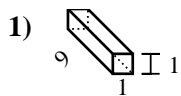




Trova il volume di ogni prisma. Ricora  $V=BH$  e  $V=L \times P \times H$ .

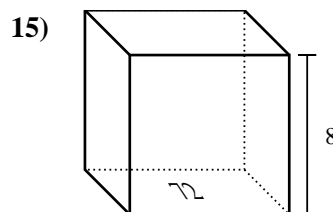
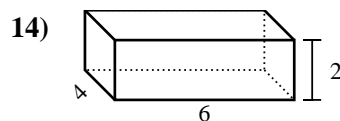
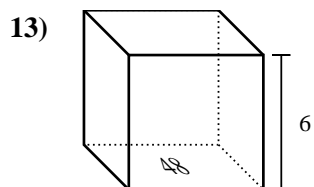
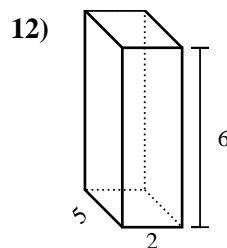
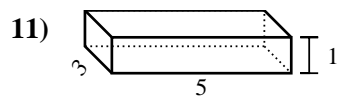
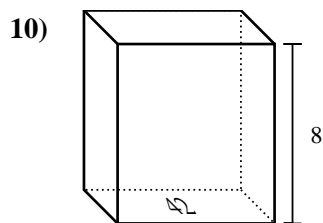
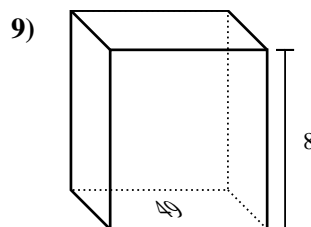
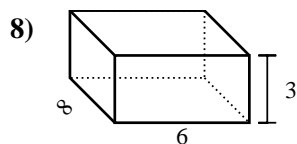
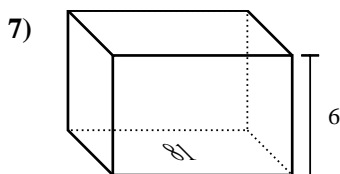
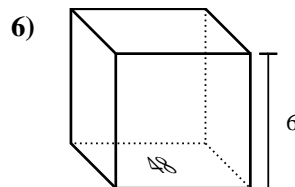
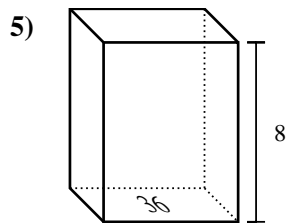
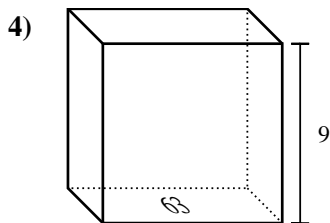
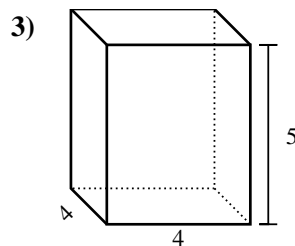
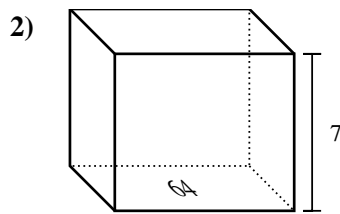
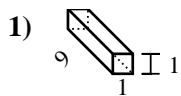
**Risposte**



1. \_\_\_\_\_
2. \_\_\_\_\_
3. \_\_\_\_\_
4. \_\_\_\_\_
5. \_\_\_\_\_
6. \_\_\_\_\_
7. \_\_\_\_\_
8. \_\_\_\_\_
9. \_\_\_\_\_
10. \_\_\_\_\_
11. \_\_\_\_\_
12. \_\_\_\_\_
13. \_\_\_\_\_
14. \_\_\_\_\_
15. \_\_\_\_\_



Trova il volume di ogni prisma. Ricora  $V=BH$  e  $V=L \times P \times H$ .



**Risposte**

1. 9 cm<sup>3</sup>

2. 448 cm<sup>3</sup>

3. 80 cm<sup>3</sup>

4. 567 cm<sup>3</sup>

5. 288 cm<sup>3</sup>

6. 288 cm<sup>3</sup>

7. 486 cm<sup>3</sup>

8. 144 cm<sup>3</sup>

9. 392 cm<sup>3</sup>

10. 336 cm<sup>3</sup>

11. 15 cm<sup>3</sup>

12. 60 cm<sup>3</sup>

13. 288 cm<sup>3</sup>

14. 48 cm<sup>3</sup>

15. 576 cm<sup>3</sup>