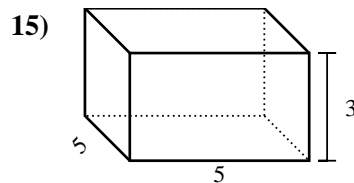
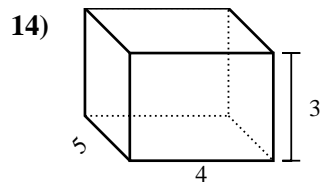
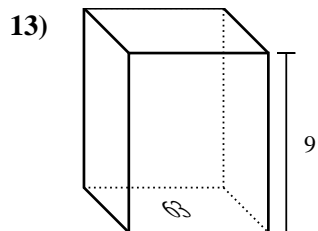
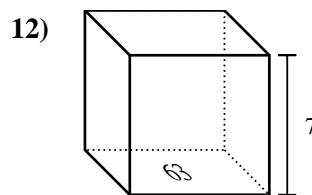
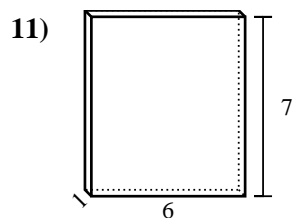
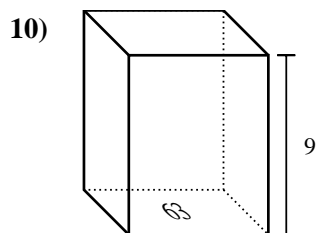
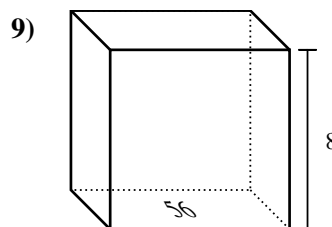
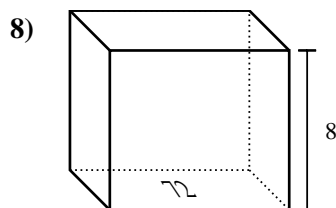
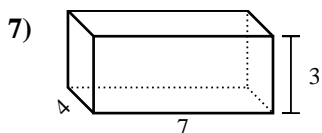
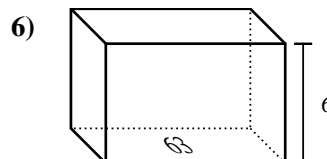
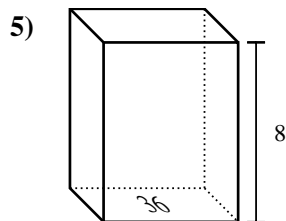
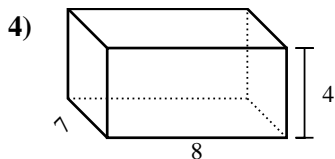
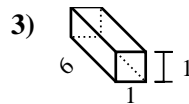
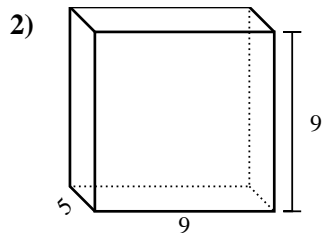
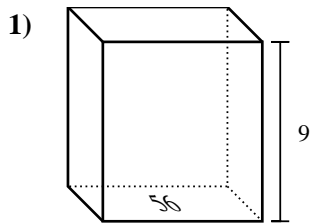




Trova il volume di ogni prisma. Ricora $V=BH$ e $V=L \times P \times H$.

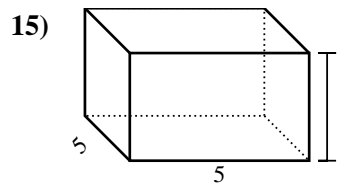
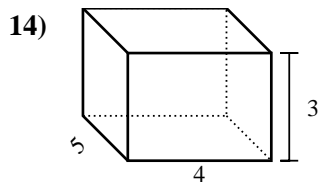
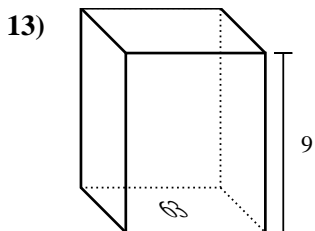
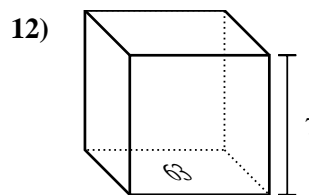
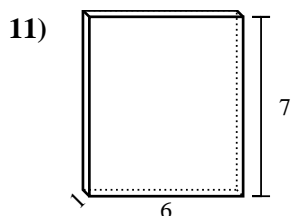
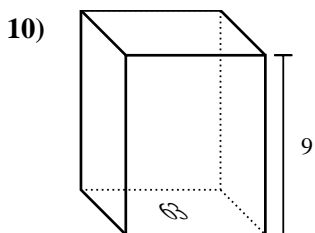
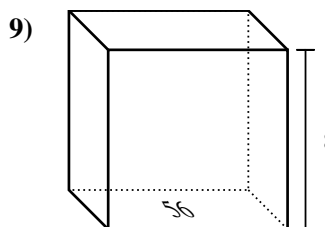
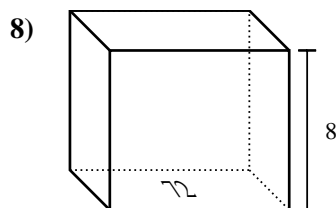
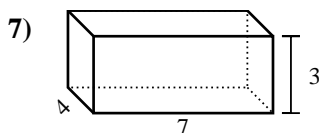
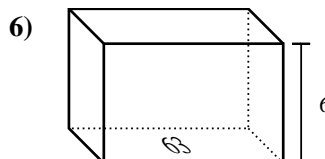
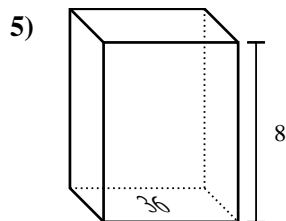
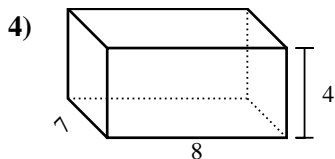
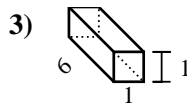
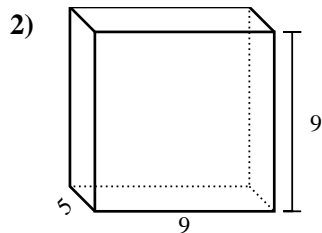
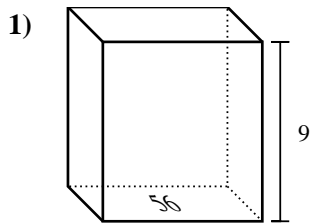
Risposte



1. _____
2. _____
3. _____
4. _____
5. _____
6. _____
7. _____
8. _____
9. _____
10. _____
11. _____
12. _____
13. _____
14. _____
15. _____



Trova il volume di ogni prisma. Ricora $V=BH$ e $V=L \times P \times H$.



Risposte

1. 504 cm³

2. 405 cm³

3. 6 cm³

4. 224 cm³

5. 288 cm³

6. 378 cm³

7. 84 cm³

8. 576 cm³

9. 448 cm³

10. 567 cm³

11. 42 cm³

12. 441 cm³

13. 567 cm³

14. 60 cm³

15. 75 cm³