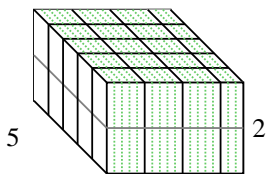


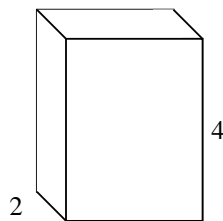


Dividi il prisma in cubi per determinare il volume complessivo, Ogni unità del prisma è misurata in cm (non va scalata).


Es) $3 \frac{3}{5}$



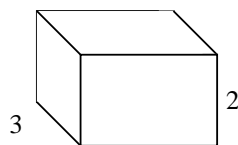
1) $3 \frac{1}{2}$



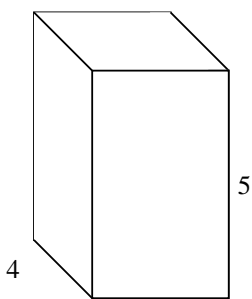
2) $6 \frac{2}{4}$



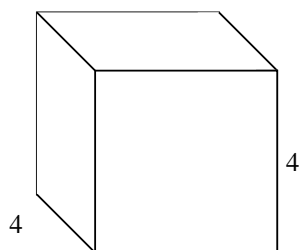
3) $3 \frac{1}{3}$




4) $3 \frac{1}{2}$



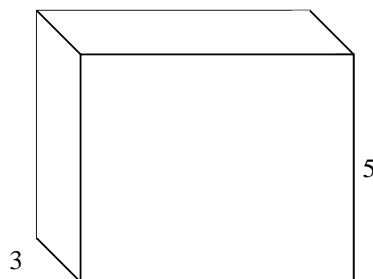
5) $4 \frac{1}{2}$



6) $6 \frac{1}{3}$



7) $6 \frac{2}{5}$



Risposte

Es. 36 cm³

1. _____

2. _____

3. _____

4. _____

5. _____

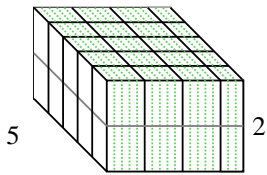
6. _____

7. _____

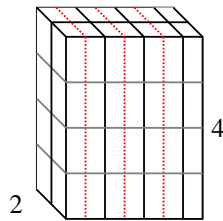


Dividi il prisma in cubi per determinare il volume complessivo, Ogni unità del prisma è misurata in cm (non va scalata).

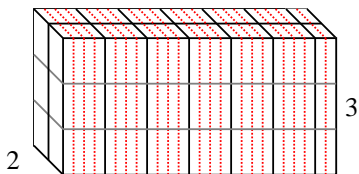
Es) $3 \frac{3}{5}$



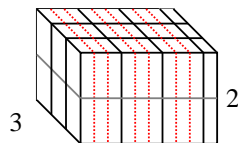
1) $3 \frac{1}{2}$



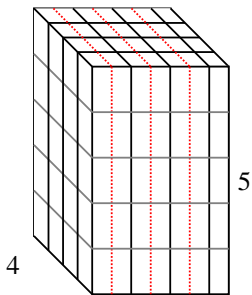
2) $6 \frac{2}{4}$



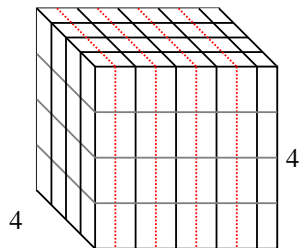
3) $3 \frac{1}{3}$



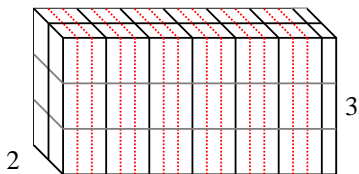
4) $3 \frac{1}{2}$



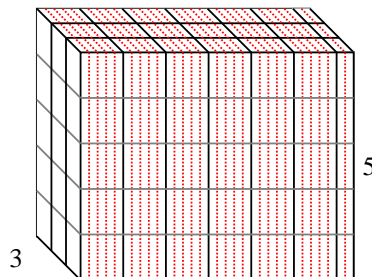
5) $4 \frac{1}{2}$



6) $6 \frac{1}{3}$



7) $6 \frac{2}{5}$



Risposte

Es. 36 cm³

1. 28 cm³

2. 39 cm³

3. 20 cm³

4. 70 cm³

5. 72 cm³

6. 38 cm³

7. 96 cm³