





Indica il numero di piccole unità o parti frazionate che si possono ricavare dai pezzi più grandi.

Es) $1 \frac{2}{5}$




Es. 7

1) $2 \frac{1}{2}$




1. _____

2) $1 \frac{1}{4}$



2. _____

3) $1 \frac{3}{5}$




3. _____

4) $6 \frac{3}{4}$




4. _____

5) $9 \frac{1}{4}$




5. _____

6) $5 \frac{1}{2}$



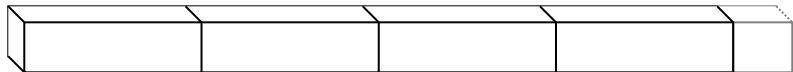
6. _____

7) $4 \frac{1}{2}$



7. _____

8) $4 \frac{1}{3}$



8. _____

9) $4 \frac{2}{5}$



9. _____

10) $9 \frac{3}{5}$



10. _____

Risposte



Indica il numero di piccole unità o parti frazionate che si possono ricavare dai pezzi più grandi.

Es) $1 \frac{2}{5}$

1) $2 \frac{1}{2}$

2) $1 \frac{1}{4}$

3) $1 \frac{3}{5}$

4) $6 \frac{3}{4}$

5) $9 \frac{1}{4}$

6) $5 \frac{1}{2}$

7) $4 \frac{1}{2}$

8) $4 \frac{1}{3}$

9) $4 \frac{2}{5}$

10) $9 \frac{3}{5}$

Risposte

- Es. 7
1. 5
2. 5
3. 8
4. 27
5. 37
6. 11
7. 9
8. 13
9. 22
10. 48