

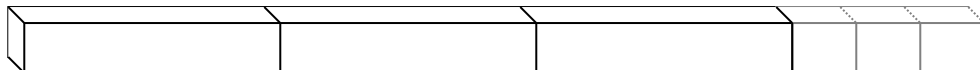


Indica il numero di piccole unità o parti frazionate che si possono ricavare dai pezzi più grandi.

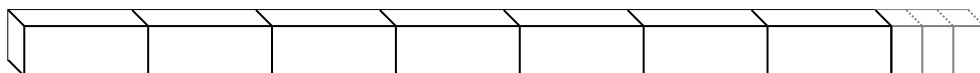
Es) $2\frac{1}{3}$



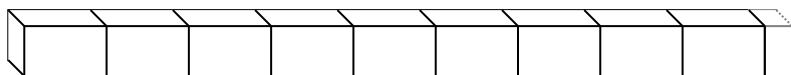
1) $3\frac{3}{4}$




2) $7\frac{3}{4}$



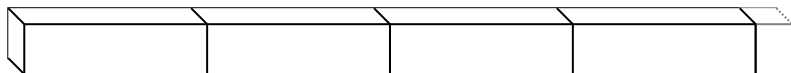
3) $9\frac{1}{3}$



4) $1\frac{2}{3}$




5) $4\frac{1}{5}$



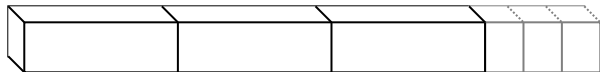
6) $9\frac{3}{4}$




7) $3\frac{1}{2}$



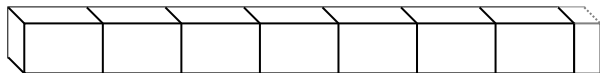
8) $3\frac{3}{4}$



9) $5\frac{1}{5}$



10) $7\frac{1}{3}$



Risposte

Es. 7

1. _____

2. _____

3. _____

4. _____

5. _____

6. _____

7. _____

8. _____

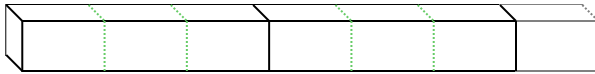
9. _____

10. _____

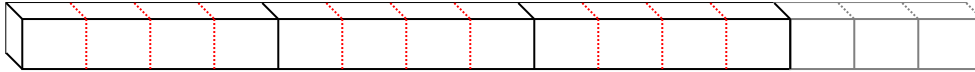


Indica il numero di piccole unità o parti frazionate che si possono ricavare dai pezzi più grandi.

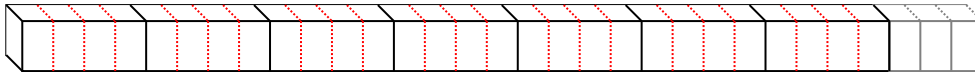
Es) $2\frac{1}{3}$



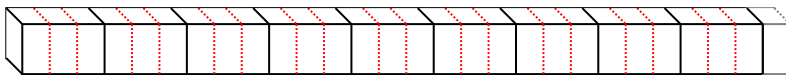
1) $3\frac{3}{4}$




2) $7\frac{3}{4}$



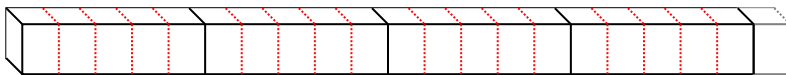
3) $9\frac{1}{3}$



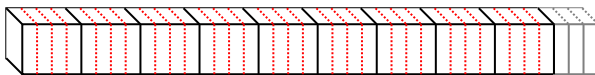
4) $1\frac{2}{3}$




5) $4\frac{1}{5}$



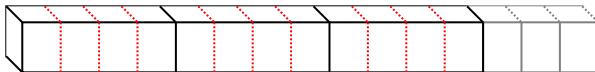
6) $9\frac{3}{4}$



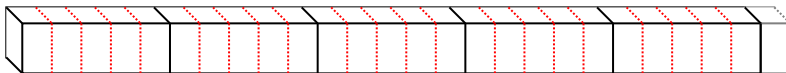
7) $3\frac{1}{2}$



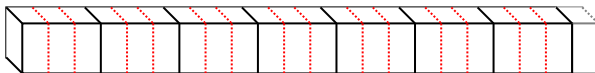
8) $3\frac{3}{4}$



9) $5\frac{1}{5}$



10) $7\frac{1}{3}$



Risposte

Es. 7

1. 15

2. 31

3. 28

4. 5

5. 21

6. 39

7. 7

8. 15

9. 26

10. 22